

PM SHRI KENDRIYA VIDYALAYA SEONI

SUMMER VACATION HOMEWORK

CLASS 1 (HINDI)

1. अपने बारे में 5 वाक्य लिखें।
2. 1 से 20 तक की गिनती हिंदी में लिखें।
3. 5 पेज सुलेख लिखिए ।
4. दस ऐसे फलों के सूची बनाये जिसमें अ , आ ,इ , ई , उ , ऊ , ए , ऐ की मात्रा आती हो, उसका चित्र भी बनाये ।
5. वर्णमाला 2 बार लिखिए एवं बारहखड़ी 2 बार लिखिए ।
6. हिंदी में अपने परिवार के सभी सदस्यों के नाम लिखकर याद कीजिए।
7. विभिन्न प्रकार की सूखी पत्तियों से कोई 5 जानवरों के चित्र बनाए ।
8. अपने राष्ट्रीय प्रतीक चिन्हों के नाम हिंदी में लिखकर याद कीजिए तथा उनके चित्र एक चार्ट पेपर पर चिपकाएं ।

PM SHRI KENDRIYA VIDYALAYA SEONI

CLASS-1

SUBJECT – ENGLISH

HOLIDAY HOMEWORK FOR SUMMER VACASION 2025-26

.....

- 1- Write and learn small and capital letters in cursive hand.
- 2- Write and learn your name, family member's name home address, and contact numbers any two.
- 3- Write and learn any twenty verbs for daily use.
- 4- Talk in English daily .
- 5- Learn any four poems and two stories.
- 6- Practice reading and writing daily.

PM SHRI KENDRIYA VIDYALAYA SEONI

Summer vacation holiday homework

2025-26

Class - 1

GARDENING

1. Draw a diagram to show the parts of plant and label them.
2. Make a bird or animal with leaves and paste in your notebook.
3. Identifying the common garden birds and insects and write their name (At least 5).
4. Draw the garden scene on the chart paper and color it.
5. Learn and write a poem related to plant.
6. Draw the picture of the following :

(in your notebook)

- A) Flower pot
- B) Soil
- C) Flower
- D) Grass
- E) Leaf

SUMMER HOLIDAY HOMEWORK

CLASS: I A

SUBJECT: MATHEMATICS

1. Learn and write multiplication Table from 1 to 10.
2. Learn and write number name 1 to 100.
3. Draw your favourite cartoon character using shapes.
4. Draw any five Shapes and write their names.
5. What comes before, after and between.

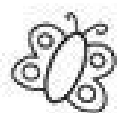
| Before | Between | After |
|---------|-----------|---------|
| _____ 6 | 3 _____ 5 | 4 _____ |
| _____ 8 | 1 _____ 3 | 6 _____ |
| _____ 3 | 4 _____ 6 | 1 _____ |
| _____ 7 | 6 _____ 8 | 5 _____ |
| _____ 5 | 2 _____ 4 | 3 _____ |
| _____ 2 | 7 _____ 9 | 7 _____ |
| _____ 4 | 5 _____ 7 | 2 _____ |

6. Addition Practice:


Calculate each sum.

| | | | | | | | | | |
|--|--|--|--|--|--|--|--|--|--|
| $\begin{array}{r} 9 \\ +9 \\ \hline \end{array}$ | $\begin{array}{r} 8 \\ +1 \\ \hline \end{array}$ | $\begin{array}{r} 5 \\ +9 \\ \hline \end{array}$ | $\begin{array}{r} 7 \\ +6 \\ \hline \end{array}$ | $\begin{array}{r} 6 \\ +2 \\ \hline \end{array}$ | $\begin{array}{r} 5 \\ +7 \\ \hline \end{array}$ | $\begin{array}{r} 9 \\ +2 \\ \hline \end{array}$ | $\begin{array}{r} 5 \\ +5 \\ \hline \end{array}$ | $\begin{array}{r} 9 \\ +3 \\ \hline \end{array}$ | $\begin{array}{r} 3 \\ +5 \\ \hline \end{array}$ |
| $\begin{array}{r} 7 \\ +4 \\ \hline \end{array}$ | $\begin{array}{r} 4 \\ +7 \\ \hline \end{array}$ | $\begin{array}{r} 7 \\ +5 \\ \hline \end{array}$ | $\begin{array}{r} 1 \\ +8 \\ \hline \end{array}$ | $\begin{array}{r} 4 \\ +5 \\ \hline \end{array}$ | $\begin{array}{r} 7 \\ +1 \\ \hline \end{array}$ | $\begin{array}{r} 8 \\ +6 \\ \hline \end{array}$ | $\begin{array}{r} 9 \\ +7 \\ \hline \end{array}$ | $\begin{array}{r} 4 \\ +2 \\ \hline \end{array}$ | $\begin{array}{r} 1 \\ +5 \\ \hline \end{array}$ |
| $\begin{array}{r} 7 \\ +2 \\ \hline \end{array}$ | $\begin{array}{r} 2 \\ +1 \\ \hline \end{array}$ | $\begin{array}{r} 9 \\ +6 \\ \hline \end{array}$ | $\begin{array}{r} 4 \\ +4 \\ \hline \end{array}$ | $\begin{array}{r} 8 \\ +7 \\ \hline \end{array}$ | $\begin{array}{r} 3 \\ +7 \\ \hline \end{array}$ | $\begin{array}{r} 4 \\ +3 \\ \hline \end{array}$ | $\begin{array}{r} 6 \\ +8 \\ \hline \end{array}$ | $\begin{array}{r} 8 \\ +2 \\ \hline \end{array}$ | $\begin{array}{r} 9 \\ +4 \\ \hline \end{array}$ |
| $\begin{array}{r} 8 \\ +5 \\ \hline \end{array}$ | $\begin{array}{r} 3 \\ +6 \\ \hline \end{array}$ | $\begin{array}{r} 7 \\ +8 \\ \hline \end{array}$ | $\begin{array}{r} 6 \\ +4 \\ \hline \end{array}$ | $\begin{array}{r} 2 \\ +7 \\ \hline \end{array}$ | $\begin{array}{r} 8 \\ +9 \\ \hline \end{array}$ | $\begin{array}{r} 1 \\ +6 \\ \hline \end{array}$ | $\begin{array}{r} 9 \\ +5 \\ \hline \end{array}$ | $\begin{array}{r} 7 \\ +7 \\ \hline \end{array}$ | $\begin{array}{r} 3 \\ +3 \\ \hline \end{array}$ |
| $\begin{array}{r} 4 \\ +6 \\ \hline \end{array}$ | $\begin{array}{r} 3 \\ +2 \\ \hline \end{array}$ | $\begin{array}{r} 6 \\ +6 \\ \hline \end{array}$ | $\begin{array}{r} 2 \\ +9 \\ \hline \end{array}$ | $\begin{array}{r} 8 \\ +3 \\ \hline \end{array}$ | $\begin{array}{r} 2 \\ +8 \\ \hline \end{array}$ | $\begin{array}{r} 8 \\ +4 \\ \hline \end{array}$ | $\begin{array}{r} 4 \\ +8 \\ \hline \end{array}$ | $\begin{array}{r} 3 \\ +1 \\ \hline \end{array}$ | $\begin{array}{r} 9 \\ +1 \\ \hline \end{array}$ |

7. Subtraction Practice:



Subtraction



$$\begin{array}{r} 3 \\ - 2 \\ \hline \end{array}$$

$$\begin{array}{r} 7 \\ - 1 \\ \hline \end{array}$$

$$\begin{array}{r} 5 \\ - 4 \\ \hline \end{array}$$

$$\begin{array}{r} 9 \\ - 0 \\ \hline \end{array}$$

$$\begin{array}{r} 9 \\ - 4 \\ \hline \end{array}$$

$$\begin{array}{r} 8 \\ - 5 \\ \hline \end{array}$$

$$\begin{array}{r} 8 \\ - 3 \\ \hline \end{array}$$

$$\begin{array}{r} 9 \\ - 4 \\ \hline \end{array}$$

$$\begin{array}{r} 6 \\ - 2 \\ \hline \end{array}$$

$$\begin{array}{r} 4 \\ - 2 \\ \hline \end{array}$$

$$\begin{array}{r} 6 \\ - 3 \\ \hline \end{array}$$

$$\begin{array}{r} 7 \\ - 3 \\ \hline \end{array}$$










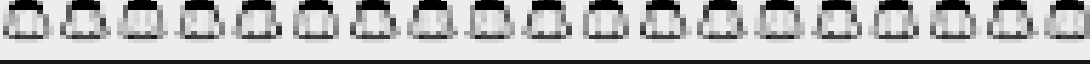
$$\begin{array}{r} 2 \\ - 1 \\ \hline \end{array}$$

$$\begin{array}{r} 9 \\ - 5 \\ \hline \end{array}$$

$$\begin{array}{r} 5 \\ - 3 \\ \hline \end{array}$$

$$\begin{array}{r} 9 \\ - 7 \\ \hline \end{array}$$

8. Count and Write:

| | |
|--|--|
|  | |
|  | |
|  | |
|  | |
|  | |
|  | |
|  | |
|  | |
|  | |
|  | |

NOTE: Do all homework in A-4 SHEET and attached in a file.