

# **Science holiday homework VIth**

**Q1:-What are humans curious about?**

**Q2:-What do we start doing from childhood?**

**Q3:-Explain the meaning of science in your own words?**

**Q4:-write a paragraph on the importance of curiosity?**

**Q5:-Draw a science scene (mountains, sky, plants etc) and write 5 lines about it?**

**#Chapter 3 :-Read and understand chapter 3 and then answer questions.**

**#Project :-Models on parts of plant/thermocool science model ideas.**

# Holiday Homework – Patterns in Numbers

 Q1. Identify the pattern and write next 3 numbers:

1. 1, 1, 1, 1, \_\_\_\_\_, \_\_\_\_\_, \_\_\_\_\_

2. 1, 2, 3, 4, \_\_\_\_\_, \_\_\_\_\_, \_\_\_\_\_

3. 2, 4, 6, 8, \_\_\_\_\_, \_\_\_\_\_, \_\_\_\_\_

4. 1, 3, 5, 7, \_\_\_\_\_, \_\_\_\_\_, \_\_\_\_\_

5. 1, 4, 9, 16, \_\_\_\_\_, \_\_\_\_\_, \_\_\_\_\_

6. 1, 8, 27, 64, \_\_\_\_\_, \_\_\_\_\_, \_\_\_\_\_

7. 1, 2, 4, 8, 16, \_\_\_\_\_, \_\_\_\_\_, \_\_\_\_\_

 **Q2. Write the rule for each sequence:**

Example:

1, 2, 3, 4 → Rule: Add 1 each time

Now do for:

1. 2, 4, 6, 8 → \_\_\_\_\_

2. 1, 3, 6, 10 → \_\_\_\_\_

3. 1, 4, 9, 16 → \_\_\_\_\_

4. 1, 8, 27, 64 → \_\_\_\_\_

 **Q3. Fill in the blanks:**

1. 3, 6, 9, \_\_\_\_, \_\_\_\_

2. 5, 10, 15, \_\_\_\_, \_\_\_\_

3. 1, 1, 2, 3, 5, \_\_\_\_, \_\_\_\_

 **Q4. Match the following:**

<b>Sequence</b>	<b>Type</b>
1, 3, 5, 7	(a) Squares
1, 4, 9, 16	(b) Even numbers
2, 4, 6, 8	(c) Odd numbers

 **Q5. Activity (Fun Task )**

Draw patterns using dots for:

- Triangular numbers (1, 3, 6, 10)
- Square numbers (1, 4, 9, 16)

# Additional Holiday Homework – Patterns in Numbers

 Q6. Find the missing numbers:


1. 4, 7, 10, \_\_\_\_, \_\_\_\_

2. 6, 12, 24, \_\_\_\_, \_\_\_\_

3. 1, 3, 9, 27, \_\_\_\_, \_\_\_\_

4. 2, 5, 11, 23, \_\_\_\_, \_\_\_\_

5. 10, 9, 7, 4, \_\_\_\_, \_\_\_\_

 Q7. Odd one out (identify and explain):

1. 2, 4, 6, 9, 8

2. 1, 4, 9, 16, 20

3. 3, 6, 9, 12, 15

4. 1, 8, 27, 64, 100

 **Q8. Complete the pattern:**

1. A, C, E, G, \_\_\_\_, \_\_\_\_
  2. B, E, H, K, \_\_\_\_, \_\_\_\_
  3. Z, X, V, T, \_\_\_\_, \_\_\_\_
- 

 **Q9. Word problems based on patterns:**

1. A pattern increases by 5 each time. If first number is 7, write next 5 numbers.
  2. A pattern decreases by 3 each time starting from 30. Write next 5 numbers.
  3. Write first 6 multiples of 7.
- 

 **Q10. Find the rule and next term:**

1. 5, 11, 17, 23, \_\_\_\_
2. 2, 6, 18, 54, \_\_\_\_
3. 81, 27, 9, 3, \_\_\_\_
4. 1, 1, 2, 6, 24, \_\_\_\_



 **Q11. Puzzle type** 

1.  $1 + 2 = 3$   
 $3 + 4 = 7$   
 $5 + 6 = 11$   
 $7 + 8 = \underline{\quad}$

2. If  
 $2 \rightarrow 6$   
 $3 \rightarrow 12$   
 $4 \rightarrow 20$   
 $5 \rightarrow \underline{\quad}$

---

 **Q12. Very Important (Exam Level )**

Find the missing term:

1. 2, 4, 12, 48,  $\underline{\quad}$
2. 3, 9, 27,  $\underline{\quad}$
3. 1, 4, 7, 13, 16,  $\underline{\quad}$

# Homework of Math

- What is a point?
- How is a point represented?
- Does a point have length, breadth and height?
- Give the example of models of a point.
- How are points named?
- What is the smallest part of geometry?

Fill in the blanks.

A point has no \_\_\_\_\_, \_\_\_\_\_ or \_\_\_\_\_.

A point is represented by a \_\_\_\_\_.  
Points are named using \_\_\_\_\_ letters.

Topic: Angle

- What is an angle?
- What is vertex of an angle?
- Which measuring instrument is used to measure angles?

# **Write and remember**

# Point

# Line segments

# Rays

# Straight line

# Zero angle

# Acute angle

# Right angle

# Obtuse angle

# Reflex angle

# Complete angle

## 2

## Arithmetic Expressions

## Short Answer Questions

1. What is the value of  $25 + 17$ ?
2. Evaluate  $48 \div 6$ .
3. Write the terms of  $83 - 14$ .
4. Find the value of  $6 \times 9$ .
5. Is  $14 + 3 > 15 + 1$ ?
6. Write  $52 - 9$  as addition of integers.
7. What is the value of  $100 - (25 + 5)$ ?
8. Evaluate  $12 \times 4 - 10$ .
9. Identify the terms in  $6 \times 5 + 3$ .
10. Remove brackets:  $45 - (10 + 5)$ .
11. Find the value of  $(8 + 2) \times 5$ .
12. Evaluate  $36 - 9 + 4$ .
13. Is  $7 \times (4 + 3)$  equal to  $7 \times 4 + 7 \times 3$ ?
14. Write inverse of  $-15$ .
15. Evaluate  $20 - (6 - 2)$ .

13.  $(7 + 5) - 3 = \underline{\hspace{2cm}}$
14.  $6 \times 4 + 3 \times 4 = (\underline{\hspace{1cm}} + \underline{\hspace{1cm}}) \times 4$
15.  $15 - (6 + 2) = \underline{\hspace{2cm}}$
16.  $14 + (8 - 3) = \underline{\hspace{2cm}}$
17.  $36 - 6 - 4 = 36 - (\underline{\hspace{1cm}} + \underline{\hspace{1cm}})$
18.  $3 \times 12 = \underline{\hspace{2cm}}$
19.  $25 \times 4 = \underline{\hspace{2cm}}$
20.  $81 \div 9 = \underline{\hspace{2cm}}$

## True or False

1.  $5 \times (4 + 3) = 5 \times 4 + 3$ .
2.  $24 - (6 + 4) = 24 - 6 - 4$ .
3.  $7 + 8 = 8 + 7$ .
4.  $10 - (3 - 2) = 10 - 3 - 2$ .
5.  $4 \times (5 - 2) = 4 \times 5 - 4 \times 2$ .
6. Addition is associative.
7. Subtraction is commutative.
8.  $3 \times 4 + 2 \times 4 = (3 + 2) \times 4$ .
9.  $50 - (20 + 5) = 25$ .
10.  $(6 + 3) \times 4 = 6 \times 4 + 3 \times 4$ .
11. Removing brackets after minus changes signs.
12.  $100 - (50 - 10) = 60$ .
13.  $8 \times (3 + 2) = 8 \times 3 + 8 \times 2$ .
14.  $20 - 5 + 2 = 17$ .
15.  $9 \times 0 = 9$ .

## Fill in the Blanks

1.  $34 + (6 - 4) = 34 + 6 \underline{\hspace{1cm}} 4$
2.  $50 - (20 + 5) = 50 \underline{\hspace{1cm}} 20 \underline{\hspace{1cm}} 5$
3.  $3 \times (7 + 2) = 3 \times 7 \underline{\hspace{1cm}} 3 \times 2$
4.  $(9 + 4) \times 5 = 9 \times 5 \underline{\hspace{1cm}} 4 \times 5$
5.  $72 \div 8 = \underline{\hspace{2cm}}$
6.  $6 \times (10 - 3) = 6 \times 10 \underline{\hspace{1cm}} 6 \times 3$
7.  $45 - (12 - 5) = 45 \underline{\hspace{1cm}} 12 \underline{\hspace{1cm}} 5$
8.  $8 + (-3) = \underline{\hspace{2cm}}$
9.  $90 - 45 = \underline{\hspace{2cm}}$
10.  $5 \times (9 - 4) = \underline{\hspace{2cm}}$
11.  $64 \div 8 + 6 = \underline{\hspace{2cm}}$
12.  $100 - (30 + 20) = \underline{\hspace{2cm}}$

## Evaluate the Following

1.  $45 + 28 - 16$
2.  $72 \div 8 + 9$
3.  $5 \times 12 - 8$

4.  $36 - (8 + 4)$
5.  $6 \times (9 - 3)$
6.  $84 - 12 \times 3$
7.  $(50 - 10) \div 5$
8.  $4 \times 7 + 3 \times 7$
9.  $100 - (25 - 5)$
10.  $90 \div 10 + 15$
11.  $15 \times 6 - 20$
12.  $(18 + 12) \div 5$
13.  $64 - 4 \times 8$
14.  $8 \times 9 - 7 \times 9$
15.  $5 \times (6 + 4)$
16.  $48 - 6 + 12$
17.  $9 \times (5 - 2)$
18.  $36 \div 6 + 8$
19.  $75 - (20 + 10)$
20.  $4 \times (8 + 2)$

### Compare Using $<$ , $>$ or $=$

1.  $45 - 8$  \_\_\_  $45 - 10$
2.  $6 \times 9$  \_\_\_  $9 \times 6$
3.  $5 \times (7 + 3)$  \_\_\_  $5 \times 7 + 5 \times 3$
4.  $90 - (20 + 5)$  \_\_\_  $90 - 20 - 5$
5.  $(12 + 8) \times 4$  \_\_\_  $12 \times 4 + 8 \times 4$
6.  $100 - (40 - 10)$  \_\_\_  $100 - 40 + 10$
7.  $4 \times (9 - 2)$  \_\_\_  $4 \times 9 - 4 \times 2$
8.  $63 \div 9$  \_\_\_  $81 \div 9$
9.  $6 + 8 - 3$  \_\_\_  $6 + (8 - 3)$
10.  $25 \times (4 + 6)$  \_\_\_  $25 \times 4 + 25 \times 6$

### Word Problems

1. A shopkeeper sells 8 pens each costing ₹12. Find total cost.

2. Rina bought 5 notebooks at ₹18 each and paid ₹100. How much change will she get back?
3. A class has 4 rows with 9 students each. How many students are there in total?
4. A train ticket costs ₹40 for adult and ₹20 for child. Find cost for 3 adults and 2 children.
5. A boy saves ₹200 every month. How much he saves in 6 months?
6. A box contains 12 packets with 6 chocolates each. Find total chocolates.
7. A farmer plants 7 rows with 15 plants each. Find total plants.
8. A snail climbs 4 cm up and slips 1 cm down daily. What is net climb per day?
9. A book costs ₹250. A student gets ₹30 discount. What is final price?
10. A factory produces 125 toys daily. How many toys will be produced in 8 days?

### HOTS (Higher Order Thinking Skills)

1. Without calculation, compare:  $83 - 17 + 1$  and  $83 - 17 - 1$ .
2. Find a quick way to calculate  $99 \times 15$ .
3. Explain why  $5 \times 4 + 3 \neq 5 \times (4 + 3)$ .
4. Rearrange  $7 + 8 - 5 + 2$  in different ways to simplify.
5. Find value of  $1 - 2 + 3 - 4 + 5 - 6 + 7 - 8$ .
6. Using distributive property, calculate  $104 \times 12$ .
7. Remove brackets:  $200 - (50 - \dots)$
8. Create two different expressions. 2 / 3
9. Find missing number:  $423 + \underline{\hspace{1cm}} = 419 + 20$ .
10. Using only 2, 3 and 5 once each, create expressions to get 10.

**Chapter 3 and 4 solve it.**



1. What is science?
2. What is an acid?
3. What is a base?
4. What is a neutral substance?
5. Give one example of an acid found at home.
6. Name one natural indicator.
7. What color does litmus turn in an acid?
8. What color does litmus turn in a base?
9. What is a neutral solution?
10. What is the full form of pH?

1. Explain the importance of science in our daily life with examples.
2. Describe the properties of acids, bases, and neutral substances.
3. Explain the process of neutralization with a diagram.
4. How do natural indicators help us identify acids and bases?
5. Write differences between acids, bases, and neutral substances in a table.

1. Test lemon juice, soap solution, and water using litmus paper. Write your observations.
2. Use turmeric paper to test different substances at home. Record results.
3. Draw and label the pH scale from 1 to 14.
4. Prepare a simple chart showing acids, bases, and neutral substances.

1. Explain the importance of science in our daily life with examples.
2. Describe the properties of acids, bases, and neutral substances.
3. Explain the process of neutralization with a diagram.
4. How do natural indicators help us identify acids and bases?
5. Write differences between acids, bases, and neutral substances in a table.

**#Read and understand chapter 3 and 4 then**  
**answer questions.**



Summer vacation Holiday homework.  
Class 3. Mathematics

- 1- Prepare a table chart 400 to 600 in home work copy .
- 2- Make a different view of any four 3D objects (Top , Front , Side view) .
- 3 - Make cutouts of geometrical shapes ( Square , rectangle , triangle , circle )
- 4 - Make a jio board .
- 5 - Make a place value chart or model 900 to 1000.
- 6 - Revise the chapter 1, 2 and 3 for PT -1.
- 7 - Learn and write the table 2-15

Class 4

TWAU

- 1- Draw a map of India on A4 size sheet.
- 2- Make two poster on the following topics  
Roll number 1 to 20 : Van mahotsav  
Roll number 1 to 20 : Rain water harvesting  
  
Roll number 21 to 40: save environment  
Roll number 21 to 40: harvest festivals
- 3: Keep a water bowl on your terrace for birds and refill it everyday.
- 4 - Make artefacts using natural things (A4 size sheet).
- 5 - Revise chapter 1,2 and 3 for PT-1.



\*ग्रीष्मकालीन अवकाश हेतु गृहकार्य\*

\*कक्षा - 5 विषय - हिन्दी\*

1- 10 पेज सुलेख सुंदर लेख में लिखें।

2- पाठ 1,2 और 3 को पढ़ें एवं प्रश्न-उत्तर याद करें।

3- आप गर्मियों की छुट्टियों में कहां घूमने गए ? वहां का मौसम , लोग , भोजन , दृश्य व पहनावा आदि के बारे में अपने विचार व्यक्त कीजिए (दो पेज में लिखिए)

4- अपने विचार से कोई 10 शब्द लिखिए, उन प्रत्येक शब्दों के विलोम, पर्यायवाची और अपने वाक्य में प्रयोग करें।

5- 'पेड़ का महत्व' पर निबंध लिखें ।

6- " पर्यावरण संरक्षण "पर एक पोस्टर बनाएं और उसमें एक छोटा संदेश पांच पंक्तियों में लिखिए ।

7- अपने पसंदीदा खेल का चित्र बनाकर उसके बारे में लिखिए (दो पेज ) ।

8 - यदि आप गांव के मुखिया या प्रधान बन जाएं तो गांव की व्यवस्था में क्या-क्या बदलाव करना चाहेंगे , जिससे गांव समृद्ध और खुशहाल हो सके ( बड़ों से पहले चर्चा करें उसके बाद लिखें )



### 1. Reading Task (Daily Habit)

- Read **one short story** every alternate day (from your English book or any storybook).
- Write the following in a notebook:
  - Date
  - Name of the story
  - Characters
  - 5 new words with meanings
  - What you learned from the story (2–3 lines)

### 2 Handwriting Practice

Write **one page daily** in neat handwriting from your English book.

Focus on:

- Proper spacing
- Capital letters
- Full stops

### 3. Grammar Practice

- What is **NOUN**? What are **Countable Nouns**? What are **Uncountable Nouns**?  
Do page no. 32 and 33 of your textbook.
- Write **plural number** of these nouns: man, woman, tooth, foot, child, bench, bunch, brush, bus, class, key, boy, day, city, lady, monkey, toy, leaf, wife, knife, book, pen, chair, table,
- **Write V<sup>2</sup> and V<sup>3</sup>** of these verbs and learn them: eat, go, come, run, fall, sing, drink, sleep, weep, bring, buy, think, say, lay, tell, hit, read, write, sit, stand, see, give, take, make, get, have, do
- Write **comparative and superlative degrees** of these adjectives: good, bad, many, little, big, small, tall, long, short, cheap, smart, high, long, near, far, close, large, lucky, happy, healthy, handsome, beautiful, powerful, intelligent.
- **Write one sentence** starting from each of these question words: Who, where, when, why, what, which, whose, whom.

### 4. CREATIVE WRITING

Make a colourful poster on **World Environment Day** on an A4 sheet. Write 5 Lines on World Environment Day

Write **10 news headlines** on an **A4 sheet**. Each headline should be from a **different date**.

Topics should be related to: School, Children, Education

Write neatly and underline each date. You may decorate the page with colours or drawings.

Summer Vacation Homework

Class 2

English

**Read one short English story every week. After reading , Write :**

- a. Name of the Story
- b. Name of the Characters
- c. Moral of the story

**Write 5 lines daily in neat handwriting from your English textbook**

**Picture Dictionary ( Project)**

(Take a scrapbook or notebook Paste at least 10 pictures of following. Write the names neatly under each picture)

Vegetables

Fruits

Flowers

Food Items

Domestic Animals

Wild Animals

Water Animals

Birds

Transport

Places

Games

Stationery

Electrical Appliances

Tools

Professions

Things In The Kitchen

(Note Paste printed black & white pictures Then **colour them neatly** )

Summer vacation holiday homework class 5 math ( 2026-27)

Q1) Learn and write tables from 10 to 25

Q2) Write and Learn number name from 1000 to 2000 b)10000 c) 21000 d) 33000 e) 345000 f) 70000 g) 100000.

Q 3 Write and learn about types of angles?

Q) 4 Define with example a) like fraction b) unlike fraction c) unit fraction d) proper fraction e) Improper fraction f) mixed fraction g) equivalent fraction.

Q 5 Do in half chart paper. (project work)

Roll number 1 to 6 Page 3 and 4

Roll number 7 to 12 page 5.

Roll number 13 to 18 page 6

Roll number 19 to 24 page 8

Roll number 25 to 30 Page 36

Roll number 31 to 38 page33

Subject teacher :- HEMANT KUMAR

Summer vacation holiday homework class 4 subject math 2026-27

Q1) Learn and write tables from 5 to 20.

Q2) Write number name of a) 1 to 50 b) 100 c) 150 d) 500.

Q 3 Write difference between prism and pyramid ?

Q 4 Write about number of faces edges and corners of at least 10 pyramid and 10 prism and draw them?

Q5. Write and learn about different type of angles?

Q 6 Make model of any one pyramid and prism?

Subject teacher :- HEMANT KUMAR

Summer vacation holiday homework class 3 TWAU

Q 1 Draw family tree up to great grandfather?

Q 2 Write about all the activities you do at home to help your elders?

Q 3 Write about 15 sentences on Kumbh Mela and draw picture related to it?

Q 4 Write about five sentences on any two festivals of a) Hindu b) Muslim

c) Christian d) sikh e) National .

Q5 Draw on a half chart paper (PROJCT WORK)

a) Roll number 1 to 10 page 18.

b) Roll number 11 to 20 page 32

c) Roll number 21 to 30 Page 36

d) Roll number 31 to 40 page 41.

Subject teacher :- HEMANT KUMAR.

## Summer Holiday Homework

Class 6

Sub -SST

- ◆ Types of Sources: Prepare a table classifying Archaeological, Literary, and Oral sources (e.g., coins, manuscripts, stories) with examples.
- ◆ Monuments: Collect pictures of at least 5 different monuments (forts, tombs) and write their location and one key feature.
- ◆ Family Tree: Create a family tree on an A4 sheet.
- ◆ Solar System: Create a model or draw a diagram of the solar system.
- ◆ Map Work: On an outline map of India, label all states and their capitals. Mark neighbors and major physical features (Himalayas, Deccan Plateau).
- ◆ Diversity: Compare two regions of India (e.g., Ladakh and Kerala) highlighting differences in clothing, food, and culture.
- ◆ Preamble: Learn and write the Preamble to the Constitution of India.
- ◆ Timeline: Create a timeline of your life, from birth to the present.

◆◆ Environmental Awareness: Make a poster on "Environmental Conservation" and write five slogans.

### 1. Reading Task (Daily Habit)

- Read **one short story** every alternate day (from your English book or any storybook).
- Write the following in a notebook:
  - Date
  - Name of the story
  - Characters
  - 5 new words with meanings
  - What you learned from the story (2–3 lines)

### 2 Handwriting Practice

Write **one page daily** in neat handwriting from your English book.

Focus on:

- Proper spacing
- Capital letters
- Full stops

### 3. Grammar Practice

- What is **NOUN**? What are **Countable Nouns**? What are **Uncountable Nouns**?  
Do page no. 32 and 33 of your textbook.
- Write **plural number** of these nouns: man, woman, tooth, foot, child, bench, bunch, brush, bus, class, key, boy, day, city, lady, monkey, toy, leaf, wife, knife, book, pen, chair, table,
- **Write V<sup>2</sup> and V<sup>3</sup>** of these verbs and learn them: eat, go, come, run, fall, sing, drink, sleep, weep, bring, buy, think, say, lay, tell, hit, read, write, sit, stand, see, give, take, make, get, have, do
- Write **comparative and superlative degrees** of these adjectives: good, bad, many, little, big, small, tall, long, short, cheap, smart, high, long, near, far, close, large, lucky, happy, healthy, handsome, beautiful, powerful, intelligent.
- **Write one sentence** starting from each of these question words: Who, where, when, why, what, which, whose, whom.

### 4. CREATIVE WRITING

Make a colourful poster on **World Environment Day** on an A4 sheet. Write 5 Lines on World Environment Day

Write **10 news headlines** on an **A4 sheet**. Each headline should be from a **different date**.

Topics should be related to: School, Children, Education

Write neatly and underline each date. You may decorate the page with colours or drawings.

Summer Vacation Homework

Class 2

English

**Read one short English story every week. After reading , Write :**

- a. Name of the Story
- b. Name of the Characters
- c. Moral of the story

**Write 5 lines daily in neat handwriting from your English textbook**

**Picture Dictionary ( Project)**

(Take a scrapbook or notebook Paste at least 10 pictures of following. Write the names neatly under each picture)

Vegetables

Fruits

Flowers

Food Items

Domestic Animals

Wild Animals

Water Animals

Birds

Transport

Places

Games

Stationery

Electrical Appliances

Tools

Professions

Things In The Kitchen

(Note Paste printed black & white pictures Then **colour them neatly** )

## Mathematics Homework

1. Write counting numbers from 1 to 300.

2. Write multiplication tables from 2 to 20

3. Write the names of all the months of the year and the number of days in each month.

(Project Work – Use a chart paper)

4. Draw different shapes and write their names

5. Write the number name from 101 to 150.

6. Two digit addition

$$\begin{array}{r} 63 \\ + 18 \\ \hline \end{array}$$

$$\begin{array}{r} 57 \\ + 32 \\ \hline \end{array}$$

$$\begin{array}{r} 29 \\ + 66 \\ \hline \end{array}$$

$$\begin{array}{r} 45 \\ + 64 \\ \hline \end{array}$$

$$\begin{array}{r} 86 \\ + 13 \\ \hline \end{array}$$

$$\begin{array}{r} 74 \\ + 21 \\ \hline \end{array}$$

$$\begin{array}{r} 45 \\ + 26 \\ \hline \end{array}$$

$$\begin{array}{r} 86 \\ + 13 \\ \hline \end{array}$$

7. Word problem

## Word Problems

- Riya has 45 candies. She bought 25 more. How many candies does she have now?
- A box has 72 apples. 36 are eaten. How many apples are left?
- There are 8 bags with 5 marbles each. Total? \_\_\_\_\_
- 56 pencils shared among 7 students. Each gets? \_\_\_\_\_
- A shop sold 120 toys and got 30 more. Total toys? \_\_\_\_\_
- 90 balloons, 45 burst. Remaining? \_\_\_\_\_
- 9 rows of chairs, 6 in each. Total chairs? \_\_\_\_\_
- 64 chocolates shared among 8 kids. Each gets? \_\_\_\_\_

---

8. Place value.

**1**  Write Tens and Ones.

a) 45

Tens	Ones

b) 67

Tens	Ones

c) 89

Tens	Ones

d) 23

Tens	Ones

**2**  Expand the numbers.

a)  $34 = \underline{\quad\quad} + \underline{\quad\quad}$

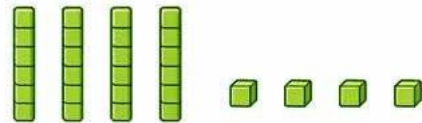
b)  $56 = \underline{\quad\quad} + \underline{\quad\quad}$

c)  $78 = \underline{\quad\quad} + \underline{\quad\quad}$


d)  $91 = \underline{\quad\quad} + \underline{\quad\quad}$

**3**  Form numbers.


a) 4 tens and 5 ones =



b) 7 tens and 2 ones =



c) 9 tens and 0 ones =



**(Convert numerals into words)**

• 14 = \_\_\_\_\_

• 27 = \_\_\_\_\_

• 35 = \_\_\_\_\_

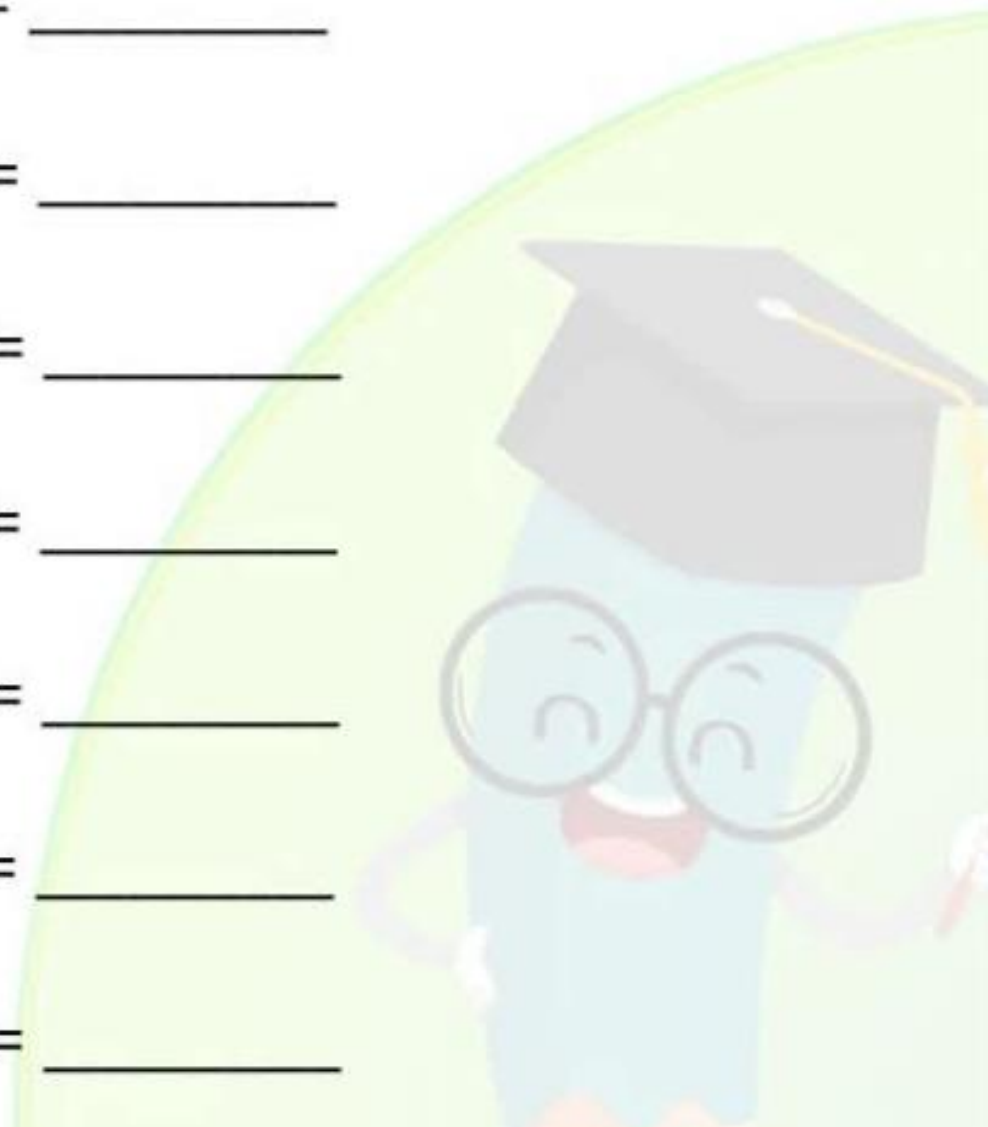
• 49 = \_\_\_\_\_

• 58 = \_\_\_\_\_

• 63 = \_\_\_\_\_

• 76 = \_\_\_\_\_

• 89 = \_\_\_\_\_



ग्रीष्मकालीन अवकाश हेतु गृहकार्य

कक्षा - 7 विषय - हिन्दी

1- 10 पेज सुलेख लिखें।

2- Ch-1, Ch-2, Ch-3 के शब्दार्थ एवं प्रश्न-उत्तर याद करें।

3- अपनी पाठ्य पुस्तक से कोई 2 कविता और उनके कवि का जीवन परिचय लिखें और याद करें।

4- अपने विचार से कोई 10 शब्द लिखिए, उन प्रत्येक शब्दों के विलोम, पर्यायवाची और अपने वाक्य में प्रयोग करें।

5- 'पेड़ का महत्व' पर निबंध लिखें।

6- Ch-1 'माँ कह एक कहानी' का सन्दर्भ सहित व्याख्या करें।

7- व्याकरण की एक नोटबुक बनायें, उसमें संज्ञा, सर्वनाम, विशेषण, क्रिया की परिभाषा उदाहरण सहित लिखें।

ग्रीष्मकालीन अवकाश हेतु गृहकार्य

कक्षा - 7 विषय - संस्कृत

1- प्रथमः, द्वितीयः, तृतीयः पाठ का उच्चारण करें एवं उनके अर्थ समझें।

2- प्रथमः, द्वितीयः, तृतीयः पाठ के सभी शब्दार्थ याद करें।

3- अकारान्त राम (पुं०), इकारान्त हरि (पुं०), आकारान्त बालिका (स्त्रीलिंग) का रूप याद करें।

4- पठ्, पिब्, लिख् का पाँच लकार में धातुरूप याद करें।

5- 'अस्माकं देशः' पर संस्कृत में 10 वाक्य लिखें।

6- 10 अंगों के नाम संस्कृत में लिखें।

7- संस्कृत में 50 तक गिनती लिखें और याद करें

कक्षा - 6 संस्कृत

ग्रीष्मकालीन अवकाश हेतु गृहकार्य

1- स्वर कितने प्रकार के होते हैं और उनमें कौन-कौन से वर्ण आते हैं, लिखें और याद करें।

2- व्यंजन के प्रकार एवं उनके अन्तर्गत आने वाले वर्ण लिखें और याद करें।

3- स्पर्श व्यंजन के उच्चारण स्थान लिखें और याद करें।

4- पेज सं० 9 (वयं शब्दार्थान् जानीमः) में जितने शब्दार्थ हैं, याद करें।

5- अकारान्त पुल्लिंग 'बालक' का रूप और अकारान्त स्त्रीलिंग 'बालिका' का रूप याद करें।

6- अपने विद्यालय पर संस्कृत में निबंध लिखें।

7- 'पठ्', 'गम्' का पाँच लकार में रूप याद करें।

8- 10 फलों के नाम संस्कृत में लिखें।

कक्षा - 6 विषय - हिंदी

ग्रीष्मकालीन अवकाश हेतु गृहकार्य :-

1- 10 पेज सुलेख लिखना है।

2- Ch-1, Ch-2, Ch-3 में जितने शब्दार्थ हैं, और जितने प्रश्न उत्तर हैं, उन्हें याद करना है।

3- Ch-1 'मातृभूमि' का सन्दर्भ सहित अर्थ लिखें।

4- अपनी पाठ्य पुस्तक से कोई 3 कविता याद करना है।

5- Ch-1, Ch-2, Ch-3 के लेखक एवं कवि का जीवन परिचय याद करें।

6- राष्ट्रभाषा हिन्दी पर 10 वाक्य लिखें।

7- व्याकरण की एक नोटबुक बनायें और उसमें संज्ञा, सर्वनाम, विशेषण, क्रिया की परिभाषा उदाहरण सहित लिखें। और 20 पर्यायवाची शब्द, 20 विलोम, 20 तत्सम-तद्भव शब्द लिखें और याद करें।

## Mathematics Homework

1. Write counting numbers from 1 to 300.

2. Write multiplication tables from 2 to 20

3. Write the names of all the months of the year and the number of days in each month.

(Project Work – Use a chart paper)

4. Draw different shapes and write their names

5. Write the number name from 101 to 150.

6. Two digit addition

$$\begin{array}{r} 63 \\ + 18 \\ \hline \end{array}$$

$$\begin{array}{r} 57 \\ + 32 \\ \hline \end{array}$$

$$\begin{array}{r} 29 \\ + 66 \\ \hline \end{array}$$

$$\begin{array}{r} 45 \\ + 64 \\ \hline \end{array}$$

$$\begin{array}{r} 86 \\ + 13 \\ \hline \end{array}$$

$$\begin{array}{r} 74 \\ + 21 \\ \hline \end{array}$$

$$\begin{array}{r} 45 \\ + 26 \\ \hline \end{array}$$

$$\begin{array}{r} 86 \\ + 13 \\ \hline \end{array}$$

7. Word problem

## Word Problems

- Riya has 45 candies. She bought 25 more. How many candies does she have now?
- A box has 72 apples. 36 are eaten. How many apples are left?
- There are 8 bags with 5 marbles each. Total? \_\_\_\_
- 56 pencils shared among 7 students. Each gets? \_\_\_\_
- A shop sold 120 toys and got 30 more. Total toys? \_\_\_\_
- 90 balloons, 45 burst. Remaining? \_\_\_\_
- 9 rows of chairs, 6 in each. Total chairs? \_\_\_\_
- 64 chocolates shared among 8 kids. Each gets? \_\_\_\_

---

8. Place value.

**1**  Write Tens and Ones.

a) 45

Tens	Ones

b) 67

Tens	Ones

c) 89

Tens	Ones

d) 23

Tens	Ones

**2**  Expand the numbers.

a)  $34 = \underline{\quad\quad} + \underline{\quad\quad}$

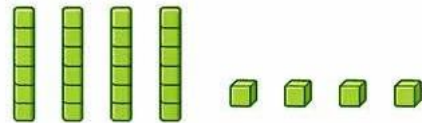
b)  $56 = \underline{\quad\quad} + \underline{\quad\quad}$

c)  $78 = \underline{\quad\quad} + \underline{\quad\quad}$


d)  $91 = \underline{\quad\quad} + \underline{\quad\quad}$

**3**  Form numbers.


a) 4 tens and 5 ones =



b) 7 tens and 2 ones =



c) 9 tens and 0 ones =



**(Convert numerals into words)**

• 14 = \_\_\_\_\_

• 27 = \_\_\_\_\_

• 35 = \_\_\_\_\_

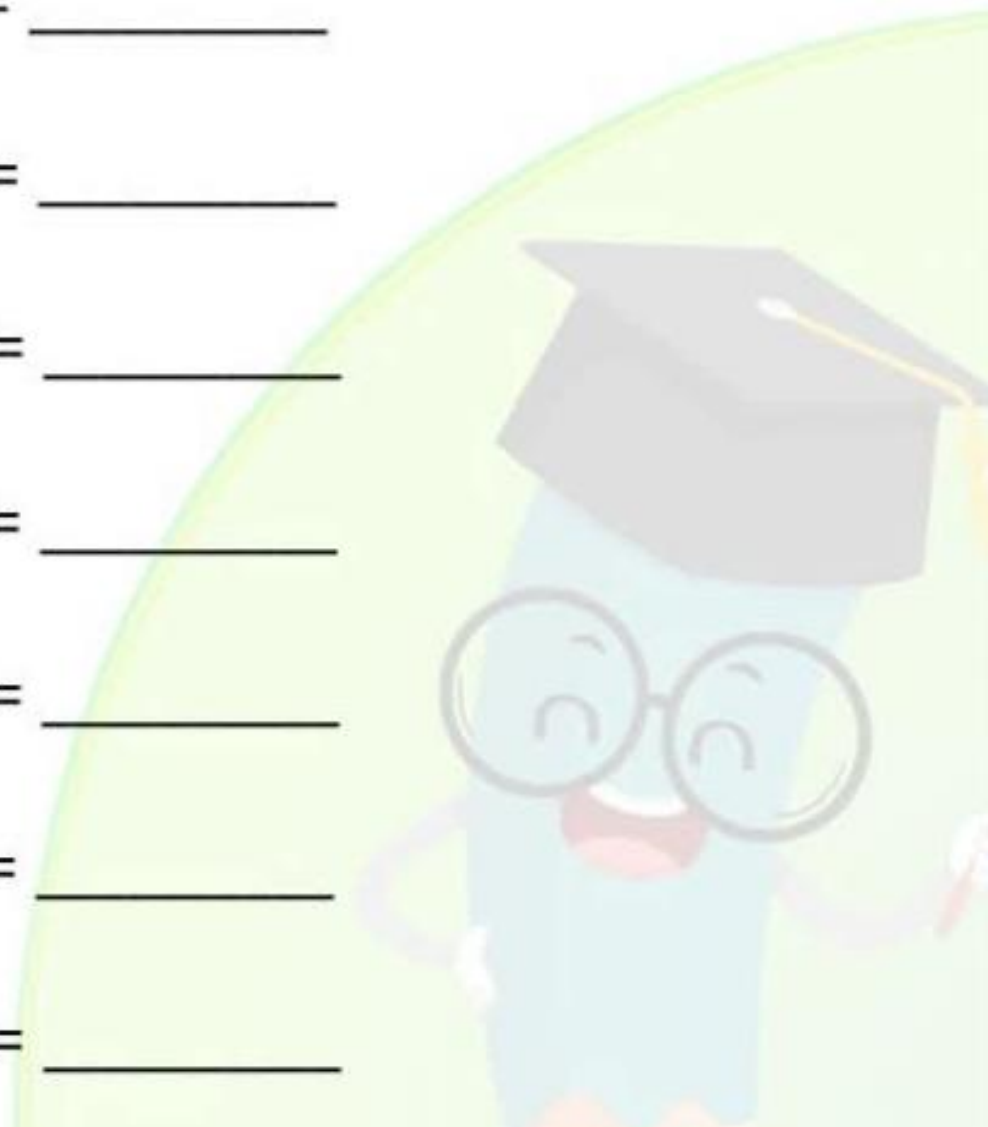
• 49 = \_\_\_\_\_

• 58 = \_\_\_\_\_

• 63 = \_\_\_\_\_

• 76 = \_\_\_\_\_

• 89 = \_\_\_\_\_



## Summer Vacation Holiday Homework

Class-7.

Sub.- SST

1. Map work (Label and locate 16 Mahajanapada with their capitals on India Map and paste in your notebook)
2. What are some key geographical features of India.
3. Write about a tourist place of India which you like the most.
4. What are the three main ranges of Himalaya? Explain with diagram.
5. Write about the 'Cold Desert of India'
6. Write a paragraph on World Environment Day (5 June).
7. Write about on a local historical place nearby you.
8. Write about the fundamental rights of Indian citizens given by the Indian Constitution.
9. Write about the fundamental Duties of Indian citizens given by the Indian Constitution.
10. Write and learn the 'Preamble' of the Indian Constitution.

Summer vacation Holiday homework.  
Class 3. Mathematics

- 1- Prepare a table chart 400 to 600 in home work copy .
- 2- Make a different view of any four 3D objects (Top , Front , Side view) .
- 3 - Make cutouts of geometrical shapes ( Square , rectangle , triangle , circle )
- 4 - Make a jio board .
- 5 - Make a place value chart or model 900 to 1000.
- 6 - Revise the chapter 1, 2 and 3 for PT -1.
- 7 - Learn and write the table 2-15

Class 4

TWAU

1- Draw a map of India on A4 size sheet.

2- Make two poster on the following topics

Roll number 1 to 20 : Van mahotsav

Roll number 1 to 20 : Rain water harvesting

Roll number 21 to 40: save environment

Roll number 21 to 40: harvest festivals

3: Keep a water bowl on your terrace for birds and refill it everyday.

4 - Make artefacts using natural things (A4 size sheet).

5 - Revise chapter 1,2 and 3 for PT-1.



\*ग्रीष्मकालीन अवकाश हेतु गृहकार्य\*

\*कक्षा - 5 विषय - हिन्दी\*

1- 10 पेज सुलेख सुंदर लेख में लिखें।

2- पाठ 1,2 और 3 को पढ़ें एवं प्रश्न-उत्तर याद करें।

3- आप गर्मियों की छुट्टियों में कहां घूमने गए ? वहां का मौसम , लोग , भोजन , दृश्य व पहनावा आदि के बारे में अपने विचार व्यक्त कीजिए (दो पेज में लिखिए)

4- अपने विचार से कोई 10 शब्द लिखिए, उन प्रत्येक शब्दों के विलोम, पर्यायवाची और अपने वाक्य में प्रयोग करें।

5- 'पेड़ का महत्व' पर निबंध लिखें ।

6- " पर्यावरण संरक्षण "पर एक पोस्टर बनाएं और उसमें एक छोटा संदेश पांच पंक्तियों में लिखिए ।

7- अपने पसंदीदा खेल का चित्र बनाकर उसके बारे में लिखिए (दो पेज ) ।

8 - यदि आप गांव के मुखिया या प्रधान बन जाएं तो गांव की व्यवस्था में क्या-क्या बदलाव करना चाहेंगे , जिससे गांव समृद्ध और खुशहाल हो सके ( बड़ों से पहले चर्चा करें उसके बाद लिखें )



### 1. Reading Task (Daily Habit)

- Read **one short story** every alternate day (from your English book or any storybook).
- Write the following in a notebook:
  - Date
  - Name of the story
  - Characters
  - 5 new words with meanings
  - What you learned from the story (2–3 lines)

### 2 Handwriting Practice

Write **one page daily** in neat handwriting from your English book.

Focus on:

- Proper spacing
- Capital letters
- Full stops

### 3. Grammar Practice

- What is **NOUN**? What are **Countable Nouns**? What are **Uncountable Nouns**?  
Do page no. 32 and 33 of your textbook.
- Write **plural number** of these nouns: man, woman, tooth, foot, child, bench, bunch, brush, bus, class, key, boy, day, city, lady, monkey, toy, leaf, wife, knife, book, pen, chair, table,
- **Write V<sup>2</sup> and V<sup>3</sup>** of these verbs and learn them: eat, go, come, run, fall, sing, drink, sleep, weep, bring, buy, think, say, lay, tell, hit, read, write, sit, stand, see, give, take, make, get, have, do
- Write **comparative and superlative degrees** of these adjectives: good, bad, many, little, big, small, tall, long, short, cheap, smart, high, long, near, far, close, large, lucky, happy, healthy, handsome, beautiful, powerful, intelligent.
- **Write one sentence** starting from each of these question words: Who, where, when, why, what, which, whose, whom.

### 4. CREATIVE WRITING

Make a colourful poster on **World Environment Day** on an A4 sheet. Write 5 Lines on World Environment Day

Write **10 news headlines** on an **A4 sheet**. Each headline should be from a **different date**.

Topics should be related to: School, Children, Education

Write neatly and underline each date. You may decorate the page with colours or drawings.

Summer Vacation Homework

Class 2

English

**Read one short English story every week. After reading , Write :**

- a. Name of the Story
- b. Name of the Characters
- c. Moral of the story

**Write 5 lines daily in neat handwriting from your English textbook**

**Picture Dictionary ( Project)**

(Take a scrapbook or notebook Paste at least 10 pictures of following. Write the names neatly under each picture)

Vegetables

Fruits

Flowers

Food Items

Domestic Animals

Wild Animals

Water Animals

Birds

Transport

Places

Games

Stationery

Electrical Appliances

Tools

Professions

Things In The Kitchen

(Note Paste printed black & white pictures Then **colour them neatly** )

Summer vacation holiday homework class 5 math ( 2026-27)

Q1) Learn and write tables from 10 to 25

Q2) Write and Learn number name from 1000 to 2000 b)10000 c) 21000 d) 33000 e) 345000 f) 70000 g) 100000.

Q 3 Write and learn about types of angles?

Q) 4 Define with example a) like fraction b) unlike fraction c) unit fraction d) proper fraction e) Improper fraction f) mixed fraction g) equivalent fraction.

Q 5 Do in half chart paper. (project work)

Roll number 1 to 6 Page 3 and 4

Roll number 7 to 12 page 5.

Roll number 13 to 18 page 6

Roll number 19 to 24 page 8

Roll number 25 to 30 Page 36

Roll number 31 to 38 page33

Subject teacher :- HEMANT KUMAR

Summer vacation holiday homework class 4 subject math 2026-27

Q1) Learn and write tables from 5 to 20.

Q2) Write number name of a) 1 to 50 b) 100 c) 150 d) 500.

Q 3 Write difference between prism and pyramid ?

Q 4 Write about number of faces edges and corners of at least 10 pyramid and 10 prism and draw them?

Q5. Write and learn about different type of angles?

Q 6 Make model of any one pyramid and prism?

Subject teacher :- HEMANT KUMAR

Summer vacation holiday homework class 3 TWAU

Q 1 Draw family tree up to great grandfather?

Q 2 Write about all the activities you do at home to help your elders?

Q 3 Write about 15 sentences on Kumbh Mela and draw picture related to it?

Q 4 Write about five sentences on any two festivals of a) Hindu b) Muslim

c) Christian d) sikh e) National .

Q5 Draw on a half chart paper (PROJCT WORK)

a) Roll number 1 to 10 page 18.

b) Roll number 11 to 20 page 32

c) Roll number 21 to 30 Page 36

d) Roll number 31 to 40 page 41.

Subject teacher :- HEMANT KUMAR.

## Summer Holiday Homework

Class 6

Sub -SST

- ◆ Types of Sources: Prepare a table classifying Archaeological, Literary, and Oral sources (e.g., coins, manuscripts, stories) with examples.
- ◆ Monuments: Collect pictures of at least 5 different monuments (forts, tombs) and write their location and one key feature.
- ◆ Family Tree: Create a family tree on an A4 sheet.
- ◆ Solar System: Create a model or draw a diagram of the solar system.
- ◆ Map Work: On an outline map of India, label all states and their capitals. Mark neighbors and major physical features (Himalayas, Deccan Plateau).
- ◆ Diversity: Compare two regions of India (e.g., Ladakh and Kerala) highlighting differences in clothing, food, and culture.
- ◆ Preamble: Learn and write the Preamble to the Constitution of India.
- ◆ Timeline: Create a timeline of your life, from birth to the present.

◆◆ Environmental Awareness: Make a poster on "Environmental Conservation" and write five slogans.

### 1. Reading Task (Daily Habit)

- Read **one short story** every alternate day (from your English book or any storybook).
- Write the following in a notebook:
  - Date
  - Name of the story
  - Characters
  - 5 new words with meanings
  - What you learned from the story (2–3 lines)

### 2 Handwriting Practice

Write **one page daily** in neat handwriting from your English book.

Focus on:

- Proper spacing
- Capital letters
- Full stops

### 3. Grammar Practice

- What is **NOUN**? What are **Countable Nouns**? What are **Uncountable Nouns**?  
Do page no. 32 and 33 of your textbook.
- Write **plural number** of these nouns: man, woman, tooth, foot, child, bench, bunch, brush, bus, class, key, boy, day, city, lady, monkey, toy, leaf, wife, knife, book, pen, chair, table,
- **Write V<sup>2</sup> and V<sup>3</sup>** of these verbs and learn them: eat, go, come, run, fall, sing, drink, sleep, weep, bring, buy, think, say, lay, tell, hit, read, write, sit, stand, see, give, take, make, get, have, do
- Write **comparative and superlative degrees** of these adjectives: good, bad, many, little, big, small, tall, long, short, cheap, smart, high, long, near, far, close, large, lucky, happy, healthy, handsome, beautiful, powerful, intelligent.
- **Write one sentence** starting from each of these question words: Who, where, when, why, what, which, whose, whom.

### 4. CREATIVE WRITING

Make a colourful poster on **World Environment Day** on an A4 sheet. Write 5 Lines on World Environment Day

Write **10 news headlines** on an **A4 sheet**. Each headline should be from a **different date**.

Topics should be related to: School, Children, Education

Write neatly and underline each date. You may decorate the page with colours or drawings.

Summer Vacation Homework

Class 2

English

**Read one short English story every week. After reading , Write :**

- a. Name of the Story
- b. Name of the Characters
- c. Moral of the story

**Write 5 lines daily in neat handwriting from your English textbook**

**Picture Dictionary ( Project)**

(Take a scrapbook or notebook Paste at least 10 pictures of following. Write the names neatly under each picture)

Vegetables

Fruits

Flowers

Food Items

Domestic Animals

Wild Animals

Water Animals

Birds

Transport

Places

Games

Stationery

Electrical Appliances

Tools

Professions

Things In The Kitchen

(Note Paste printed black & white pictures Then **colour them neatly** )

## Mathematics Homework

1. Write counting numbers from 1 to 300.

2. Write multiplication tables from 2 to 20

3. Write the names of all the months of the year and the number of days in each month.

(Project Work – Use a chart paper)

4. Draw different shapes and write their names

5. Write the number name from 101 to 150.

6. Two digit addition

$$\begin{array}{r} 63 \\ + 18 \\ \hline \end{array}$$

$$\begin{array}{r} 57 \\ + 32 \\ \hline \end{array}$$

$$\begin{array}{r} 29 \\ + 66 \\ \hline \end{array}$$

$$\begin{array}{r} 45 \\ + 64 \\ \hline \end{array}$$

$$\begin{array}{r} 86 \\ + 13 \\ \hline \end{array}$$

$$\begin{array}{r} 74 \\ + 21 \\ \hline \end{array}$$

$$\begin{array}{r} 45 \\ + 26 \\ \hline \end{array}$$

$$\begin{array}{r} 86 \\ + 13 \\ \hline \end{array}$$

7. Word problem

## Word Problems

- Riya has 45 candies. She bought 25 more. How many candies does she have now?
- A box has 72 apples. 36 are eaten. How many apples are left?
- There are 8 bags with 5 marbles each. Total? \_\_\_\_\_
- 56 pencils shared among 7 students. Each gets? \_\_\_\_\_
- A shop sold 120 toys and got 30 more. Total toys? \_\_\_\_\_
- 90 balloons, 45 burst. Remaining? \_\_\_\_\_
- 9 rows of chairs, 6 in each. Total chairs? \_\_\_\_\_
- 64 chocolates shared among 8 kids. Each gets? \_\_\_\_\_

---

8. Place value.

**1**  Write Tens and Ones.

a) 45

Tens	Ones

b) 67

Tens	Ones

c) 89

Tens	Ones

d) 23

Tens	Ones

**2**  Expand the numbers.

a)  $34 = \underline{\quad\quad} + \underline{\quad\quad}$

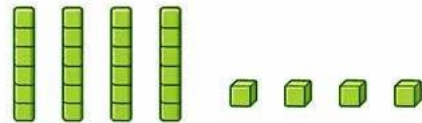
b)  $56 = \underline{\quad\quad} + \underline{\quad\quad}$

c)  $78 = \underline{\quad\quad} + \underline{\quad\quad}$


d)  $91 = \underline{\quad\quad} + \underline{\quad\quad}$

**3**  Form numbers.


a) 4 tens and 5 ones =



b) 7 tens and 2 ones =



c) 9 tens and 0 ones =



**(Convert numerals into words)**

• 14 = \_\_\_\_\_

• 27 = \_\_\_\_\_

• 35 = \_\_\_\_\_

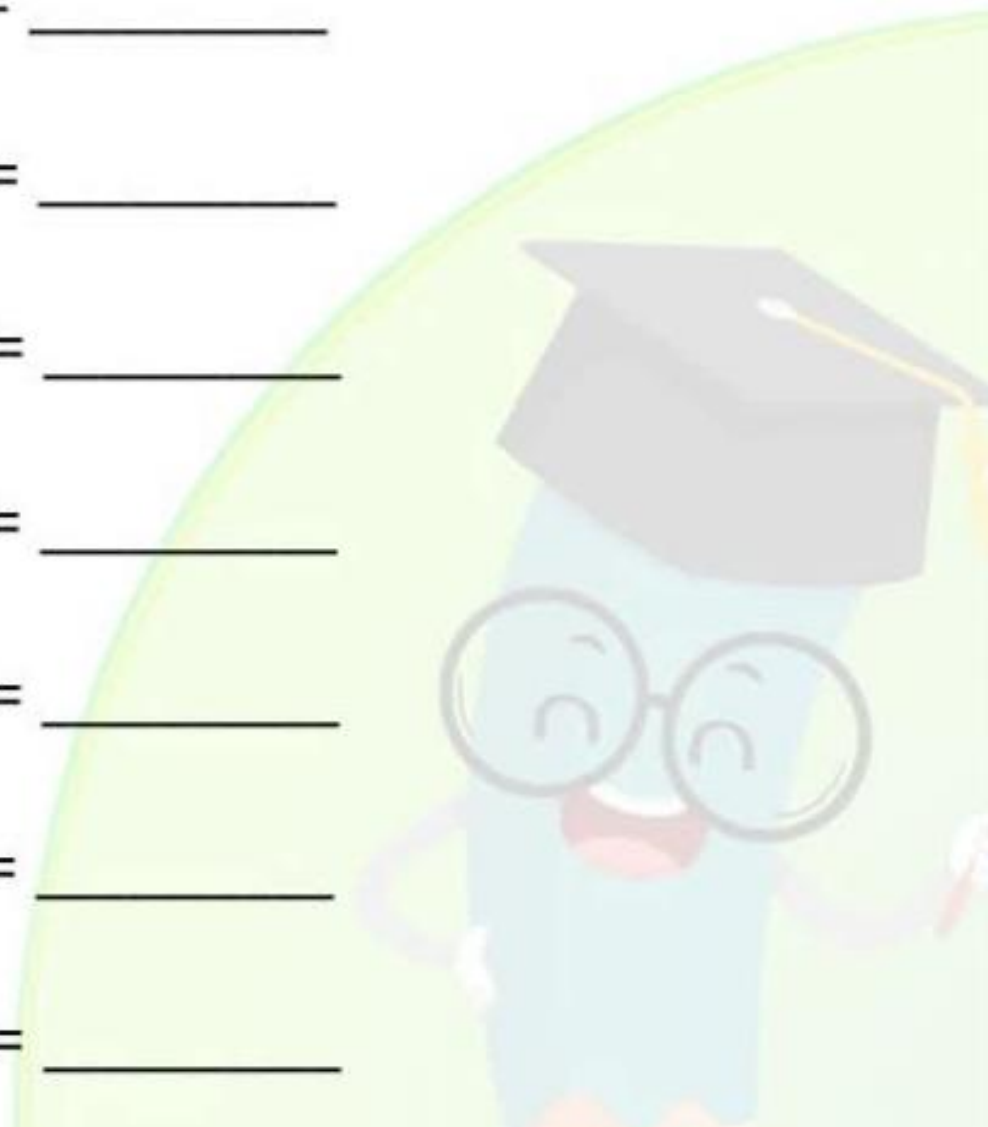
• 49 = \_\_\_\_\_

• 58 = \_\_\_\_\_

• 63 = \_\_\_\_\_

• 76 = \_\_\_\_\_

• 89 = \_\_\_\_\_



ग्रीष्मकालीन अवकाश हेतु गृहकार्य

कक्षा - 7 विषय - हिन्दी

1- 10 पेज सुलेख लिखें।

2- Ch-1, Ch-2, Ch-3 के शब्दार्थ एवं प्रश्न-उत्तर याद करें।

3- अपनी पाठ्य पुस्तक से कोई 2 कविता और उनके कवि का जीवन परिचय लिखें और याद करें।

4- अपने विचार से कोई 10 शब्द लिखिए, उन प्रत्येक शब्दों के विलोम, पर्यायवाची और अपने वाक्य में प्रयोग करें।

5- 'पेड़ का महत्व' पर निबंध लिखें।

6- Ch-1 'माँ कह एक कहानी' का सन्दर्भ सहित व्याख्या करें।

7- व्याकरण की एक नोटबुक बनायें, उसमें संज्ञा, सर्वनाम, विशेषण, क्रिया की परिभाषा उदाहरण सहित लिखें।

ग्रीष्मकालीन अवकाश हेतु गृहकार्य

कक्षा - 7 विषय - संस्कृत

1- प्रथमः, द्वितीयः, तृतीयः पाठ का उच्चारण करें एवं उनके अर्थ समझें।

2- प्रथमः, द्वितीयः, तृतीयः पाठ के सभी शब्दार्थ याद करें।

3- अकारान्त राम (पुं०), इकारान्त हरि (पुं०), आकारान्त बालिका (स्त्रीलिंग) का रूप याद करें।

4- पठ्, पिब्, लिख् का पाँच लकार में धातुरूप याद करें।

5- 'अस्माकं देशः' पर संस्कृत में 10 वाक्य लिखें।

6- 10 अंगों के नाम संस्कृत में लिखें।

7- संस्कृत में 50 तक गिनती लिखें और याद करें

कक्षा - 6 संस्कृत

ग्रीष्मकालीन अवकाश हेतु गृहकार्य

1- स्वर कितने प्रकार के होते हैं और उनमें कौन-कौन से वर्ण आते हैं, लिखें और याद करें।

2- व्यंजन के प्रकार एवं उनके अन्तर्गत आने वाले वर्ण लिखें और याद करें।

3- स्पर्श व्यंजन के उच्चारण स्थान लिखें और याद करें।

4- पेज सं० 9 (वयं शब्दार्थान् जानीमः) में जितने शब्दार्थ हैं, याद करें।

5- अकारान्त पुल्लिंग 'बालक' का रूप और अकारान्त स्त्रीलिंग 'बालिका' का रूप याद करें।

6- अपने विद्यालय पर संस्कृत में निबंध लिखें।

7- 'पठ्', 'गम्' का पाँच लकार में रूप याद करें।

8- 10 फलों के नाम संस्कृत में लिखें।

कक्षा - 6 विषय - हिंदी

ग्रीष्मकालीन अवकाश हेतु गृहकार्य :-

1- 10 पेज सुलेख लिखना है।

2- Ch-1, Ch-2, Ch-3 में जितने शब्दार्थ हैं, और जितने प्रश्न उत्तर हैं, उन्हें याद करना है।

3- Ch-1 'मातृभूमि' का सन्दर्भ सहित अर्थ लिखें।

4- अपनी पाठ्य पुस्तक से कोई 3 कविता याद करना है।

5- Ch-1, Ch-2, Ch-3 के लेखक एवं कवि का जीवन परिचय याद करें।

6- राष्ट्रभाषा हिन्दी पर 10 वाक्य लिखें।

7- व्याकरण की एक नोटबुक बनायें और उसमें संज्ञा, सर्वनाम, विशेषण, क्रिया की परिभाषा उदाहरण सहित लिखें। और 20 पर्यायवाची शब्द, 20 विलोम, 20 तत्सम-तद्भव शब्द लिखें और याद करें।

## Mathematics Homework

1. Write counting numbers from 1 to 300.

2. Write multiplication tables from 2 to 20

3. Write the names of all the months of the year and the number of days in each month.

(Project Work – Use a chart paper)

4. Draw different shapes and write their names

5. Write the number name from 101 to 150.

6. Two digit addition

$$\begin{array}{r} 63 \\ + 18 \\ \hline \end{array}$$

$$\begin{array}{r} 57 \\ + 32 \\ \hline \end{array}$$

$$\begin{array}{r} 29 \\ + 66 \\ \hline \end{array}$$

$$\begin{array}{r} 45 \\ + 64 \\ \hline \end{array}$$

$$\begin{array}{r} 86 \\ + 13 \\ \hline \end{array}$$

$$\begin{array}{r} 74 \\ + 21 \\ \hline \end{array}$$

$$\begin{array}{r} 45 \\ + 26 \\ \hline \end{array}$$

$$\begin{array}{r} 86 \\ + 13 \\ \hline \end{array}$$

7. Word problem

## Word Problems

- Riya has 45 candies. She bought 25 more. How many candies does she have now?
- A box has 72 apples. 36 are eaten. How many apples are left?
- There are 8 bags with 5 marbles each. Total? \_\_\_\_\_
- 56 pencils shared among 7 students. Each gets? \_\_\_\_\_
- A shop sold 120 toys and got 30 more. Total toys? \_\_\_\_\_
- 90 balloons, 45 burst. Remaining? \_\_\_\_\_
- 9 rows of chairs, 6 in each. Total chairs? \_\_\_\_\_
- 64 chocolates shared among 8 kids. Each gets? \_\_\_\_\_

---

8. Place value.

**1**  Write Tens and Ones.

a) 45

Tens	Ones

b) 67

Tens	Ones

c) 89

Tens	Ones

d) 23

Tens	Ones

**2**  Expand the numbers.

a)  $34 = \underline{\quad} + \underline{\quad}$

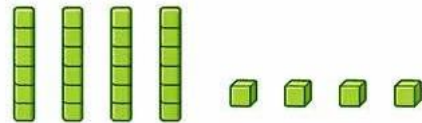
b)  $56 = \underline{\quad} + \underline{\quad}$

c)  $78 = \underline{\quad} + \underline{\quad}$


d)  $91 = \underline{\quad} + \underline{\quad}$

**3**  Form numbers.


a) 4 tens and 5 ones =



b) 7 tens and 2 ones =



c) 9 tens and 0 ones =



**(Convert numerals into words)**

• 14 = \_\_\_\_\_

• 27 = \_\_\_\_\_

• 35 = \_\_\_\_\_

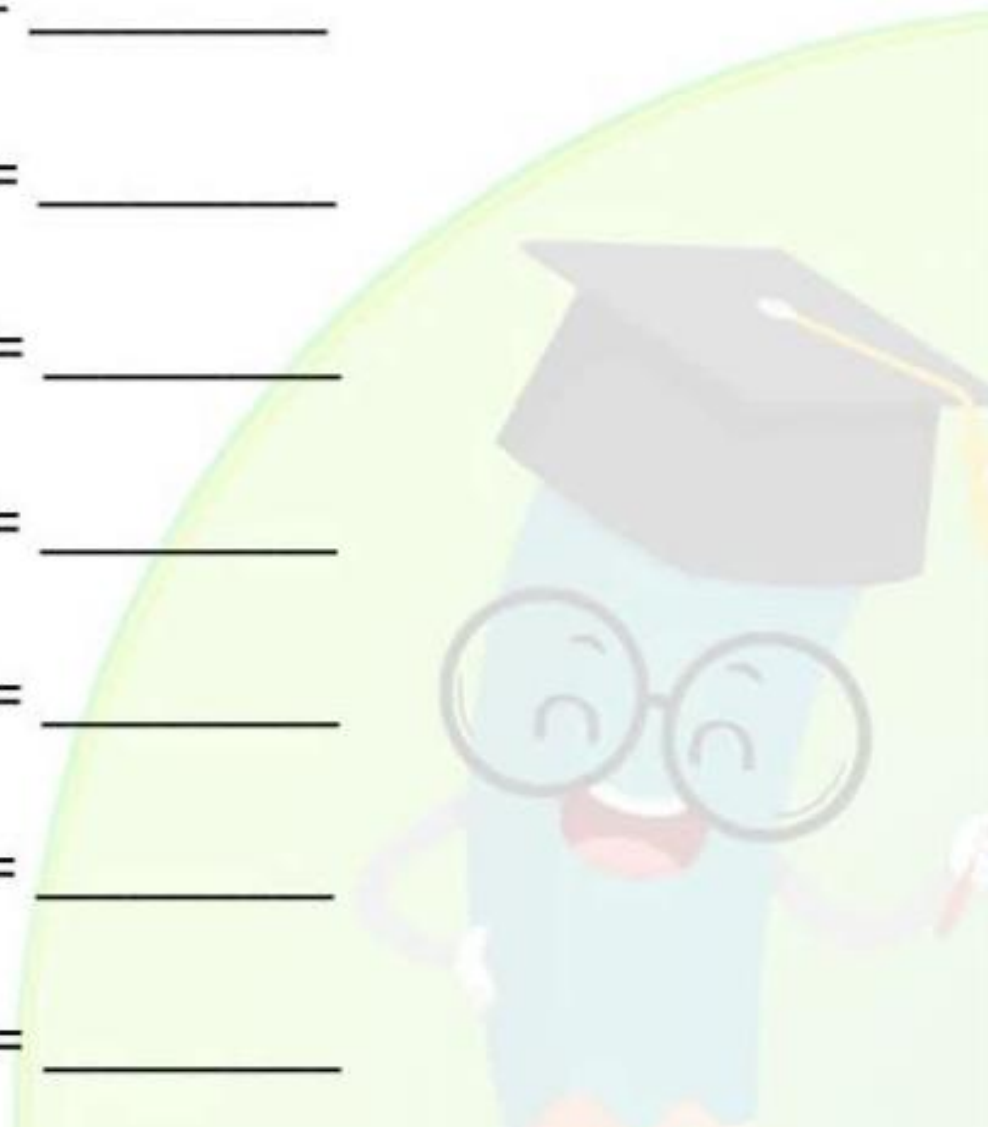
• 49 = \_\_\_\_\_

• 58 = \_\_\_\_\_

• 63 = \_\_\_\_\_

• 76 = \_\_\_\_\_

• 89 = \_\_\_\_\_



## Summer Vacation Holiday Homework

Class-7.

Sub.- SST

1. Map work (Label and locate 16 Mahajanapada with their capitals on India Map and paste in your notebook)
2. What are some key geographical features of India.
3. Write about a tourist place of India which you like the most.
4. What are the three main ranges of Himalaya? Explain with diagram.
5. Write about the 'Cold Desert of India'
6. Write a paragraph on World Environment Day (5 June).
7. Write about on a local historical place nearby you.
8. Write about the fundamental rights of Indian citizens given by the Indian Constitution.
9. Write about the fundamental Duties of Indian citizens given by the Indian Constitution.
10. Write and learn the 'Preamble' of the Indian Constitution.