

**PM SHRI KENDRIYA  
VIDYALAYA  
BOWENPALLY  
WINTER BREAK  
HOME WORK  
2025-26**

1. Name of the student : \_\_\_\_\_

2. Class : CLASS - I

3. Section : \_\_\_\_\_


4. Roll No : \_\_\_\_\_

**SUBJECTS – TEACHERS**

SUBJECT	TEACHERS NAME	DATE	SIGN
HINDI			
ENGLISH			
MATHS			
CLASS TEACHER			


## विषय - हिंदी

ऐ (ै) की मात्रा वाले शब्दों को सही चित्र से मिलायें




धैला

सैर




पैसा

तैर



पैर

भैया




बैठ

बैल



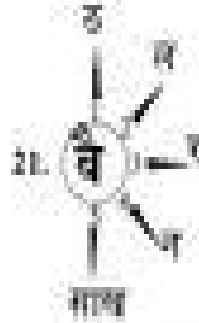
कैमरा

सैनिक







1. फल
2. \_\_\_\_\_
3. \_\_\_\_\_
4. \_\_\_\_\_
5. \_\_\_\_\_




1. बैठ
2. \_\_\_\_\_
3. \_\_\_\_\_
4. \_\_\_\_\_
5. \_\_\_\_\_





1. भेवा
2. \_\_\_\_\_
3. \_\_\_\_\_



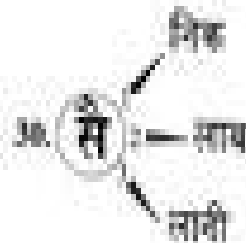


1. मेल
2. \_\_\_\_\_
3. \_\_\_\_\_
4. \_\_\_\_\_
5. \_\_\_\_\_



1. रेन
2. \_\_\_\_\_



1. वेला
2. \_\_\_\_\_



1. सेनिक
2. \_\_\_\_\_
3. \_\_\_\_\_



1. \_\_\_\_\_



## मात्रा की यात्रा

। की मात्रा सही स्थान पर लगाओ।

रम्....

ब...ज...

सीत...

क...ल...

राज...

पपीत....

अ...म

द....म

म...म.....

र...ध...

हर...

दीय...

मीर...

अ...ज...

## **SUBJECT : ENGLISH**

Syllabus for CCE : 1. Animals and Birds

2. Food

Choose the correct option.

1.



**This slogan tells us that.**

OPTION A We should finish eating fast.

OPTION B We should eat on a plate.

OPTION C We should make a lot of friends.

OPTION D We should eat the food we take.

2.



**What is happening in the picture?**

- OPTION A The children are playing a game.
- OPTION B The children are sharing their food.
- OPTION C The children are eating their food.
- OPTION D The children are fighting over food.

3.



I	R	L	P	G
A	O	D	O	O
N	T	F	O	D
I	I	O	R	O
I	D	L	I	K

**Choose the list of food items that come in both the picture and the grid.**

OPTION A idli , poori , godok , fish

OPTION B poori , idli , paratha , chicken

OPTION C poori , ladoo , roti , godok

OPTION D poori , idli , roti , godok

4.



**Choose the list of food items that come in both the picture and the grid.**

OPTION A The girl with no tiffin.

OPTION B The girl sitting on the bench

OPTION C The boy and girl sitting in the centre.









OPTION D The boy sitting on the bench.











# SUBJECT : MATHEMATICS

## ★ Thick or Thin ★









★ ☒ tick the object which is Thin.

	<input type="checkbox"/>		<input type="checkbox"/>
	<input type="checkbox"/>		<input type="checkbox"/>
	<input type="checkbox"/>		<input type="checkbox"/>
	<input type="checkbox"/>		<input type="checkbox"/>

Which object is heavy?

 <input type="checkbox"/>	 <input type="checkbox"/>	 <input type="checkbox"/>	 <input type="checkbox"/>
 <input type="checkbox"/>	 <input type="checkbox"/>	 <input type="checkbox"/>	 <input type="checkbox"/>

Which object is light?

 <input type="checkbox"/>	 <input type="checkbox"/>	 <input type="checkbox"/>	 <input type="checkbox"/>
 <input type="checkbox"/>	 <input type="checkbox"/>	 <input type="checkbox"/>	 <input type="checkbox"/>

# Single Digit Addition

Add the numbers.

a

$$\begin{array}{r} 2 \\ + 1 \\ \hline \end{array}$$

b

$$\begin{array}{r} 3 \\ + 1 \\ \hline \end{array}$$

c

$$\begin{array}{r} 4 \\ + 1 \\ \hline \end{array}$$

d

$$\begin{array}{r} 5 \\ + 1 \\ \hline \end{array}$$

e

$$\begin{array}{r} 2 \\ + 2 \\ \hline \end{array}$$

f

$$\begin{array}{r} 3 \\ + 3 \\ \hline \end{array}$$

g

$$\begin{array}{r} 4 \\ + 4 \\ \hline \end{array}$$

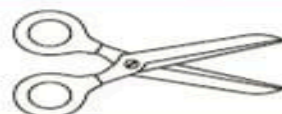

h

$$\begin{array}{r} 5 \\ + 5 \\ \hline \end{array}$$

i

$$\begin{array}{r} 3 \\ + 2 \\ \hline \end{array}$$

Circle the shortest and colour the longest.




1.  $13 + 3$




$= 16$

2.  $10 + 2$




$=$

3.  $7 + 6$




$=$

4.  $8 + 5$



$=$

5.  $6 + 9$



$=$

LearnCBSE.in




$15 - 9 = 6$

LearnCBSE.in

A.		B.	
	$16 - 4 = \text{ $		$12 - 5 = \text{ $
C.		D.	
	$14 - 7 = \text{ $		$16 - 6 = \text{ $
E.		F.	
	$15 - 5 = \text{ $		$15 - 0 = \text{ $
G.		H.	
	$17 - 9 = \text{ $		$13 - 3 = \text{ $

i.



6 frogs




2 jumped away



\_\_\_\_\_ left

$$6 - 2 = \underline{\hspace{2cm}}$$

ii.



7 balloons




\_\_\_\_\_ flew away




5 left

$$7 - 2 = \underline{\hspace{2cm}}$$


iii.



9 bananas



6 took away



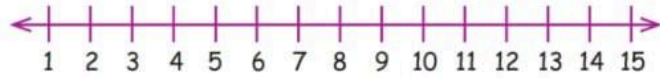
\_\_\_\_\_ left

$$9 - 6 = \underline{\hspace{2cm}}$$

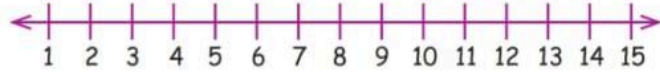


## Add and show on the number line:

1.  $3 + 5 =$



2.  $2 + 9 =$



3.  $9 + 6 =$



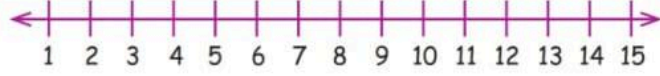
4.  $8 + 7 =$



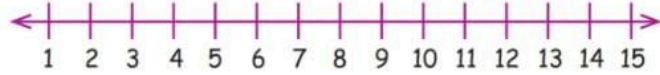
5.  $10 + 3 =$



6.  $13 + 1 =$



7.  $11 + 2 =$



**PM SHRI KENDRIYA  
VIDYALAYA  
BOWENPALLY  
WINTER BREAK  
HOME WORK  
2025-26**

1. Name of the student : \_\_\_\_\_

2. Class : CLASS - II

3. Section : \_\_\_\_\_

4. Roll No : \_\_\_\_\_

**SUBJECTS – TEACHERS**

SUBJECT	TEACHERS NAME	DATE	SIGN
HINDI			
ENGLISH			
MATHS			
CLASS TEACHER			

## विषय - हिंदी

नीचे दिया गया अनुच्छेद ध्यान से पढ़ो –

रीना एक प्यारी बच्ची है। वह रोज़ समय पर स्कूल जाती है। रीना अपने बड़ों की बात मानती है और अपने दोस्तों से प्यार से बात करती है। इसलिए सभी उसके साथ खेलना पसंद करते हैं। उसका एक छोटा भाई भी है, जो उसके साथ स्कूल जाता है।

1. बच्ची का नाम क्या है? \_\_\_\_\_
2. रीना रोज़ कहाँ जाती है? \_\_\_\_\_
3. रीना किसकी बात मानती है? \_\_\_\_\_
4. रीना के कितने भाई हैं ? \_\_\_\_\_

नीचे दिए शब्दों से एक-एक वाक्य बनाओ –

1. बच्चा - \_\_\_\_\_  
\_\_\_\_\_
2. स्कूल - \_\_\_\_\_  
\_\_\_\_\_

3. माँ - \_\_\_\_\_

\_\_\_\_\_

4. पेड़ - \_\_\_\_\_

\_\_\_\_\_

**(क) एकवचन से बहुवचन लिखो**

1. बच्चा → \_\_\_\_\_

2. किताब → \_\_\_\_\_

**(ख) सही शब्द पर गोला बनाओ**

1. (लड़का / लड़के) खेल रहे हैं।

2. (पेड़ / पानी) हरा है।

**चित्र बनाओ और लिखो**

**विषय : मेरा परिवार / मेरा स्कूल**

\_\_\_\_\_



---

---

---

---

---

---

---

## **SUBJECT : ENGLISH**

Syllabus for CCE- 1. The crow

2. The smart monkey

### **1. Read the story given below**

**This story tells us that**

- OPTION A We should eat cheese.
- OPTION B We should make friends.
- OPTION C We should share food.
- OPTION D We should ask for food.



### **2. Read the lines and answer the question.**

He found one peacock feather. He stuck it in his tail.

Then he found another,

He picked up all without fail.

Which group of words rhyme with the underlined words?

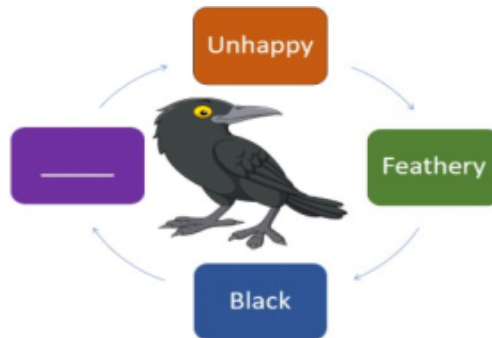
- OPTION A win, pin, tin
- OPTION B free , tree, she
- OPTION C sale, tale, male
- OPTION D fit, bit, pit

### 3. Read the lines and answer the question.

There once was a crow.

He was black, as you know. How to be beautiful,

he wanted to know. Colourful feathers, He wanted to grow.



Fill in the blank.

OPTION A Colourful

OPTION B Beautiful

OPTION C Wishful

OPTION D Cheerful

### 4. Look at the picture and answer the questions .



a) Tina was getting late for her dance class but was really hungry. She decided to make bhelpuri.

Choose the most suitable reason for it.

- OPTION A Bhelpuri is sweet and spicy.
- OPTION B Bhelpuri is crunchy and tasty.
- OPTION C Bhelpuri is a quick snack.
- OPTION D Bhelpuri is a tasty snack.

b) As per the picture, Bhelpuri can be made without\_\_\_\_\_.

- OPTION A puffed rice
- OPTION B tomatoes
- OPTION C coriander
- OPTION D tomatoes

### **5. Read the lines and answer.**

The monkey climbed down the tree with the banana peel. There was a dustbin nearby. The monkey threw the banana peel into the dustbin.

What did the monkey finally do?

- OPTION A He kept the place clean
- OPTION B He threw the peel near the bin.
- OPTION C He climbed down the tree.
- OPTION D He ate the banana.

## SUBJECT : MATHEMATICS

Syllabus for CCE- 1. Grouping and Sharing

2. Which season is it

1. Shivam observed the number of wheels in a rickshaw.

What is the total number of wheels in six rickshaws?

OPTION A 6

OPTION B 15

OPTION C 18

OPTION D 36



2. Rama is keeping the apples one by one into the given basket.

After dividing, how many apples will be left behind?

OPTION A 0

OPTION B 1

OPTION C 2

OPTION D 3



3. Read the calendar and answer the question:

What is the day on 15th January?

OPTION A Sunday

OPTION B Tuesday

OPTION C Saturday

OPTION D Thursday

JANUARY						
S	M	T	W	T	F	S
		1	2	3	4	5
6	7	8	9	10	11	12
13	14	15	16	17	18	19
20	21	22	23	24	25	26
27	28	29	30	31		

**PM SHRI KENDRIYA  
VIDYALAYA  
BOWENPALLY  
WINTER BREAK  
HOME WORK  
2025-26**

1. Name of the student : \_\_\_\_\_

2. Class : CLASS - III

3. Section : \_\_\_\_\_

4. Roll No : \_\_\_\_\_

**SUBJECTS – TEACHERS**

SUBJECT	TEACHERS NAME	DATE	SIGN
HINDI			
ENGLISH			
MATHS			
TWAU			
CLASS TEACHER			

## विषय - हिंदी

**गद्यांश :**

मोहन एक मेहनती बालक है। वह रोज़ सुबह जल्दी उठता है। वह समय पर अपना सारा काम करता है और मन लगाकर पढ़ाई करता है। मोहन अपने माता-पिता और शिक्षकों का सम्मान करता है। वह अपने दोस्तों की मदद भी करता है। मेहनत और अच्छे व्यवहार के कारण मोहन सबका प्रिय है।

1. मोहन कैसा बालक है?

---

---

2. मोहन अपना काम कैसे करता है?

---

---

3. मोहन किन-किन का सम्मान करता है?

---

---

4. मोहन किसकी मदद करता है ?

---

---

5. गद्यांश से मोहन की दो अच्छी आदतें लिखो।

---

---

## सही या गलत लिखो

6. हमें समय पर उठना चाहिए। ( )
7. बड़ों का सम्मान करना अच्छी आदत है। ( )
8. मेहनत करने से नुकसान होता है। ( )
9. हमें अपने दोस्तों की मदद करनी चाहिए। ( )

## खाली स्थान भरो

10. हमें हमेशा \_\_\_\_\_ बोलना चाहिए।
11. पेड़ हमें \_\_\_\_\_ देते हैं।
12. स्कूल में हम \_\_\_\_\_ करते हैं।
13. मेहनत से \_\_\_\_\_ मिलती है।

## सही विकल्प चुनो (MCQ)

13. मेहनती बच्चा कैसा हो सकता है? ( )
- (क) आलसी      (ख) शरारती      (ग) सफल      (घ) गुस्सैल
14. हमें किसका सम्मान करना चाहिए? ( )
- (क) केवल दोस्तों का      (ख) बड़ों का
- (ग) किसी का नहीं      (घ) केवल बच्चों का



15. स्कूल क्यों जाते हैं? ( )

(क) खेलने (ख) पढ़ने (ग) सोने (घ) घूमने

16. अच्छे व्यवहार से क्या होता है? ( )

(क) झगड़ा (ख) डर (ग) मित्रता (घ) परेशानी

### भाषा एवं व्याकरण

17. 'दिन' शब्द का विलोम लिखो। \_\_\_\_\_

18. 'लड़का' शब्द का बहुवचन लिखो। \_\_\_\_\_

19. सही शब्द चुनो –

(किताब / दौड़ना / सुंदर / खेल) में से संज्ञा शब्द लिखो। \_\_\_\_\_

20. "मेहनत" शब्द का प्रयोग करते हुए एक वाक्य लिखो।

---

---

---

## बच्चों के लिए निर्देश

- साफ और सुंदर लिखावट में लिखें
- रंगीन पेंसिल का उपयोग कर सकते हैं
- रोज़ थोड़ा-थोड़ा अभ्यास करें

[illegible]

## **SUBJECT : ENGLISH**

### **I. Underline the verb in each sentence.**

- 1) Sarah plays the piano every afternoon.
- 2) Tom rides his bike to school
- 3) The dog barks at strangers.
- 4) We eat breakfast at 7:00 am.
- 5) My brother reads comic books in his free time.
- 6) They walk to the park every weekend
- 7) Anna writes letters to her grandparents.
- 8) He sings beautifully in the choir
- 9) The cat jumps onto the table.
- 10) I drink water when I am thirsty.
- 11) The teacher teaches math every morning
- 12) She dances gracefully in the studio.
- 13) The children run around the playground
- 14) We watch movies on Friday nights.
- 15) My father fixes the car in the garage.
- 16) Peter draws pictures of animals in his notebook
- 17) The baby cries when she is hungry.
- 18) My friends help me with my homework.
- 19) The chef cooks delicious meals every day.
- 20) We listen to music during our break.

**II. Fill in the blanks with "am, is, are ".**

- 1) I \_\_\_\_\_ a girl.
- 2) That \_\_\_\_\_ an igloo.
- 3) We \_\_\_\_\_ friends.
- 4) Mr.Rohit \_\_\_\_\_ my uncle.
- 5) She \_\_\_\_\_ a good dancer.
- 6) I \_\_\_\_\_ going to school.
- 7) They \_\_\_\_\_ playing.
- 8) It \_\_\_\_\_ a cow.
- 9) The eggs \_\_\_\_\_ in the nest.
- 10) You \_\_\_\_\_ so smart.

**III. Use but to join each pair of sentences.**

1. Toni is fat. Sammy is skinny.  
Toni is fat but Sammy is skinny.

---

---

2. Watermelon is heavy.  
Banana is light.

---

---

3. Sarah was reading.  
Susan was listening.

---

---

4. Peter got a gold medal.  
Josh got a bronze medal.

---

---

5. I like funny movies.  
Tilda likes horror books.

---

---

6. Bill was laughing.  
The baby was crying.

---

---

## **SUBJECT : MATHEMATICS**

1. Write the hundreds digit of 456. \_\_\_\_\_

2. Write the tens digit of 789. \_\_\_\_\_

3. Circle the smallest number: 345, 354, 435

4. Circle the greatest number: 620, 602, 260

5.  $125 + 275 =$  \_\_\_\_\_

6.  $900 - 365 =$  \_\_\_\_\_

7.  $414 \times 6 =$  \_\_\_\_\_

8.  $217 \times 8 =$  \_\_\_\_\_

9.  $312 \div 3 =$  \_\_\_\_\_

10.  $220 \div 5 =$  \_\_\_\_\_

11. Rina has 24 toffees. She shares them equally among 4 children. How many toffees does each child get?

Answer: \_\_\_\_\_

---

---

---

---

---

---

12. There are 15 pencils in one box. How many pencils are there in 3 such boxes?

Answer: \_\_\_\_\_

---

---

---

---

---

---

13. Milk is measured in \_\_\_\_\_.

14. Weight of vegetables is measured in \_\_\_\_\_.

15. How many days are there in one week? \_\_\_\_\_

# **SUBJECT : TWAU ( THE WORLD AROUND US)**

## **Water – A Precious Gift**

### **A. Fill in the Blanks**

1. Water comes down to the earth as \_\_\_\_\_.
2. Underground water is stored between \_\_\_\_\_ and \_\_\_\_\_.
3. We get water at home through \_\_\_\_\_ and \_\_\_\_\_.
4. Dirty water should not be used for \_\_\_\_\_ or \_\_\_\_\_.
5. A birdbath is used to give water to \_\_\_\_\_.

### **B. True or False**

1. We can live without water for many days. (            )
2. Rainwater helps to fill rivers and ponds. (            )
3. Water tankers bring water to some homes. (            )
4. Waste water can never be reused. (            )
5. Water is a precious gift of nature. (            )

### **C. Multiple Choice Questions**

1. Which is a source of water?

a) Chair                      b) River                      c) Fan                      d) Book

2. Water stored under the ground is called:

a) Sea water              b) Rain water              c) Groundwater              d) Dirty water



## **D. Short Answer Questions**

1. Why is water called a precious gift?

---

---

---

---

---

2. Name any two uses of water.

---

---

---

---

---

## **Food We Eat**

### **A. Fill in the Blanks**

1. We eat food to stay \_\_\_\_\_ and \_\_\_\_\_.

2. Fruits and vegetables help us stay \_\_\_\_\_.

3. Rice, wheat and jowar are \_\_\_\_\_.

4. Milk comes from \_\_\_\_\_.

5. A balanced diet makes us \_\_\_\_\_.

### **B. True or False**

1. Eating only one type of food is healthy. (            )
2. Seasonal foods are good for health. (            )
3. Fruits and vegetables come from plants. (            )
4. We should waste food. (            )

### **C. Match the Following**

Spinach	Fruit
Potato	Leaf
Mango	Root
Carrot	Stem

## **Staying Healthy and Happy**

### **A. Fill in the Blanks**

1. We should brush our teeth \_\_\_\_\_ a day.
2. Washing hands with soap keeps us \_\_\_\_\_.
3. Exercise makes our body \_\_\_\_\_ and \_\_\_\_\_.

### **B. True or False**

1. Cleanliness keeps us healthy. (            )
2. Playing on the road is safe. (            )

### **C. Short Answer Questions**

1. Why is exercise important?

---

---

---

---

---

2. Name two healthy habits.

---

---

---

---

---

PM SHRI KENDRIYA  
VIDYALAYA  
BOWENPALLY  
WINTER BREAK  
HOME WORK  
2025-26

1. Name of the student : \_\_\_\_\_

2. Class : CLASS - IV

3. Section : \_\_\_\_\_

4. Roll No : \_\_\_\_\_

**SUBJECTS – TEACHERS**

SUBJECT	TEACHERS NAME	DATE	SIGN
HINDI			
ENGLISH			
MATHS			
TWAU			
CLASS TEACHER			

## विषय - हिंदी

प्रश्न 1: सही विलोम शब्द लिखिए।

1. दिन -

6. मित्र -

2. बड़ा -

7. शत्रु -

3. सुख -

8. काला -

4. आगे -

9. जीत -

5. नया -

10. पास -

प्रश्न 2: एकवचन से बहुवचन में बदलो ।

1. लड़का -

5. कुत्ता -

2. बच्चा -

6. लड़की -

3. किताब -

7. गेंद -

4. मिठाई -

8. चिड़िया -

**प्रश्न 3: नीचे दिए गए वाक्यों में सर्वनाम शब्द पर रेखा लगाइए।**

1. मैं रोज़ समय पर स्कूल जाता हूँ।
2. राम मेरा मित्र है। वह बहुत अच्छा है।
3. क्या तुम मुझे अपनी कॉपी दोगे ?
4. मोहन और सोहन खेल रहे हैं। वे बहुत खुश हैं।
5. यह मेरी नई किताब है।
6. हम सभी मिलकर सफाई करेंगे।
7. उसने मुझे सच बताया।
8. आप कहाँ जा रहे हैं?

**प्रश्न 4: नीचे दिए गए वाक्यों में विशेषण शब्द पर रेखा लगाइए।**

1. राम के पास एक सुंदर गेंद है।
2. यह लाल फूल बहुत अच्छा है।
3. मोहन एक अच्छा लड़का है।
4. मेरे पास दो किताबें हैं।
5. हमें मीठा फल खाना चाहिए।
6. वह छोटी बच्ची बहुत प्यारी है।

प्रश्न 5: खाली स्थानों में सही विशेषण भरिए।

(बड़ा, मीठा, हरा, पाँच, तेज)

1. आम बहुत \_\_\_\_\_ होता है।
2. मैदान बहुत \_\_\_\_\_ है।
3. पेड़ \_\_\_\_\_ है।
4. मेरे पास \_\_\_\_\_ पेंसिल हैं।
5. शेर एक \_\_\_\_\_ जानवर है।

प्रश्न 6: 1 से 30 तक की संख्याएँ हिंदी में लिखें. Example ; 1-१, 2- २


**प्रश्न 7: अपने मित्र को अपने जन्मदिन पर आमंत्रित करने के लिए पत्र लिखो**

[illegible]



# **SUBJECT : ENGLISH**

## **READING**

**Q. Read the given poem and answer the following questions:**

Graceful girl  
Geeta practices  
on her skates,  
  
and learns daily from her  
mistakes. Little boy Lhamo,  
  
proudly plays a guitar,  
  
while his friend joins him  
with a sitar. Swift girl  
Shabana,  
  
after winning a cycle race,  
  
happily celebrates her fastest pace.

Q.1 Who learns daily from her mistakes?.

---

Q.2 After winning a cycle race, who happily celebrates her fastest pace?

---

Q.3 Complete the sentence.

Little boy Lhamo,

\_\_\_\_\_ plays a guitar.

Q.4 Write any one rhyming word from the above poem.

---

Q.5 Find out the opposite word of 'Big' from the above poem.

---

**Q. Read the passage and answer the following:**

A crow and a deer who were good friends lived in a forest. Every day, the deer came to the tree to talk to the very attractive as a prey to any bigger animal. But the crow was very protective about his friend, so no animal dared to attack the deer.

A jackal had been observing closeness since many days. The plump deer tempted him very much and therefore, after much pondering he finally decided to win the confidence of the deer.

Q.6. Where do the crow and the deer live?

---

Q.7 How was the deer ?

---

Q.8. Who was very protective?

---

Q.9. Who tempted the jackal?

---

Q.10 Who had been observing their closeness since many days?

---

**WRITING**

**Answer the following questions:**

Q.11. Which game do you generally play in school?

---

Q.12. What is the name of Deepa's team and who are they competing against?

---

---

Q.13. Who told Prakash about Lagori, and what name does he use for it?

---

---

## GRAMMAR

**Q.14. Circle the word that does not have the same meaning as the word in bracket.**

Today there was an exciting football (contest) at school.

- (i) Match                      (ii) playground `                      (iii) activity

**Or**

The whole school ( praised ) the victory of the basketball team.

- (i) Celebrated                      (ii) ignored                      (iii) cheered

**Q.15. Fill in the blank with appropriate describing word.**

Healthy and \_\_\_\_\_ food is liked by every one.

Or

Tara told me \_\_\_\_\_ story.

**Q.16. Fill in the blank with naming word that suit the first word.**

Beautiful.....

Or

Happy.....

**Q.17. Re arrange the words to form meaningful sentence.**

Fresh / need/ everyday/water / plants

---

**Or**

Looked/Prakash/ at /surprise/everybody/with.

---

**Q.18. Make one interrogative / question sentence.**

**CREATIVE WRITING**

Q.19. Write few lines about your favourite" games / sports ( 60- 70 words)

**Or**

Observe the picture and write atleast 5-6 lines about it.



**SPELLINGS/ VOCABULARY**

**Q.20. Substitute the sentence by one word.**

A child of a person's aunt or uncle is called. \_\_\_\_\_

**Or**

Error or things done incorrectly. \_\_\_\_\_

**Q.21. Unscramble the letters to form a word.**

(i). D E O T I U S : \_\_\_\_\_

(ii) O N B U D Y R A : \_\_\_\_\_

**Fill in the blank with word that have double letters.**

Q.22. The parrot is in colour. \_\_\_\_\_

Q.23. Write the meaning of :

Brave : \_\_\_\_\_

## **SUBJECT : MATHEMATICS**

### **I. Multiple Choice Questions**

1. Which year has 29 days in February?  
A) 2023                      B) 2025                      C) 2024                      D) 2026
2. 8:30 PM in the 24-hour clock is  
A) 08:30                      B) 18:30                      C) 20:30                      D) 21:30
3. Which shape has two lines of symmetry?  
A) Square                      B) Rectangle                      C) Triangle                      D) Circle
4. Which unit is best to measure the weight of a school bag?  
A) gram                      B) millilitre                      C) kilogram                      D) litre
5. 1 litre is equal to  
A) 100 ml                      B) 500 ml                      C) 1000 ml                      D) 1500 ml

### **II. Fill in the Blanks.**

1. A leap year has \_\_\_\_\_ days.
2.  $3 \times 9 =$  \_\_\_\_\_
3.  $500 \text{ ml} + 500 \text{ ml} =$  \_\_\_\_\_ litre
4. The smallest 3-digit multiple of 5 is \_\_\_\_\_
5. 12:00 midnight is written as \_\_\_\_\_ in the 24-hour clock.
6. A square has \_\_\_\_\_ lines of symmetry.
7. 5000 grams make \_\_\_\_\_ KG.
8.  $48 \div 6 =$  \_\_\_\_\_
9. The month after June is \_\_\_\_\_
10. A tiger is heavier than a \_\_\_\_\_

### III. Match the Following.

#### Column A

1. 1 kg
2. 7:00 AM
3. Square
4. 20:00
5.  $6 \times 5$
6. Milk
7. Symmetrical shape
8. Leap year
9. Weight of rice bag
10. Capacity

#### Column B

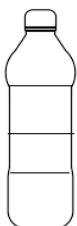
- a) 1000 ml
- b) Rectangle
- c) 24-hour time
- d) Kilogram
- e) 30
- f) Litre
- g) Two equal halves
- h) 366 days
- i) Morning time
- j) Kilogram

### IV. Convert into 24 Hours Clock Time.

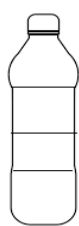
1. 6:15 AM : \_\_\_\_\_
2. 11:40 AM : \_\_\_\_\_
3. 12:00 AM : \_\_\_\_\_
4. 1:30 PM : \_\_\_\_\_
5. 7:45 PM : \_\_\_\_\_

### V. Colour the bottle as mentioned capacity below.

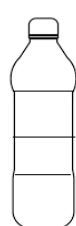
1 Litre



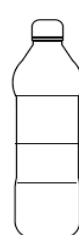
250 ml



750 ml



500 ml



**VI. Write first FIVE Common multiples for the following numbers.**

1. Multiples of 2 : \_\_\_\_\_

Multiples of 3 : \_\_\_\_\_

Common multiples of 2 and 3 : \_\_\_\_\_

2. Multiples of 4 : \_\_\_\_\_

Multiples of 6 : \_\_\_\_\_

Common multiples of 4 and 6 : \_\_\_\_\_

**VII. Write division facts for the given Multiplication facts.**

1.  $3 \times 7 = 21$  : \_\_\_\_\_, \_\_\_\_\_

2.  $5 \times 4 = 20$  : \_\_\_\_\_, \_\_\_\_\_

3.  $7 \times 6 = 42$  : \_\_\_\_\_, \_\_\_\_\_

4.  $10 \times 5 = 50$  : \_\_\_\_\_, \_\_\_\_\_

5.  $12 \times 4 = 48$  : \_\_\_\_\_, \_\_\_\_\_

**VIII. Double the given number and write its Ones place digit and Tens place digit**

Number	Double	Tens Place Digit	Ones Place Digit
1. 25 =	_____	_____	_____
2. 47 =	_____	_____	_____
3. 60 =	_____	_____	_____
4. 44 =	_____	_____	_____
5. 72 =	_____	_____	_____

**IX. Draw FIVE shapes / objects and Draw the line of symmetry if possible.**



**X. Write all the English capital letters (A–Z) and numbers (0–9) that have the same mirror image.**

**Hint : English capital letters are 11 and numbers are 3.**

_____	_____	_____
_____	_____	_____
_____	_____	_____
_____	_____	_____

**XI. Write days of the week and Months of the year.**

Days of the week		Months of the year.
1. _____	1. _____	7. _____
2. _____	2. _____	8. _____
3. _____	3. _____	9. _____
4. _____	4. _____	10. _____
5. _____	5. _____	11. _____
6. _____	6. _____	12. _____
7. _____		

**XII. Answer the questions by observing the JANUARY-2026 calendar.**

- On which day of the week does 1st Jan-2026 fall? \_\_\_\_\_
- How many days are there in Jan-2026? \_\_\_\_\_
- How many Sundays are there in Jan-2026? \_\_\_\_\_
- What is the date of the second Monday in Jan-2026? \_\_\_\_\_
- On which day Republic Day fall? \_\_\_\_\_

## **SUBJECT : TWAU ( THE WORLD AROUND US)**

### **Section A: Multiple Choice Questions.**

1. Which object spins properly?

- A. Eraser                      B. Coin                      C. Stone                      D. Clay

2. Which of these usually floats on water?

- A. Iron nail                      B. Stone                      C. Leaf                      D. Marble

3. Which food gives us energy?

- A. Rice                      B. Spinach                      C. Milk                      D. Egg

4. Which is a body-building food?

- A. Fruit                      B. Pulse                      C. Oil                      D. Sugar

5. Which taste is found in neem?

- A. Sweet                      B. Sour                      C. Bitter                      D. Salty

6. Which activity keeps our body fit?

- A. Sleeping late                      B. Playing                      C. Watching TV                      D. Mobile games

7. Which grain is used to make roti?

- A. Rice                      B. Wheat                      C. Sugar                      D. Salt

8. Which item sinks in water?

- A. Leaf                      B. Plastic bottle                      C. Iron nail                      D. Thermocol

9. What helps us digest food?

- A. Air                      B. Water                      C. Soil                      D. Fire

10. Which habit is healthy?

- A. Wasting food                      B. Junk food  
C. Regular exercise                      D. Sleeping late

**Section B: Fill in the Blanks using given helping words.**

**Protective, Weight, Rest, Sugar, Healthy, Food, Healthy,  
Three, Centre, Posture, Happy, Body, Energy, Float,  
Waste, Mindful, Digesting, Bitter, Float, Comfortable**

1. Objects float or sink depending on their \_\_\_\_\_.
2. A spinner spins better when balanced at the \_\_\_\_\_.
3. Fruits and vegetables are \_\_\_\_\_ foods.
4. Pulses and milk help in \_\_\_\_\_ building.
5. Farmers grow \_\_\_\_\_ for us.
6. Eating slowly is called \_\_\_\_\_ eating.
7. We should not \_\_\_\_\_ food.
8. Regular exercise keeps us \_\_\_\_\_.
9. Water helps in \_\_\_\_\_ food.
10. Sleep gives our body \_\_\_\_\_.
11. Junk food contains too much \_\_\_\_\_.
12. A balanced diet has \_\_\_\_\_ food groups.
13. Neem has a \_\_\_\_\_ taste.
14. Rice and wheat give us \_\_\_\_\_.
15. Paper boats \_\_\_\_\_ on water.
16. Heavy objects may also \_\_\_\_\_.
17. Playing games makes us feel \_\_\_\_\_.
18. Safe touch makes us feel \_\_\_\_\_.
19. Yoga improves our \_\_\_\_\_.
20. Clean water keeps us \_\_\_\_\_.

**Section C: Match the Following.**

1. Coin	Protective food
2. Leaf	Body-building food
3. Iron nail	Grows food
4. Rice	Keeps fit
5. Milk	Gives rest
6. Fruits	Floats
7. Farmer	Helps digestion
8. Water	Sinks
9. Exercise	Energy food
10. Sleep	Spins
11. Neem	Sour
12. Sugar	Floats
13. Lemon	Exercise
14. Salt	Sweet
15. Yoga	Bitter
16. Boat	Salty
17. Junk food	Rotating object
18. Balanced diet	Helps soil
19. Spinner	Unhealthy
20. Earthworm	Healthy

Section D: Answer the given Questions.

1. Why do some objects float and some sink?

Floating Objects : \_\_\_\_\_

Sinking Objects : \_\_\_\_\_

2. Name two objects that spin.

Objects that spin : \_\_\_\_\_

3. What are body-building foods?

---

---

---

4. Why should we avoid junk food?

---

---

---

5. What is mindful eating?

---

---

---

6. Name two exercises.

Exercises : \_\_\_\_\_

7. Why is water important for us?

---

---

---

8. Who helps food reach our plate?

---

---

---

---

9. What is a balanced diet?

---

---

---

---

10. Why is sleep important?

---

---

---

---

## Section E: Poster / Drawing

Make a neat and colourful poster or drawing on Balanced Diet Plate.



PM SHRI KENDRIYA  
VIDYALAYA  
BOWENPALLY  
WINTER BREAK  
HOME WORK  
2025-26

1. Name of the student : \_\_\_\_\_

2. Class : CLASS - V

3. Section : \_\_\_\_\_

4. Roll No : \_\_\_\_\_

**SUBJECTS – TEACHERS**

SUBJECT	TEACHERS NAME	DATE	SIGN
HINDI			
ENGLISH			
MATHS			
TWAO			
CLASS TEACHER			



## विषय - हिंदी

निम्नलिखित अनुच्छेद-1 को पढ़कर प्रश्नों के उत्तर लिखिए ।

गुल्ली-डंडा सब खेलों का राजा है। अब भी कभी लड़कों को गुल्ली -डंडा खेलते देखता हूँ तो जी लोट-पोट हो जाता है कि इनके साथ जाकर खेलने लगूँ। न लॉन की जरूरत, न कोर्ट की, न थापी की, मजे से किसी पेड़ से एक टहनी काट ली, गुल्ली बना ली और दो आदमी भी आ गए तो खेल शुरू हो गया। विलायती खेलों में सबसे बड़ा ऐब है कि उनके सामान महँगे होते हैं। पर हम अंग्रेजी चीजों के पीछे ऐसे दीवाने हो रहे हैं कि अपनी सभी चीजों से अरुचि हो गई है। हमारे स्कूलों में हरेक लड़के से तीन-चार रुपये सालाना के वल खेलने की फीस ली जाती है। किसी को यह नहीं सझता कि भारतीय खेल खिलाएँ जो बिना दाम, कौड़ी के खेले जाते हैं। ठीक है, गुल्ली से आँख फूट जाने का भय रहता है तो क्या क्रिकेट से सिर टूट जाने का भय नहीं रहता ।

प्रश्न.1 यह अनुच्छेद किस पाठ से लिया गया है ?

उत्तर: \_\_\_\_\_  
\_\_\_\_\_

प्रश्न.2 विलायती खेलों में क्या ऐब है ?

उत्तर: \_\_\_\_\_  
\_\_\_\_\_

प्रश्न.3 हम किन चीजों के पीछे दीवाने हो रहे हैं ?

उत्तर: \_\_\_\_\_  
\_\_\_\_\_

प्रश्न.4 गुल्ली डंडा के खेल में किसका भय रहता है ?

उत्तर: \_\_\_\_\_

\_\_\_\_\_

प्रश्न.5 स्कूल में सालाना खेल के लिए कितने रुपये फीस ली जाती थी ?

उत्तर: \_\_\_\_\_

\_\_\_\_\_

निम्नलिखित अनुच्छेद –II को पढ़कर प्रश्नों के उत्तर लिखिए ।

एक बार बोधिसत्व पहाड़ी रास्ते से होकर उस पार बस्ती की ओर जा रहे थे। अचानक उनकी दृष्टि नीचे घाटी में बैठी शेरनी पर पड़ी। उसके पास ही दो नवजात शावक उछल-कूद कर रहे थे। शेरनी ने दो दिन पहले ही उन बच्चों को जन्म दिया था। इस कारण वह इतनी दुर्बल हो चुकी थी कि उसमें शिकार करने तक की शक्ति न थी। वह शेरनी तीन-चार दिनों से बिलकुल भूखी थी। उसकी दशा देखकर बोधिसत्व का हृदय करुणा से भर गया। उन्होंने सोचा, 'इसी प्रकार एक-दो दिन और भूखी रहने पर तो इस शेरनी के साथ-साथ इन शावकों के प्राण भी संकट में पड़ जाएँगे।' यही सोच, उन्होंने अपने शरीर को एक चट्टान से टकरा दिया और कुछ ही समय में चट्टानों पर लुढ़कता हुआ उनका शरीर शेरनी के पास जा पहुँचा। उनके मृत शरीर को खाकर शेरनी ने अपनी क्षुधा शांत की

प्रश्न .1 बोधिसत्व कहाँ की ओर जा रहे थे ?

उत्तर: \_\_\_\_\_  
\_\_\_\_\_

प्रश्न .2 शेरनी ने कितने दिन पहले और कितने बच्चों को जन्म दिया था ?

उत्तर: \_\_\_\_\_  
\_\_\_\_\_  
\_\_\_\_\_

प्रश्न .3 शेरनी क्यों दुर्बल हो चुकी थी ?

उत्तर: \_\_\_\_\_  
\_\_\_\_\_  
\_\_\_\_\_

प्रश्न .4 बोधिसत्व ने शेरनी और शावकों के प्राण बचाने के लिए क्या किया ?

उत्तर: \_\_\_\_\_  
\_\_\_\_\_  
\_\_\_\_\_

प्रश्न .5 इस अनुच्छेद में आए कोई तीन संज्ञा शब्दों को पहचान कर लिखिए ?

उत्तर: \_\_\_\_\_  
\_\_\_\_\_  
\_\_\_\_\_

## सृजनात्मक लेखन

प्रश्न . जैसे दोनों मेंढक अपनी पसंदीदा जगह जा रहे थे | वैसे ही आप अपनी किस पसंदीदा जगह पर जाना चाहते हैं और आप वहाँ तक कैसे ओर किसके साथ जाना चाहते अपनी योजना के बारे में पाँच से सात वाक्यों में लिखिए |

This image shows a blank sheet of white paper with horizontal ruling lines. The lines are evenly spaced and run across the width of the page. There are no margins, text, or other markings on the paper.

---

---

---

## सृजनात्मक लेखन

प्रश्न. जैसे हीरासिंह सुन्दरिया को बहुत प्यार करते थे। वैसे ही आप किस पशु को बहुत पसंद करते हैं उसके बारे में पाँच से सात वाक्य में लिखिए।

This image shows a blank sheet of white paper with horizontal ruling lines. The lines are evenly spaced and run across the width of the page. There are no margins, text, or other markings on the paper.

---

---

---

---

### व्याकरण

1. निम्न लिखित वाक्य से संज्ञा शब्द को पहचान कर लिखिए :

मुझे तो लूडो , छुपन – छुपाई और टेनिस खेलना पसंद है ।

संज्ञा शब्द - \_\_\_\_\_

2. निम्न लिखित वाक्य से संज्ञा की विशेषता बताने वाले शब्द को पहचान कर लिखिए:

हीरासिंह एक ईमानदार और मेहनती किसान था । -

\_\_\_\_\_

3. दिए गए शब्दों का अर्थ लिखिए :

ऐब : \_\_\_\_\_

जेठे : \_\_\_\_\_

सालाना : \_\_\_\_\_

4. रेखांकित शब्द के समानार्थक शब्द लिखिए :

काजीरंगा उद्यान असम में ब्रह्मपुत्र नदी के तट पर स्थित है।।

समानार्थक - \_\_\_\_\_

5. रेखांकित शब्दों के विलोम शब्द लिखिए

चित्रकार बहुत चतुर था । जिसकी सहायता से उसने शेर से अपनी जान बचाई ।

---

---

6. चित्रकार ने कहा— हो गया, आगे का तैयार,  
अब मुँह आप उधर तो करिए, जगल के सरदार ।  
समान लय वाले शब्द पहचान कर लिखिए :

---

7. अशुद्ध शब्द को पहचान कर गोला बनाइए ।

(क) तलांगन की राजधानी हैदराबाद है ।

(ख) सुंदर वन राष्ट्रीय उद्यान में बंगाल टाइगर रहते हैं।

8. नीचे दिए गए शब्दों से एक-एक वाक्य बनाइए ।

(क) गाय - \_\_\_\_\_

---

---

(ख) विद्यालय - \_\_\_\_\_

---

---

- 9 शब्दों को सही क्रम में लिखकर सही वाक्य बनाइए ।

(क) जंगली / झुंड / भैंसों / के / घास / आराम / से / रहे थे / चर

क्रमबद्ध वाक्य

- \_\_\_\_\_

10. दिए गए शब्दों का हिन्दी अनुवाद लिखिए ।

FOREST-\_\_\_\_\_

PLAYER - \_\_\_\_\_

HONEST - \_\_\_\_\_

PAINTER - \_\_\_\_\_

### **SUBJECT : ENGLISH**

1. What message did the parrot ask the merchant to give to its friends?

---

---

2. What helps the frog hide in its surroundings?

---

---

3. How do the shapes of water tanks reflect the owners?

---

---

---

4. What things are needed to play Gilli Danda?

---

---

---



5. Why did the farmer go to the village chief?

---

---

---

6. What was the final judgment given by the Panchayat?

---

---

---

**7. Fill in the blanks (Collective Nouns):**

(pack, bouquet, army, flock, bunch, flight, swarm)

a) A \_\_\_\_\_ of parrots flew over the forest.

b) A \_\_\_\_\_ of bees hovered around the flowers.

c) She gave a \_\_\_\_\_ of flowers to the guest.

**8. Choose the correct word and fill in the blanks:**

a) My colours match the plants \_\_\_\_ trees. (and / or)

b) Frogs swim easily \_\_\_\_ they have webbed feet. (because / but)

**9. Rearrange the words to form a correct sentence:**

a) hunts / night / the / silently / tiger / at

---

b) swims / turtle / slowly / ocean / the / in

---

10. Write the contractions:

**do not** → \_\_\_\_\_      **is not** → \_\_\_\_\_      **cannot** → \_\_\_\_\_

11. Who said to whom?

**“I sold only the well, not the water.”**

---

---

**“Remove the water or use it all up immediately.”**

---

---

12. Fill in the blanks (Possessive Pronouns):

**(mine, his, hers, ours, yours)**

a) This bag belongs to me. It is \_\_\_\_\_.

b) The bicycle belongs to Ravi. It is \_\_\_\_\_.

**13. Write a story based on the comic below.**



Here are some words to help you :

Balloon , Seller , to blow up , to swallow , to fly off

---

---

---

---

---

---

---

---

---

---

[illegible]

**13. Write a letter to your friend to invite her in your birthday party.**

[illegible]



Right angle

Acute angle

Obtuse angle

--	--	--

### **WE THE TRAVELLERS – II**

#### **I. Find the Sum**

1.  $3846 + 2196$

3.  $6048 + 1582$

5.  $7029 + 1961$

2.  $4575 + 3879$

4.  $5560 + 4490$

#### **II. Find the Difference**

1.  $8000 - 3506$

3.  $7000 - 2089$

5.  $1,0000 - 6840$

2.  $9202 - 4768$

4.  $6850 - 4259$

### III. Word Problems

1. A bus travelled 3065 km on Monday and 4890 km on Tuesday. Find total distance.
2. A tank had 8500 litres of fuel. 3705 litres were used. How much is left?
3. A shop sold goods worth ₹4750 in the morning and ₹2898 in the evening. Find total sales.

### FAR AND NEAR

#### I. Fill in the Blanks

1. 1 km = \_\_\_\_\_ m
2. 100 cm = \_\_\_\_\_ m
3. 750 cm = \_\_\_\_\_ m
4. 3 km = \_\_\_\_\_ m
5. 1 m = \_\_\_\_\_ cm

#### II. Compare (<, >, =)

1. 3 m \_\_\_\_ 250 cm
2. 1 km \_\_\_\_ 1,000 m
3. 450 cm \_\_\_\_ 4 m
4. 2 km \_\_\_\_ 1,500 m
5. 500 cm \_\_\_\_ 5 m

#### III. Convert

1. 4 km = \_\_\_\_\_ m
- 3). 9 m = \_\_\_\_\_ cm
- 5). 2,000 m = \_\_\_\_\_ km

2. 600 cm = \_\_\_\_\_ m      4). 1,200 cm = \_\_\_\_\_ m

#### IV. Answer the Following

1. The distance from Riya's house to her school is **2,650 metres**.  
She walks **1,875 metres** and travels the rest by cycle. **How many metres does she travel by cycle?**
2. A train travelled **4,820 metres** on the first track and **3,960 metres** on the second track. **Which track is longer and by how many metres?**
3. A delivery van covered **6,375 metres** on Monday and **5,890 metres** on Tuesday. **How much more distance did the van cover on Monday than on Tuesday?**

### THE DAIRY FARM (MULTIPLICATION)

#### I. Write Two Division Facts

1.  $6 \times 8 = 48$  : \_\_\_\_\_, \_\_\_\_\_
2.  $7 \times 9 = 63$  : \_\_\_\_\_, \_\_\_\_\_
3.  $5 \times 10 = 50$  : \_\_\_\_\_, \_\_\_\_\_
4.  $4 \times 12 = 48$  : \_\_\_\_\_, \_\_\_\_\_
5.  $8 \times 7 = 56$  : \_\_\_\_\_, \_\_\_\_\_

#### V. Word Problems




1. One box has 24 bottles. How many bottles in 62 boxes?
2. A farmer packs 35 trays with 20 eggs each. Find total eggs.
3. Cost of one pen is ₹5. Find cost of 125 pens.
4. A shop sells 10 packets daily. How many packets in 4 weeks?

## SHAPES AND PATTERNS

**I. Draw the given shape AND Write at least ONE Property for each.**


Shape Name	Equilateral triangle	Isosceles triangle	Scalene triangle
Diagram			
Property-1			

Property-2			
Shape Name	Square	Rectangle	Rhombus
Diagram			
Property-1			
Property-2			
Shape Name	Parallelogram	Trapezium	Kite
Diagram			
Property-1			
Property-2			

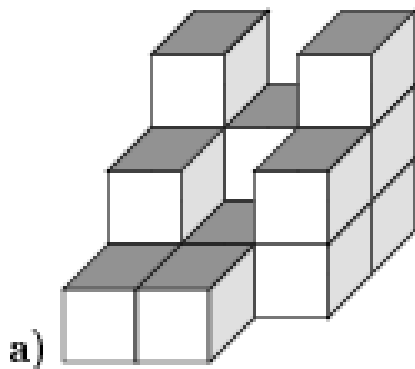


**II. Draw a tessellating pattern with one shape**

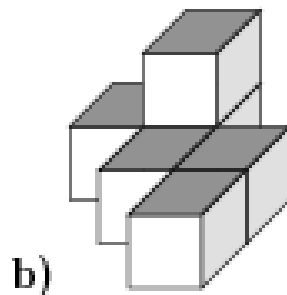
III. Draw a tessellating pattern with MORE THAN one shape.



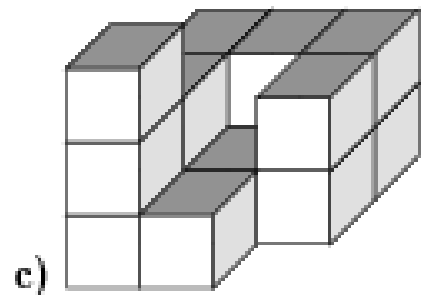
IV. Count the number of small cubes in the following.



\_\_\_\_\_



\_\_\_\_\_



\_\_\_\_\_

### WEIGHT AND CAPACITY

I. Fill in the Blanks

1. 1 kg = \_\_\_\_\_ g

2. 500 g + 500 g = \_\_\_\_\_ kg

3. 1 litre = \_\_\_\_\_ ml

4. 2 kg 250 g = \_\_\_\_\_ g

5. 750 ml + 250 ml = \_\_\_\_\_ litre

## II. Convert

1. 3 kg = \_\_\_\_\_ g
2. 1,500 ml = \_\_\_\_\_ litre
3. 4 kg 500 g = \_\_\_\_\_ g
4. 2 litre = \_\_\_\_\_ ml
5. 750 g = \_\_\_\_\_ kg

## III. Compare (<, >, =)

1. 2 kg \_\_\_\_\_ 1,500 g
2. 750 ml \_\_\_\_\_ 1 litre
3. 1 kg \_\_\_\_\_ 1,000 g
4. 3 kg \_\_\_\_\_ 2,500 g
5. 500 ml \_\_\_\_\_ 750 ml

## COCONUT FARM (DIVISION)

### I. Fill in the Blanks.

1.  $81 \div 9 =$  \_\_\_\_\_
2.  $64 \div 8 =$  \_\_\_\_\_
3.  $48 \div 6 =$  \_\_\_\_\_
4.  $35 \div 5 =$  \_\_\_\_\_
5.  $72 \div 9 =$  \_\_\_\_\_

### II. Write Division Facts.

1.  $6 \times 7 = 42$  : \_\_\_\_\_ , \_\_\_\_\_

2.  $8 \times 9 = 72$  : \_\_\_\_\_ , \_\_\_\_\_

3.  $5 \times 6 = 30$  : \_\_\_\_\_ , \_\_\_\_\_

4.  $7 \times 8 = 56$  : \_\_\_\_\_ , \_\_\_\_\_

5.  $9 \times 4 = 36$  : \_\_\_\_\_ , \_\_\_\_\_

#### IV. Solve

1.  $967 \div 4$

3).  $792 \div 9$

5).  $425 \div 5$

2.  $504 \div 6$

4).  $6390 \div 7$

6).  $2456 \div 8$

#### V. Word Problems (5)

1. 648 coconuts are packed into 8 baskets. Find coconuts in each basket.

2. 792 sweets are shared among 9 children. How many each get ?

3. 5600 boxes are placed equally in 7 trucks . Find boxes per each truck.

4. 4500 rupees are divided among 5 students. Find the share of each student.

## **SUBJECT : TWAU ( THE WORLD AROUND US)**

**I. Answer the following questions.**

1. Write about Swachh Bharat -Swachh Vidyalaya?

---

---

---

---

---

2. Write about "Jal Shakti Abhiyan " ?

---

---

---

---

---

3. Write 5 sentences about "My dream school " ?

---

---

---

---

---

---

---

---

---

---

---

4. Write about our National flag?

---

---

---

---

---

5. Describe the living root bridge in Northeast?

---

---

---

---

---

---

## II.Fill in the blanks .

- a) \_\_\_\_\_ is known for planting a forest in Assam.
- b) Has eight arms and can change its colour to hide\_\_\_\_\_.
- c) The unique bird found only in Andaman is the \_\_\_\_\_.
- d) The \_\_\_\_\_ lives only in the western ghats.
- e) The \_\_\_\_\_ is a bridge made from tree roots in the Northeast.

## III..True or False

- a) The Andaman and Nicobar islands are located in the Arabian sea.(            )
- b) Bhut jolokia is a type of animal found in northeastern India.            (            )
- c) The silent vally national park is in western ghats.            (            )

## IV. Multiple choice questions.

1). Which of the following is the southern most tip of India.            (            )


- a). Kanyakumari            b). Indira point            c) Sundarban            d) Kolkata

2). On which date is Republic day celebrated in India?            (            )

- a). 15th August.            b) 26th January.            c). 2nd October.            d). 1st january



**IV. Draw and describe what the colors of the National Flag represent and explain the significance of the National Emblem.**



---

---

---

---

---

---

[illegible]