

KENDRIYA VIDYALAYA SANGATHAN

ONGC RAJAHMUNDY 2025-26.

Multi Disciplinary Project [MDP]

Class : 3rd

Theme: Food

1 ENGLISH

Activity 1.

Make any sweet without sugar, you can use jiggery as an alternative.
Share it with your family and write about your experience.

Activity 2

Make a list of food items you eat when you are sick. In 2 lines write how it helps you get well.

Activity 3

Paste articles / pictures/ write headlines of food related new from newspaper.

Activity 4.

Choose 3 cartoon characters, draw their picture and the food item that they like to eat.

Also write if it healthy or unhealthy.

2 Hindi

1. कोई 5 रातोंके पसंदीदा भोजन पदार्थों पर चिप सहित अनुच्छेद लिखिए।

2. खाने से संबंधित कोई 10 मुहावरे लिखिए।

3. भोजन पर किंवदंती लिखिए।

4. विदेशी फलोंका चिप बनाइए, उसकी उम्र कहां से है बताइए और वह कैसे बनता है वह हमारे लिए लाभदायक है या नहीं बताइए।

5. अपने पसंदीदा खाने का चिप सहित वर्णन कीजिए। 1 फल की सामग्री और विधि सहित वर्णन कीजिए।

3	MATHS	<p>Activity 1.</p> <p>Purchase some food items from market like one packet of biscuits, one packet of namkeen, one chocolate etc. Note down their cost along with the name of the food item and prepare a bill.</p> <p>Activity 2</p> <p>The food item you like to eat. (at least 5) Collect their wrappers and paste it on project paper.</p> <p>Activity 3</p> <p>* Ask your family members which vegetable they disliked most and complete the table.</p>
---	--------------	--

Vegetable they disliked	No. of people

Use this table to draw the chart and answer the following question.

1. The most disliked vegetable is
2. The vegetable disliked by. Very few people is

Activity 4.

How many times a day do you eat food, show your food timing routine through pictures of different clocks.

4.TWAU

Activity 1.

Make a food pyramid.

Activity 2.

Write about 5 festivals and the food that is prepared on that festival. Activity 3.

Make a table/ chart of things that you eat in a day. At the end of the day analyse whether the things you ate were healthy or unhealthy.

Activity 4.

Prepare a healthy drink of your choice and write its ingredients along with the recipe. Write how that drink benefits you.

General instructions

- 1.MDP can be done in a scrapbook.
2. The following common pages must be there in MDP.
3. a) Covering page containing logo of the KVS, school name, students name, Class, Section, Roll no. and the theme on which MDP is being prepared.
4. Index containing the name of the subject along with the Page numbers.
5. Assessment page should be in the following format.
IS.no.| Subject| Subject teacher name| Marks obtained.
7. Conclusion page mentioning the overall learning and experiences they have gained while preparing the MDP.

Multi-Disciplinary Project (MDP) For Class 5 Session 2024-25 Based on NEP 2020



PM SHRI KENDRIYA VIDYALAYA _____



Multi-Disciplinary Project (MDP) (Session 2024-25)

Project Title-

Name- _____

Class/Section- V

Subject- English, Hindi, Mathematics, and EvS

Teacher's Name-

Date- ____/____/____

PM SHRI KENDRIYA VIDYALAYA _____

Student Signature:

Teacher's Signature

KENDRIYA VIDYALAYA ONGC RAJAMAHENDRAVARAM
SUMMER VACATION HOLIDAY HOMEWORK 2025-26
CLASS 3 TWAU

Points to remember:

Do all the homework on A4 sheets. Keep all the sheets in an attractive file and submit on 21st June.

1. Plant any seed and record observations for 5 weeks with pictures.
2. Make a creative poster with slogans on the topic "Save water"
3. Make a picture collage showing different animals and their habitats. Label each habitat and animal.
4. Create a useful object from waste material from your house.
5. Write a short story about any community helper, how they contribute to the world with pictures.
6. Create a poster about their favourite animal, including its habitat, diet and one fun fact.


कक्षा चतुर्थ

ग्रीष्मकालीन अवकाश गृहकार्य

हिंदी

इस चित्र के बारे में 5 वाक्य लिखो:

रेलवे स्टेशन	यात्री	सामान	रेलागाडी
पटरी	सूचना	पेल्टफर्म	समय



shutterstock.com • 1318125407

2) अपने मित्र को पत्र लिखो जिसमें आप बाज़ार में क्या क्या देखा और किन चीज़ों को कैसे खरीदा ।

3) नियम न.1 का इस्तेमाल करते हुए वचन बदलो

(आ की मात्रा ए के मात्रा में बदल जाना)

कपडा- ----- मकान- ----- रात - -----

नियम न. -2

(इ मात्रा ई मात्रा में बदल जाना और ---- जोड़ना)

बिल्ली- ----- रोटी - -----

चूड़ी - ----- साड़ी - -----

हमारे देश का राष्ट्रीय पक्षी मोर का फैलश कार्ड बनाना और ५ वाक्य लिखना।

१० पन्ने हिंदी सुलेख लिखना।

KENDRIYA VIDYALAYA ONGC RAJAHMUNDRY

2025-2026

Class :5 Subject:English Holiday Homework

Activity 1: Prepare a chart on the following topic according to your roll number:--

Preposition(1-10)

Verb (11-20)

Adjective (21-30)

Pronoun (31-40)

Activity 2:Prepare a magazine which includes an interesting story,poem,Jokes
Riddles,Cross word puzzle and some interesting facts.

Activity 3: Write a short paragraph about your bus journey or a scene of railway station.

Activity 4:prepare a picture cards of any story and write the same story in A4 sheet
home work paper.

Activity 5: Read the newspaper daily and write any 5 new words daily from it.

The world around us /EVS summer holidays homework

Note: Submit the holiday work in A4 sheets on 21st June 2025.

Classwork tables are to be done in classwork only as they are Observation tables.

- 1) Write 5 slogans on water conservation
- 2) Prepare a diet chart on Body building food, Energy rich food and protective food. Define with examples. Paste pictures if possible
- 3) Draw sign boards you see on the road and write what they are meant for? Example: parking




symbol is

- 4) Write few lines about any game you play
Points to be included:
 - i) Name of the game
 - ii) Materials required
 - iii) How to play
 - iv) Rules of game
 - v) With whom you like to play
- 5) Complete the tables given in class work.

SUMMER HOLIDAYS HOMEWORK.

Subject: Mathematics Class: 6A & B

1. Complete number sequence (pg no: 3, Table-1)
2. Draw regular polygons (pg no: 10, Table 3)
3. why are 1, 3, 6, 10, 15, ... called triangular numbers? (pg no: 5, Ex-2)
and why 1, 4, 9, 16, 25, ... called square numbers.
4. which sequence do you get when you start to add all 1's sequence up? what sequence do you get when you add the all 1's sequence up and down? (ano: 3, pg: 8)
5. What happens when you start to add up Hexagonal numbers i.e take 1, $1+7$, $1+7+19$, $1+7+19+37$, ...? which sequence do you get? can you explain it using a picture of a cube?
6. Define a) A ray b) line segment c) straight line. (Given in C.W)
7. write about An angle with figure (Page: 17)
8. Explain why $\angle APC$ can not be labelled as $\angle P$ (ano: 3, pg no: 20)
9. Name the angles marked in the given figure. (pg no: 17)

10. write 6 to 15 tables (up to 20 steps).

HOLIDAY HOME WORK

Subject : Mathematics

Class: 7.A & B

1. Solve the following:

a) $0 + 25 = \underline{\hspace{2cm}}$

c) $100 \times 1 = \underline{\hspace{2cm}}$

b) $30 \times 1 = \underline{\hspace{2cm}}$

d) $100 + 0 = \underline{\hspace{2cm}}$

2. Find the prime factors of given numbers.

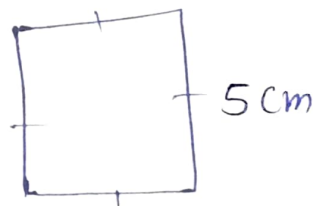
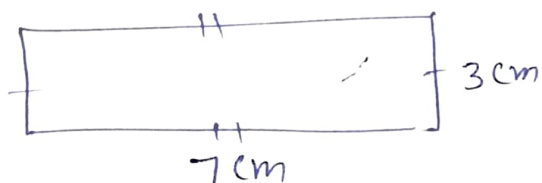
A). 50

B) 250

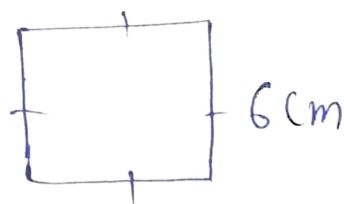
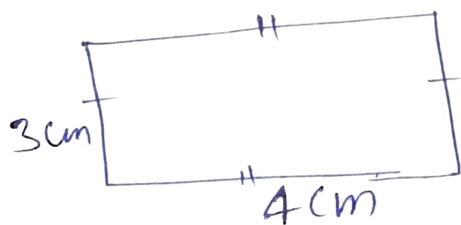
c) 100

3. Draw a line, line segment, a ray and an angle.

4. Find the perimeter of following figure.



5. Find the Area of following figure.



6. Solve the equations:

a) $N + 4 = 7$

d) $P - 8 = 10$

b) $m + 2 = 5$

e) $F + 2 = 14$

c) $K + 4 = 10$

f) $R - 10 = 20$

7). Write the name of the types of triangles
Based on sides and angles.

8). Draw intersecting lines and parallel lines

9). Draw the bar graph from the given table.

Class	No. of students
7A	45
7B	40
7C	30
7D	30

* Take class on x-axis

* ~~And~~ Take students on y-axis

10). Find the mean of the data 3, 7, 4, 9, 2.

11). Find the median of the data 9, 4, 9, 1, 4, 7, 4, 0, 8.

12). Find the mode of the data 6, 30, 3, 7, 30, 5, 7, 8.

13). Solve : $-5\frac{7}{5} + 3\frac{4}{3}$

14). Simplify : $\frac{5}{6} + \frac{2}{5}$

15) write 8 to 18 tables (up to 20 steps).

— All the Best —

CLASS VII B SUMMER VACATION HOMEWORK

1 MDP THE TOPIC= WATER CONSERVATION

2 LEARNER'S DIARY FOR APRIL 2025

3 SUBJECT ENRICHMENT = BOOK REVIEW OF ANY THREE NOVELS HAVING MINIMUM 100 PAGES (BOOKS BY 1 ENID BLYTON

2 J K ROWLING OF Harry Potter fame

3 ROALD DAHL

4 100 FREQUENTLY MISSPELT WORDS

(YOU CAN GET PDF VERSION OF ALL FAMOUS FIVE BOOKS OF ENID BLYTON, ROALD DAHL BOOKS—JUST GO TO GOOGLE SEARCH ENGINE!)

CHART WORK

1 LIST OF PROVERBS (ROLL NOS1-5)

2 HOMONYMS AND HOMOPHONES LIST
(ROLL NOS 6-10)

3 PALINDROMES (ROLL NOS 11-15)

4 PORTMANTEAU WORDS (ROLL NOS 16-
20)

5 ONE WORD SUBSTITUTIONS (ROLL
NOS 21-25)

6 ANIMALS AND THEIR YOUNG ONES
(ROLL NOS 26-30)

7 ANIMALS AND THEIR CRIES (ROLL NOS
31-35)

8 MASCULINE AND FEMININE FORMS
LIST (ROLL NOS 36-40)

ANY ONE TOPIC

HOLIDAY HOME WORK.

SUB: Mathematics

class: 8A & B

- 1) write no. of edges, sides and vertices of the cube
- 2) Complete the puzzle:

	-	4	-		1
+		-			
2	x		+	8	18
+		+		-	
	-	3	x		20
	15	2		0	

- 3) Draw 8 types of regular polygons.
- 4) write 8 to 18 tables (up to 20 steps).
- 5) write types of fractions with 3 Examples each.
- 6) Complete the pattern.
 $\square + \square + \square = 15$
 $\triangle + \triangle + \square = 23$
 $\triangle + \square + \bigcirc =$
 $\bigcirc + \triangle + \triangle =$
- 7) write and draw any 4 regular 3D-solids objects.
- 8) write any 7 formulas of Exponents and powers.

9). Comple the puzzle: 1

$$1 + 3 = 4$$

$$1 + 3 + 5 = 9$$

$$1 + 3 + 5 + 7 = \text{---}$$

$$1 + 3 + 5 + 7 + 9 = \text{---}$$

$$1 + 3 + 5 + 7 + 9 + 11 = \text{---}$$

10). Draw the bar graph of the data.

Year	1981	1991	2001	2011	2021
Population ^(Cr)	70	90	100	20	140

11). Answer from the following puzzle:

0	1	2	3	4	5	6	7	8	9
10	11	12	13	14	15	16	17	18	19
20	21	22	23	24	25	26	27	28	29
30	31	32	33	34	35	36	37	38	39
40	41	42	43	44	45	46	47	48	49
50	51	52	53	54	55	56	57	58	59
60	61	62	63	64	65	66	67	68	69
70	71	72	73	74	75	76	77	78	79
80	81	82	83	84	85	86	87	88	89
90	91	92	93	94	95	96	97	98	99

- The number is greater than 9.
- The number is not multiple of 10.
- The number is multiples of 8
- The number is even
- The number is less than 50.
- It's ones digit is less than Tens digit 8). It's Tens digit is

- 12). write any 20 palindrom numbers using 3-digit and 4-digit.
- 13). Draw the Chart of number system.
- 14). Define rational numbers with Examples.
- 15). write Commutative properties in rational numbers in addition, subtraction and multiplication.
- 16). write the factors of 60 and 24.
- 17). write first 10 multiples of 17.
- 18). Do and play an activity on cube with your family and make a table.
- 19). write Common multiples and common factors of 20 and 30.

All the Best.

VIII A

SUMMER HOLIDAY HOME-WORK 2025-26

1 Social : MDP :- Topic - "Human resource is the ultimate resource",

(a) On a A4 size coloured paper write the factors effecting distribution of population.

(b) On political map show the (i) most populous state
(ii) least populous state.

(c) write an article on "Importance of human resource"

(d) Draw a poster showing work of different Professional [occupation]

Ex: Teacher, Doctor, Scientists etc.

2 On a chart paper write comparison and difference between traditional and modern farming methods.

3 In Activity register write fundamental rights of Indian citizens given in the Constitution of India

CLASS IX SUMMER VACATION ENGLISH HOMEWORK

1 WORKBOOK- WORDS AND
EXPRESSIONS-1 FIRST TWO CHAPTERS

2 SUBJECT ENRICHMENT ACTIVITY

ART INTEGRATED PROJECT (PPT)

3 MULTIPLE ASSESSMENTS

BOOK REVIEW OF ANY THREE NOVELS

BOOK REVIEW FORMAT

1 NAME OF THE BOOK :

2 NAME OF THE AUTHOR:

3 SUMMARY OF THE BOOK IN 150
WORDS

4 WHAT I LIKE AND DISLIKE ABOUT THE
BOOK

5 BIG, BIG (BOMBASTIC,
MAGNILOQUENT, GRANDILOQUENT,

FLAMBOYANT, OSTENTATIOUS,
OROTUND, ROTUND, RHETORIC. DUTCH
FALUTIN) WORDS FOUND

(YOU CAN GET PDF VERSION OF ALL FAMOUS
FIVE BOOKS OF ENID BLYTON, ROALD DAHL
BOOKS—JUST GO TO GOOGLE SEARCH
ENGINE!)

CHART WORK

1 LIST OF PROVERBS (ROLL NOS1-5)

2 HOMONYMS AND HOMOPHONES LIST
(ROLL NOS 6-10)

3 PALINDROMES (ROLL NOS 11-15)

4 PORTMANTEAU WORDS (ROLL NOS 16-
20)

5 ONE WORD SUBSTITUTIONS (ROLL
NOS 21-25)

6 ANIMALS AND THEIR YOUNG ONES
(ROLL NOS 26-30)

7 ANIMALS AND THEIR CRIES (ROLL NOS
31-35)

8 MASCULINE AND FEMININE FORMS
LIST (ROLL NOS 36-40)

ANY ONE TOPIC

CLASS X SUMMER VACATION ENGLISH HOMEWORK

1 WORKBOOK- WORDS AND
EXPRESSIONS-2 = SIX UNSEEN
PASSAGES

2 SUBJECT ENRICHMENT ACTIVITY
ART INTEGRATED PROJECT (PPT)

3 MULTIPLE ASSESSMENTS

SUMMARY OF FOUR LESSONS IN ABOUT
150 WORDS (TWO FROM FIRST FLIGHT
AND TWO FROM FOOTPRINTS WITHOUT
FEET WITH LIST OF DIFFICULT WORDS
AND THEIR MEANINGS)

1. FIRST FLIGHT

1. A Letter to God (ROLL NOS 1-10) AND (ROLL NOS 41-48)
2. Nelson Mandela - Long Walk to Freedom (ROLL NOS 1-10)
3. Stories About Flying (ROLL NOS 11-20)
4. From the Diary of Anne Frank (ROLL NOS 11-20)
5. Glimpses of India (ROLL NOS 21-30)
6. Mijbil the Otter (ROLL NOS 21-30)

7. Madam Rides the Bus (ROLL NOS 31-40)
8. The Sermon at Benares (ROLL NOS 31-40)
9. The Proposal (Play) (ROLL NOS 41-48)
2. FOOTPRINTS WITHOUT FEET
1. A Triumph of Surgery (ROLL NOS 1-10) AND (ROLL NOS 41-48)
2. The Thief's Story (ROLL NOS 1-10)
3. The Midnight Visitor (ROLL NOS 11-20)
4. A Question of Trust (ROLL NOS 11-20)
5. Footprints Without Feet (ROLL NOS 21-30)
6. The Making of a Scientist (ROLL NOS 21-30)
7. The Necklace (ROLL NOS 31-40)
8. Bholi (ROLL NOS 31-40)
9. The Book that Saved the Earth (ROLL NOS 41-48)

CHART WORK

1 LIST OF PROVERBS (ROLL NOS 1-5)

2 HOMONYMS AND HOMOPHONES LIST
(ROLL NOS 6-10)

3 PALINDROMES (ROLL NOS 11-15)

4 PORTMANTEAU WORDS (ROLL NOS 16-20)

5 ONE WORD SUBSTITUTIONS (ROLL NOS 21-25)

6 ANIMALS AND THEIR YOUNG ONES (ROLL NOS 26-30)

7 ANIMALS AND THEIR CRIES (ROLL NOS 31-35)

8 MASCULINE AND FEMININE FORMS LIST (ROLL NOS 36-40)

ANY ONE TOPIC

Class 5

MATHEMATICS

1.Tables Practice

Learn and write Multiplication table from 12 to 22 up to 12 count.

2. Fun with numbers

Write number names and expanded form of following numbers

3,462

5,309

7,008

1,210

3. Multiplication and division practice

Multiply

234x6

145x8

730x19

809x22

Divide

672 by 4

945 by 7

1210 by 18

7315 by 21

4. Daily mathematics diary

Note any 3 uses of maths in daily life Related to shopping ,time ,cooking (for example we bought 2 kg of apples. Each kg cost to ₹250. We paid ₹500)

5. Shapes hunt

Identify and draw at least 5 objects around your home data shaped like

Circle

Square

Cylinder

Triangle

6. Time travel

Make a timetable of your day during holidays

Maintain a 3-day record of the time you wake up, brush your teeth, have meals, study, and play. Write the time in both 12-hour and 24-hour formats.

Write the duration (in minutes) you spent on each activity.

7. Money matters

Create your own imaginary menu at least 5 items with prices.

ask your family members to order make their bills.

8. Puzzle

Create 2 maths word problem of your own solve them too!

9. Creative corner

Make a maths themed drawing or collage.(example-any bird or animal drawing using shapes,rangoli or any collage.)