



आंचलिक शिक्षा एवं प्रशिक्षण संस्थान, मैसूरु
ZONAL INSTITUTE OF EDUCATION & TRAINING, MYSURU

Learners' Achievement Test
Questions

CLASS-III

Prepared during the 3 Day Workshop for HMs and
Senior PRTs of KVS Bangalore Region
from 10.03.2025 to 12.03.2025



COURSE DIRECTOR

Ms. MENAXI JAIN
DEPUTY COMMISSIONER, KVS &
DIRECTOR, ZIET, MYSORE

ASSOCIATE COURSE DIRECTOR

Mr. MITHILESH KUMAR
Principal
KV BRBNMPL, MYSORE

COURSE CO-ORDINATOR

Mr. RAJENDRAN
Training Associate (Eng)
ZIET Mysore

RESOURCE PERSONS

Mrs.CHEMMALAR SHANMUGAM
HM, PM SHRI KV Jalahalli No.2 (East), Bangalore.

Mrs.SUDHA P
HM, PM SHRI KV Jalahalli (West) No.1, Bangalore

Foreword

It gives me immense pleasure to present this LAT Question Bank, developed as part of the Workshop on **THREE-DAY WORKSHOP On LEADERSHIP EXCELLENCE For ACADEMIC HEADS--EMPOWERING HMs For TRANSFORMATIONAL IMPACT of Kendriya Vidyalayas** from Bengaluru Region, conducted by **KVS ZIET Mysore** from **10th March to 12th March 2025** in Face-to-Face mode.

We are pleased to present this question bank booklet on Language Achievement Test (LAT) questions, meticulously prepared by our dedicated teachers and HMs of Bangalore Region. This booklet aims to support students in enhancing their literary and numerical skills and preparing effectively for LAT assessments by PARAKH and also by KVS Headquarters.

This question bank booklet containing 100 questions each for English, Hindi, and Maths, designed to support students in assessing and enhancing their proficiency in these subjects. A key is provided at the end of each subject section to facilitate self-assessment and learning.

The questions align with learning outcomes to help students assess and improve their skills in English, Hindi, and Maths. Keys at the end of each subject section enable students to check their answers and learn from them.

The effort by teachers in preparing these questions reflects their commitment to student success and quality education.

We appreciate the hard work of the teachers who contributed to creating this valuable resource for students. May this manual serve as a guiding light in fostering a holistic and interactive learning environment in our Kendriya Vidyalayas.

(मीनाक्षी जैन /Menaxi Jain)

निदेशक /Director

के वि एस ज़ीट मैसूर/KVS ZIET Mysore

Questions Preparation and Compilation Team

English

Sl. No.	Name of the Teacher	Designation	Kendriya Vidyalaya
1	Ms Chemmalar Shanmugam	HM	PM SHRI KV 2 Jalahalli
2	Ms.Jaibala Prakash	HM	PM SHRI KV ASC centre (S)
3	Ms.Amandeep Sandhu	HM	KV NAL Campus
4	Ms.C. Seshakumari, KV BRBNMPL, Mysuru	PRT	KV BRBNMPL, Mysuru
5	Ms Rathy Balakrishnan	PRT	KV BEML NAGAR KGF
6	Mr.Saksham Shukla	PRT	PM SHRI KV Malleswaram, Shift 2
7	Ms.C. Seshakumari, KV BRBNMPL, Mysuru	PRT	KV BRBNMPL, Mysuru
8	Ms.Mohini Shivanand Rohikar	PRT	PM SHRI KV 3, Machhe, Belagavi
9	Neha Sharma	PRT	PM SHRI KV 2 Hubballi
10	Mrs.Enoo Hazarika Dutta	PRT	PM SHRI KENDRIYA VIDYALAYA NO. 1 AFS SAMBRA BELAGAVI
11	Mrs. Kavitha DR	PRT	PM SHRI K V TUMKUR
12	Ms.Rekha.H	PRT	PM SHRI KV Hassan
13	Ms.Suvarna M Sheelin	PRT	PM SHRI KV Vijayapura
14	Mr. Sandeep Kumar	PRT	PM SHRI KV KODAGU
15	Ms. Sinu K Narayanan	PRT	PM SHRI KV HEBBAL

Hindi

Sl. No.	Name of the Teacher	Designation	Kendriya Vidyalaya
1	Mrs. Susmita Bandopadhyay	HM	PM SHRI KV MG Railway Colony
2	Mrs. Sunita V	HM	KV RWF Yelahanka
3	Mrs. Neetu Mishra	HM	PM SHRI KV Hebbal
4	Mr. K Kalkeri	HM	PM SHRI KV Kalaburgi
5	Mr. Sandeep	HM	PM SHRI KV Mysuru
6	Ms Aashu	PRT	PM SHRI KV 2 Jalahalli
7	Ms. Meera Kumari	PRT	PM SHRI KV Hebbal
8	Mrs. Amthul Mohsin	PRT	PM SHRI KV Mandya
9	Mrs. Akshatha KV	PRT	PM SHRI KV Chamarajanagar
10	Mrs. Ambreen	PRT	PM SHRI KV Chikmagalur
11	Ms. Dipika Bhat	PRT	PM SHRI KV Hospet
12	Mrs. Vijayalakshmi	PRT	PM SHRI KV AFS Bidar
13	Mr. Pradip	PRT	KV Donimalai
14	Ms. Shweta	PRT	PM SHRI KV Karwar
15	Ms. Mannu Rani	PRT	KV Haveri
16	Ms. Deepika	PRT	KV Udupi
17	Ms. Jyoti	PRT	PM SHRI KV Gangavathi
18	Ms. Madhavi	PRT	PM SHRI KV No.1 Hubballi
19	Ms. Vaishali	PRT	PM SHRI KV AFS Yelahanka
20	Mr. Sunil Lakra	PRT	KV Hutti
21	Mr. Feroz Khan	PRT	PM SHRI KV Dharwad

Maths

Sl. No.	Name of the Teacher	Designation	Kendriya Vidyalaya
1	Mrs Sunita Deshpande	HM	KV IISc
2	Mrs Bhagyalakshmi	HM	PM SHRI KV MEG and Centre
3	Ms Arty Dwivedi	PRT	PM SHRI KV2 Jalahalli
4	Ms. Radha	PRT	KV DRDO
5	Ms. Vani	PRT	KV KR Puram
6	Ms.Sheeja Nambiar	PRT	PM SHRI KV2 Mangalore
7	Mr. Krishna	HM	PM SHRI KV 1Mangalore
8	Ms.Rama	PRT	KV Yeshwantpur
9	Ms.Hemalata	PRT	PM SHRI KV 2 Belagavi
10	Ms. Shaji	PRT	PM SHRI KV Malleshwaram Shift 1
11	Ms. Durga	PRT	PM SHRI KV Chikodi
12	Ms. Anjali	PRT	PM SHRI KV CRPF
13	Mr. Md. Illiyas	PRT	PM SHRI KV Davangere
14	Ms. Sunitha Jayanthi	PRT	PM SHRI KV Ballari

Cover Page Design-Mr Sachin Verma, PRT, KV Donimalai

Team Coordinator: Mrs Chemmalar Shanmugam, HM, PM SHRI KV 2 Jalahalli

1. Riya and Meera are best friends. They love playing in the park after school. Meera helps Riya with her homework, and Riya shares her favourite story books with Meera. They both know that in times of need they will be by the side of the other.

What is the main theme of the passage?

- a. Riya and Meera love to play.
- b. Both the friends help each other.
- c. Both the friends have story books.
- d. Friends go to the park after school.

2. In which of the words is the sound of 'g' different from the others?

- a. green
- b. badge
- c. rings
- d. garlic

3. Some words are listed below. Which word will appear fourth in the list, if the words are arranged in alphabetical order?

speak *spill* *spade* *spun* *spoon*

- a. spoon
- b. spade
- c. spill
- d. speak

4. Given below is a poster that appeared in a newspaper. What kind of problem is being addressed through this poster?

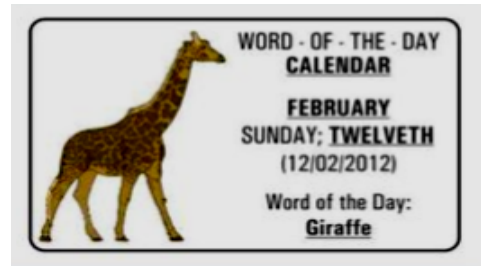
- a. noise pollution
- b. water pollution
- c. overcrowding
- d. food wastage



d.

5. Which word in the poster has a spelling mistake?

- a. calendar b. twelveth
- c. giraffe d. February



6. Amir wants to cross the river. What will he use?

- a. a car b. a boat c. a tractor d. a bicycle

7. Bhanu was asked, "Where do you live?" He replied, "I live a house." What should have been said by him?

- a. I house in live. b. House live in.
- c. I live in a house. d. House I live in.

8. All the members of the team helped each other and won the match. The captain said " _____" in his speech.

- a. Unity is strength b. Old is gold
- c. Honesty is the best policy d. Tit for Tat

9. At first my _____ did not _____ me to ever play video games after school, but now they _____ it _____.

- a. teachers, encourage, ban, never
- b. parents, ban, agree, sometimes
- c. parents, allow, permit, sometimes
- d. teachers, allowed, agreed, always

10. Sashi wanted a pen. Seema lent him a pen. What should Sashi tell Seema?

- a. Sorry b. Excuse me c. Thank you d. It is OK.

11. Drinking two _____ of milk daily makes our bones strong.

- a. cups b. tubes c. slices d. boxes

12. This is a story book. It belongs to my mother. Whose book, is it?

13. Seema mixed up the chits with instructions, to make bhindi sabji. Help Seema to put them in the right order.

-

The plastic lid did not sink because it was light in weight.

19. It is a bright morning and the sun is rising. Where is the sun?



20. We can _____ sounds with our _____.

21. Rahul will be away for a fortnight. He doesn't need milk during this period. He told the milkman not to supply milk for days

- 22. Read the passage and answer the questions**

It was Tina's first day at new school. She loved the big playground. One day, Tina saw Shobha and Kiran playing a new game. They were jumping with one foot on the white square boxes made on the sidewalk. Each box had a number. Tina was excited.

She wanted to learn and asked “Can I play?” Shobha and Kiran showed her how to throw a small stone into one of the squares and jump with one foot. Tina tried like her friends. She fell, and felt sad.

Shobha said, “Don’t worry. Try jumping again!” Tina started again. This time, Tina jumped on every square.

i. What did Tina like about her new school?

- a. school building b. playground c. swings d. swimming pool

ii. Which of the following has NOT been mentioned about the game?

- a. throwing stone b. playing with one foot
c. jumping on white squares d. minimum four players

iii. Where did most of this story happen?

- a. inside Tina’s house b. in the park
c. inside the classroom d. in the school playground

23. A pet dog sees a small cat walking near its food bowl. The dog gets angry and starts barking loudly and runs towards the cat. Why did the dog bark loudly?

- a. The dog wants to sleep and is annoyed by the cat.
b. The dog is scared of the cat and wants to run away.
c. The dog feels that the cat has come to take his food and wants to chase it away.
d. The dog wants to play with the cat and is calling it to play.

24. Which one of the following options represents the names of the figures in the correct alphabetical order.


i.



ii.



iii



iv.



a. i, ii, iii, iv

b. ii, iii, iv, i

c. ii, iii, i, iv

d. iv, iii, ii, i

25. Kajal: “I did not know we had to reach school at 8:00 a.m. today. No one told me _____ about this.”

a. something b.anything c. nothing d. everything

26. If a person is described as 'as busy as a bee,' what does it mean?

- a. They are working hard. b. They are sleeping.
c. They are flying. d. They are making honey.

27. Anu loved reading as a child. Now she _____ writing books for children.

- a. was b. will c. would d. is

28. On our trip to the _____, we had hot halwa for _____ after dinner.

- a. desert, dessert b. dessert , desert c. desert , desert d. dessert, desert

29. Rearrange the sentences in proper order:

i.Snowy wanted to drink milk.

ii.Snowy is Rani's cat

iii.Rani poured the milk in to her bowl.

iv. Rani refused to pour more milk.

v. Snowy wanted more milk.

- a. ii, i, iv, iii, v b. ii, i, iii, v, iv c. iv, v, iii, I, ii d. v, iii, iv, ii, i

30. Madhu shared his food with the old man. What kind of person is he?

- a.selfish b. healthy c. greedy d. kind

31. Lata saw a dog. _____ was sleeping near a tree.

- a. It b. That c. A d. Her

32. During Lohri people sing _____ dance happily.

- a. or b. but c. and d. then

33. The _____ were sitting in a _____ .

- a. cats, boxes b. cats, box c. cat, boxes d. cat, box

34. Leela, a student, reduced her plastic usage by carrying a reusable water bottle. She inspired her friends to do the same.

What would have been the impact of Leela's actions?

- a. increased plastic use
- b. improved plastic use
- c. no impact on plastic use
- d. decreased plastic use

35. As the sun set over the ocean, a young boy named Jack built a sandcastle. He worked tirelessly. As the waves approached, Jack's castle stood strong. But as the tide rose, the castle began to crumble. Jack smiled, knowing he would build another tomorrow.

What would Jack do tomorrow?

- a. not build a sandcastle
- b. build a sandcastle
- c. complaint to the teacher
- d. cry because he is unhappy


36. *Teacher and School* are a pair. Which of the following is a pair?

- a. doctor and hospital
- b. surgery and doctor
- c. doctor and nurse
- d. patient and nurse

37. What should we do to succeed in life?

- a. hardly work
- b. harder work
- c. work hard
- d. hardest work

38. Which of the words cannot be made using the letters from the name of this animal?



- a. photo
- b. mouth
- c. shop
- d. hope

39. Tick the correct sentence.

- a. What did the farmer grew on his farm?
- b. What did the farmer grow on his farm?
- c. What did the farmer grown on his farm?
- d. What did the farmer grown in his farm?

40. Read these lines. What do they tell us?

Every day, I like to sweep and mop my room. I wash my clothes and clean the dishes.

- a. I live in a dirty house.
- b. I am forced to work.
- c. I hate my work.
- d. I like cleanliness.

41. Choose the option in which all the words have the SAME sound of 'a'

A	B	C	D
lame	castle	fame	grape
sharp	salt	mail	father
flask	glass	brake	master
care	hand	gain	sand

- a. lame, shark, flask, care
- b. castle, salt, glass, hand
- c. fame, mail, brake, gain
- d. grape, father, master, sand

42. A number of birds eating, flying and resting together is a_____.

- a. herd
- b. pack
- c. flock
- d. band

43. “Put the cake _____”, said my brother.

- a. their
- b. there
- c. theyLet’s’re
- d. they are

44. What is common in all these words?

listen *whistle* *Christmas* *often*

- a. The letter ‘t’ is silent
- b. They are all nouns
- c. They are all verbs
- d. They are in alphabetical order

45. Which phrase has the correct punctuation marks?

- a. Let us, eat kids!
- b. Let us eat, kids!
- c. Let us eat kids!
- d. Let’s eat kids.

46 A woman had a son. The son had a ball. He loved playing with it. 'It' refers to ____.

- a. the boy b. the woman c. the ball d. the boy's friend

47. My sister and me went to the zoo. We saw the monkeys there. 'We' refers to _____

- a. my sister b. me c. my friends and me d. my sister and me

48. A grey cat was sitting on the table. Suddenly, it jumped _____ the table.

- a. inside b. in c. from d. at

49. Choose the correct sentence

- a. The bird flew to its nest. b. The bird flew to their nest.
c. The bird flew to which nest. d. The bird flew to it nest.

50. My friend said, "I went to the library yesterday. "I found an interesting _____ there."

- a. pumpkin b. book c. tree d. bus

51. Which sentence is written correctly?

- a. I like to eat apple. b. I like to eat apples.
c. I like to eat apple's. d. I like to eats apples.

52. Read the following passage:

The sun was shining brightly, and the birds were singing happily. A little girl skipped along the path, enjoying the warm breeze. What was the weather like?

- a. rainy b. cloudy c. sunny d. snowy

53. The teacher was teaching the 'Parts of a Flower'. She showed them a flower and told them, "Look here carefully!". She wanted them to _____ the flower.

- a. destroy b. observe c. forget d. smell

54. Your friend drops his books. What should you do?

- a. Help him pick them up. b. Laugh at him.
c. Walk away from there. d. Drop your own books.

55. Your teacher has asked you to submit an assignment tomorrow. What should you do?

- a. Watch T.V b. Start doing the assignment

c. Copy the assignment from your friend d. Absent yourself from school

56. Mangoes are _____ when they are raw and _____ when they are ripe.

- a. blue, green b. yellow, green c. green, yellow d. green, pink

57. The cow gave birth to a _____.

- a. kitten b. chicken c. puppy d. calf

58. Manu's clothes were torn. He needed a needle and _____ to stitch his clothes.

- a. thread b. table c. bat d. key

59. It was late in the night. Suddenly Ruth heard a loud mew. Who did she hear?

- a. a dog b. a cat c. a lion d. a duck

60. I have no sharp edges and I can be bounced. Who am I?

- a. a kite b. a swing c. a slide d. a ball

61. I am cold and sweet. Who am I?

- a. an ice cream b. a doll c. a snowman d. a cherry

62. Two _____ went to a shop to buy three _____.

- a. child, brush b. children, brushes c. child, brushes d. children, brush

63. The _____ and her cubs were resting under a tree.

- a. lion b. lioness c. hen d. she-elephant

64. I have a pen and three pencils. The pen _____ red in colour and the pencils _____ blue in colour.

- a. are, is b. are, are c. is, are d. is, is

65. I want to sleep _____ I have not finished my homework.

- a. and b. so c. or d. but

66. Day-after-tomorrow I will be going to Delhi. It will be Friday then. What day is it today?

- a. Sunday b. Monday c. Wednesday d. Saturday

67. If Saturday is the seventh day of the week, then Monday will be the _____ day of the week.

- a. first b. second c. third d. fourth

68. What will be the first two letters of the underlined word?

I like to read a ____ ory every night before going to sleep.

- a. st b. sk c. sp d. sw

69. My mother has gone to the bank. She works _____.

- a. here b. hear c. there d. their

70. Which is the BEST way to join the sentences given below?

They should be doing their homework. They keep talking.

- a. They should be doing their homework but they keep talking.
b. They should be doing their homework if they keep talking.
c. They should be doing their homework but They keep talking.
d. They should be doing their homework because they keep talking.

71. The sun is in the east. What time of the day is it?

- a. afternoon b. night c. morning d. evening

72. My mother came back home from Mumbai. She _____ a new bag from the shop .

- a. brought b. bring c. bought d. buy

73. Which is the correct order?

Before you cut the lemon, wash it. Squeeze the juice into a glass of water. Add a spoonful of sugar. Then add a pinch of salt. Stir it.

- i. Add sugar
ii Add salt
iii. Wash lemon
iv. Take a glass of water
v. Squeeze the lemon
vi. Stir it
vii. Cut the lemon

a. i, ii, iv, v, vi, iii, vii b. iii, vii, iv, v, i, ii, vi c. iii, vii, v, iv, i, ii, vi d. iii, i, ii, iv, vi, vii, v

74. An ant has fallen into a lake. It does not know to swim. We can save it from sinking by throwing _____ for it to climb on to.

a. a steel spoon b. a leaf c. a small stone d. a 5 rupee coin

75. Which of the following will NOT roll down a slide?

a. a book b. a wheel c. a laddoo d. an orange

76. Anu threw a stone in the dark. She heard a splash. Where did the stone fall?

a. grass b. sand c. water d. a carpet

77. How many vowels are there in the word 'BUFFALO'?

a. two b. three c. one d. five

78. 'SLATE' can be rearranged to form the word 'STEAL' meaning 'rob'.

The letters of which of the words below can be rearranged to form a new word meaning 'jump'?

a. table b. meat c. pale d. rope

79. Beena wants a pillow. Where should she go to find it?

a. park b. kitchen c. bedroom d. stationery shop

80. If the answer is: I live in Hyderabad. What should be the question?

a. Where do you live? b. Why do you live?
c. How do you live? d. What do you live?

81. Shinu and Raj are friends. What should they NOT do?

a. Help each other b. Hurt each other
c. Share food d. Talk politely with each other

82. What would you be doing at 8:00 a.m.?

- a. eating dinner b. eating breakfast c. eating lunch d. eating brunch

83. Choose the group/groups with correct spelling.

- a. friend, tie, thief b. friend, tye, thief
c. freind, tie, thief d. friend, tie, theif

84. Why should you eat fruits?

- a. They make us healthy. b. They make us ill.
c. They taste bad. d. They cost a lot.

85. **Read the text and choose True or False.**

Leela has a big box of sweets. Her little brother, Karthick, wants a sweet.

Karthick: I want a sweet!

Leela: No, Karthick. You can't have a sweet.

Karthick: Leela, can I have a sweet?

Leela: No, Karthick. You can't have a sweet.

Karthick: Leela, can I have a sweet, PLEASE?

Leela: Yes, now you can. Here you have.

Karthick: Great!

Leela: Karthick! What's the word?



Karthick: THANK YOU!

Now Karthick is happy. He knows the magic words.

- | | | |
|--|------|-------|
| 1. Leela has a small box of marbles. | True | False |
| 2. Karthick is Leela's brother. | True | False |
| 3. At first Karthick couldn't have a sweet. | True | False |
| 4. The magic words are "Please" and "Thank You". | True | False |
| 5. We must use impolite words when we speak. | True | False |

86. There are forty-five students in class 3A. Ruhana is the _____ of them all.

- a. best b. better c. good d. bestest

87. The  is _____ than the 

- a. bright b. brighter c. brightest d. smallest

88. The _____ can run very fast.

- a. dear b. deer c. daer d. dare

89. Choose the sentence without error.

- a. He said, "Give me your watch friend" b. He said, "Give me your watch friend"
c. He said "Give me your watch, friend" d. He said, "Give me your watch, friend"

90. Mrs. Nita is my mother's sister. She is my _____.

- a. aunt b. cousin c. uncle d. grandmother

91. Re-arrange the words to form a meaningful sentence:

saw / a / shooting / I / star / night / the / in

- a. I saw a shooting star in the night. b. I the saw star shooting night in a.
c. A shooting star I saw in night the. d. In the night a saw shooting star I.

92. What is the purpose of the sentence below?

This is the happiest moment for me.

- a. to place an order b. to ask a question
c. to announce a holiday d. to show excitement

93. Which pair of words have the similar sound?

- a. write-right b. din-dine c. tick-tock d. bright-bite

94. Read the passage and answer:

'A long time ago, in a quiet village, there lived a wise old woman. She knew the secrets of nature and could talk to animals.'

What does the passage suggest about the old woman?

- a. She was a sleepyhead
- b. She was a magician
- c. She knew nature well
- d. She was a queen

95. Choose the correct word:

'The students were eagerly waiting for the Principal's _____. '

- a. speech
- b. speak
- c. spoke
- d. talking

96. *Speed thrills but kills.* It means:

- a. You should be careful when having thrills
- b. thrill kills you
- c. Driving fast is dangerous
- d. thrills give you speed

97. '*Day is to Night as Happy is to _____* '

- a. joy
- b. cheerful
- c. sad
- d. bright

98. Read the short passage:

'A small boy and his father stood by the road, looking at the bakery. Their clothes were torn and they were very thin.'

What can you infer about the boy?

- a. He is lost.
- b. He is poor.
- c. He is angry.
- d. He is tired.

99. Which word will come first in the dictionary?

- a. child
- b. chat
- c. cheese
- d. chant

100. What does the teacher mean when she says-Multiplication is like eating a piece of cake?

- a. She does multiplication easily.
- b. She multiplies pieces of cakes.
- c. Multiplication is as sweet as cake.
- d. Multiplication is full of cakes.

Answer Key:

1.b	11.a	21.c	31.a	41.c	51.b	61.a	71.c	81.b	91.a
2.b	12.b	22. i. b ii. d iii. c	32.c	42.c	52.c	62.b.	72.c	82.b	92. a,b,c &d
3.a	13.c	23.c	33.b	43. b	53.b	63.b	73.b	83.a & b	93.a
4.a	14.d	24.c	34.d	44.a	54. a	64.c.	74.b	84.a	94.b &c
5.b	15.b	25.b	35. b	45.b	55.b	65.d	75.a	85. i.False ii.True iii.True iv.True v.False	95.a
6.b	16.a	26.a	36.a	46. c	56.c	66.c	76.c	86.a	96.c
7.c	17.c	27.d	37.c	47.d	57.d	67.b	77.b	87.b	97.c
8.a	18.c	28.a	38.d	48.c	58.a	68.a	78.c	88.b	98.b
9.c	19.b	29.b	39.b	49.a	59.b	69.c	79.c	89.d	99.d
10.c	20.a	30.d	40.d	50.b	60.d	70.a	80.a	90.a	100. a

प्रश्न-१ नीचे दिए गद्यांश पढ़कर उत्तर दो:

“नेहा एक बुद्धिमान लड़की थी। वह हर दिन अपने स्कूल के बाद पुस्तकालय जाती थी। उसे किताबें पढ़ना बहुत पसंद था और वह नई चीजें सीखने के लिए हमेशा उत्सुक रहती थी।”

नेहा स्कूल के बाद कहाँ जाती थी?

- | | |
|----------|-----------------|
| क) घर | ख) पुस्तकालय |
| ग) बगीचा | घ) खेल के मैदान |

प्रश्न-२ नीचे दिए गए व्यंजनों में से संयुक्त व्यंजन का चयन कीजिए।

- | | |
|------|--------|
| क) प | ख) ह |
| ग) त | घ) क्ष |

प्रश्न-३ दिए गए वाक्य में काम वाला शब्द चुनो ।

वाक्य: “मैं अपने दोस्त के साथ खेलता हूँ।”

- | | |
|----------|----------|
| क) मैं | ख) अपने |
| ग) दोस्त | घ) खेलता |

प्रश्न-४ सही शब्द भरें।

कल परीक्षा है _____ में पढ़ रही हूँ।

- | | |
|------------|-----------|
| क) क्योंकि | ख) इसलिए |
| ग) लेकिन | घ) परन्तु |

प्रश्न-५ रोहन एक सप्ताह के लिए गाँव जा रहा है। उसने अपने दूध वाले से कहा “_____ दिनों के लिए दूध नहीं चाहिए”।

- | | |
|-------|--------|
| क) दस | ख) सात |
| ग) एक | घ) आठ |

प्रश्न-६ राधा को फूल बहुत पसंद हैं। उसकी बेटियों के नाम का अर्थ भी फूल है। उनके नाम हैं : सुमन, कुसुम और

क) सुंदरी

ख) खुशबू

ग) पुष्प

घ) खूबसूरत

प्रश्न-७ कई साल पहले इलाहाबाद के एक शहर में एक अमीर और कंजूस सेठ रहता था।

इस वाक्य में विशेषण शब्द होंगे:

क) कंजूस

ख) अमीर

ग) कंजूस, अमीर

घ) कई, सेठ

प्रश्न-८ कौनसा शब्द समूह सही नहीं है?

क) आँख, नयन, नेत्र

ख) पृथ्वी, धरा, अंबर

ग) सुगंध, खुशबू, महक

घ) कमल, जलज, नीरज

प्रश्न-९ सही शब्द समूह बताओ।

आज मीनू_____माताजी ने मीनू_____कहा , जाकर बाज़ार_____ आम ले आओ।

क) कि, से, की,

ख) की, कि, से

ग) की, से, से

घ) की, के, से

प्रश्न-१० दिए गए वाक्यों में से कौन सा वाक्य गलत है?

क) अध्यापिका कहानी सुना रही है।

ख) बच्चा पढ़ रहे हैं।

ग) पक्षी आकाश में उड़ रहे हैं।

घ) नीतू कार चला रही है।

प्रश्न-११ 'दाता' शब्द का स्त्रीलिंग होता है-

क) दाती

ख) द्राति

ग) दात्री

घ) दार्ती

प्रश्न-१२ साधु शब्द का बहुवचन होता है:

क) साधुँ

ख) साधुओं

ग) साधु

घ) साधू

प्रश्न-१३ दिए गए विकल्पों में शब्दों की 3 जोड़ी समान रूप से सम्बंधित है और एक जोड़ी अलग तरह से संबंधित है। अलग जोड़ी बताए -

- | | |
|---------------|---------------|
| क) चीनी: मीठी | ख) पत्ती: हरा |
| ग) हिम: सफेद | घ) नीबू: पीला |

प्रश्न-१४ अपने पैर पर कुल्हाड़ी मारना इस अनुच्छेद में इस मुहावरे का उपयुक्त अर्थ क्या है?

- | | |
|---------------------------|---|
| क) अपना फायदा स्वयं करना | ख) खुद ही कुल्हाड़ी अपने पैरों पर मारना |
| ग) अपना नुकसान स्वयं करना | घ) अपना काम स्वयं करना |

प्रश्न-१५ मौसम गर्म है, लेकिन जब बर्फ गिरती है तो मौसम ठंडा हो जाता है। यहाँ 'गर्म' का विपरीत शब्द क्या है?

- | | |
|---------|----------|
| क) ठंडा | ख) गर्मी |
| ग) ठंड | घ) धूप |

प्रश्न-१६ एक पुस्तक मेज पर रखी है, लेकिन कई पुस्तकें अलमारी में रखी हैं। यहाँ 'पुस्तक' का बहुवचन क्या है?

- | | |
|-------------|--------------|
| क) पुस्तकें | ख) पुस्तक |
| ग) पुस्तकों | घ) पुस्तक की |

प्रश्न-१७ रमा ने भारी की जगह, _____ सामान उठाया। रिक्त स्थान में सही विलोम शब्द लिखिये।

- | | |
|----------|-----------|
| क) कम | ख) ज्यादा |
| ग) थोड़ा | घ) हल्का |

प्रश्न-१८ चित्र देखकर सही वाक्य बताओ -



क) धोबी कपड़ा धो रहे हैं।

ख) धोबियाँ कपड़े धो रहे हैं।

ग) धोबी कपड़े धो रहे हैं।

घ) धोबी कपड़े धो रहे हैं।

प्रश्न-१९ मेरी माताजी मेरे भाई को _____ है।

क) बुलाते हैं।

ख) बुला रहा है।

ग) बुला रही है।

घ) बुला चुके हैं।

प्रश्न-२० बारिश हो रही है। _____ खेलने नहीं गया। इन दो वाक्यों को किस उचित शब्द से जोड़ सकते हैं ?

क) लेकिन

ख) क्योंकि

ग) इसलिए

घ) पर

प्रश्न-२१ निम्नलिखित में से कौन पेट के बल सरकता है?

क) गाय

ख) भैंस

ग) केंचुआ

घ) बिल्ली

प्रश्न-२२ "में एक ऐसी चीज़ हूँ जो हमेशा आगे बढ़ती हूँ, लेकिन कभी भी पीछे नहीं जाती।"

क) समय

ख) पानी

ग) आग

घ) गर्मी

प्रश्न-२३ नेहा दिल्ली में पढ़ती है। उसकी छुट्टियाँ मई में शुरू हो रही हैं और जून में खत्म हो रहीं हैं, तो किस ऋतु में छुट्टियाँ पड़ीं ?

क) वसंत ऋतु

ख) ग्रीष्म ऋतु

ग) वर्षा ऋतु

घ) शीत ऋतु

प्रश्न-२४ अंकिता एक अच्छी लड़की है। इस वाक्य में कितने संज्ञा शब्द हैं ?

क) एक

ख) दो

ग) तीन

घ) चार

प्रश्न-२५ सीता प्रतिदिन मंदिर जाती है। इसका मतलब है कि:

क) वह हफ्ते में तीन दिन मंदिर जाती है। ख) वह रोज़ मंदिर जाती है।

ग) वह रात को मंदिर नहीं जाती है। घ) वह मंदिर नहीं जाती है।

प्रश्न-२६ कई व्यक्ति न्याय के लिए लड़ रहे थे। इस वाक्य में कौनसा शब्द संज्ञा है ?

क) लड़

ख) कई

ग) व्यक्ति

घ) न्याय

प्रश्न-२७ समान तुक वाले शब्दों की जोड़ी चुनें -

क) बच्चा-बच्चे

ख) प्यारा-न्यारा

ग) लेख-लिखाई

घ) लड़का-लड़की

प्रश्न-२८ नीचे दिये गए वाक्य को पूरा करने के लिए नाम वाला शब्द चुनें-

..... मैदान में क्रिकेट खेल रहे हैं।

क) लड़की

ख) उस

ग) लड़का

घ) हम

प्रश्न-२९ निम्नलिखित में से कौन चार पहिया वाहन नहीं है?

क) कार

ख) वेन

ग) साइकिल

घ) जीप

प्रश्न-३० निम्नलिखित में से कौन सा खेल घर के अंदर खेला जाता है?

क) क्रिकेट

ख) पिट्ठू

ग) गुल्ली-डंडा

घ) लूडो

प्रश्न-३१ 'कौवा' शब्द में कितनी मात्राएँ हैं?

क) एक

ख) दो

ग) तीन

घ) चार

प्रश्न-३२ 'सूरज' हमें क्या देता है?

क) चाँदनी

ख) रोशनी और गर्मी

ग) पानी

घ) हवा

प्रश्न-३३ चित्र में दिख रहे जानवर का नाम बताइए।



क) साँप

ख) केंचुआ

ग) कनखजूरा

घ) छिपकली

प्रश्न-३४ निम्नलिखित वाक्य की अशुद्धि पहचानिए :-

पिताजी एक खिलौना लाए हैं?

क) पूर्णविराम

ख) प्रश्नसूचक

ग) अल्पविराम

घ) योजकचिन्ह

प्रश्न-३५ मुबारकबाद शब्द से कौन-सा शब्द नहीं बन सकता ?

क) मुबारक

ख) बाद

ग) मुकाबला

घ) बार

प्रश्न-३६ सूर्य पूर्व दिशा से उदय होता है। इस वाक्य में उदय शब्द का विलोम शब्द क्या है ?

क) लड़के का नाम

ख) अस्त

ग) रोशनी

घ) अँधेरा

प्रश्न-३७ पढ़ें और सही उत्तर चुनें।

मन करता है सूरज बनकर
आसमान में दौड़ लगाऊँ।
मन करता है चंदा बनकर
सब तारों पर अकड़ दिखाऊँ।

कवि कहाँ दौड़ लगाना चाहता है?

- | | |
|------------------|------------------|
| क) आसमान में | ख) सड़क पर |
| ग) नदी के किनारे | घ) जंगलों के बीच |

प्रश्न-३८ निम्नलिखित वाक्यों में से अशुद्ध शब्द ढूँढो -

दीपावली को हम दिवाली भी कहते हैं। यह हिन्दुओं का एक बड़ा त्यौहार है।

- | | |
|------------|------------|
| क) दीपावली | ख) दिवाली |
| ग) बड़ा | घ) त्यौहार |

प्रश्न-३९ समान तुक वाला शब्द ढूँढकर सही का निशान लगाइए -

जैसी करनी, वैसी _____

- | | |
|----------|----------|
| क) लिखनी | ख) भरनी |
| ग) बोनी | घ) पढ़नी |

प्रश्न-४० रानी की दादी ने धरती पर एक कहानी सुनाई। उन्होंने कहा कि धरती नीचे होती है और _____ ऊपर।

- | | |
|----------|----------|
| क) पहाड़ | ख) पानी |
| ग) आसमान | घ) पत्थर |

प्रश्न-४१ 'पाठशाला' शब्द के अंतिम अक्षर से बना शब्द चुनें।

- | | |
|----------|----------|
| क) तितली | ख) आसानी |
| ग) शलगम | घ) लड्डू |

प्रश्न-४२ हमने किताबों में पढ़ा है कि _____ के अपने महल होते थे।

क) राजों

ख) राजाओं

ग) रानी

घ) राजा

प्रश्न-४३ _____ क्या कर रहे हैं?

क) आप

ख) तुम

ग) मैं

घ) उस

प्रश्न-४४ 'बरसात' शब्द के अंतिम अक्षर से बना शब्द चुनें -

क) पककर

ख) कसकर

ग) तनकर

घ) बहकर

प्रश्न-४५ पढ़ें और सही उत्तर चुनें -

बरसे बादल, कलकल छलछल

तैर चली कागज़ की नैया

पूँछ उठाकर भागी गैया।

कविता में किसके तैरने की बात की गई है?

क) नैया

ख) गैया

ग) पूँछ

घ) बादल

प्रश्न-४६ नीचे दिये गए वाक्य को पूरा करने के लिए नाम वाला शब्द चुनें।

_____ मैदान में क्रिकेट खेल रही है।

क) वह

ख) उस

ग) लड़का

घ) लड़की

प्रश्न-४७ इस चित्र में कौन सा खेल दिख रहा है?



क) रस्साकशी

ख) खो - खो

ग) लगोरी

घ) स्टापू

प्रश्न-४८ नीचे दिए गए गद्यांश को पढ़ें और उत्तर दें।

आज सुबह से ही आकाश में काले बादल छाए हुए थे। ठंडी हवा चल रही थी। अचानक बारिश शुरू हो गई। बच्चे बाहर आकर बारिश में नाचने लगे। मोहन और रीना ने अपने हाथों में छाते ले लिए। कुछ बच्चे कागज़ की नाव बनाकर पानी में तैरा रहे थे। बारिश के कारण मौसम बहुत सुहावना हो गया था। पेड़-पौधे भी साफ और हरे-भरे लग रहे थे।

प्रश्न - आकाश में क्या छाए हुए थे?

क) ठंडी

ख) हवा

ग) काले बादल

घ) बारिश

प्रश्न-४९ बच्चे बारिश में क्या कर रहे थे?

क) चिल्ला रहे थे

ख) नाव पानी में तैरा रहे थे

ग) भाग रहे थे

घ) हँस रहे थे

प्रश्न-५० बिल्ली को क्या खाना अच्छा लगता है?

क) हरी घास

ख) हरी मिर्च

ग) दूध , मलाई

घ) सब्जी

प्रश्न-५१ 'गाय' का पुल्लिंग शब्द क्या होगा?

क) बकरी

ख) बैल

ग) घोड़ा

घ) शेर

प्रश्न-५२ 'बिल्ली' का सही बहुवचन क्या होगा?

क) बिल्लियाँ

ख) बिल्लीयाँ

ग) बिल्लीयाँ

घ) बिल्लीयें

प्रश्न-५३ निम्नलिखित में से स्त्रीलिंग शब्द कौन-सा है?

क) राजा

ख) घोड़ा

ग) लड़का

घ) लड़की

प्रश्न-५४ माँ की बहन को क्या कहते हैं?

क) मां

ख) बहन

ग) चाचा

घ) मौसी

प्रश्न-५५ निम्नलिखित में से कौन जल और थल दोनों पर ही रहता है?

क) गीदड़

ख) मगरमच्छ

ग) कुत्ता

घ) बिल्ली

प्रश्न-५६ "अगर हम दूसरों की मदद करते हैं, तो लोग हमें क्या मानते हैं?"

क) कठोर

ख) दयालु

ग) लालची

घ) क्रोधित

प्रश्न-५७ नीचे दिए गए गद्यांश को पढ़कर प्रश्नों के उत्तर दीजिए:

रवि रोज़ सुबह जल्दी उठता था। वह सबसे पहले अपने माता-पिता के चरण छूकर पढ़ाई करने बैठ जाता था। स्कूल जाने से पहले वह अपना नाश्ता करता फिर उसके बाद वह अपने दोस्त मोहित के साथ स्कूल जाता था।

उपरोक्त गद्यांश का उपयुक्त शीर्षक दीजिए।

क) रवि की दिनचर्या

ख) शाम के काम

ग) माता पिता का सम्मान

घ) नाश्ता करना

प्रश्न-५८ निम्नलिखित वाक्य में नाम वाले शब्द चुनिए :

मोहन ने नई किताब खरीदी ।

- | | |
|----------|---------|
| क) ने | ख) नई |
| ग) खरीदी | घ) मोहन |

प्रश्न-५९ निम्नलिखित वाक्य में रेखांकित शब्द का विलोम शब्द है -

गंगा भारत की पवित्र नदी है।

- | | |
|----------|------------|
| क) पुण्य | ख) अपवित्र |
| ग) सागर | घ) गंगा |

प्रश्न-६० नीचे दिया गया चित्र किस ऋतु में लिया गया है?



- | | |
|--------------|----------------|
| क) वर्षा ऋतु | ख) ग्रीष्म ऋतु |
| ग) शीत ऋतु | घ) वसंत ऋतु |

प्रश्न-६१ पुराने समय में संदेश भेजने का मुख्य साधन क्या था?

- | | |
|------------|----------------|
| क) टेलीफोन | ख) चिट्ठी |
| ग) ई मेल | घ) समाचार पत्र |

प्रश्न-६२ 'चालाक' शब्द के अंतिम अक्षर से बना हुआ शब्द चुने ।

- | | |
|------------|-----------|
| क) मगरमच्छ | ख) लोमड़ी |
| ग) रस्सा | घ) कबूतर |

प्रश्न-६३ निम्न शब्दों में से आलसी का विलोम शब्द चुनिए -

- | | |
|-------------|-----------|
| क) दुखी | ख) चालाकी |
| ग) परिश्रमी | घ) सुस्त |

प्रश्न-६४ निम्नलिखित में से बेमेल शब्द चुनो-

- | | |
|-----------|-----------|
| क) बकरी | ख) बिल्ली |
| ग) कुत्ता | घ) मछली |

प्रश्न-६५ म, ग, ज, ग वर्णों को सही क्रम में लगाने पर कौन सा अर्थपूर्ण शब्द बनेगा ?

- | | |
|---------|---------|
| क) जगमग | ख) गजमग |
| ग) गमगज | घ) मगजग |

प्रश्न-६६ अमल ने अस्पताल में डॉक्टर से बात की।

इस वाक्य में नाम वाले शब्द कौन-कौन से हैं

- | | |
|-------------------------|-----------------------|
| क) अमल, डॉक्टर, अस्पताल | ख) अमल, बात, किया |
| ग) डॉक्टर, बात, किया | घ) अमल, अस्पताल, किया |

प्रश्न-६७ सीमा और रीना स्कूल जा रही हैं। _____ किताबें बहुत सुंदर हैं।
खाली स्थान में उपयुक्त शब्द भरो।

- | | |
|----------|-------------|
| क) उनका | ख) तुम्हारी |
| ग) हमारी | घ) उनकी |

प्रश्न-६८ निम्नलिखित में से कौन उड़ने वाला जीव है?

- | | |
|-----------|----------|
| क) कौआ | ख) मेढ़क |
| ग) गिलहरी | घ) चींटी |

प्रश्न-६९ यहाँ एक बड़ा चूहा घुस आया है। इस वाक्य में विशेषता बताने वाला शब्द चुनिए।

क) चूहा

ख) यहाँ

ग) बड़ा

घ) यहाँ


प्रश्न-७० चित्र देखकर सही वाक्य चुनें :

क) बिल्ली डिब्बे के नीचे है।

ख) बिल्ली डिब्बे के अंदर है।

ग) बिल्ली डिब्बे के ऊपर है।

घ) बिल्ली डिब्बे के पीछे है।



प्रश्न-७१ बूझो तो जानें

रंग है मेरा हरा सा, तेज स्वाद मैं रखती हूँ,

मीठे में इस्तेमाल होता मेरा, खुशबू खास फैलाती हूँ

चाय और खीर में डलती हूँ, और मसालों में भी आती हूँ।



क) इलायची

ख) जीरा

ग) लोंग

घ) काली मिर्च

प्रश्न-७२ 'घर' शब्द के दो समानार्थक शब्द चुनिए -

क) केसरी, आलय

ख) सिंह, निकेत

ग) गृह, आवास

घ) सूर्य, आलय

प्रश्न-७३ निम्नलिखित में से कौन बिना गुठली वाला फल है?

क) केला

ख) आम

ग) जामुन

घ) लीची

प्रश्न-७४ "बच्चा खेल रहा है।" इस वाक्य का बहुवचन रूप क्या होगा ?

क) बच्चे खेल रहे हैं।

ख) बच्चा खेलते हैं।

ग) बच्चे खेलता है।

घ) बच्चे खेली हैं।

प्रश्न-७५ अध्यापक तथा कवि का स्त्रीलिंग शब्द चुनो-

- | | |
|---------------------------|----------------------|
| क) अध्यापक तथा कवियत्री | ख) अध्यापको तथा कवि |
| ग) अध्यापिका तथा कवयित्री | घ) अध्यापक तथा कविता |

प्रश्न-७६ “गोलू ने मम्मी से पूछा कि क्या वह स्कूल जा सकता है?” वाक्य में कौन सा प्रश्नवाचक शब्द है?

- | | |
|---------|----------|
| क) गोलू | ख) मम्मी |
| ग) क्या | घ) नहीं |

प्रश्न-७७ मोहन गाना गा रहा है। इस वाक्य में काम करने वाला कौन है?

- | | |
|--------------|---------|
| क) मोहन | ख) गाना |
| ग) गा रहा है | घ) गा |

प्रश्न-७८ 'पेड़' शब्द का बहुवचन क्या होगा?

- | | |
|----------|-----------|
| क) पेड़ | ख) पेड़े |
| ग) पेड़ा | घ) पेड़ों |

प्रश्न-७९ निम्नलिखित में से कौन सा वाक्य सही है?

- | | |
|-------------------------|------------------------|
| क) मुझे स्कूल जाता हूँ। | ख) मैं स्कूल जाने हूँ। |
| ग) वह स्कूल जा रही है। | घ) वे स्कूल जाती है। |

प्रश्न-८० 'हम खेल रहे हैं।' वाक्य में 'हम' क्या है?

- | | |
|-------------|-----------------------|
| क) सर्वनाम | ख) नाम वाले |
| ग) काम वाले | घ) विशेषता बताने वाले |

प्रश्न-८१ नीचे दिए गए शब्दों का शुद्ध(सही) रूप क्या है?

- | | |
|---------|----------|
| क) पतग | ख) पतंग |
| ग) पंतग | घ) पतंगं |

प्रश्न-८२ "यह गुलाब बहुत सुंदर है" वाक्य में विशेषता बताने वाला शब्द कौन-सा है?

- | | |
|----------|----------|
| क) गुलाब | ख) सुंदर |
| ग) बहुत | घ) यह |

प्रश्न-८३ 'कुत्ता भौंक रहा है।' - इसमें क्रिया कौन-सी है?

- | | |
|-----------|---------|
| क) कुत्ता | ख) भौंक |
| ग) रहा | घ) है |

प्रश्न-८४ 'जल्दी' शब्द का विलोम क्या होगा?

- | | |
|---------|----------|
| क) धीरे | ख) तेज़ |
| ग) भारी | घ) हल्का |

प्रश्न-८५ 'गर्मी' का विलोम शब्द क्या होगा?

- | | |
|----------|----------|
| क) सर्दी | ख) आग |
| ग) धूप | घ) वर्षा |

प्रश्न-८६ निम्नलिखित में से कौन सा शब्द सर्वनाम है?

- | | |
|-----------|---------|
| क) लड़का | ख) वह |
| ग) पुस्तक | घ) बड़ा |

प्रश्न-८७ विद्यालय में छात्रों की संख्या अधिक है, लेकिन दूसरे विद्यालय में छात्रों की संख्या कम है। यहाँ "अधिक" का विपरीत शब्द क्या है?

- | | |
|---------|-----------|
| क) कम | ख) ज्यादा |
| ग) बहुत | घ) थोड़ा |

प्रश्न-८८ एक फूल खिल रहा है, लेकिन कई फूल खिल रहे हैं। यहाँ "फूल" का बहुवचन रूप क्या है?

- | | |
|----------|--------------------|
| क) फूल | ख) फूलें |
| ग) फूलों | घ) फूल खिल रहे हैं |

प्रश्न-८९ एक पेड़ बड़ा है, लेकिन कई पेड़ बड़े हैं। यहाँ "पेड़" का बहुवचन रूप क्या है?

क) पेड़

ख) पेड़ें

ग) पेड़ों

घ) पेड़ का

प्रश्न-९० एक व्यक्ति बहुत अमीर है, जबकि दूसरा व्यक्ति गरीब है। यहाँ "अमीर" का विपरीत शब्द क्या है?

क) गरीब

ख) धनवान

ग) संपन्न

घ) सुखी

प्रश्न-९१ एक व्यक्ति बहुत तेज चलता है, जबकि दूसरा व्यक्ति धीरे चलता है। यहाँ "तेज" का विपरीत शब्द क्या है?

क) धीरे

ख) तेजी

ग) गति

घ) धीमा

प्रश्न-९२ 'बहुत सुंदर' में 'सुंदर' शब्द कैसा है?

क) क्रिया

ख) विशेषण

ग) संज्ञा

घ) सर्वनाम

प्रश्न-९३ जंगल का राजा कौन होता है?

क) कुत्ता

ख) चूहा

ग) शेर

घ) बिल्ली

प्रश्न-९४ पापा ने झूठ नहीं बोला। इस वाक्य का विलोम वाक्य क्या होगा?

क) पापा ने सच बोला।

ख) पापा ने झूठ बोला।

ग) पापा ने कुछ नहीं कहा।

घ) पापा नहीं आए।

प्रश्न-९५ बिरजी ने झट-पट अपना होमवर्क पूरा किया।

'झट-पट' शब्द किसका वर्णन करता है?

क) बिरजी

ख) होमवर्क

ग) जल्दी

घ) दिन

निम्नलिखित गद्यांश को पढ़कर प्रश्नों के उत्तर दें।

रवि एक होशियार और चंचल बालक है। वह हर रविवार सुबह अपने दादा-दादी के घर जाता है। वहाँ वह दादा जी के साथ बगीचे में फल तोड़ता है और दादी जी से कहानी सुनता है। दोपहर में माँ का बना स्वादिष्ट खाना खाने के बाद वह बगल की नहर में मछलियाँ देखता है। शाम

को सब लोग मिलकर पार्क में टहलते हैं और हँस-खेलकर दिन बिताते हैं। रवि का रविवार का दिन बहुत ही आनंदमय होता है।

प्रश्न-९६ रवि रविवार की सुबह कहाँ जाता है?

- क) स्कूल
ख) बाज़ार
ग) दादा-दादी के घर
घ) पिकनिक स्थल

प्रश्न-९७ दादा जी के साथ रवि क्या काम करता है?

- क) बगीचे में फल तोड़ता है
ख) टीवी देखता है
ग) पुस्तक पढ़ता है
घ) कागज़ी हवाई जहाज़ बनाता है

प्रश्न-९८ दोपहर में रवि किस गतिविधि का आनंद लेता है?

- क) कहानी सुनना
ख) मछलियाँ देखना
ग) पार्क में खेलना
घ) टेलिविजन देखना

प्रश्न-९९ आनंदमय' शब्द का अर्थ है—

- क) दुखी
ख) निराश
ग) खुशी-भरा
घ) ऊबाऊ

प्रश्न-१०० शाम को परिवार साथ में क्या करता है?

- क) फ़ोटो खिंचवाते हैं
ख) पार्क में टहलते और खेलते हैं
ग) मंदिर जाते हैं
घ) बाजार जाते हैं

Answer Key:

1. ख	11. ग	21. ग	31. ख	41. घ	51. ख	61. ख	71. क	81. ख	91. क
2. घ	12. ग	22. क	32. ख	42. ख	52. क	62. घ	72. ग	82. ख	92. ख
3. घ	13. क	23. ख	33. ग	43. क	53. घ	63. ग	73. क	83. ख	93. ग
4. ख	14. ग	24. ख	34. ख	44. ग	54. घ	64. घ	74. क	84. क	94. ख
5. ख	15. क	25. ख	35. ग	45. क	55. ख	65. क	75. ग	85. क	95. ग

6. ग	16. क	26. ग	36. ख	46. क	56. ख	66. क	76. ग	86. ख	96. ग
7. ग	17. घ	27. ख	37. क	47. क	57. क	67. घ	77. क	87. क	97. क
8. ख	18. ग	28घ	38. घ	48. ग	58. घ	68. क	78. क	88. क	98. ख
9. ग	19. ग	29. ग	39. ख	49. ख	59. ख	69. ग	79. ग	89. क	99. ग
10. ख	20. ग	30. घ	40. ग	50. ग	60. ग	70. ख	80. क	90. क	100. ख

Q1. Use the clues to find the right number.

I have less than double of 4 marbles.

I have more than half of 10 marbles.

- a) 12 marbles b) 6 marbles c) 10 marbles d) 8 marbles

Q2. The opposite sides of a dice always adds upto

- a) 5 b) 6 c) 7 d) 8

Q3. Can be folded into a

- a) cone b) cylinder c) cube d) cuboid



Q4. A rectangular sheet can be rolled into a

- a) cone b) cylinder c) cube d) cuboid

Q5. Rahim goes for a walk every day at 5:30 am. He stands in the direction of sun rise for 10 minutes. He then turns towards left and walks back to his house. Rahim's house lies in which direction?

- a) East b) west c) North d) South

Q6. The top-view of a bridge would tell about its _____ and _____

- a) height and length b) length and breadth c) breadth and height d) only length

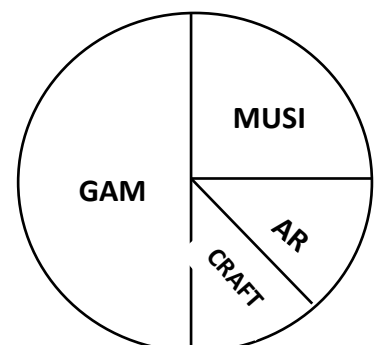
Q7 Cough Syrup is measured in

- a) Metre b) Millilitres c) Litre d) Millimetres

Q8. The data is collected by teacher of her class about the favourite subject of the students

She found that the quarter strength of the class likes _____

- a) Games b) Art c) Music d) craft

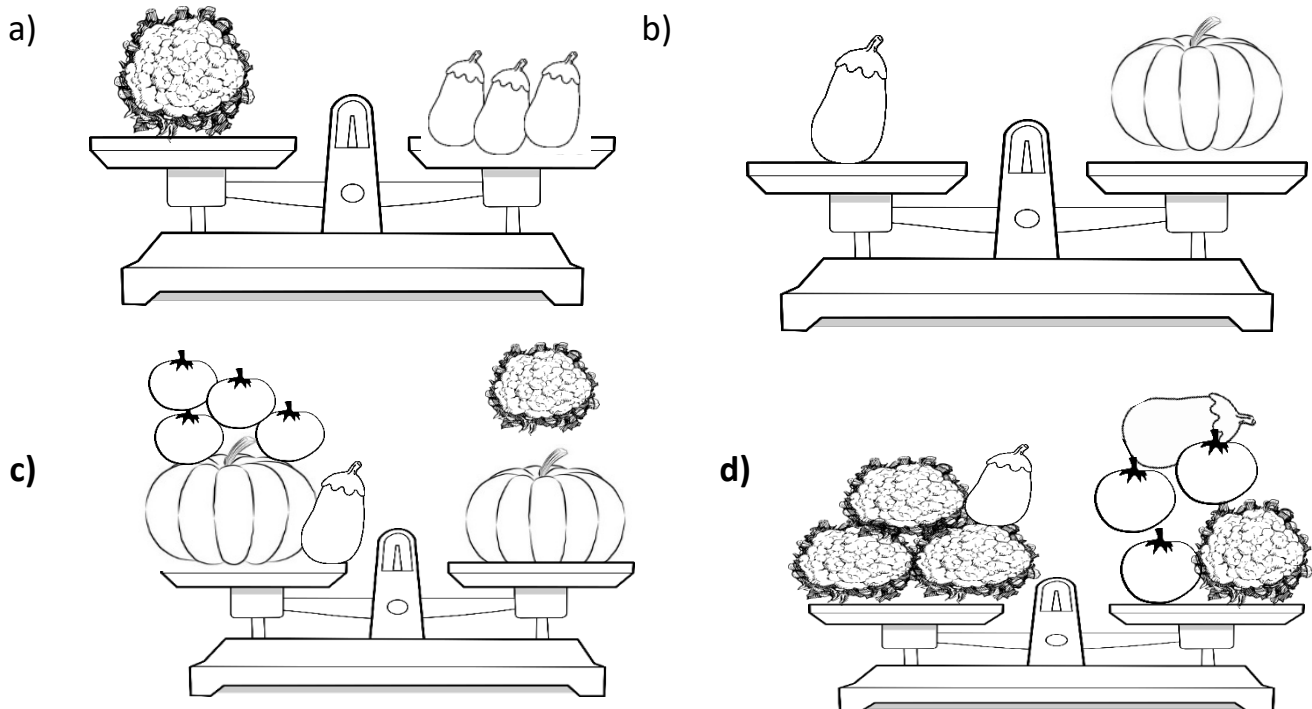
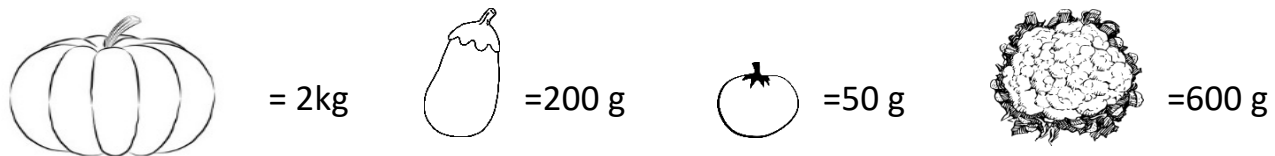


Q9. Look at the time line of Rani's sister. Choose the correct option for the following events:

- i) Rani's sister was born in the 11th month of the previous year.
- ii) She will start to eat solid food in the 6th month of this year and
- iii) She is expected to walk on her own by the 2nd month of the next year.

- a) i) Nov 2024, ii) July 2025, iii) Feb 2026
- b) i) Nov 2025, ii) June 2026, iii) Feb 2026
- c) i) Nov 2024, ii) June 2025, iii) Feb 2026
- d) i) Nov 2025, ii) June 2024, iii) Feb 2026

Q10. Observe the weight of vegetables and choose the correctly balanced pans.



Q11: Raju is making biggest possible 3-digit number using the digits **3, 7, and 5**. The number in the tens place is the smallest number of the given numbers above. Which among the following would be the number Raju made?

- a) 735 b) 753 c) 375 d) 357

Q12: A fruit seller had **345** apples. He sold **178** apples and **42** apples got spoilt. How many apples are left?

a) 157

b) 125

c) 127

d) 187

Q13: Sangram had three 20 rupees notes and two 10 rupees notes, he has rupees in all.

a) ₹100

b) ₹70

c) ₹ 50

d) ₹ 80

Q14: A cricket match started at **3:00 pm** and ended at **6:30 pm**. How long did the match last?

a) 2 hours

b) 2 hours 30 minutes

c) 3 hours

d) 3 hours 30 minutes

Q15: If today is **Monday**, what was the day before **5 days**?

a) Wednesday

b) Thursday

c) Friday

d) Saturday

Q16: A water bottle can hold **2 litres** of water. How many such bottles are needed to store **10 litres** of water?

a) 3

b) 4

c) 5

d) 6

Q17. If 5 students like apples, 8 students like bananas and 3 students like oranges the total number of students who like bananas and apples is

a) 11

b) 12

c) 13

d) 14

Q18. Which unit is used to measure the length between Bangalore and Pune?

a) Centimetres

b) metres

c) millimetres

d) kilometres

Q19. What should be subtracted from **580** to get **320**?

a) 200

b) 260

c) 300

d) 360

Q20. Which of these objects look the same from the top view and side view?

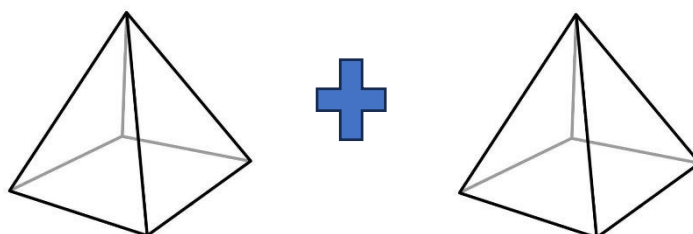
a) a ball

b) a book

c) a cone

d) a box

Q21. Observe the figure and answer the following questions:




The total number of faces and corners in the two pyramids is _____

- a) Faces 8 and corners 8 b) Faces 5 and corners 5
c) Faces 6 and corners 6 d) Faces 10 and corners 10

22) One shirt has 7 buttons. How many shirts are there if 28 buttons are used ?

- a) 7 shirts b) 2 shirts c) 4 shirts d) 7 shirts

23) Arrange the animals given below in the order of height shortest to tallest.



- (a) ABCD (b) BCAD (c) DABC (d) CABD

24) Complete the puzzle by ticking the correct answer for a,b,c,d from options given below:

a) $p=6, q=7, r=4, s=3$

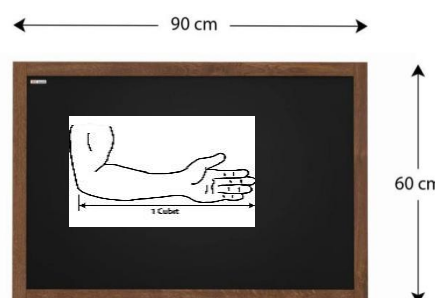
b) $p=8, q=6, r=7, s=3$

c) $p=4, q=5, r=6, s=5$

d) $p=2, q=4, r=3, s=6$

17	-	7	=	10
-		-		-
p	-	s	=	3
=		=		=
11	-	r	=	q

25) If 1 Cubit = 30 cm. Length and Breadth of blackboard in cubits is ____



- a) Length 3 cubits and breadth 2 cubits
- b) Length 2 cubits and breadth 3cubits
- c) Length 2 cubits and breadth 2 cubits
- d) Length 60 cubits and breadth 90 cubits

26) Ram has 25 books, Sam has 5 books more than Ram. The number of books with Sam is

- a)20
- b) 29
- c) 30
- d) 34

27)The same number has to be put in both the boxes below. What is the number ?


$$2 \times 8 = \square \times \square$$

- a) 4
- b) 5
- c) 8
- d) 16

28) **X** is a number such that the number sentence $15 - \mathbf{X} = 9$ is true. Which of the following number sentence is also true ?

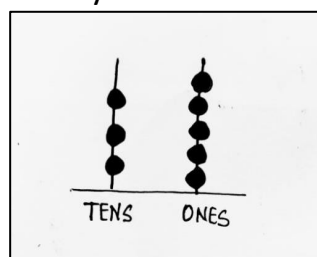
- a) $15 + \mathbf{X} = 9$
- b) $9 + \mathbf{X} = 15$
- c) $\mathbf{X} + 15 = 9$
- d) $9 \times \mathbf{X} = 15$

29) Four boys Anuj, Nandu, Ram, and Sid are standing in a line holding balloons but we don't know who is standing where. Anuj has the most number of balloons. Ram is standing between Sid and Nandu. The name of the boy who is holding two balloons is-



- a) Ram
- b) Sid
- c) Nandu
- d) Anuj

30) An abacus shows the number 35. Rita takes any one ball from the tens place. The new number she got is 22 How many balls she removed from one's place to get this number?



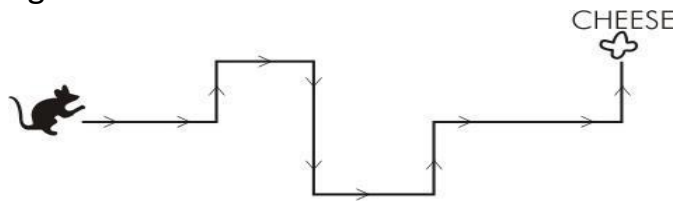
a)1

b) 2

c) 3

d) 4

31) A mouse started from its hole & went along the path shown to the cheese. On the way how many right turns did it take?



a)0

b)3

c)4

d)8

32) Ramu puts 70 cups in the first stack, 80 cups in the second stack and 90 cups in the third stack. If this pattern continues how many cups will he put in the fifth stack?

a) 100

b) 110

c) 109

d) 112

33) The letter F and Z are made up of exactly 3 straight lines each. In which of the following name each letter is straight lines?

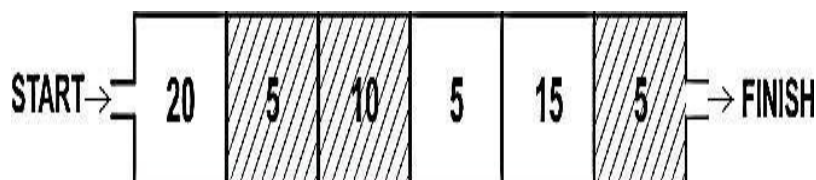
a) HIREN

b)ANYA

c)JIM

d)SHREENA

34) You have to go through the boxes below adding the points in the white boxes and subtracting the points in the shaded ones. How many points will you have at the end?



a) 20

b) 35

c) 40

d) 60

35) If the day after tomorrow is a Sunday, then yesterday was a_____

a) Friday

b)Thursday

c)Sunday

d)Wednesday

36) Mayur has the following number cards . Using the cards, she can make two numbers :

5

7

a) 51 and 55

b) 56 and 60

c) 71 and 75

d) 75 and 57

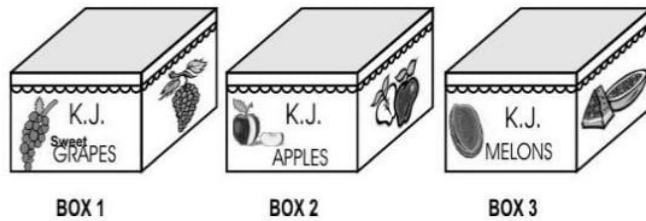
37) Three equal sized boxes are completely filled with fruits.

Box 1 with grapes

Box 2 with apples

Box 3 with melons.


Which box has the greatest number of fruits?



- a) Box 1 b) Box 2 c) Box 3 d) All boxes have same numbers

38) Count and choose the correct answer:

One matchbox = 10 matchstick



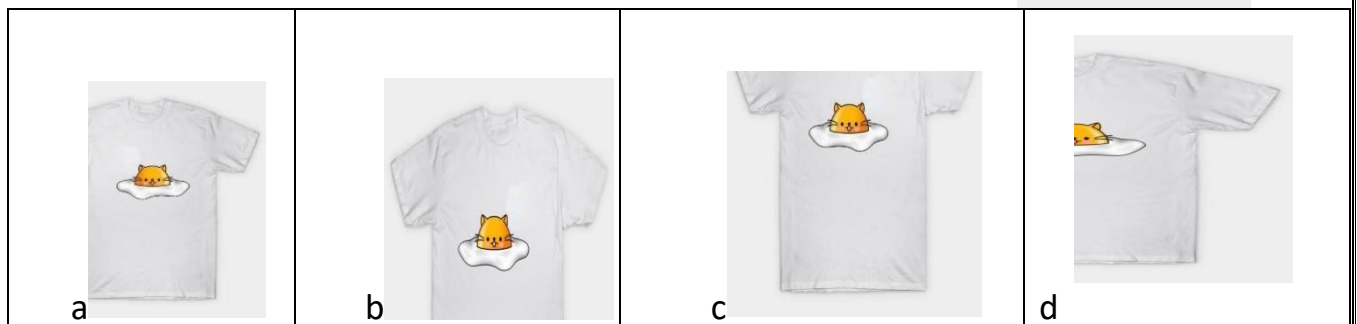
- a) 48 b) 49 c) 47 d) 46

39) The tap is leaking 10 bottles of water in a day how much water will be wasted in a week?

- a) 700 Bottles b) 50Bottles c) 70 Bottles d) 60 bottles

40) See the given picture T-shirt :

Select the correct option which shows its mirror half image?

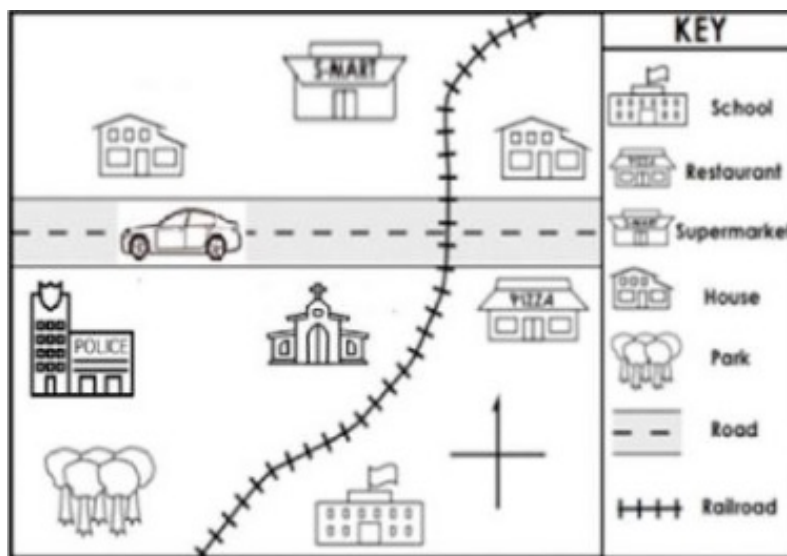


Q41 Find the values of P, Q, R and S respectively.

$$\begin{array}{r} 23RS \\ +PQ78 \\ \hline 5910 \end{array}$$

- (a) P=2, Q=3, R=5, S=3 (b) P=2, Q=3, R=5, S=1
(c) P=3, Q=5, R=3, S=2 (d) P=3, Q=4, R=8, S=2

Q.42) Write North, South, East and West to complete the sentence.



- i)The school is _____ side of the supermarket. (North, South)
ii)The Police Station is _____ side of pizza restaurant. (East, West)
iii)The supermarket is _____ side of the school. (North, South)

- a) south, east, north b) south, west, north
c) east , west, north d) north, west, north

Q43 Read and find from the scoreboard:

The scores of three players put together makes less than 100. Which are the three players?

Player	Score
Kohli	15
Kartik	25
Jadeja	50
Dhoni	100

- a) Dhoni, Jadeja and Kohli b) Kohli, Dhoni and Jadeja

c) Kohli, Kartik and Jadeja

c) Kohli, Kartik and Dhoni

Q44 Help Neelu to choose the correct number from the given numbers. Neelu's number was even and it was not the smallest number. Which number will she choose?

29

59

36

75

26

a) 24

b) 36

c) 75

d) 29

Q45 . Choose the greatest 3-digit number from the given numbers without repeating any numbers:




a) 978

b) 987

c) 968

d) 897

Q46 Look at the numbers in this given box. Which of the following is true about the numbers in the box?




a) They all are greater than 40.

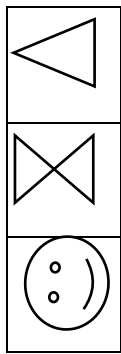
b) They all are between 30 and 50.

c) They all are between 35 and 55.

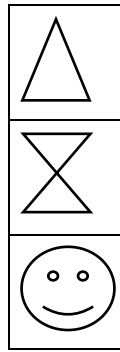
d) They all are less than 50.

Q47) Follow the pattern and complete the given maze using the correct option.

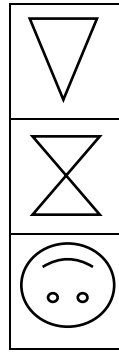




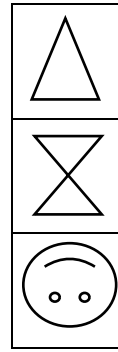
A



B



C



D

Q48. Study the patterns 1, 2 and 3. Using the same pattern, tell the number of beads in pattern 4.



a) 20

b) 25

c) 30

d) 35

Q49) Complete the pattern 3, 6, 9, _____, _____

a. 11, 12

b. 12, 15

c. 12, 14

d. 12, 16

Q50) If 1 gem pins= 2 centimetres

What is the length of the pencil? _____




a) 14cm

b) 16cm

c) 12 cm

d) 15cm

Q51) The Length of 1 pencil  = 10 cm

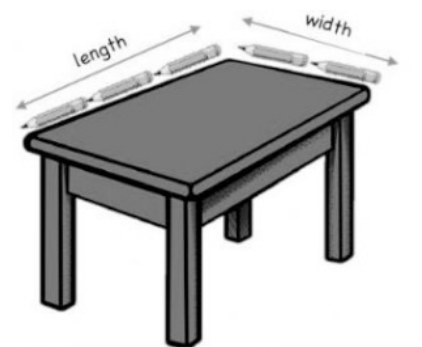
Then Length of table = _____cm

a) 40cm

b) 30cm

c) 20cm

d) 25cm



Q52) Shyla is fond of painting flowers. If she has 18 paintings of flowers, how many paintings can she give to each of her two grandmothers?

- a) 10 b) 9 c) 12 d) 16

Q.53) Find the number:

My number name has two words. The first word has 5 letters. The second word has 4 letters. I am very near to 50. Who am I?

- a) 49 b) 46 c) 51 d) 5

Q.54) These are statements of 4 friends about 3D shapes. Who is not correct?

- i) Reena said her ball has no edges .
- ii) Ananya said her cylindrical box has two circular faces.
- iii) Ravi said his birthday cap has two faces.
- iv) Anvi said opposite sides of her maths book has equal length.

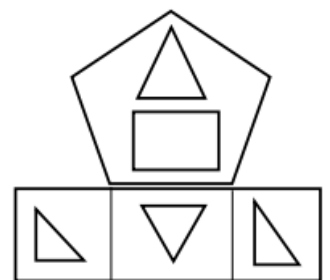
- a) Anvi b) Ravi c) Ananya d) Reena

Q.55) If you start at 150 and count backwards by 6s, what will be the second number?

- a) 138 b) 142 c) 144 d) 146

Q.56) Which of the following shapes is not present in the given figure?

- a) circle b) rectangle c) square d) triangle



Q.57 Apples costs 20 rupees and banana costs half of apple's cost. Mini spends _____ rupees to buy these.

- a) 110 rupees b) 90 rupees c) 120 rupees d) 96 rupees



Q.58) Which statement is not correct about a rectangle?

- a) It has four sides.
- b) It has four corners.

- c) A rectangle always has all sides equal.
- d) A rectangle has opposite sides of equal length

Q.59) Arjun has 92 beads. Meera has 58 beads, and Isha has 49 beads. If they want to have 220 beads in total, how many more do they need to collect?

- a) 40
- b) 32
- c) 50
- d) 21

Q.60) Fill in the blanks to make both sides equal :

$$56 + \underline{\hspace{1cm}} = 34 + 50$$

- a) 28
- b) 30
- c) 26
- d) 24

Q.61) Find the missing number: **5, 10, 20, _____, 80**


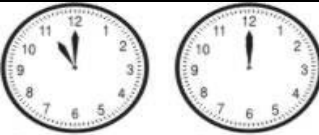
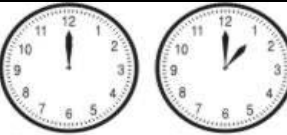
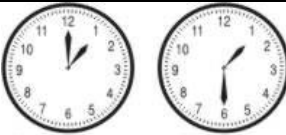
- a) 30
- b) 40
- c) 50
- d) 60

Q.62) Which of the following is true for 36?

- a) 6 tens + 3 ones
- b) 3 tens + 3 ones
- c) 9 tens + 3 ones
- d) 3 tens + 6 ones

Q63) The lunch break in a school starts at 12 noon and ends one hour later.

See the picture of clock and chose the right option.

a)	b)	c)	d)
 <p>Starting Time Ending Time</p>	 <p>Starting Time Ending Time</p>	 <p>Starting Time Ending Time</p>	 <p>Starting Time Ending Time</p>

Q64) The label on the bottle suggests that I use one part orange squash to five parts water. If I put seven cups of orange squash into a jug, how much water should I add?

- a) 25
- b) 35
- c) 20
- d) 45

Q65) There are 20 birds sitting on the tree. 4 more birds came to join them. Then 6 birds flew away. How many birds are left on the branch.

- a) 20
- b) 24
- c) 18
- d) 14

Q66) To bake a cake 100 grams of flour is needed. You only have a scale that measures in 25-gram. How many times will you need to use the scale to measure the flour?

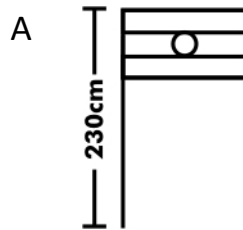
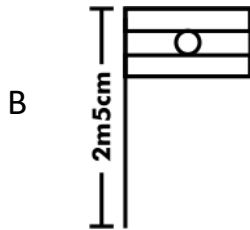
a) 2

b) 3

c) 5

d) 4

Q67) Which is correct?



a) A is taller than B by 20cm

b) A is taller than B by 25cm

c) B is taller than A by 25cm

d) B is taller than A by 20cm

Q68) Rahul boarded train at 6:15 pm. When he got down the train, he noticed that his watch stopped at 6:30 pm. He checked his journey time mentioned on the ticket was 3 hours 15 minutes. At what time he got down the train.

a) 9 pm

b) 9:45 pm

c) 9:15 pm

d) 9 :30 pm

Q69.) A water tank can hold 500 litres of water. Sarah fills the tank with 2 buckets of 100 litres each . How many more buckets he need to fill the tank?

a) 2

b) 4

c) 5

d) 3

Q70) A clock is showing a time of 3:00. If the hour hand moves to the 4 when it takes one hour, how many minutes will it take for the minute hand to move all the way around the clock from the 12 to 12 once?

a) 25 minutes

b)) 45 minutes

c) 55 minutes

d) 60 minutes

Q71) Your class start at quarter to 9 and it takes you 20 minutes to reach school if you started at 8:30 .You will reach school by

a) 8:45 pm.

b) 8: 45 am

c) 8: 50 am.

d) 8: 50 pm

Q72) Rohan bought 2 litre juice. He and his brother each drinks one glass of juice=100ml every day. In how many days they will finish the juice.

a) 20 days.

b) 15 days

c) 10 days.

d) 5 days .

Q73) Nina has 15 chocolates and Reeta has 24 chocolates. They gave their chocolate to their younger brother before going to school. After returning they got 32 chocolate from their brother. How many chocolates did their younger brother eat.

- a) 10 b) 15 c) 9. d) 7

Q74) If your present age is 9 years. What will be your age after 5 years?

- a) 12 years b) 14 years c) 15 years c) 10 years

Q75) There are _____ days in the AUGUST month.

- a) 30 b) 28 c) 31 d) 29

Q76) Number of days in 3 weeks is _____.

- a) 15 days b) 21 days c) 24 days d) 14 days

Q77) Which clock is showing the time 10:10.



a



b



c



d

Q78) Which type of clock has second, minute and hour hands?

- a) Analog clock b) Digital Clock c) Sun dial d) water clock

Q79) If 12 bananas are put in each bag. How many bananas would be there altogether?



- a) 72 b) 60 c) 24 d) 36

Q80) Rohan's school is 1 hour away from his house. If he leave from home at 7:10 am , at what time will he reach the school ?

- a) 8:10 pm b) 9:00am c) 8:00am d) 8:10am

Q 81) One day in a pond a lotus was grown . Next day there were 2 lotus in the pond. In 15 days the pond was filled half with lotus how many more days it takes to fill the pond completely with lotus.

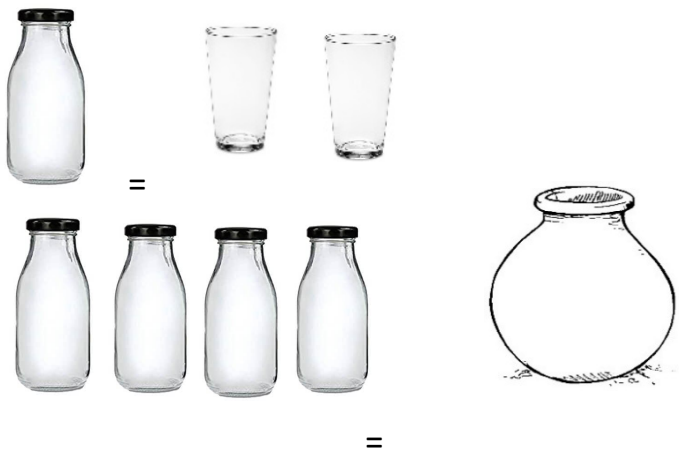
- a)15 b) 30 c)1 d) 60

Q 82) The time shown here in the 12 hour clock is



- a) 4.10 b) 3.50 c) 3.10 d)10.1

Q83)



So, 2 pots = _____ glasses.

- a) 4 b) 8 c)16 d) 32.

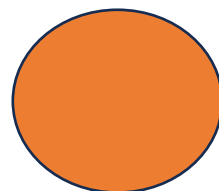
Q84) In a Calendar Gandhi Jayanti is 4 days before Thursday. What day will be there on 5th October?

- a)Sunday b) Monday c)Tuesday d) Wednesday

Q 85) One boy has purchased half kg Potatoes and Quarter kg Tomatoes. What will be the total weight (in grams) of Vegetables?

- a)750g b) 600g c) 3kg d) 1000g

Q86) Choose the figure that shows three- quarters.



a)

b)

c)

d)

Q87) In the school of Riya a teacher has 24 chocolates. She wants to share them equally among 6 of her friends. How many chocolates will each friend get?

a)3

b) 4

c) 5

d) 6

Q88) Sohan's father gave some money to him for purchasing toys and books. He purchased a toy for ₹250 and a book for ₹175. If he gives the shopkeeper ₹500, how much money will he get back?

a) ₹75

b) ₹100

c) ₹125

d) ₹150

Q89) A train leaves the station at 8:15 am and reaches its destination at 11:45 pm. How long was the journey?

a)3 hours 15 minutes

b)3 hours 30 minutes

c) 3 hours 45 minutes

d) 4 hours

Q90) At the time of Neha's birth her father was 25 years old. Now her age is 9 years. What will be the age of Neha's father now .

a) 34 years

b) 25 years

c) 26years

d) 27years

Q91) A farmer has 8 rows of mango trees, and each row has 6 trees. How many mango trees are there in total?

a) 42

b) 46

c) 48

d) 50

Q92) A bucket can hold 10 litres of water. If 2 buckets are filled, how much total water do they hold?

a) 10 litres

b) 15 litres

c) 20 litres

d) 25 litres

Q93) Ravi's birthday is on the 26th of February 2024. What will be the date after 10 days?

a) 3rd March

b) 4th February

c) 5th March

d) 7th March

Q94) A cake recipe needs 250 grams of sugar. If Meena is baking 2 cakes, how much sugar does she need in total?

a) 300 grams

b) 400 grams

c) 500 grams

d) 600 grams

Q95) A family uses 30 litres of water daily for house hold work. How much water will they use in 5 days?

a) 100 Litres

b) 120 litres

c) 150 Litres

d) 180 litres

Q96) This aeroplane departed from Bangalore at “quarter to 4” and landed in Kolkata at “half past 6”. What was the difference in duration?



- a) 2 Hours and 30 minutes b) 2 Hours and 45 minutes
b) 2 Hours and 15 minutes d) 2 Hours and 25 minutes

Q97) Cost of a packet of peanuts for 15 . A boy brought 6 such packets and still had ₹8 with him. How much money did he have?

- a) ₹ 90 b) ₹ 108 c) ₹ 98 d) ₹ 88

Q98) In a queue, there are 14 children in front of a boy and 19 children behind him. How many children are standing in the queue?

- a) 24 b) 26 c) 34 d) 36

Q99) A tailor got an order from a school to stitch uniforms for all the children in the school. The number of boys in the school was 550 less than the highest 3 digit number. The number of girls was 1 more than lowest 3 digit number. How many uniforms does the tailor need to stitch altogether?

- a) 550 b) 620 c) 730 d) 710

Q100) Ravi and his sister had to paint all the faces of a cuboid. If Ravi painted 2 faces red, how many faces did his sister paint?

- a) 2 b) 3 c) 4 d) 6

Answer Key:

1.b	11.a	21.d	31.b	41.c	51.b	61.b	71.c	81.c	91.c
2.c	12.b	22.c	32.b	42.a	52.b	62.d	72.a	82.b	92.c
3.a	13.d	23.c	33.b	43. c	53.a	63.c	73.d	83.b	93.d
4.b	14.d	24.a	34.a	44.b	54. c	64.b	74.b	84.d	94.c
5.c	15.a	25.a	35. b	45.b	55.a	65.c	75.c	85.a	95.c
6.b	16.c	26.c	36.d	46. c	56.a	66.d	76.b	86.b	96.b
7.b	17.c	27.a	37.a	47.c	57.a	67.c	77.a	87.b	97.a
8.c	18.d	28.b	38.c	48.a	58.c	68.d	78.a	88.a	98.c
9.c	19.b	29.a	39.c	49.b	59.d	69.d	79.b	89.b	99.a
10.a	20.a	30.c	40.d	50.a	60.a	70.d	80.d	90.a	100.c