



आंचलिक शिक्षा एवं प्रशिक्षण संस्थान, मैसूरु  
ZONAL INSTITUTE OF EDUCATION & TRAINING, MYSURU

**Learners' Achievement Test**  
**Questions**

**CLASS-V**

**Prepared during the 3 Day Workshop for HMs and  
Senior PRTs of KVS Ernakulam Region  
from 03.04.2025 to 05.04.2025**



**COURSE DIRECTOR**

**Ms. MENAXI JAIN  
DEPUTY COMMISSIONER, KVS  
&  
DIRECTOR, ZIET, MYSORE**

**ASSOCIATE COURSE DIRECTOR**

**MRS SREEJA VIVEK  
PRINCIPAL  
KV TELLICHERRY , ERNAKULAM REGION**

**COURSE COORDINATOR**

**MR BARUN KUMAR JHA  
Training Associate (PRIMARY )  
ZIET Mysore**

**RESOURCE PERSONS**

**Mrs.PRIYA N B  
HM, PM SHRI KV AKKULAM , ERNAKULAM REGION**

**Mrs.SMITA  
HM, PM SHRI K V PAYYANUR , ERNAKULAM REGION**

## Foreword

It gives me immense pleasure to present this LAT Question Bank, developed as part of the Workshop on **THREE-DAY WORKSHOP On LEADERSHIP EXCELLENCE For ACADEMIC HEADS--EMPOWERING HMs For TRANSFORMATIONAL IMPACT of Kendriya Vidyalayas** from Ernakulam Region, conducted by **KVS ZIET Mysore** from **3<sup>rd</sup> April to 5<sup>th</sup> April 2025** in Face-to-Face mode.

We are pleased to present this question bank booklet on Language Achievement Test (LAT) questions, meticulously prepared by our dedicated teachers and HMs of Ernakulam Region. This booklet aims to support students in enhancing their literary and numerical skills and preparing effectively for LAT assessments by PARAKH and also by KVS Headquarters.

This question bank booklet containing 75 questions each for English, Hindi, Maths and TWAU, designed to support students in assessing and enhancing their proficiency in these subjects. A key is provided at the end of each subject section to facilitate self-assessment and learning.

The questions align with learning outcomes to help students assess and improve their skills in English, Hindi, Maths and TWAU. Keys of each subject enable students to check their answers and learn from them.

The effort by teachers in preparing these questions reflects their commitment to student success and quality education.

We appreciate the hard work of the teachers who contributed to creating this valuable resource for students. May this manual serve as a guiding light in fostering a holistic and interactive learning environment in our Kendriya Vidyalayas.

(मीनाक्षी जैन /Menaxi Jain)

निदेशक /Director

के वि एस ज़ीट मैसूर/KVS ZIET Mysore

**QUESTION PREPARATION AND COMPILATION TEAM  
ENGLISH GROUP**

<b>S.N O</b>	<b>NAME</b>	<b>DESIGNATION</b>	<b>SCHOOL</b>	<b>REGION</b>
1	Sini S	HM	PM SHRI KV SAP PEROORKADA	ERNAKULAM
2	Cicily A M	PRT	PM SHRI KV NO.2 KASARAGOD	ERNAKULAM
3	Retheesh Kumar P V	PRT	PM SHRI KV KELTRON NAGAR	ERNAKULAM
4	Nandini Menon P	PRT	PM SHRI KV NO.I CALICUT	ERNAKULAM
5	Jayasree L	PRT	PM SHRI KV No.2 NAVAL BASE KOCHI	ERNAKULAM
6	Sara John	PRT	PM SHRI KV RB KOTTAYAM	ERNAKULAM
7	Reema M V	PRT	PM SHRI KV CHENNEERKARA	ERNAKULAM
8	Daya Parappurath	PRT	PM SHRI KV KONNI	ERNAKULAM
9	Jolly Mol Zacharias	PRT	PM SHRI KV CRPF PALLIPURAM	ERNAKULAM
10	C. Bindu	PRT	PM SHRI KV PATTOM (SHIFT II )	ERNAKULAM
11	B Rama Krishna Reddy	PRT	ANANTAPUR	HYDERABAD
12	Yashwant Baraiya	PRT	CRPF HYD	HYDERABAD
13	B M Kumar	PRT	ELURU	HYDERABAD
14	M Bhaskara Rao	PRT	SURYALANKA	HYDERABAD

**HINDI GROUP**

<b>S.NO</b>	<b>NAME</b>	<b>DESIGNATION</b>	<b>SCHOOL</b>	
1	Kiranjith U	HM	PM SHRI KV NO.2 CALICUT	ERNAKULAM
2	P V Sapna	PRT	KV NO.1 CPCRI KASARAGOD	ERNAKULAM
3	K V Geetha	PRT	PM SHRI KV KANHANGAD	ERNAKULAM
4	Smitha M	PRT	PM SHRI KV NILESHWAR	ERNAKULAM
5	. Rani B T	PRT	PM SHRI KV INS ZAMORIN, EZHIMALA	ERNAKULAM
6	Jayakutty Nair	PRT	PM SHRI KV KANJIKODE	ERNAKULAM
7	Mangarapu Snehal Yadav	PRT	ADILABAD	HYDERABAD
8	Ram Niwas Maan	PRT	KARIMNAGAR	HYDERABAD
9	Rathod Ramesh Naik	PRT	SIDDIPET	HYDERABAD
10	S.Pavan Kumar	PRT	TENALI	HYDERABAD
11	Gaurav Tripathi	PRT	PM SHRI KV KAVARATTI	ERNAKULAM
12	Akanksha Singh	PRT	PM SHRI KV MALAPPURAM	ERNAKULAM
13	P. Vasanth	PRT	JARASANGAM	HYDERABAD

**MATHS GROUP**

S.NO	NAME	DESIGNATION	SCHOOL	REGION
1	Mary Joice Antony	HM	PM SHRI INS DRONACHARYA	ERNAKULAM
2	Salini P	HM	PM SHRI THRISSUR	ERNAKULAM
3	A Ravi	PRT	PM SHRI KV KANNUR	ERNAKULAM
4	C P Ranjith	PRT	KV THALASSERY	ERNAKULAM
5	T K Sheena	PRT	PM SHRI KV KALPETTA	ERNAKULAM
6	K Davis Jessy	PRT	PM SHRI KV RAMAVARMAPURAM	ERNAKULAM
7	Asha Susan Iype M	PRT	PM SHRI KV NAD ALUVA	ERNAKULAM
8	Devika Ramani	PRT	PM SHRI KV ERNAKULAM	ERNAKULAM
9	Prema V	PRT	PM SHRI KV.1 NAVAL BASE KOCHI	ERNAKULAM
10	Benny Kurian	PRT	KV CRPF PERINGOME	ERNAKULAM
11	Keerthi Karthikeyan	PRT	KV NTPC KAYAMKULAM	ERNAKULAM
12	Neethu C S	PRT	PM SHRI KV ADOOR(SHIFT I )	ERNAKULAM
13	Beena Balakrishnan	PRT	PM SHRI KV KOLLAM	ERNAKULAM
14	Sheeba John	PRT	PM SHRI KV PATTOM (SHIFT I )	ERNAKULAM

**TWAO GROUP**

S.NO	NAME	DESIGNATION	SCHOOL	
1	RAM MOHAN	HM	PM SHRI KV PANGODE	ERNAKULAM
2	Nandakumar P V	PRT	PM SHRI KV MAHE	ERNAKULAM
3	Lakshmi Priya R	HM	PM SHRI KV No.1 PALAKKAD	ERNAKULAM
4	Simmi Vasu	PRT	PM SHRI K V PANGODE	ERNAKULAM
5	K Bindu	PRT	PM SHRI KV OTTAPALAM	ERNAKULAM
6	Nidhi Singh	PRT	PM SHRI KV IDUKKI	ERNAKULAM
7	.Ayona KPS	PRT	KV KADUTHURUTHY	ERNAKULAM
8	Raji B Nair	PRT	PM SHRI KV ADOOR(SHIFT II )	ERNAKULAM
9	Kanakatla Mohan	PRT	AFA No.2 Dundigal	HYDERABAD
10	Kompelli Kamal Kiran	PRT	SIRCILLA	HYDERABAD
11	Chandrasekhar Maliyada	PRT	SRIKAKULAM	HYDERABAD
12	Thati Devivara Prasad	PRT	K V IIT Tirupati	HYDERABAD
13	Shaik Saman	PRT	K V GUNTAKAL	HYDERABAD
14	Ashish Kumar	PRT	K V ONGOLE	HYDERABAD

# **LAT QUESTIONS**

## **CLASS V**



## LAT QUESTIONS -ENGLISH

CLASS : 5

Read the conversation between Kitty and Bhola and answer the questions .



1) Which statement is true ?

- a) Bhola is sad to have Kitty as a good friend.
- b) Kitty was tired wandering around the forest all day.
- c) Bhola was tired wandering around the forest all day.
- d) Kitty was annoyed of getting stuff stuck in his fur.

**Answer c)**

2) Which word in the conversation has the meaning " Play and move about in a cheerful and lively way " ?

- a) fur.
- b) stream.
- c) stuff.
- d) frolicking

**Answer d)**

3) " We have so many streams for frolicking " What would be the most suitable meaning for this statement ?

- a) We don't have much time for fun
- b) We can go to somewhere else and try getting honey
- c) We can go and play with our friends
- d) We can explore many streams and have fun

**Answer d)**

Read the following passage carefully and answer the given questions

‘The Boxcar Children’ by ‘Gertrude Chandler Warner’ tells the story of four orphaned children, Henry, Jessie, Violet, and Benny. They take shelter in a bakery when it rains. They create a home for themselves using old dishes and scraps in an abandoned boxcar in the forest, not wishing to live with their hard-hearted grandfather, whom they have never met. They eventually meet their grandfather, who is a wealthy and kind man. The children decide to live with the grandfather, who moves their beloved boxcar to his backyard so the children can use it as a playhouse. To the orphans, the boxcar represents family, safety, and a gathering place. Everything is the same as it was in the woods, except now the boxcar is next to a fancy fountain instead of a brook. This story shows the love between siblings and creative problem-solving.

4) ) The description of the boxcar suggests that for the orphans, it functions primarily as:

- a) A temporary shelter that offers minimal comfort.
- b) A place where they can engage in imaginative play and storytelling.
- c) More than just a physical space, fulfilling crucial social and emotional needs.
- d) A symbol of their abandonment and isolation from the wider community.

**Answer c)**

5) ) Find out the word from the passage which means – "to give it up completely"

- a) abandon.   b) represent.   c) eventually   d) decide

**Answer a)**

6) What significant change occurred when the children went to live with their grandfather?

- (a) They moved to a different forest.
- (b) They had to sell all their old dishes.
- (c) Their boxcar was moved to his backyard.
- (d) They had to share a room in his large house.

**Answer c)**

7) The story primarily highlights which of the following themes?

- (a) The dangers of living in the wilderness
- (b) The importance of wealth and luxury
- (c) The love between siblings and creative problem-solving
- (d) The difficulties of adapting to a new environment

**Answer c)**



**8) Read the poem given and answer the question:**

If I were you and you were me  
What a monotonous world it would be,  
If my thoughts were the same as yours  
We might as well have been silent for years....  
How does having different thoughts benefit all of us?

- a) We can do better than our friends.
- b) We can tease our friends when they have funny ideas.
- c) We can share our ideas to help others.
- d) We can be selfish and be competitive

**Answer. c**

**9) Choose the correct meaning for the underlined word:**

The man writhed in pain.

- a). twisted his body
- b). lifted his leg
- c). laughed out
- d). shouted angrily



**Answer a)**

**10) Read the conversation and answer the question.**

Mother: Don't forget to water the plants while I'm away. Sam: Sure, Mum. I've even set a reminder on my phone!

**What does Sam's reply show about him?**

- a) He is forgetful
- b) He is helpful and responsible
- c) He doesn't like plants
- d) He is lazy

**Answer. b)**

**11) Choose the correct sentence:**

- a) She go to school every day.
- b) She goes to school every day.
- c) She going to school every day.
- d) She school goes every day.

**Answer b )**

**12)** In the sentence "The fluffy clouds drifted slowly across the blue sky," the adjectives "fluffy" and "blue" describe:

- (a) the action of drifting
- (b) the speed of drifting
- (c) the clouds and the sky
- (d) how slowly the clouds moved

**Answer : c)**

**13) Arrange the following words to make a correct sentence:**

"is / today / sunny / it"

- a) Today it sunny is
- b) It is sunny today
- c) Sunny is today it
- d) It sunny today is

**Answer b)**

**Read the passage and answer the questions**

Ice-cream ranks as one of the most popular desserts. Ice-cream can be healthy for you because the milk and fat in it make it rich in calcium, phosphorus, protein and vitamin A. It is also a good source of energy. Most Ice-creams contain milk products, sugar and water. The first step in making Ice-cream is to combine the main ingredients- milk solids and fats, sugar and water- to make a mix. Then the mix is pasteurized to destroy harmful bacteria by rapidly heating and cooling the mix. The mix is then homogenized, and this gives Ice-cream its smooth texture. The mixture is cooled and stored for a few hours, after which flavouring and colouring are added. Different flavourings such as chocolate, strawberry and vanilla are used in Ice-creams.

14). What makes ice cream a potentially healthy food?

- a). It contains low sugar
- b). It is made with fruits
- c). It is rich in calcium, phosphorus, protein, and vitamin A
- d) . It contains no fats

**Answer c)**

15). What is the purpose of pasteurizing the ice cream mix?

- a). To improve the flavour
- b). To add colour
- c). To give it a smooth texture
- d) . To destroy harmful bacteria

**Answer d)**

16). Which of the following is NOT a main ingredient in most ice creams?

- a). Milk products.
- b). Sugar.
- c). Water.
- d). Salt

**Answer d)**

17) What step comes right after homogenization in the ice cream making process?

- a). Pasteurization
- b). Flavouring
- c). Cooling and storage
- d). Packaging

**Answer c)**

18) Which of these is a common flavor used in ice cream?

- a). Lemon
- b). Coffee
- c). Vanilla
- d). Coconut

**Answer c)**

**Read the conversation and answer the question.**

Raju – “I saw a boy picking up someone else’s lunch box and putting it in his box.”

Arjun – “Maybe he was hungry”.

19) What is the most responsible action Raju could take?

- a)Take a video and post it online.
- b)Shout at the boy in front of everyone.
- c)Inform class teacher
- d)Ignore it completely

**Answer: (c)**

20) Which word is used incorrectly in the following sentence due to the wrong homophone:

"The deer ran threw the forest."

- (a) The            (b) Deer            (c) Ran            (d) Threw

**Answer : d)**

21) Guess, what is he likely saying?

- a)“I love sunny days”.
- b) “Snow is beautiful”
- c) “I should have bought an umbrella”.
- d)“It’s very hot today”.



**Answer. C)**

22) Complete the sentence using the apt conjunction .

\_\_\_\_\_ you study diligently, you will likely succeed in the exam.

- a) Because      b) Although      c) Unless      d) If

Answer .d)

**23) Choose the right group of words that can be placed in the sentence:**

Just then a kingfisher flew ..... and said: “My feathers are very colourful. I have feathers as ..... as the sea, as ..... as the rose and as green as the hills.

- a). buy, blew, read.      b). by, blue, red      c). bye, blow, rid

Answer . b)

**Read the passage and answer the questions**

Plants need sunlight and water to make their own food. You can do an experiment to test if this is true. Place a bucket over a patch of green grass. After a few days, lift the bucket. You will see that the grass is not as green anymore. If you leave the bucket in place for a week, the grass will become very dull. This happens because the grass cannot make food in the dark. Remove the bucket. In a few days, the grass will start turning green again.

24) What is an experiment?

- (a) a way to grow grass  
(b) a way to test an idea  
(c) a way to use a bucket

**Answer : b)**

25) According to the passage, how long does it take for the grass to become dull?

- (a) a month.      (b) a week      (c) a few days

**Answer: (b)**

26) Choose the word that has a meaning opposite of dull?

- (a) bright.      (b) brown.      (c) sunlight.      d) dawn

**Answer: a)**

27) What happens to the grass after a few days of removing the bucket from it ?

- (a) The grass turns brown.  
(b) The grass gets very dull.  
(c) The grass start turning green.

**Answer: (c)**

28) How can we summarize the core message of this text?

- a). Buckets are bad
- b). Plants need sunlight to grow
- c). Grass is not pretty when it is dull
- d). Green is beautiful

**Answer : b)**

29) Observe the picture given. What are the feelings of these children and what are they saying?



- a). “We don’t want to go to school”.
- b). “Did you bring your lunch”.
- c). “Just look at those birds, they are as happy as us”.
- d). “It’s very hot today”

**Answer.c)**

30) Which word best completes the sentence with a rhyme ?

“ Someone saw a little fire as he was passing by, He did not stop to put it out, he did not even ..... ”

- a). fly.
- b). lie.
- c). try.
- d). buy

**Answer. c)**

31) ‘We should not do anything in a hurry. Prepare well in advance.’

The above lines give the meaning of one of the proverbs given below.

Choose the right option:

- a) Haste makes waste.
- b) Nip it in the bud.
- c) Work is worship.
- d) Practice makes perfect.

**Answer. a**

32) Read the poem and answer the questions given below.

The sun shines bright in the morning sky,  
And warms the earth as it passes by.  
It’s rays bring light to the world outside,  
And fill our hearts with joy and Pride.

**How does the sun shine in the morning sky?**

- a) lightly.
- b) brightly
- c) warmly
- d) sweetly

**Answer. b)**

**33)** Choose the correct synonym for the underlined word .

The boy was startled by the sudden sound.

- a)pleased.      b)taken a back.      c)amused.      d)excited

**Answer. b)**

**34)Choose the correct meaning for the word ‘Pride’.**

- a) A feeling of satisfaction.  
b) A feeling of nostalgia.  
c) A feeling of shame.  
d) A feeling of confusion.

**Answer . a)**

**35)Choose the correct conjunctions to complete the sentences**

“I wanted to go to the park,\_\_\_ it started to rain.

- a) and.      b) or      c) so      d) but

**Answer. d)**

**36)Choose the correct form of the adverb and complete the sentence**

She sings \_\_\_\_\_(beautiful) than her sister

- a) beautiful      b) most beautifully.      c) more beautifully.      d) beautifully

**Answer. c)**

**37)The \_\_\_\_ (child) are playing in the park**

- a)child.      b)children.      c)childs.      d)child’s

**Answer. b**

38) Read the following sentence: "The politician's speech was full of ambiguous statements, leaving the audience unsure of his true intentions."

In this context, "ambiguous" MOST likely means:

- (a) forceful and direct  
(b) clear and concise  
(c) open to more than one interpretation  
(d) filled with personal anecdotes

**Answer : c)**

**Read the passage and give answer to the questions**

Mia went to the park outside her house. In the park, she saw a very pretty butterfly. The butterfly was blue and yellow in colour. It was sitting on a white petal. Soon she saw that there were four more butterflies. One other butterfly was black and white. When she went to touch this butterfly, it flew away. This made Mia jump a little. The butterfly went and sat under a tree. Mia ran down to the tree, but by then it was gone. She tried to follow it, but couldn't find it again.



39)What happened when Mia went to touch the butterfly?

- a)It sat still
- b)It climbed on her hands
- c)It fell down
- d)It flew away

**Answer: d).**

40) The black and white butterfly quickly disappeared under a tree. Which factor most likely contributed to this rapid disappearance?

- (a) The butterfly flew very fast.
- (b) Mia was not looking carefully.
- (c) The park environment offered places for the butterfly to hide and blend in.
- (d) The butterfly was magical and could become invisible.

**Answer: c).**

41) Mia "tried to follow" the butterfly but couldn't find it again. What does this imply about her understanding of butterfly behavior?

- (a) Mia is not very observant.
- (b) Butterflies move unpredictably and are difficult to track.
- (c) Mia gave up too easily.
- (d) The butterfly intentionally hid from Mia.

**Answer :b)**

42)The word with same meaning as “Delicious“

- a) Sweet.
- b)Favourite.
- c)Savory.
- d)Like

**Answer. c)**

43)Frame a question for the following answer.

**I saw a Hindi movie last night.**

- a)Where were you last night ?
- b)What did you see last night?
- c)What did you do last night ?
- d)Where did you go last night?

**Answer. c)**

44)She gave a \_\_\_\_\_ speech that moved the entire audience to tears.

- a)Boring
- b) Emotional
- c) confusing
- d) robotic

**Answer. b)**

**45) Which of the following is in the future tense.**

- a) Seena saw Nithin yesterday.
- b) Seena talking to Laila.
- c) Seena will visit Mumbai.

**Answer. c**

**46) "The tall tree stood in the middle of the garden." Identify the adjective in the sentence?**

- a) Tall      b) tree      c) garden      d) Stood

**Answer. a)**

**47) Find out the meaning of the word "warn"?**

- a) To give advice or caution
- b) Full of risk
- c) Smart or knowledgeable
- d) To go and see someone

**Answer. a**

**48) Which sentence demonstrates correct subject verb agreement?**

- A) The list of items are on the desk.
- B) Each of the students have a textbook.
- C) The team is winning the match.
- D) Neither of the options were suitable.

**Answer c )**

**Read the passage and give answer to the question**

Sheela was excited to visit her grandmother's house. She had heard so much about the beautiful garden and the sweet-smelling flowers. When she arrived, her grandmother greeted her with a warm hug and took her to the garden. The garden was full of colourful flowers, and Sheela loved the smell of the roses.

**49) Why was Sheela excited to visit her grandmother's house?**

- a) She wanted to see the garden
- b) She wanted to meet her friends
- c) She was going to play games
- d) She was going to a party

**Answer. a)**

**50) Choose the correct option to complete the sentence:**

\_\_\_\_\_ dog is barking loudly.

- a) A.      b) An.      c) The.      d) It

**Answer. a**

**51)** Ravi was feeling joyful after winning the race, while his friend looked a bit unhappy because he came in last. Based on the sentence, what is the relationship between the words joyful and unhappy?

- a). They are synonyms because they both describe excitement
- b). They are antonyms because they show opposite feelings
- c). They are synonyms because both relate to competition
- d). They are antonyms because both mean tired

**Answer b)**

**Read the following passage and tick the correct answer.**

Maya saw a small bird with a broken wing lying on the pavement. She carefully picked it up and took it home. She made a small nest for it in a box and gave it some water and crumbs of bread. The next day, the bird chirped weakly but didn't try to fly.

**Q52)** Maya's actions after finding the bird show that she is most likely:

- (a) Annoyed by the bird's presence.
- (b) Afraid of getting sick.
- (c) Kind and compassionate towards animals.
- (d) Hoping to sell the bird later.

**Answer : c)**

**Q53)** The fact that the bird chirped weakly but didn't fly the next day suggests:

- (a) The bird was pretending to be injured.
- (b) The bird's wing was still hurt, and it needed more time to recover.
- (c) Maya did not give the bird enough food.
- (d) The bird was not really a flying bird.

**Answer : b)**

**54).** In the sentence, "The old tree provided a **haven** from the scorching sun," the word "haven" suggests a place that is:

- (a) dangerous and exposed
- (b) temporary and uncomfortable
- (c) safe and sheltered
- (d) difficult to reach

**Answer. c)**

**55).** Find the word that rhymes with- noises

- a. Build.
- b. Voices.
- c. Solve.
- d. Plays

**Answer. b**

56).The antonym of foolishly is

- a.Beautifully.   b. Focussed.   c. Wisely.   d.platform

**Answer. c**

57)Ravi was feeling joyful after winning the race, while his friend looked a bit unhappy because he came in last.

Based on the sentence, what is the relationship between the words joyful and unhappy?

- a. They are synonyms because they both describe excitement  
b. They are antonyms because they show opposite feelings  
c. They are synonyms because both relate to competition  
d. They are antonyms because both mean tired

**Answer. b**

58).Asha loves reading adventure books. Her favourite story is about a girl who finds a magical island.

Which of the following is the BEST question Asha might ask after reading this story.

- a. What is the price of the book?  
b. How many pages does the book have?  
c. Where can I buy adventure books?  
d. What happens next on the magical island?

**Answer: d**

59)What did you learn from the story of the ant and the grasshopper?

- A. The ant and the grasshopper are insects.  
B. The grasshopper sang songs in summer.  
C. We should always work hard and plan for the future.  
D. I like grasshoppers more than ants.

**Answer. c**

60).Which sentence demonstrates correct subject verb agreement?

- a)The list of items are on the desk.  
b)Each of the students have a textbook.  
c) The team is winning the match.  
d) Neither of the options were suitable.

**Answer. c**

61)Which of the following sentences is in the simple past tense.

- a)She is eating an apple.  
b)She ate an apple  
c)She will eat an apple  
d)She eats an apple.

**Answer. b**

62). Rahul went to the park and played with his friends. What did Rahul do?

- a) he studied
- b) he played in the park
- c) he went shopping
- d) he watched T.V

**Answer. b**

63). Which sentence uses punctuation correctly to list three different colors?

- (a) The flag is red blue and green.
- (b) The flag is red, blue and green.
- (c) The flag is red blue, and green.
- (d) The flag is red, blue, green.

**Answer. b**

64). Which would be the correct way of arranging the words

school/ to/goes/ Rani

- a) Rani goes to school.
- b) goes Rani to school.
- c) to school Rani goes
- d) Rani school to goes.

**Answer. a**

65). The word 'cluster' mean

- a) single person
- b) group
- c) Isolated
- d) Dozen

**Answer . b**

66). The new student felt nervous on her first day of school, but her friends made her feel more \_\_\_\_\_.

- a) angry
- b) sad
- c) comfortable
- d) worried

**Answer. c**

67) Rahul loved playing cricket. One day while playing, Rahul hit the ball over the fence. It landed in Mrs. Sharma's garden. She was an old lady who loved gardening. She said, "don't worry Rahul come and get your ball."

How can Mrs. Sharma's personality be characterized?

- a) aggressive
- b) furious
- c) kind
- d) selfish

**Answer. c**

**68)** Choose the correct verb form to complete the sentence.

**“ By the time I \_\_\_\_\_ my homework, it was already midnight.”** ( finish)

- a) Finish    b) finishes    c) finished    d) have finished

**Answer. c**

**69)** Frame a question for the following answer.

I played with my friends yesterday evening.

- a) What were you doing yesterday?  
b) What did you play yesterday?  
c) What did you do yesterday ?  
d) Where did you play yesterday?

**Answer. c)**

**70)** Choose the correct set of homophones which will complete the sentence.

The milk is \_\_\_\_\_ hot \_\_\_\_\_ drink.

- a) Two , too  
b) Too , to  
c) Too , two  
d) Two , to

**Answer : b)**

**71)** In which sentence are the pronouns used correctly .

- a) Peter and I are friends. They like football and Tennis.  
b) My mother's name is Anna. He is a Nurse.  
c) Tim and Tom are twins. We are twelve.  
d) John is a scientist. He is very intelligent.

**Answer : d)**

**72)** Choose the option that correctly combines the two short sentences into one using a suitable conjunction:

Sentence 1: The sun was shining brightly.

Sentence 2: We decided to go for a walk.

- (a) The sun was shining brightly, so we decided to go for a walk.  
(b) The sun was shining brightly, but we decided to go for a walk.  
(c) The sun was shining brightly, because we decided to go for a walk.  
(d) The sun was shining brightly, or we decided to go for a walk.

**Answer a)**



73) Which of the following sentences uses a possessive pronoun correctly?

- (a) The blue car is mine's.
- (b) That red bicycle is hers.
- (c) Their's house is very big.
- (d) The cat licked it's paw.

**Answer : b)**

74) In the dialogue:

"A: I won the lottery!

B: \_\_\_\_\_! That's amazing!"

Which interjection best fits B's likely reaction?

- (a) Well
- (b) Indeed
- (c) Alas
- (d) Wow

**Answer d)**

75) Which of the following sentences uses the correct comparative adjective?

- (a) This flower is beautiful than that one.
- (b) My drawing is more good than yours.
- (c) He is taller than his sister.
- (d) She is most short in the class.

**Answer c)**

## कक्षा पांच हिन्दी LAT

अभी अभी थी धूप बरसने  
लगा कहां से यह पानी ?  
किसने फोड़ घड़े बादल के  
की है इतनी शैतानी ?  
सूरज ने क्यों बंद कर लिया  
अपने घर का दरवाज़ा ?  
उसकी मां ने भी क्या उसको  
बुला लिया कहकर आ जा ?  
ज़ोर ज़ोर से गरज रहे हैं  
बादल है किसके काका ?  
किसको डांट रहे हैं , किसने  
कहना नहीं सुना मां का ?

– सुभद्राकुमारी चौहान



1) बादल के घड़े फोड़ने का क्या अर्थ हो सकता है ?

क))घर के घड़े तोड़ना

ख) बादल का बरसना

ग))बादल का गरजना

**सही विकल्प : ख)**

2) “सूरज ने क्यों बंद कर लिया अपने घर का दरवाज़ा “ इस पंक्ति से कवयित्री क्या कहना चाहती हैं ?

क)सूरज को गुस्सा आ गया और उसने अपना दरवाजा बंद कर दिया

ख)बहुत ज्यादा गर्मी होने के कारण सूरज थक गया

ग))बारिश होने के कारण सूरज नहीं दिख रहा

घ) मां के डांटने से

**सही विकल्प : ग)**

3) इस कविता के लिए सबसे उचित शीर्षक क्या हो सकता है ?

क) सूरज की शैतानी

ख) मां की डांट

ग) सूरज का दरवाजा

घ) पानी और धूप

सही विकल्प : घ)

4. दिए गए चित्र के लिए उचित वाक्य कौन सा है ?

क). मेज पर किताबें हैं।

ख). मेज पर किताब है।

ग). मेज पर किताबों है।

सही विकल्प क)



5. दिए गए वाक्य में कौन सा सर्वनाम शब्द आ सकता है?

राधा और मोहन अच्छे दोस्त हैं। ..... कई मित्र हैं।

क) उनका

ख) उनके

ग) उनकी

सही विकल्प ख)

6) चित्र से जुड़ा सबसे सही उत्तर कौन सा है।

क) चिड़िया पेड़ पर बैठी है।

ख) चिड़िया पेड़ से बैठी है।

ग) चिड़िया पेड़ में बैठी है।

सही विकल्प : क)



7. कल्पना कीजिए कि एक दिन गाँव का डाकिया नहीं आता और एक ज़रूरी चिट्ठी सबको बहुत देर से मिलती है। यदि आप डाकिए की जगह होते, तो क्या करते ताकि चिट्ठियाँ समय पर सभी तक पहुँच जाएँ?

क) मैं आराम करता और अगली बार दुगनी चिट्ठियाँ लेकर जाता।

ख) मैं सोचता कि चिट्ठी तो आ ही जाएगी, देर-सवेरा।

ग) मैं साइकिल से भी जल्दी पहुँचाने की कोशिश करता, चाहे बारिश ही क्यों न हो।

घ) मैं किसी और से कहता कि वह चिट्ठियाँ बाँट दे।

**सही विकल्प : ग)**

8). रीमा रोज़ स्कूल जाती है। वह स्कूल में सबसे पहले पहुँचती है और हमेशा अपनी किताबें सही तरीके से जमाकर रखती है। वह अपने दोस्तों की मदद भी करती है। एक दिन वह स्कूल देर से पहुँची, लेकिन फिर भी सबसे पहले अपनी किताबें जमाईं और अध्यापिका की मदद की।

रीमा की आदतों से हमें क्या सीखने को मिलता है?

क) देर से स्कूल आना अच्छा है

ख) दोस्तों की मदद नहीं करनी चाहिए

ग) समय पर काम करना और मदद करना अच्छी बात है

घ) किताबें बिखेर कर रखनी चाहिए

**सही विकल्प : ग)**

9) निम्नलिखित कविता को पढ़कर नीचे दिए गए प्रश्न का उत्तर दीजिए।

हर पल चलती चींटी,

श्रम का राग सुनती चींटी।

चाहे अगली कड़ी धूप हो या वर्षा,

दाना चुनकर लाती चींटी।

कविता में चींटी के चरित्र के माध्यम से लेखक मुख्य रूप से क्या संदेश देना चाहता है?

क) आलस्य जीवन का आधार है।

ख) मेहनत और लगन से हर मुश्किल पर काबू पाया जा सकता है।

ग) मौसम के अनुसार काम करना चाहिए।

घ) चींटी केवल दाना इकट्ठा करने के लिए जीती है।

**सही विकल्प : ख)**

10). दिए गए वाक्य को पूरा करने के लिए खासियत (विशेषता) बतानेवाला शब्द चुने –  
एक बार एक ब्राह्मण राजा कर्ण के पास मदद माँगने गया। राजा ने अपना कवच और कुंडल निकाल कर ब्राह्मण को दे दिए।

वाक्य – राजा कर्ण एक ..... इंसान है।

(क) कड़वा. (ख) मधुर. (ग) दयालु. (घ) विशाल

**सही विकल्प : (ग)**

11) “अरे वाह आसपास कोई नहीं है।” इस वाक्य में विस्मय बोधक (!) विराम – चिन्ह किस शब्द के बाद लगेगा ?

क) अरे (ख) वाह. (ग) कोई (घ) है

**सही विकल्प : (ख)**

12. शब्दों का सही क्रमवाला वाक्य चुनें।

(क) जाते किनारे नदी पर हैं हम।

(ख) हम नदी किनारों पर हैं जाते।

(ग) हम नदी किनारे जाते हैं।

(घ) किनारे पर हम नदी जाते हैं।

**सही विकल्प : (ग)**

13. किस वाक्य में विराम-चिन्ह का सही प्रयोग है ?

(क) मेरा नाम राम है,

(ख) तुम कहाँ जा रहे हो ?

(ग) उसके पास एक कार है !

(घ) मैं, आज विद्यालय जाऊँगा।

**सही विकल्प (ख)**

14. “अमराई” शब्द के सही अर्थ को चुनिए।

(क) आम का फल. (ख) आम का बाग़. (ग) आम का पेड़. (घ) आम का बीज

**सही विकल्प (ख)**

15. "दाल में कुछ काला होना" मुहावरे का अर्थ युक्तवाक्यका चयन करें ।

(क) दाल का रंग काला है ।

(ख) किसी की बात पर संदेह होना ।

(ग) दाल में कुछ काले रंग की वस्तु गिर गई है ।

(घ) किसी का रंग काला है ।

**सही विकल्प (ख)**

16. "कौन खिलौना लेता हूँ मैं तुम भी मन में करो विचारा।

तुम सोचोगी मैं ले लूँगा तोता, बिल्ली, मोटर, रेल।

पर माँ मैं यह कभी न लूँगा ये तो हैं बच्चों केखेला।"

उपरोक्त पंक्तियों से लड़के का कौन-सा गुण दिखता है?

[क] समझदारी.      [ख] बहादुरी.      [ग] चलाकी.      [घ] मूर्खता

**सही विकल्प [क]**

17. "पारंपरिक डिज़ाइनों में यह नवीनता सभी को बहुत भाई।"

उपरोक्त वाक्य में "भाई" शब्द का सही अर्थ क्या है?

[क] भैया

[ख] पसंद आना

[ग] चमकना

[घ] सजाना

**सही विकल्प - [ख]**

18. सही उत्तर चुनिए -

तीतर के आगे दो तीतर,

तीतर के पीछे दो तीतर,

बोलो कुल मिलाकर कितने तीतर?

[क] दो तीतर      [ख] चार तीतर.      [ग] पाँच तीतर.      [घ] तीन तीतर

**सही विकल्प - [घ]**



19. "हाँ बाबा, बाघ आया उस रात, आप रात को बाहर न निकलो।"

उपरोक्त पंक्ति से कौन-सा भाव झलकता है?

[क] आश्चर्य

[ख] विश्वास

[ग] प्रेम

[घ] डर

**सही विकल्प - [घ]**

20. वाक्य पूरा कीजिए -

वह बहुत तेज़ भाग रहा था, मानो -----

[क] वह खरगोश हो

[ख] उसे पैर निकल आए हो

[ग] वह तितली हो

[घ] उसे पंख निकल आए हो

**सही विकल्प - [घ]**

21. निम्नलिखित में से कौन-सा वाक्य शुद्ध है?

क) मैं स्कूल जाऊंगा।

ख) मैं स्कूल जाऊँगा।

ग) मैं स्कूल जाता हूँगा।

घ) मैं स्कूल जाएँगा।

**सही विकल्प : ख)**

22. 'सिंह' का पर्यायवाची नहीं है:

क) नर    ख) शेर    ग) मृगेंद्र    घ) केसरी

**सही विकल्प : क)**

23. "नाक में दम करना" मुहावरे का सही अर्थ क्या है?

क) मदद करना

ख) परेशान करना

ग) सम्मान देना

घ) डराना

**सही विकल्प : ख)**

24. निम्नलिखित में से भाववाचक संज्ञा कौन-सी है?

क) बच्चा      ख) खेल.      ग) खुशी.      घ) कलम

**सही विकल्प : ग)**

25. वाक्य में कौन-सा काल है: "राम ने खाना खा लिया"?

क) भविष्यत् काल.      ख) वर्तमान काल.      ग) भूतकाल.      घ) अपूर्ण भूतकाल

**सही विकल्प : ग)**

26. 'न्याय' शब्द में कौन-सा उपसर्ग जोड़कर 'अन्याय' बनता है?

क) अनु      ख) सम.      ग) परा.      घ) अ

**सही विकल्प : घ)**

27. 'राजपुत्र' में कौन-सा समास है?

क) द्वंद्व.      ख) तत्पुरुष.      ग) बहुव्रीहि.      घ) अव्ययीभाव

**सही विकल्प : ख)**

28. वाक्य में विशेषण बताइए: "नीला आसमान बहुत सुंदर है।"

क) नीला.      ख) आसमान.      ग) सुंदर.      घ) दोनों (क) और (ग)

**सही विकल्प : .      घ)**

29. औपचारिक पत्र का समापन कैसे किया जाता है?

क) सादर.      ख) शुभकामनाओं सहित.      ग) तुम्हारा मित्र.      घ) सच्चा दोस्त

**सही विकल्प : क)**

एक बार की बात है, एक गांव में एक किसान रहता था। वह रोज सुबह उठकर खेतों में मेहनत करता था। उसकी मेहनत के कारण उसके खेत हरे-भरे रहते थे। गांव वाले उसकी ईमानदारी और मेहनत की बहुत प्रशंसा करते थे।

30). गद्यांश में लेखक ने किस चीज़ पर ज़ोर दिया?

क) कड़ी मेहनत करने पर

ख) झूठ बोलने पर

ग) पानी का संरक्षण करने पर

घ) हमेशा सच बोलने पर

**सही विकल्प क)**

31) गद्यांश में किसान की सबसे बड़ी विशेषता क्या बताई गई है?

क) चतुर. ख) ईमानदार. ग) आलसी. घ) पढ़ा-लिखा

**सही विकल्प : ख)**

32. यदि कोई बच्चा "आसमान सिर पर उठा लेता है," तो वह क्या कर रहा होगा?

क) वह शांत बैठा होगा।

ख) वह बहुत अधिक शोर कर रहा होगा।

ग) वह बहुत ऊँची जगह पर चढ़ रहा होगा।

घ) वह आसमान को छूने की कोशिश कर रहा होगा।

**सही विकल्प ख)**

33. नीचे दिए गए शब्दों में से कौन-सा शब्द किसी वस्तु या व्यक्ति की विशेषता नहीं बताता?

क) चमकीला

ख) ऊँचा

ग) मीठा

घ) दौड़ना

**सही विकल्प : घ)**

34. नीचे दिए गए विकल्पों में से कौन-से शब्द में 'आ' की मात्रा नहीं है?

क) पंखा

ख) हवा

ग) गीत.

d) खाना

**सही विकल्प ग)**

35. नीचे दिए गए वाक्य में कौन-सा समय (काल) व्यक्त किया गया है?

"बारिश होने से पहले बादलों की गड़गड़ाहट सुनाई दी।"

क) भूतकाल. ख) वर्तमान काल. ग) भविष्य काल

**सही विकल्प क)**

36. यदि दुनिया में एक भी पेड़ नहीं होते, तो क्या असर नहीं पड़ सकता था?

क) हमें सांस लेने के लिए शुद्ध हवा नहीं मिलती।

ख) पक्षियों के रहने के लिए जगह नहीं होती।

ग) तापमान बहुत बढ़ जाता।

घ) हाथी और मोटा होता जा रहा है

**सही विकल्प . घ)**

37. सीता ने मीठा आम खाया। विशेषण की पहचान

क)सीता. ख) खाया. ग) आम. घ) मीठा

**सही विकल्प घ)**

38. निम्नलिखित वाक्य में विशेषण पहचानिए:"सीमा ने लाल फूल तोड़ा।"

क) सीमा. ख) लाल. ग) फूल. घ) तोड़ा

**सही विकल्प ख)**

39. जल' शब्द का पर्यायवाची क्या है?

क) धूप. ख) अग्नि. ग) नीर. घ) मेघ

**सही विकल्प ग)**

40. सावन में खूब बारिश होती है।" यह वाक्य किस काल में है?

क) भूतकाल. ख) वर्तमान काल. ग) भविष्य काल.

**सही विकल्प : ख)**

Q41. कंगाल' का विलोम शब्द क्या होगा?

क) अमीर. ख) निर्धन. ग) राजा. घ) साधु

**सही विकल्प : क)**

Q42. देह सूख जाती जब मेरी

तब भी अंग – अंग कट-चीर कर

आता काम सभी के, चाहे

भले राख हो जाऊँ जलकर |

इनमे से कौनसा शब्द 'देह' शब्द का पर्यायवाची नहीं है?

क)देश      ख)शरीर      ग)तन      घ)बदन

सही विकल्प - क)

Q43 बूझो एक पहेली –

प्रथम कटे रहूँ पड़ा,

कटे मध्य हो जाऊँ कड़ा,

अंत कटे कप लिए खड़ा,

सबने मुझे पकड़ा |

क)लड़का      ख)लकड़ा      ग)कपड़ा      घ)मकड़ा

सही विकल्प : ग)

Q44) “अरे वाह आसपास कोई नहीं है।” इस वाक्य में विस्मय बोधक (!) विराम – चिन्ह किस शब्द के बाद लगेगा ?

क)अरे      ख)वाह      ग)कोई      घ)है

सही उत्तर – ख)

Q45) “मैंने कहानी पढ़ना प्रारंभ कर दिया है।” इस वाक्य में रेखांकित शब्द के स्थान पर उचित विलोम शब्द क्या आएगा ?

क)आरंभ      ख)अंत      ग)समाप्त      घ)शुरू

सही विकल्प – ग )

46) ‘बिल में कौन सा जीव नहीं रहता ?

क)चूहा      ख)नेवला      ग)उल्लू      घ)चींटी

सही विकल्प ग)

Q47. सही शब्द पर गोला लगाओ |

क) सुरज      ख) शूरज      ग) सूरज      घ) सिरज

सही विकल्प ग)

48. दिए गए वाक्य में रेखांकित शब्दों का विपरीत चुनिये –

आओ अब घर चले अँधेरा हो गया हैं | मुझे माँ को खुश खबर भी तो सुनानी हैं | हमारे साथ कुछ भी अच्छा नहीं हो सकता |

क) सही, गलत, ठीक

ख) दुख, बुरा, अच्छा

ग) उजाला, अच्छा, सच्चा

घ) उजाला, दुख, बुरा

सही विकल्प घ)

49. दिए गए शब्द से मिलता हुआ नया शब्द सोचिए “ टमाटर ” \_\_\_\_\_

क) लाल, सब्जी, गोल, मीठा

ख) चटनी, रोटी, पतला

ग) अंडा, भिंडी, पानी, गंदा

घ) काला, रंग, उजाला, गोला

सही विकल्प क)

50. उचित सर्वनाम चुनकर लिखिए |

----- आज दिल्ली जाऊँगा |

(क) तुम (ख) मैं (ग) हम (घ) आप

सही विकल्प : (ख)

51. उचित कारक लगाकर वाक्य पूरा कीजिए।

फूलों ----- खुशबू आ रही है।

(क) का (ख) की (ग) के (घ) को

सही विकल्प : (ख)

52. रेखांकित शब्द का लिंग पहचानिए।

मैंने आम की गुठली फेंक दी।

क) पुल्लिंग ख) स्त्रीलिंग

सही विकल्प : ख



53. दिए गए वाक्य से क्रिया विशेषण ढूँढिए।  
भालू तेज़ दौड़ रहा था।

- (क) भालू
- (ख) तेज़
- (ग) दौड़
- (घ) रहा था।

सही विकल्प : ख)

54. दिए गए शब्दों में से शुद्ध शब्द छाँटिए

- (क) कवियित्री    (ख) कवित्री    (ग) कवयित्री    (घ) कवायीत्री

सही विकल्प : ग)

55. उसने अपने पिताजी को मनाने की बहुत कोशिश की ----- वे नहीं माने ।

- (क) और    (ख) या    (ग) तो    (घ) लेकिन

सही विकल्प : घ)

56. “गुलाब जामुन देखकर मेरे मुँह में पानी आ गया।”

इससे उस व्यक्ति कि .....

- क ) सोने की तीव्र इच्छा का पता चलता है।
- ख ) हंसने की तीव्र इच्छा का पता चलता है।
- ग ) खाने की तीव्र इच्छा का पता चलता है।
- घ) रोने की तीव्र इच्छा का पता चलता है।

सही विकल्प : ग )

57. नियम के अनुसार, यदि 'अ' या 'आ' के बाद 'इ' या 'ई' आता है, तो दोनों मिलकर 'ए' हो जाते हैं। निम्नलिखित में से किस शब्द में इस संधि नियम का सही अनुप्रयोग हुआ है?

- (क) देव + आलय = देवालय
- (ख) नर + इंद्र = नरेन्द्र
- (ग) जगत + ईश = जगदीश
- (घ) विद्या + अर्थी = विद्यार्थी

सही विकल्प : ख)

58. वह शब्द छाँटो जो 'देश' शब्द का समानार्थी (पर्यायवाची) शब्द नहीं है:

क) राष्ट्र. ख) भूमिका ग) मुल्क. घ) वतन

**सही विकल्प : ख)**

59 तुम अपने स्कूल में किन-किन तरीकों से बिजली की बचत कर सकते हो?

क ) सबकी उपस्थिति होने पर पंखा बंद कर करा

ख ) शौचालय में जाकर पानी का नल खोल करा

ग ) आवश्यकता ना होने पर भी ट्यूबलाइट जलाकर रखकर।

घ) छात्रों की अनुपस्थिति पर पंखा बंद कर के ।

**सही विकल्प घ )**

60. "सूरज साथ चले तो मैं भी चलूँ,  
अंधेरे में कहीं न दिखूँ  
ना आवाज़, ना कोई रंग,  
फिर भी हर जगह हूँ मैं तंग।  
बताओ मैं कौन?"

क ) हवा. ख ) परछाई. ग) पानी. घ ) धूप

**सही विकल्प ख)**

61) दिए गए शब्दों में से कौन सा शब्द दो अलग-अलग सार्थक शब्दों से नहीं बना है ।

क ) फूलदान      ख) कारीगर      ग) बैलगाड़ी

**सही विकल्प : ख**

चाँद मामा आओ ना,  
थोड़ा नीचे आओ ना।  
थक गए हैं पाँव मेरे,  
पीठ पे मुझे सुलाओ ना।  
चमक रहे हो दूर बहुत,  
तारों के संग घूम रहे हो।  
ज़रा ज़मीं पे आओ ना,  
कहानियाँ कुछ सुनाओ ना।

62) कविता में बच्चा चाँद मामा से क्या करने की प्रार्थना कर रहा है?

- क) उसे मिठाई खिलाने की
- ख) उसे खेल में शामिल करने की
- ग) कहानियाँ सुनाने की
- घ) उसके लिए कपड़े लाने की

**सही विकल्प : ग)**

63). स्वच्छता बहुत आवश्यक है। हमें कूड़ा-कचरा हमेशा कूड़ेदान में ही डालना चाहिए। गंदगी से बीमारियाँ फैलती हैं, जबकि साफ़-सफाई से हम स्वस्थ रहते हैं।

स्वच्छता बनाए रखने की जिम्मेदारी किसकी है?

- क) सिर्फ सरकार की
- ख) केवल स्कूल की
- ग) केवल घर की
- घ) सभी की – घर, स्कूल, समाज और सरकार की

**सही विकल्प : घ)**

एक बालक था। एक दिन वह अपने पिताजी के पास गया और बोला, ‘ पिताजी ! मुझे पचास रुपए दे दीजिए ।’ पिताजी ने कहा ,” पचास रुपए ! तुम ये रुपए किसलिए मांग रहे हो? ‘ बालक बोला , ‘ मुझे इन रुपयों की ज़रूरत है ।’ पिताजी ने बालक को पचास रुपए दे दिए । लेकिन वे जानना चाहते थे कि बालक रुपए किस काम में खर्च करेगा । वे चुपचाप उसके पीछे चल पड़े । बालक सीधा अपने साथी के घर गया । फिर दोनों बाज़ार की ओर चल पड़े । पिताजी भी उसके पीछे – पीछे गए । बाज़ार में पुस्तकों की एक दुकान थी । बालक ने कुछ पुस्तकें खरीदीं और अपने साथी को दे दीं । साथी को इन पुस्तकों की बहुत ज़रूरत थी । पिताजी सब कुछ समझ गए । वे प्रसन्न थे कि उनके बेटे ने अपने साथी की मदद की । पिताजी ने बालक को बुलाया । वे प्यार से बोले ,’ तुमने बहुत अच्छा काम किया है । दूसरों की सहायता करना बहुत अच्छी बात है । इस बालक का नाम था – चित्तरंजन दास । चित्तरंजन दास ने देश की बहुत सेवा की ।

64) पिताजी बालक के पीछे – पीछे क्यों गए ?

- क) वे बालक को अकेला छोड़ना नहीं चाहते थे ।
- ख) वे जानना चाहते थे कि बालक खेलने कहाँ जाएगा ।
- ग) वे जानना चाहते थे कि बालक रुपए से क्या करेगा ।
- घ) वे जानना चाहते थे कि बालक के दोस्त कौन थे ।

**सही विकल्प : ग)**

65) इस अनुच्छेद से क्या संदेश मिलता है ?

क) पुस्तकें खरीदना चाहिए।

ख) पिताजी से रूपए मांगना चाहिए।

ग) बच्चों पर भरोसा करना चाहिए।

घ) हमें सबकी मदद करनी चाहिए।

**सही विकल्प घ)**

66) अनुच्छेद में कहा गया है, "साथी को इन पुस्तकों की बहुत ज़रूरत थी।" इस कथन के आधार पर आप साथी की संभावित परिस्थितियों के बारे में क्या अनुमान लगा सकते हैं?

(क) साथी शायद अमीर था और विलासिता की वस्तुएँ चाहता था।

(ख) साथी के पास वित्तीय बाधाओं या अन्य कारणों से शैक्षिक संसाधनों की कमी होने की संभावना थी।

(ग) साथी को पढ़ाई में कोई दिलचस्पी नहीं थी और चित्तरंजन दास को उसे मनाना पड़ा।

(घ) साथी ने अपनी किताबें खो दी थीं और उन्हें तुरंत बदलने की ज़रूरत थी।

**सही विकल्प ख)**

गर्मी के मौसम में गाँव के बच्चे आम के पेड़ के नीचे इकट्ठा होकर खेलते थे। पेड़ पर पके हुए आम लटकते रहते, जिन्हें देखकर बच्चों के मुँह में पानी आ जाता। एक दिन, गाँव के बुजुर्ग रामू काका ने बच्चों को बताया कि यदि वे पेड़ पर पत्थर मारकर आम तोड़ेंगे, तो पेड़ को चोट पहुँचेगी और अगले साल कम फल आएंगे। उन्होंने समझाया कि हमें प्रकृति के साथ मित्रता करनी चाहिए और धैर्यपूर्वक आम के स्वयं गिरने का इंतजार करना चाहिए। बच्चों ने रामू काका की बात मानी और पेड़ पर पत्थर मारना बंद कर दिया। कुछ दिनों बाद, पेड़ से पके हुए आम स्वयं गिरने लगे, जिन्हें बच्चों ने खुशी-खुशी इकट्ठा किया।

67) गाँव के बच्चे कहाँ खेलते थे?

क) अमलताश के पेड़ के नीचे    ख) बरगद के पेड़ के नीचे    ग) नीम के पेड़ के नीचे    घ) आम के पेड़ के नीचे

**सही विकल्प : घ)**

68) बच्चों को आम देखकर क्या महसूस होता था?

क) बच्चों को हँसी आ जाती थी।

ख) बच्चों के मुँह में पानी आ जाता।

ग) अजीब सा महसूस होता।

घ) मिर्ची खाने का मन करता।

**सही विकल्प : ख)**

69) रामू काका ने बच्चों को क्या सलाह दी?

क ) पेड़ को चोट पहुंचाओ ।

ख ) आम पर लक्कड़ से निशाना साधो।

ग ) आग लगा दो ।

घ ) धैर्यपूर्वक आम के स्वयं गिरने का इंतजार करना चाहिए।

**सही विकल्प : घ )**

70) बच्चों ने रामू काका की बात क्यों मानी?

क ) रामू काका बच्चों से प्यार करते होंगे।

ख ) रामू काका वहां के बड़े राजा होंगे।

ग ) रामू काका जादू जाने होंगे।

घ ) रामू काका को पेड़ की भाषा आती होगी ।

**सही विकल्प : क )**

71) इस कहानी से हमें क्या शिक्षा मिलती है?

क ) जहाँ चाह वहाँ राह ।

ख ) जिसकी लाठी उसकी भैंस ।

ग ) सब्र का फल मीठा होता है।

घ ) मुँह में पानी आना ।

**सही विकल्प : ग )**

72) "अंधों में काना राजा" लोकोक्ति का अर्थ निम्नलिखित में से किस परिस्थिति को सर्वाधिक उपयुक्त रूप से दर्शाता है?

(क) जहाँ सभी लोग ज्ञानी हों ।

(ख) जहाँ कुछ लोग मूर्ख हों और उनमें एक थोड़ा समझदार हो।

(ग) जहाँ सभी लोग गरीब हों।

(घ) जहाँ न्याय की व्यवस्था अच्छी हो।

**सही विकल्प : (ख)**

73) कल्पना कीजिए कि "पेड़" और "नदी" आपस में बात कर रहे हैं। "पेड़" अपने बारे में किस लिंग (पुल्लिंग/स्त्रीलिंग) में बात करेगा और "नदी" किस लिंग में?

- (क) पेड़ - पुल्लिंग, नदी - स्त्रीलिंग  
(ख) पेड़ - स्त्रीलिंग, नदी - पुल्लिंग  
(ग) दोनों पुल्लिंग में  
(घ) दोनों स्त्रीलिंग में

**सही विकल्प : (क)**

74) यदि हम "हार" शब्द में उपसर्ग "उप" जोड़ते हैं, तो नया शब्द "उपहार" बनता है जिसका अर्थ 'भेंट' है। अब, यदि हम "जय" शब्द में उपसर्ग "परा" जोड़ते हैं, तो नया शब्द क्या बनेगा और उसका संभावित अर्थ क्या हो सकता है?

- (क) पराजय – जीत  
(ख) पराजय - हार  
(ग) परजय - अच्छा  
(घ) परजय - बुरा

**सही विकल्प : (ख)**

75) लोकोक्ति "अकेला चना भाड़ नहीं फोड़ सकता" का अर्थ है कि अकेला व्यक्ति बड़ा काम नहीं कर सकता। निम्नलिखित में से किस परिस्थिति में इस लोकोक्ति का प्रयोग सबसे उपयुक्त होगा?

- (क) जब एक मजबूत व्यक्ति अकेले ही सभी विरोधियों को हरा देता है।  
(ख) जब एक छोटा समूह मिलकर एक बड़ा कार्य सफलतापूर्वक कर लेता है।  
(ग) जब एक व्यक्ति अकेले ही एक बहुत मुश्किल काम करने की कोशिश कर रहा हो और असफल हो जाए।  
(घ) जब एक व्यक्ति दूसरों से सलाह लिए बिना कोई महत्वपूर्ण निर्णय लेता है।

**सही विकल्प : (ग)**

**SUBJECT : MATHEMATICS**

Q1) The distance between Kozhikode and Ernakulam is 200 km. Sayaan wants to go to Ernakulam from Kozhikode. He boarded the bus at 8:00am. The speed of the bus is 100 km per hour. At what time will he be able to reach Ernakulam?

- a) 10:00 am
- b) 11:00am
- c) 10:00pm
- d) 12 noon

**Answer: a)**

Q2) Neema's monthly salary is Rs.15000. She spends Rs. 5000 and saves the remaining. How much does she save in 5 months?

- a) 25 000
- b) 50 000
- c) 75 000
- d) 20 000

**Answer: b)**

Q3) Bannu and Binod are playing with number cards. Bannu asked Binod to choose the number card which shows the sum of the place values of 7 in the number 27 507 ?

- a) 7 007
- b) 7 700
- c) 70 700
- d) 70 007

**Answer: a)**

Q4) iv) Guess the number.

I am made of the digits 0 to 4. My hundredth place is zero. The digit in tens place is double that of the digit in ten thousands place. Who am I ?

- a) 10234
- b) 21034
- c) 21043
- d) 23410

**Answer: c)**

Q5)) Gracy has five 20 rupee notes, eight 10 rupee notes and ten 1 rupee coins. She bought a pen for Rs.30, a box for Rs.50 and a book for Rs.105. How much money is left with her?

- a) Rs. 15.00.
- b) Rs. 10.00
- c) Rs. 5.00.
- d) Rs. 25.00

**Answer: c)**

Q6) Which digits have the same face value and place value in **30814** ?

- (a) 0 and 1
- (b) 0 and 4
- (c) 1 and 4

**Answer : (b)**

Q7) The HCF and LCM of two numbers are 12 and 180 respectively. If one of the two numbers is 36, find the other?

- (a) 48
- (b) 36
- (c) 60

**Answer: (c)**

Q8) In an examination  $\frac{6}{7}$  of the total students passed. If the total students are 42, then how many students have failed?

- (a) 6
- (b) 26
- (c) 36

**Answer (a)**

Q9) Write the letters of the English alphabet with horizontal and vertical lines of symmetry.

- (a) A,H,I,
- (b) H,I,K
- (c) H,O,X

**Answer (c)**

Q10) Find the difference between the supplementary angle and complementary angle of the angle measuring  $75^\circ$  is \_\_\_\_\_

- (a)  $120^\circ$
- (b)  $180^\circ$
- (c)  $90^\circ$

**Answer (c)**



Q11) Find the cost of fencing a square park of side 125 m at the rate of 5 rupees per metre

(a) ₹ 2500

(b) ₹ 625

(c) ₹ 1500

**Answer (a)**

Q12) Area of a square is 64 sq.cm. What is the area of an isosceles triangle which is inscribed in it ?

(a) 32 sq.cm

(b) 128 sq.cm

(c) 16 sq.cm

**Answer (a)**

Q13) If the perimeter and area of a square are equal then find the side of the square.

(a) 8

(b) 4

(c) 2

**Answer (b)**

**Q14.** Opposite sides are equal.

- a. All sides are equal.
- b. All sides are unequal.
- c. If any two sides are equal.

**Answer b**

Q15. Sita was reading a map. The scale on the map showed 1 cm = 50 Km. She measured the distance from Ernakulam to Mysore as 7.7cm, so the actual distance from Ernakulam to Mysore is :

- a. 770 Km
- b. 77 Km
- c. 385 Km
- d. 3850 Km

**Ans. c ( 385 Km )**

Q16. Old Mac Donald had 120 animals in his farm. Out of which half were cows,  $\frac{1}{5}$ <sup>th</sup> sheep and the rest pigs.

Old Mac Donald had –

- a. 60 cows, 24 sheep and 36 pigs.
- b. 60 cows, 36 pigs and 24 sheep.
- c. 60 sheep, 36 pigs and 24 cows.
- d. 36 cows, 60 pigs and 24 sheep.

**Answer a**

Q17. A gardener has 452 saplings. If he plants 15 of them in a row. How many rows will he be able to plant and how many saplings will be left out ?

- a. 30 rows and no saplings left out.
- b. 30 rows and 3 saplings left out.
- c. 30 rows and 2 saplings left out.
- d. 31 rows and 0 saplings left out.

Answer. c

Q18. Anand walks 5cm North then turns right and walks 4cm and then moves 5cm towards South. How far is he from the starting point ?

- a. 13 cm
- b. 4 cm
- c. 9 cm
- d. 5 cm

**Answer. b**

Q19) Ms. Monalisa has started a small home business. She has 16400 black beads and 2163 red beads. If she needs 53 black beads and 7 red beads to make one Mala, how many Malas can she make at the most? How many red beads and black beads will remain?

- a)300 malas,23 black beads remain,
- b)309 malas,23 black beads remain,
- c)310 malas,53 red beads remain
- d)309 malas, 7 red beads and 2 black beads remain

**Answer b)**

Q 20) You are helping your friend decorate a room for a party.

You are using colourful paper strips to form different shapes on the wall. One of the shapes is a triangle, and you want to make sure all the angles are correct to fit neatly to make the shape. You know two of the angles in the triangle are  $65^\circ$  and  $45^\circ$ .

Calculate the third angle.

- a)  $80^\circ$       b)  $70^\circ$       c)  $180^\circ$       d)  $90^\circ$

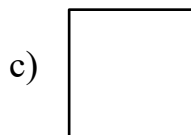
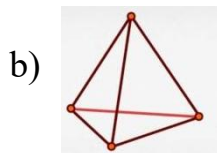
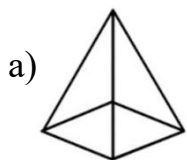
**Answer b)**

Q21) A monkey jumps up a tree. Each time he jumps up 5m, he slips down by 2m. If he has to reach a branch 17 m high, how many jumps will he have to take?

- a) 4 jumps  
b) 5 jumps  
c) 6 jumps  
d) 7 jumps

**Answer b)**

Q22) Bhavya is making a toy using a cube. Which 3D shape of the following can be best fixed on the top of a cube without any gaps?



**Answer a)**

Q23) I am square. When my sides are doubled, my area becomes 4 square cm. What was the length of my side in original?

- a) 2 cm  
b) 1 cm  
c) 4 cm  
d) 16 cm

**Answer b)**

Q24) How many hours will be there in all in a leap year?

- a) 8760 hours.      b) 2555 hours.      c) 8784 hours.      d) 2562 hours

**Answer c)**

Q25) A school library had 320 books .the librarian bought 150 more books. How many books are there now?

- a. 450
- b. 460
- c. 470
- d. 480

**Correct answer ( c )**

Q26)An elephant weighs 1200kg,while a giraffe weighs 850kg.How much heavier is the elephant than the giraffe?

- a. 350
- b. 450
- c. 250
- d.150

**Correct answer ( a )**

Q27)a gardener planted 25 rose plants and 35 tulip plants. How many plants did he plant in total?

- a)50
- b)60
- c)70
- d) 80

**Answer ( b )**

Q28).There were 45 mangoes in a basket .after giving away 18 mangoes ,how many are left?

- a)24
- b)25
- c)26
- d)27

**Answer( d )**

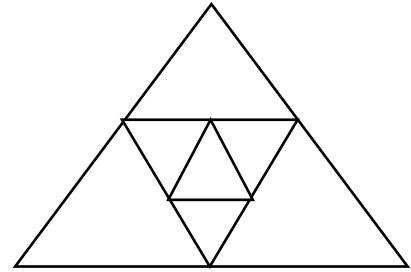
Q29) Ramesh has ₹750. After spending ₹275 on a cricket bat, how much money is left with him?

- a)175
- b)275
- c)375
- d)475

**Answer : d)**

Q30) How many triangles can be found from the figure?

- a) 7
- b) 3
- c) 9
- d) 10



**Answer : c)**

Q31) Identify the equivalent of 1 crore from the following

- a) 1 million    b) 10 million    c) 100 million    d) 1000 million

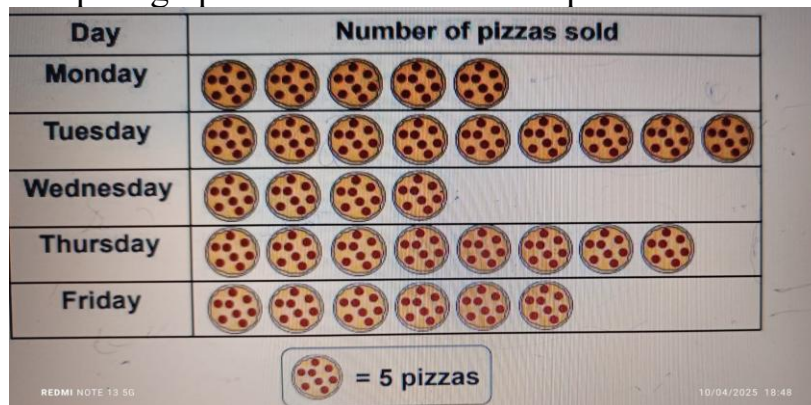
**Answer – b)**

Q32) A farmer harvested 2 Kg of onion. He sold  $\frac{1}{2}$  the total to one person and  $\frac{1}{4}$  of the total to another person. What quantity of onion is left with the farmer?

- a) 1000 gm
- b) 500gm
- c) 250 gm
- d) 1500 gm

**Answer – b)**

Q33) The pictograph shows the number of pizza's sold in Mohan's shop this week .



Q34) What is the number of pizzas sold in this week?

- a) 32
- b) 150
- c) 160
- d) 320

**Answer - c**

Q35) Three friends want to share 7 apples equally. How much will each friend get?

- (a) 1 whole apple
- (b) 2 whole apples
- (c) 2 and  $\frac{1}{3}$  apples
- (d) 1 and  $\frac{2}{3}$  apples

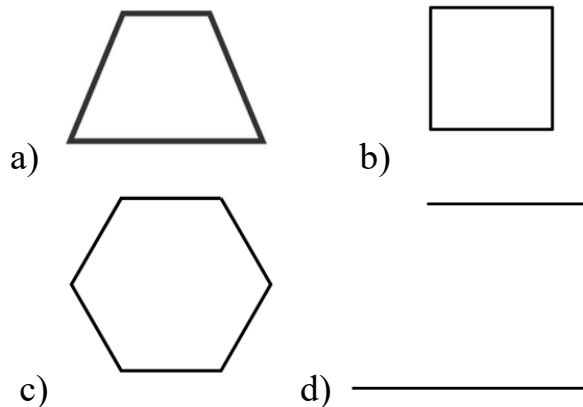
**Answer c)**

Q36) Mr Ram asked his class to identify a mystery shape from below given shapes  
He gave the following clues

I) The mystery shape is a closed figure with less than 5 sides

II) The mystery shape does not have any right angle

Which of the above shapes is the mystery shape



**Answer – a)**

Q37). Out of a group of 48 people, if 15 went for boating, 21 went for shopping and the rest of them went for watching a movie, then what fraction of the total people went for watching a movie?

a)  $\frac{1}{4}$ .   b)  $\frac{2}{3}$ .   c)  $\frac{3}{4}$ .   d)  $\frac{1}{8}$

**Answer : a)**

Q38)Manish took 12 minutes 30 seconds to run around an 800-meter track. Raghav took 13 minutes 45 seconds to run around the same track. How much less time did Manish take to run around the track than Raghav?

- a) 3 minutes 10 seconds
- b) 1 minute 15 seconds
- c) 2 minutes 5 seconds
- d) 2 minutes 3 seconds

**Answer b)**

Q39)The area of a square park is 400 square meters. Find the side of the park.

- a) 100 m
- b) 20 m
- c) 40 m
- d) 200 m

**Answer b)**

Q40)The two prime factors of 85 are:

- a) 1 and 63
- b) 5 and 17
- c) 60 and 25
- d) 180 and 5

**Answer b)**

Q41)Varun goes to school at 8:30 in the morning, and he returns home after six hours. He does his homework after an hour of reaching home. At what time does he start doing his homework?

- a) 2:30 AM
- b) 3:30 AM
- c) 2:30 PM
- d) 3:30 PM

**Answer d)**

Q42)There are 20 boys and 22 girls in a class.4 boys and 2 girls went on transfer. What part of the class are the boys?

- a)  $\frac{4}{9}$ .
- b)  $\frac{16}{40}$ .
- c)  $\frac{4}{10}$
- d)  $\frac{18}{36}$

**Answer a)**

Q43)A person drinks 8 glasses of water every day. How many glasses of water will 110 people living in a flat require in a year?

- a)  $8 \times 110 \times 365$
- b)  $8 \times 12 \times 110$
- c)  $8 + 110 + 365$
- d)  $8 + 12 + 110$

**Answer : a)**

Q44)If  $\frac{1}{4}$  of the collection of stars is coloured red and  $\frac{1}{2}$  of the collection is coloured green,how many are not coloured?



- a) 2.
- b) 6.
- c) 4.
- d) 3

**Answer : a)**

Q45) I have 27 pencils. I gave  $\frac{1}{3}$  of them to my friend and  $\frac{2}{9}$  of them to my sister. What part is left with me?

- a)  $\frac{3}{9}$ .      b)  $\frac{2}{9}$ .      c)  $\frac{4}{9}$       d)  $\frac{1}{9}$

**Answer c)**

Q46) If the length of a rectangle is 8cm and the breadth is 60mm, how many unit cm squares can be placed inside the rectangle?

- a) 480  
b) 48  
c) 140  
d) 14

**Answer b)**

Q47) Ritu wants to put a decorative lace around a square tablecloth. The length of one side of the tablecloth is 1.5 meters. How much lace will she need to buy?

- a. 3 m    b. 6 m    c. 4 m    d. 5 m

**Answer b) .**

Q48) A school corridor floor is being tiled. Each tile is 1 square meter. The corridor is 8 meters long and 2 meters wide. How many tiles are required to cover the entire corridor floor?

- a. 8    b. 10    c. 16    d. 20

**Answer c.**

Q49) A farmer wants to build a fence around his rectangular vegetable garden that is 20 m long and 10 m wide. He places one fence pole every 2 meters. How many fence poles does he need?

- a. 20      b. 40      c. 60      d. 50

**Answer b).**

Q50) Leela wants to buy a carpet for her room. Her room is 5 m long and 4 m wide. She finds two carpets:

- Carpet A: Covers 20 sq. m
- Carpet B: Covers 18 sq. m

Which carpet should she choose to cover the floor completely?

- a. Carpet A    b. Carpet B    c. Any carpet    d. None of them

**Answer a)**



Q51)A saree is 5.5 meters long and 1.2 meters wide. A tailor wants to make dresses from it. If each dress requires 1.1 square meters of cloth, how many full dresses can be made from the saree?

- a. 4          b. 5          c. 6          d. 7

**Answer: b.**

Q52)Find the sum of place values of 3 in 4230531?

- a)30531  
b)30000  
c)30530  
d)30030

**Answer : d)**

Q53)After coming back from school Raju looked at the clock and told his mother that clock hands are forming an acute angle . What can be the time showing in the clock?

- a) 3:35  
b) 2:50  
c)3:10  
d)2:30

**Answer c)**

Q54)When we add the age of Anand and his sister Anju , we get one third of a right angle . If Anand's age is 16,find the age of Anju .

- a) 16.    B). 30.    C) 14.    d) 10

**Answer d)**

Q55)Arjun has 2000 rupees .He spent one fourth of the money for buying books , two fifths for buying gifts for his friend. How much money is left with him ?

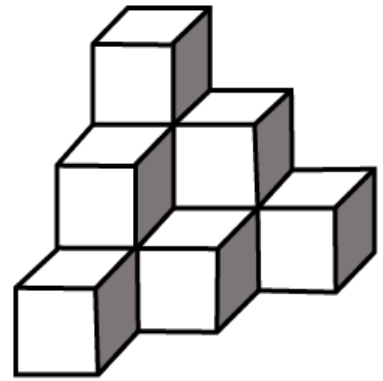
- a) 1000 rupees  
b) 500 rupees  
c) 700 rupees  
d) 800. Rupees

**Answer c)**

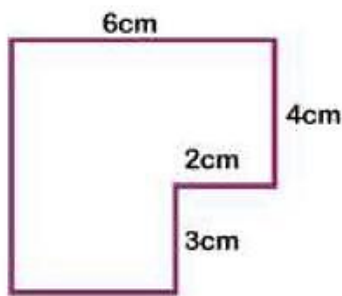
**Q56) How many cubes are there in this model**

- a) 6
- b) 9
- c) 10
- d) 8

**Answer : c)**



**Q57) Find the Perimeter of the following figure.**



- a) 15
- b) 19
- c) 26
- d) 22

**Answer : c)**

**Q58)** Think of a number which can be divided by 2, 3, 4, 6 and 8 and comes between 20 and 40.

- a) 28.    b) 24.    c) 30.    d) 36

**Answer: b)**

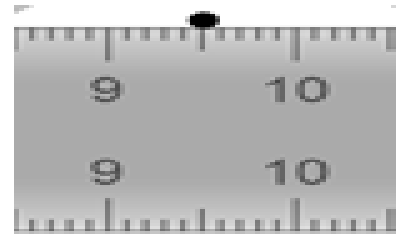
**Q59)** When Reema was 6 years old, her sister Reeba was half of her age. If Reema is 40 years old today, how old is Reeba?

- a) 30.    b) 20.    c) 37.    d) 36

**Answer c)**

Q60) Ravi drew a line segment using a scale. He marked the beginning point at 1. The end point is given in the following picture. What is the length of the line segment?

- a) 9 cm
- b) 9.5 cm
- c) 8 cm
- d) 8.5 cm



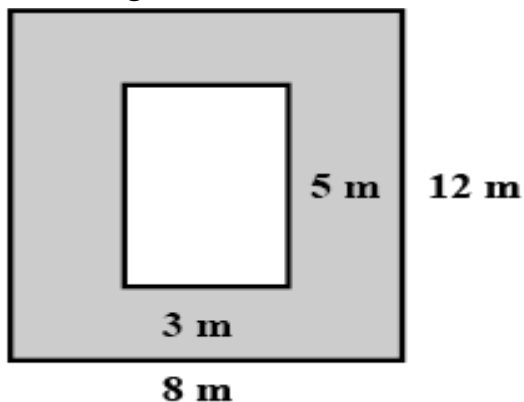
**Answer d)**

Q61)-Count and write the number of Right angles in the word “ MOTHER”

- a) 9
- b) 10
- c) 12
- d) 5

**Answer : b)**

Q62) -In the figure what is the area of the shaded portion



- a)  $75\text{m}^2$
- b)  $15\text{m}^2$
- c)  $81\text{m}^2$
- d)  $100\text{m}^2$

**Answer - c)**

Q63) - Aman’s bag is 2.14kg lighter than Ajay’s bag. The weight of Ajay’s bag is 4.72kg . How much does Aman’s bag weigh ?

- a) 2.58kg
- b) 5.28kg
- c) 4.02 kg
- d) 3.28kg

**Answer - a)**

Q64) - Complete the pattern

A-10 , C-8, E-6, G-4, \_\_\_\_\_

- a) I-2.
- b) H-2
- c) H-3
- d) K-6 a

**Answer - a)**

Q65) -The following pictograph shows the number of fishes caught by some men from a pond ( one represents 9 fishes)








AYAN	
RAJ	
SANJU	
RICKY	

Total \_\_\_\_\_ fishes were caught by Raj and Sanju

- a) 27    b) 57    c) 42    d) 72

**Answer - d)**

Q66) Observe the picture and find the answer

QUESTION	 X  x  = 4000  x  =100 Then what is  +  = ?
----------	--

- a) 40    b) 30    c) 50    d) 60

**Answer : c)**

Q67) A garland contains white and red flowers. In the garland, 75 % of the flowers are red, and the remaining flowers are white. If there are 40 white flowers, how many red flowers are there?

- a) 100    b) 220    c) 120    d) 210

**Answer c)**

Q68) I am a number greater than 5 million.  
My ones digit is three times my tens digit.  
All my digits are odd numbers.  
What number am I ?

- a) 5137539      b) 5537593      c) 5137993      d) 5437939

**Answer a)**

Q69) Rahul walks 3 km towards the East, then turns to the right and walks 1 km. After walking 1 km he turns to the right and walks 3 km. Now in which direction is he from the starting point?

- North              b) East              c) West              d) South

**Answer d)**

Q70) Tick the set that shows ascending order.

- a) 0.54,      0.054,      0.5  
b) 0.054,      0.5,      0.54  
c) 0.5,      0.54,      0.054  
d) 0.054,      0.54,      0.5

**Answer b)**

Q71) Form the largest five digit number by using the digits 4,0,9,5. You can repeat any one digit

- 95540      b) 99540      c) 55940      d) 95409

**Answer b)**

Q72) The area of a square is 4sq. cm. What will be the area of the square with double the side of the first one?

- a) 4sq.cm      b) 6 sq.cm.      c) 8 sq cm.      d) 16sq cm.

**Answer d)**

Q73) . You are helping your family plan a picnic. You need to buy juice boxes for 5 people, and each person will drink 2 juice boxes. If a pack of 6 juice boxes costs ₹60, what is the minimum amount you need to spend on juice boxes?

- (a) ₹60  
(b) ₹120  
(c) ₹180  
(d) ₹240

**Answer : b)**

Q74) Joy is standing in line to buy popcorn. He is 6th from the start of the line and 9th from the end. How many people are standing in the line ?



- a) 13
- b) 14
- c) 15
- d) 16

**Answer b)**

75) If a motor bike travels 60 Km in one hour how far would the motor bike go in two and a half hours?

- a)150 Km
- b)80 km
- c)90 km
- d)120 km

**Answer : a)**

## **CLASS V**

## **SUBJECT : THE WORLD AROUND US**

Q1)Mrs Megha collected an iron nail, an empty bottle with lid closed , a plastic wrapper and a pencil. She brought it to the class next day, and asked her friends to drop all these in a bucket of water and to observe . Which of the following can be found under the water ?

- a) Iron nail
- b) Empty bottle with lid closed
- c) plastic wrapper
- d) Pencil

**Answer a)**

Q2)If Arunima saw Poornima or full moon on April 12th, then which of the following can she observe on 27th April?

- a) Gibbous Moon
- b) Crescent Moon
- c) No Moon
- d) Full moon

**Answer - c)**

Q3)Riya's village faced a water shortage. The Panchayat took action to solve this issue. Which of the following best explains the Panchayat's role in such a situation?

- a)The Panchayat organized a water conservation awareness program
- b)The Panchayat increased taxes on water use
- c) The Panchayat punished people for using water
- d) The Panchayat stopped water supply to all houses

**Answer a)**

Q4) Rita packed mango pickle in a wet jar. After a week, it was spoiled. What could be the reason?

- a) Sunlight
- b) Air
- c) Moisture
- d) Salt

**answer c)**

Q5)Gopi, when examined by a doctor, was told that he was obese and should have a proper diet. Can you identify the proper diet?

- a) rice/ chapati, salad, vegetable curry, curd
- b) rice/ chapati, biriyani, pizza, fish fry
- c) rice/ chapati, porotta, chicken curry, paneer masala
- d) rice/ chapati, burger, chicken curry, kuruma

**Answer a)**

Q6) If a cooperative society opens in a village, how might it benefit the local farmers the most?

- a) By allowing farmers to compete against each other
- b) By buying crops at low prices from farmers
- c) By supporting farmers with loans and fair crop prices
- d) By helping farmers sell only to big cities.

**Answer c)**

Q7) What would happen if there were no police stations in a community?

- a) People would still feel equally safe
- b) Laws would be followed better
- c) There might be more thefts and crimes
- d) Everyone would become a police officer

**Answer c)**

Q8) Why do people prefer to keep their money in banks instead of at home?

- a) To help the bank grow rich
- b) To make friends at the bank
- c) To keep their money safe and earn interest
- d) To avoid spending money

**Answer c)**

Q9) A Panchayat decides to build a new road in the village. What does this decision show about its role?

- a) Panchayat only focuses on education
- b) Panchayat takes care of village development
- c) Panchayat owns all the village land
- d) Panchayat punishes rule breakers

**Answer b)**

Q10) A village people planted many trees around their fields. After some months, they noticed more birds nesting in the area, cleaner air, and better crop growth. What does this tell us about the relationship between plants, animals, and humans?

- a. Trees only help animals, not humans
- b. Humans, plants, and animals live independently of each other
- c. Trees help both animals and humans, showing interdependence
- d. Only animals depend on trees, not humans

**Answer c)**



Q11)Diya's family burns dry leaves every evening in the garden. The smoke causes coughing. What is a better way to handle dry leaves?

- a. Bury them inside the house
- b. Throw them on the road
- c. Compost them to make natural fertilizer
- d. Sell them as paper

**answer c )**

Q12)During a power cut, Ritu's family lights many candles. What is a safer and more eco-friendly alternative?

- a. Light more candles
- b. Use a generator all night
- c Use solar lamps or torches
- d. Sleep without light

**answer c)**

Q13) Maya is talking to her grandmother about the types of food they ate in the past and how cooking methods have changed over the years.

What can Maya learn from this conversation?

- a. The exact recipes used in the past.
- b. The changes in food habits, preparation techniques, and kitchen tools
- c. The economic system in place during her grandmother's childhood
- d. The exact price of food items during that time

**answer b )**

Q14)Rina's community faces regular water shortages. She and her family want to conserve water. They decide to collect rainwater from the roof using a barrel. What is the best way to ensure the water stays clean and safe for later use?

- a. Leave the rainwater uncovered and untreated
- b. Cover the barrel with a lid and clean it regularly
- c. Drink the water immediately without filtering
- d. Use it for washing without any filtration

**answer b)**

Q15)Ravi saw a dog sniffing every corner of the park. What is the dog likely doing?

- a) Searching for food
- b) Following its owner
- c) Marking its area
- d) Taking rest

**answer c)**

Q16)Meena's family visited Ladakh during summer. They wore woollen clothes there. What does it tell you about Ladakh?

- a) It is a hot place
- b) It is a cold desert
- c) It has heavy rainfall
- d) It is near a sea

**answer b)**

Q17)In Rajasthan, people store rainwater in tanks underground. What is the reason for this?

- a) They have a lot of water
- b) It looks beautiful
- c) Rainfall is less
- d) Water is salty

**answer c)**

Q18)Amit placed three moong seeds – one in a wet cotton cloth, one in dry cotton, and one in a fridge. Which one will grow fastest and why?

- a) Dry cotton, because it is clean
- b) Wet cotton, because it has moisture
- c) In fridge, because it is cool
- d) None will grow

**answer b)**

Q19)Ravi and his family went to a wildlife sanctuary. At night, while everyone was sleeping, they noticed that an owl was very active and hunting for food.

Question:

Why is the owl active at night instead of during the day?

- a) The owl sleeps more during the day because it gets tired.
- b. The owl cannot see anything in the day.
- c. The owl has strong night vision and hunts better in the dark.
- d. The owl does not like to be seen by other animals.

**answer c**

Q20)Ramu lives in a village where the main road was damaged due to heavy rains. He and the other villagers approached someone for help, and within a few days, repair work started.

Whom did the villagers most likely approach to solve this issue?

- a. The bank manager
- b. The police station
- c. The gram panchayat
- d. The cooperative society

**answer c.**

Q21)Neha saw that after eating fruits, monkeys dropped the seeds on the ground while jumping from one tree to another. A few months later, she noticed new plants growing in the same area.

What role did the monkeys play in the growth of new plants?

- a. They watered the seeds.
- b. They ate the plants and helped them grow.
- c. They helped in the dispersal of seeds.
- d. They cleaned the area for plants to grow.

**answer c)**

Q22)Raju's family earns their living by selling milk and making curd, ghee, and butter from it. They also use cow dung for their farm.

Question:

What does this situation tell us about the relationship between humans and animals?

- a. Animals depend on humans for food.
- b. Humans use animals only for farming.
- c. Humans are completely independent of animals.
- d. Humans depend on animals for their livelihood.

**answer d)**

Q23)Explains the use of technology and the process of accessing basic needs (food, water, etc.) in our daily life — e.g., farm produce to kitchen; grains to roti, preservation techniques, storage and tracking of water source.

Match the Following:

Column A

(Process/Technology)

A. Water Tank Sensor

B. Roti-Making Machine

C. Water Purifier

D. Flour Mill

Column B (Purpose/Use)

1. Grinding grains into flour

2. Saves time and effort in the kitchen

3. Helps monitor water levels

4. Makes water safe for drinking

- a. A-3 , B- 2, C- 4, D- 1.
- b. A-3 , B- 2, C- 1, D- 4.
- c. A-2 , B- 3, C- 4, D- 1.
- d. A-1 , B- 2, C- 4, D- 3

**answer a**

Q24) Riya saw ants walking in a line carrying food, she put her finger in front of them, and they scattered. Later they formed a new path. She was curious how they could follow each other. How do ants recognise their path?

- a) They hear each other's sounds
- b) They use their eye sights
- c) They follow the smell left by other ants
- d) They follow the leader ant.

**answer c**

Q25) On Earth, we see the sun rise in the east and set in the west. What does this show?

- a) The sun moves around the earth.
- b) The earth rotates on its axis.
- c) The moon covers the sun.
- d) Clouds hide the sun.

**answer b)**

Q26) Rani soaks some chana seeds in water, The next day she finds them swollen. Why did the chana seeds swell ?

- a) Seeds do not change in water
- b) Seeds become tastier when soaked
- c) Seeds absorb water and start to grow
- d) Seeds start decaying

**answer c)**

Q27) Which of the following helps to prevent mosquitoes from breeding?

- a) Storing water in open containers
- b) Throwing garbage in drains
- c) Leaving food uncovered
- d) Keeping surrounding clean and dry

**answer d)**

Q28) Sumit learned to play harmonium from his father. This is an example of

- a) Inherited behaviour
- b) Learned behaviour
- c) Copied genes
- d) Natural instinct


**answer b)**

Q29) Whose help will be needed to smell out where people are lying trapped because of an earthquake?

- a) Dog.
- b) Cat.
- c) Rabbit.
- d) Horse

**Answer a)**

Q30)Seeds have special features that help them to be spread far and wide (This is called seed dispersal) Seeds are dispersed through wind, water, animals, birds or self-explosion. Here is a picture of a seed.



The features of the seed shown above make it most suited for dispersal through \_\_\_\_\_.

- a) wind      b) water.      c) birds      d) animals

**answer : a)**

Q31)The Municipal Corporation of Hyderabad has announced that it would have two dustbins for collecting household waste. Items in group 1 would be collected daily and items in Group 2 on a weekly basis. Which of the following would be collected on a weekly basis?

Group -1 (Daily)	Group-2(Weekly)
Dry flowers	Leather pieces
Vegetable waste	Waste paper
Garden waste	Cardboard
Dead insects	Cloth pieces

- a) spoilt fruits  
b) coconut waste  
c) mineral water bottle  
d) left over food

**Answer : c)**

Q32)Adaptation means adjusting to the conditions in the surroundings. This leads to different habits, behaviour and body features in animals. Which of the following is an example of adaptation?

- a) lions eating deer  
b) humans wearing spectacles  
c) squirrels being find of nuts  
d) thick fur coats on the bodies of polar bear

**answer d)**

Q33)A strong earthquake occurs while you are in school. What should you do immediately?

- a) Run outside as fast as possible  
b) Hide under a strong desk or table  
c) Stand near a window to look outside  
d) Use an elevator to leave the building

**answer : b)**

Q34)Rohan's village is flooded due to heavy rains. What should he and his family do first?

- a) Stay inside their home and wait for the water to go down
- b) Move to a higher safe place and listen to official warnings
- c) Try to swim through the floodwater to get food
- d) Stay near electric poles for support

**answer b)**

Q35)The weather department has issued a cyclone warning in your city. What should your family do?

- a) Go to the beach to watch the strong waves
- b) Secure important documents and move to a safe shelter
- c) Ignore the warning and continue daily activities
- d) Stand outside to experience strong winds

**answer b)**

Q36)Priya's kitchen catches fire due to an oil spill. What should she do first?

- a) Pour water on the fire
- b) Use a fire extinguisher or cover it with a wet cloth
- c) Run away without informing anyone
- d) Try to put out the fire with her hands

**answer b)**

Q37)Ravi observed that his pet dog starts barking even before a stranger reaches the gate. What could be the reason behind this behavior?

- a) Dogs can see through walls
- b) Dogs have strong sense of smell and hearing
- c) Dogs dislike strangers
- d) Dogs sleep less

**Answer b)**

Q38)On a field trip to a dairy farm, students noticed machines milking cows and cooling milk quickly. Why is cooling milk immediately important?

- a) Helps cows give more milk
- b) Prevents milk spoilage
- c) Changes milk taste
- d) Makes milk white

**Answer b)**

Q39)People in hot deserts wear loose cotton clothes and cover their heads. What does this reflect?

- a)Fashion.
- b) Climate adaptation
- c) Religious custom
- d) Cotton is cheap

**answer b)**

Q40 )Children were asked to make a poster on 'Saving Water'. Which of the following would BEST fit the poster?

- a) Use more water
- b) Wash cars daily
- c) Fix leaking taps
- d) Grow water-loving plants

**answer c)**

Q41) In a flood situation, what should be done to prevent water-borne diseases?

- a) Drink rainwater
- b) Drink boiled/filtered water
- c) River water
- d) Cold drinks

**answer b)**

Q42)A child found seeds stuck to her socks after a walk. What does this show?

- a) Socks help seeds grow
- b) Humans help seed dispersal
- c) Seeds are harmful
- d) Just coincidence

**answer : b)**

Q43) While walking in the forest, Neha saw a deer suddenly run away before she heard any sound. What might be the reason for the deer's reaction?

- a) Deer have weak hearing
- b) Deer sense danger through vibrations
- c) Deer are always running
- d) Deer follow birds

**answer b)**

Q44)Why do people in cold regions build houses with sloping roofs?

- a) For decoration
- b) To match modern trends
- c) To allow snow to slide off
- d) To collect sunlight

**answer c)**

Q45) Which of these items can be grouped based on similar taste?

- a) Lemon, Mango, Salt
- b) Sugar, Honey, Jaggery
- c) Tomato, Curd, Rice
- d) Oil, Milk, Pepper

**answer : b)**

Q46) If a river is shown to the east of a village in a map, where will it appear if the map is rotated upside down?

- a) West
- b) Still East
- c) South
- d) North

**answer a)**

Q47) In Ladakh, people use dried dung as fuel. Why?

- a) Wood is costly
- b) Dung burns fast
- c) Trees are scarce
- d) Dung smells good

**answer c)**

Q48) How do animals help in seed dispersal?

- a) By watering them
- b) By carrying seeds in fur or through droppings
- c) By eating all the seeds
- d) By burying them deep

**answer b)**

Q49) Why do people use different means of transport in different places?

- a) Because they want to try all vehicles
- b) Because roads, rivers, and mountains vary in each place
- c) Because buses are always full
- d) Because they don't want to walk

**answer b)**


Q50) Which is the BEST way to manage wet waste at home?

- a) Throwing it on the street
- b) Burning it
- c) Composting it to make manure
- d) Mixing it with plastic waste

**answer c**



Q51) 16. Three children performed an experiment using a candle and a glass. They lighted the candle and then tried to cover the candle with a glass. They were asked to find out which property of air could be explained through this experiment. They made their inferences as



Rohan : Air doesn't occupy any space.

Arya: Air doesn't exert pressure .

Niya: Air is required for burning

Karan: Air has mass

Which among the following children made a correct statement based on the experiment ?

- a) Only Rohan made the correct statement .
- b) Only Niya made the correct statement
- c) Only Karan and Rohan made the correct statement .
- d) All made the wrong statement.

**answer : b)**

Q52) What should we remember while using a transport?

- a) To honk loudly
- b) To drive fast always
- c) To follow traffic rules and stay safe
- d) To use mobile while driving

**answer: c)**

Q53) A group of ants is called "Colony" then a group of Elephants is called as

- a) Colony
- b) school
- c) herd
- d) kennel

**answer c)**

Q54) A tiger knows there is no tiger in that zone with the smell of urine then how dogs mark out their area.

- a) blood
- b) urine
- c) saliva
- d) heat

**answer : b)**

Q55) Ladakh is a cold desert located in India then, which is the hot desert located in India?

- a) Thar
- b) Mount Abu
- c) Everest
- d) Jaipur

**answer a)**

Q56) How much (%) percentage water on Earth is freshwater?

- a)5%.
- b)10%.
- c)25%.
- d) 3%

**answer: d)**

Q57) In a rainy region, which roof type is best for houses to prevent water logging?

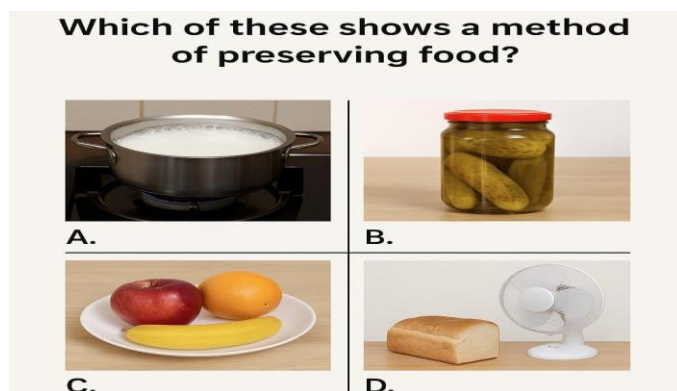
- a) Flat roof made of mud
- b) Sloping roof made of tiles
- c) Thatched roof
- d) Flat concrete roof

**Answer b)**

Q58) Dogs are often used by police because of their:

- a. Speed
- b. Cute appearance
- c Strong sense of smell
- d. Sharp claws

**answer c)**



59) Observe the picture and answer the following

- a. Milk boiling on stove.
- b. Pickles stored in a glass jar with lid
- c. Fruit left uncovered on a table.
- d. Bread kept under a fan

**answer: b)**

Q59)Observe the picture and choose the correct option

**Which of the following shows interdependence between plants, animals, and humans?**



**A. Farmer**



**B. Criming**



**C. Dog run**



**D. Tree**

- a. A farmer feeding a cow
- b. A child climbing a tree
- c. A dog running alone
- d. A tree in the desert

**answer: a)**

Q60)Observe the picture and choose the correct option

**Which shows mixing of two things?**



**A. Sugar in tea**



**B. Ball in water**



**C. Spoon on plate**



**D. Magnet with pins**

- a. Sugar in tea
- b. Ball in water
- c. Spoon on plate
- d. Magnet with pins

**answer: a)**

Q61)Rina ate quickly without chewing properly and got a stomach-ache. What lesson can we learn from this?

- a. Eat slowly and chew properly to help digestion
- b. Always eat cold food
- d. Drink water after every bite
- d. Avoid talking while eating

**answer: a)**

Q62)When we blow air into a balloon, it becomes bigger. It shows that air...

- a) has fixed shape
- b) has weight
- c) occupies space
- d) has oxygen

**answer c)**

Q63)Ahmad added a spoon of salt to a glass of water and stirred it properly. Salt disappeared in water. Which of the following would act like salt in water?

- a) flour
- b) pieces of paper
- c) sugar
- d) rice grains

**answer: c)**

Q64)Which of the following is made from plant material?

- a) plastic chair
- b) cotton shirt
- c) metal can
- d) milk products

**answer: b)**

Q65)About two-third of the Earth s surface is covered with water and one third with land. What could be said based on this statement?

- a) Water is necessary for life.
- b) Earth is the only planet that has water.
- c) Oceans are big water bodies on the earth.
- d) There is less land and more water on the earth surface.

**answer: d)**

Q66) Roshni said, I can tell that someone has used perfume. Which organ told Roshni that there was perfume?

- a) Nose.
- b) eye
- c) ear.
- d) skin

**answer: a)**

Q67)If all the bees in a garden disappear, what will happen first?

- a. Flowers will bloom faster
- b. Fruits will increase in number
- c. Plants will not be pollinated properly
- d. Trees will grow taller.

**answer c)**

Q68) Ravi washes vegetables in a bowl and then uses the same water to water plants. What is this an example of?

- a. Waste of water
- b. Water pollution
- c. Reuse of water
- d. Filtering of water

**answer: c)**

Q69) You have a mixture of sand and sugar. Which of the following methods would be the *most* effective way to separate the sand from the sugar?

- (a) Using a magnet
- (b) Pouring water into the mixture, stirring, and then pouring the water off
- (c) Picking out each grain of sand by hand
- (d) Heating the mixture

**Answer : b)**

Q70) In winter, you see smoke rising from a chimney and staying close to the ground. Why does this happen?

- a. Smoke is heavier in winter
- b. The ground pulls it down
- c. Cold air does not let the smoke rise high
- d. Smoke becomes colder than air


**Answer : d)**

Q71) Why do bubbles rise up when you blow air into water with a straw?

- a. Air is lighter than water
- b. Water is cold
- c. Straw pulls water up
- d. Water absorbs air quickly

**Answer a).**

Q72) Look at the picture below. Two glasses are filled with water. One has salt added to it. A raw egg is placed in both.



B

A

Which glass contains salt water, and why is the egg floating in it?

- a. Glass A contains salt water; salt makes the water denser so the egg floats
- b. Glass A contains plain water; the egg is lighter
- c. Glass B contains salt water; egg floats due to bubbles
- d. Glass B has hot water, so the egg floats

**answer a)**

Q73) Rani notices that the tap in her school bathroom is leaking. What should she do to save water?

- a) Ignore it because it's not her responsibility
- b) Tell her friend about it and laugh
- c) Inform the teacher or school staff immediately
- d) Close the bathroom door to hide the leak

**answer c)**

Q74) Ravi found a plant with thick roots that store food. Which part of this plant is likely to be eaten?

- a) Leaf.
- b) Stem.
- c) Flower.
- d) Root

**answer d)**

Q75) Amit wants to grow a small vegetable garden. Which action will help him grow healthy vegetables?

- a) Use lots of chemical sprays
- b) Water the plants only once a week
- c) Use compost and water regularly
- d) Keep the garden in total darkness

**answer c)**

Q76). Which statement best describes the picture ?

- a. The beach is clean and safe
- b. The beach is polluted with plastic and waste that harms animals.
- c. The beach is perfect for swimming
- d. The trash is only on the sand and not in the water.

**answer b)**

