



PM SHRI KV MALKAPURAM

MODEL PAPER OF PERIODIC TEST-2 (2025-26)

CLASS – V / _____
HOUR

TIME – 90 min

SUBJECT – ENGLISH

MARKS – 30

NAME OF THE STUDENT - _____ ROLL NO . _____

COMPETEN CIES	READIN G (5)	TEXT(5)	GRAMMAR (5)	CREATIVE WRITING (5)	SPELLINGS (5)	VOCABUL ARY(5)	TOTAL (30)
MARKS							

INVIGILATOR'S SIGN

EXAMINER'S SIGN

READING (5)

I Read the unseen passage and answer the questions.

Dr.A.P.J.Abdul Kalam was born on 15th October, 1931. His birth place was Rameswaram , in the state of Tamil Nadu. Kalam was a bright and hardworking student. He used to spend hours on his studies. After completing school, he distributed newspapers to help his father's income. Abdul Kalam started his job as a scientist. Kalam played major role in launching Satellites and in developing Missiles. He was the 11th President of India from 2002 to 2007. He received many awards like Bharat Ratna, Padma Bhushan and Padma Vibhushan.

1Q: When was Dr. A.P.J Abdul Kalam born?

A: _____

2Q: What was his birth place?

A: _____

3Q: Was Kalam a bright and hardworking student? Yes/No

A: _____

4Q: Abdul Kalam started his job as a _____

A: a) teacher b) scientist c) doctor

5Q: Name the awards which he received.

A: _____

WRITING (05)

I. Answer the following questions.

1. What helps the frog hide in its surroundings?

(1)

2. What message did the parrot ask the merchant to convey to its friends? (2)

3. How are the water tanks in Punjab made? (2)

GRAMMAR (5marks)

1. Write the contraction of the given word and use it in a sentence. (1)

Will not: _____

2. Fill in the blank with an appropriate possessive pronoun. (1)

This notebook has your name written on it. It is _____.

3. Choose the correct word from the bracket and fill in the blank. (1)

We didn't go out _____ it was raining. (and/ because)

4. Rearrange the words to form meaningful sentence. (1)

Web/ a/ spider/ carefully/ its/ weaves

5. I saw a _____ of birds sitting on the tree. (bouquet/flock) (1)

CREATIVE WRITING (5marks)



Write a short paragraph about Gilli Danda game.

SPELLINGS (5 marks)

I Write the words with -ai /oi 2 marks

1. Tail, fail, _____, _____

2. Boil, soil, _____, _____

II Encircle the correct spelling in each row. 3 marks

1. Pegion pigeon peegeon

2. merchant marchent murchant

3. beuatyful beautyfull beautiful

VOCABULARY(5 marks)

1. Add a prefix to the given word to get a new word, and write the meaning of the new word. (re/un)

(1)

<i>Prefix</i>	<i>Word</i>	<i>New word</i>	<i>Meaning</i>
	build		

2. Choose the word which means same from the underlined word. (1)

1. My favourite game is badminton because it is easy to learn and fun to play.

a. simple

b. not hard

c. difficult

3. Write words that end with the following letters. (1)

_____er

_____or

4. Write a word that has the given letters in the middle (1)

nn- _____

tt- _____

5. Make a word that ends with - less(suffix) _____(1)

**PM SHRI KENDRIYA VIDYALAYA MALKAPURAM****PRACTICE PAPER (PERIODIC TEST-II): 2025-26****CLASS: V _____****SUBJECT: ENGLISH****DATE: _____****TIME: 90 MINUTES****NAME : _____****ROLL NO: _____**

COMPETENCIES	READING	WRITING					Total
		TEXT	GRAMMAR	CREATIVE WRITING	SPELLING	VOCABULARY	
Max marks	5	5	5	5	5	5	30
Marks obtained							

Signature of Invigilator

Signature of Evaluator**Reading (5M)****Q. 1 Read the following passage and answers the questions given below:****5**

All these tanks are made of cement. The frame of the water tanks is made using steel rods. Later, concrete is used to give it final shape. Then it is installed on the roof of the house. The final product is a unique tank that can hold hundreds of litres of water. These unique tanks are the heart of the communities in the rural Punjab.

a) Where is Punjab located on the map of India?

.....

b) How are these tanks made?

.....

c) Why do people of rural Punjab make such unique tanks?

.....

d) Find a word which means the same as “one of a kind”.

.....

e) Find the opposite of “URBAN”:

Writing (25M)

Text (5M)

Q.1 Answer the following questions:

- a) What message did the parrot ask the merchant to convey to his friends in the story “The Wise Parrot”? 1
.....
- b) How does the frog catch its food? Which animal eats the frog? 2
.....
.....
- c) Imagine you are the small gilli from the poem “Gilli Danda”. What would you see while flying up in the sky? 2
.....
.....

Grammar (5M)

Q.1 Complete the following sentence using the most appropriate word: 1

- a) I saw a of bees hovering around the flowers. (swarm/bouquet)

Q.2 Complete the following sentences using the present perfect tense of the verb given in the bracket: 1

- a) She (visit) Japan twice.

Q.3 Choose the correct word from the bracket and fill in the blanks: 1

- a) I was tired (because/so) I went to sleep.

Q.4 Tick the correct answer: 1

- a) These toys belong to me. These are
(i) theirs (ii) yours (iii) mine (iv) ours

Q.5 Rearrange the jumbled words to make a meaningful sentence: 1

- a) does / she / yoga / morning / in / the
.....

Creative Writing (5M)

Q.1 Imagine your friend has invited you to his birthday party. Write a reply to your friend thanking him and telling that you will come to the party.

Dear,

.....

.....

.....

.....

.....

.....

.....

.....

.....

.....

.....

.....

.....

.....

.....

Your friend,

.....

Spelling (5M)

Q.1 Rearrange the letters to make a meaningful word:

2

a) K R O A C (sound made by frogs):

b) W A B E E R (opposite of unaware):

Q.2 Write the missing letters.

1

a) D S T R E S E D

Q.3 Fill in the blanks with the correct word:

2

a) Then it is (installed/instaled) on the roof of the house.

b) I (flik/flick) my tongue to catch my food.

Vocabulary (5M)

Q.1 Write names of any two birds.

1

.....

.....

Q.2 Complete the table:

1

MASCULINE	FEMININE	OFFSPRING
Lion		

Q.3 Write the word which means the same as ONE OF A KIND:

1

.....

Q.4 Circle the odd one out:

1

Foal Cub Tigress Chick

Q.5 Write contraction of DO NOT:

1

.....



M SHRI KENDRIYA VIDYALAYA MALKAPURAM

PERIODIC TEST-2 (2025-26)

CLASS – V / _____

TIME – 1 HOUR

SUBJECT – ENGLISH

MARKS – 30

NAME OF THE STUDENT - _____ ROLL NO . _____

COMPETEN CIES	READING (10)	WRITING (05)	GRAMMAR (5)	CREATIVE WRITING (05)	SPELLINGS VOCABULA RY (05)	TOTAL (30)
MARKS						

INVIGILATOR'S SIGN _____

EXAMINER'S SIGN _____

READING (10)

I. Read the following passage and answer the following.

Ananya loved visiting her grandmother's village every summer. The village was peaceful, with green fields stretching as far as she could see. Every morning, Ananya helped her grandmother water the vegetable garden. She enjoyed watching butterflies flutter around the bright flowers. In the evenings, the villagers gathered near the banyan tree to share stories. Ananya listened eagerly to tales about brave heroes and talking animals. These stories filled her imagination with wonder. When the holidays ended, Ananya felt sad to leave, but she promised to return the next year.

1. Where did Ananya visit every summer? (1)

2. What did Ananya help her grandmother with? (1)

3. Why did the villagers gather near the banyan tree in the evenings? (1)

4. Which word in the passage mean the same as 'calm'? (1)

5. Find the word in the passage which mean the opposite of 'cowardly'. (1)

II. Read the given poem and answer the following question.

In the playground, we gather around,
With a stick and a small gilli to throw,
Gilli Danda, our game is so sound!
We play with joy, watch it go!
One, two, three, swing and hit,
With our friends, we never quit!
With every swing, we feel so free!

1. Which game is described in the poem? (1)

2. Which line in the poem shows that the children are enjoying the game? (1)

3. How does the poem describe the action of hitting the gilli? (1)

4. Write a pair of rhyming words from the poem. (1)

5. What does the word “quit” in the poem mean? Choose a correct option. (1)

- A) To stop doing something
- B) To be silent
- C) To continue
- D) To start playing again

WRITING (05)

III. Answer the following questions.

1. Where is Punjab located on the map of India? (1)

2. How does the frog move in water and on land? (2)

3. How are the water tanks in Punjab made? (2)

GRAMMAR (05)

IV. Write the contraction of the given words and use it in a sentence. (1)

1. Will not: _____ or _____
2. They have: _____

V. Fill in the blank with an appropriate possessive pronoun. (1)

1. This notebook has your name written on it. It is _____. or _____
2. These sunglasses belong to me. They are _____.

VI. Choose the correct word from the bracket and fill in the blanks. (1)

1. We didn't go out _____ it was raining. (and/ because) or _____
2. I hop around happily, _____ I must watch out for snakes! (but/ so)

VII. Write an exclamatory sentence which expresses – (1)

1. Anger: _____ or _____
2. Joy: _____

VIII. Rearrange the words to form meaningful sentence. (1)

1. Web/ a/ spider/ carefully/ its/ weaves
_____ or _____
2. Elephants/ in/ forests/ live/ large/ groups/ in

CREATIVE WRITING (05)

IX. Write a paragraph on the importance of water and how we can use it efficiently. You may use words from the clues. (in about 70-80 words) [Clues: essential, important, living things, avoid wastage, save, fix leaks, reuse water, close taps] (5)

Or

Write a paragraph on your favourite games or sports. You may use words from the clues. (in about 70-80 words) [Clues: outdoor/indoor, number of players, equipment, rules of the game] (5)

SPELLINGS/ VOCABULARY (05)

- X. Add a prefix to the given word to get a new word, and write the meaning of the new word. Choose only one of the two. (1)**

<i>Prefix</i>	<i>Word</i>	<i>New word</i>	<i>Meaning</i>
	build		
	comfortable		

- XI. Choose the word that is different in meaning from the underlined word. (1)**

1. My favourite game is badminton because it is easy to learn and fun to play.

a. simple b. not hard c. difficult

or

2. Badal nervously told his mother about the dog he found on his way home.

a. sadly b. joyfully c. confidently

- XII. Write a word that ends with the following letters. (1)**

_____er or _____or

- XIII. Write a word that has the given letters in the middle (1)**

nn-_____ or tt- _____

- XIV. Write the masculine or feminine gender of the given animal. (1)**

Mare- _____ or Rooster- _____



PM SHRI KENDRIYA VIDYALAYA MALKAPURAM
PERIODIC TEST -2
SESSION 2025-26
CLASS- 5
SUBJECT:ENGLISH

NAME: _____ **ROLL NO-** _____
SECTION- _____ **TIME : 1 hour**

COMPETENCIES	1	2	3	4	5	6	7	8	9	10	TOTAL
READING (5)											
PROSE AND POETRY (5)											
GRAMMAR (5)											
CREATIVE WRITING (5)											
SPELLING (5)											
VOCABULARY (5)											
GRAND TOTAL(30)											

Signature of Invigilator: Signature of Examiner Signature of Checker:

READING (5X1=5)

1 Read the given paragraph and answer the questions that follows:-

One day a wonderful plate made of gold fell from heaven into the court of a temple. The following words were written on it.” A gift from heaven to him who loves mankind the best”. The priest of the temple invited people to the temple and told them about the gift from heaven. Everybody claimed that they love mankind

best. The richest man in the village got up and spoke about his big charity, but as soon as he touched the plate, it turned into lead. A poor farmer was also present there. He sat in a corner quietly. The priest called him to touch the plate. He bowed to the plate and touched the plate. As he touched the plate it shone more brightly. The priest awarded the farmer the plate as his love for mankind was true.

1. From where did the plate of gold fall?

2. Who spoke about his big charity?

3. What happened when the poor farmer touched the plate?

4. Which word in the passage means “a place of worship”?

5. Give a suitable title to this story?

WRITING (PROSE AND POETRY)

Q1. Where does the frog like to sit? (1)

Q2 What happens to the tiny gilli when the stick hits it ? (2)

Q3. What do we use a water tank for ? (2)

GRAMMAR(5X1=5)

Do as directed:-

a) Rearrange the jumbled words to make meaningful

sentence:- hunts / night / the /silently / tiger/at

Ans. _____

b) Fill in the blank

My colours match the plants _____ trees(or /and)

c) make a sentence having the emotion of joy.

d) fill with correct word:-

You _____ come late. It is a bad habit. (must \ mustn't)

e) Write the name of the offspring of :

Tiger _____

CREATIVE WRITING (5)

Frame a story by using sentences in the box

Water , sun, soil, eat , farmer, rain, wheat
--

or

Write a letter to the hopper frog about his whereabouts'.

SPELLING (5X1=5)

a) Circle the different meaning of the given word:-

Expensive : precious costly cheap

Circle the correct spelling:-

b) heritege heritage hiretage c) Write meaing

Overhead- _____

Gather - _____

d) Write rhyming word of

Tank - _____ Sound - _____ e)

Write full form of

weren't - _____ You're - _____

VOCABULARY(5X1=5)

a) Write opposite by using a prefix

comfortable _____

b) Change the degree:-

for e.g. big bigger biggest

small _____

c) Arrange the words as per the order of dictionary

Quit Gather Swing Underneath Golden

d) Write past form of

Send - _____ Buy _____ d)

Write the three words having each of the double letter given below Tt

: _____ Ea :

PM SHRI KENDRIYA VIDYALAYA MALKAPURAM

SESSION:- 2025-2026

PERIODIC TEST – 2

CLASS V

TWAO

TIME- 90 Minutes

TOTAL MARKS-30

Name_____ Class/Sec _____ Roll No._____

Signature of Invigilator _____ Date_____

OBSERVATION AND REPORTING(10)

1Q.Write one safety measure to ensure safety of our home and work place (1)

2Q. Write any 3 traffic rules. (3)

SA (4)

Q1. Which monuments do you see in the following currency notes

100rupees	Hampi
500rupees	Sanchistupa
50 rupees	Red fort
200 rupees	Rani ki vav

3Q.write any two dance forms of India with the state names.(2).

4Q.Short answer questions (10)

(a).How do modern changes like Technology and Digital payments add new colours to our country?(2)

(b). write two sentences about SWACHH BHARAT SWACHH VIDYALAYA (2)

(c).why are Andaman and Nicobar Islands special?(2)

(d).Why is Ashoka chakra included in the National Flag?(2)

(e)How can students show the spirit of togetherness during school events?(2).

5Q...Fill in the blanks .

(a)**The.....hills are known for their rich, wildlife and forests.(1)**

(b).The.....is a campaign to save and protect water.(1)

(C).The.....birds are being protected by women in the North east(1)

(d).The.....and.....rivers are mentioned in Our National Anthem (2)

6Q Long answer questions.(5)

How do Mangroves help people living near them?

PM SHRI KENDRIYA VIDYALAYA MALKAPURAM

SESSION:- 2025-2026

PERIODIC TEST - 2

CLASS V

TWAU

TIME- 90 Minutes

TOTAL MARKS-30

Name_____ Class/Sec _____ Roll No. _____

Signature of Invigilator _____ Date _____

Competencies	V.P	V.P.O
Observation & Reporting	10	
Identification & Classification	10	
Discovery of Facts	10	
Total	30	

Signature of Subject teacher _____

Signature of Checker _____

OBSERVATION AND REPORTING(10)

VSA (2)

Q 1. When is the Independence day celebrated ? (1)

Q 2. Name the largest mangrove forest in the world ? (1)

SA (4)

Q1. Which monuments do you see in the following currency notes

10 rupees	
20 rupees	
50 rupees	
500 rupees	

Q2. Observe and write 2 lines about the activity shown in the picture ? (2)



LA (4)

Q1. What is the name of your school ? Write the facilities provided in your school ? (4)

IDENTIFICATION AND CLASSIFICATION(10)

VSA(2)

Q1. Fill in the blanks

(1×2=2 Marks)

a) The blue wheel in the flag is called the _____

b) _____ are a group of islands in Bay of Bengal.

SA(4)

Q1. How do we celebrate republic day every year . (2)

Q2. Match the following currency symbolic with their names and the name of their Country.
(2Marks)

Symbol	Name of the Symbol	Name of the Country
\$		
€		

LA(4)

Q1. What are the different messages we get from different colors of our National Flag ? (4)

DISCOVERY OF FACTS (10)

VSA(2)

Q1. Fill in the blank. (1)

_____ is our state animal..

Q2. Name any freedom fighter or some local hero from your city who fought for the country or society ? (1)

SA(4)

Q1. Why are mangrove forest important? (2)

Q2. Observe the picture and Answer The questions.(2)

a) Name the different Animals you see in the picture ?

b) Encircle the Lion tailed Macaques in the Picture.



LA(4)

Q1. Where is Silent valley located and what was “Save Silent Valley movement” ?



KENDRIYA VIDYALAYA MALKAPURAM

PERIODIC TEST - 2 (2025-26)

CLASS – ____ / ____ TIME – 1 HOUR SUBJECT – ENVIRONMENTAL

STUDIES MARKS – 30 NAME OF THE STUDENT - _____

ROLL NO . _____

COMPETENCIES	IDENTIFICATION AND CLASSIFICATION (15)	DISCOVERY OF FACTS (15)	TOTAL (30)
MARKS			

INVIGILATOR'S SIGN EXAMINER'S SIGN _____

IDENTIFICATION AND CLASSIFICATION (15M)

Q1. Choose the correct answer: (1x4=4m)

i) What is the Swachh Bharat Swachh Vidyalaya mission about?

- a) Planting trees b) Keeping school clean and healthy c) Building new school
d) Providing free books

ii) Which village is called Asia's cleanest village?

- a) Shillong b) Mawlynnong
c) Imphal d) Aizawl

iii) Which is the largest mangrove forest in the world?

- a) Amazon mangroves b) Sunderbans
c) Godavari-Krishna mangrove d) Everglades

iv) What is the name of the campaign to save and protect water?

- a) Swachh Bharat Abhiyan b) Namami Gange
c) Water for Life Mission d) Jal Shakti Abhiyan

Q2. State whether the following statements are 'True' or 'False'. (1x2=2m) a) The 'Swachh Bharat Abhiyan' symbol is a pair of spectacles. _____ b) The National Emblem of India has three lions standing on circular platform. _____

Ans: _____

[illegible]

DISCOVERY OF FACTS (15)

Q6. Fill in the blanks: (1x5=5m)

a) The Jana Gana Mana mentions rivers like _____ and mountain ranges like the _____

b) The _____ live only in the Western Ghats. c) _____ in Kerala is the world's first airport to be entirely powered by solar energy.

d) The _____ is the main source of energy on earth.

e) The _____ is a drum used in Carnatic music.

Q7. Name the Island where people live like ancient hunter-gatherers and do not allow visitors. (1m)

Ans: _____

Q8. Why is it better to use solar or wind energy instead of coal? (2m)

Ans: _____

Q9. Which two birds are found only in Andaman and Nicobar Islands? (2m) Ans:

Q10. On the given map of India, mark the following locations. (1x5=5m)

a) Kanyakumari b) Indira Point c) Sundarbans d) Western Ghats e) Andaman and

Nicobar Islands



PM SHRI KENDRIYA VIDYALAYA MALKAPURAM

पीरियॉडिक टेस्ट (PT) परीक्षा (2025-26) विषय : हिन्दी

नाम : _____ अनुक्रमांक : _____ कक्षा : 5

वर्ग : _____ दिनांक : _____

कुल अंक : 30 समय : 90 मिनट

परीक्षक के हस्ताक्षर : _____ निरीक्षक के हस्ताक्षर : _____

अंक विभाजन तालिका

दक्षताएँ	पठन	गद्य/पद्य	व्याकरण	सृजनात्मक लेखन	वर्तनी	कुल अंक
अंक	10	5	5	5	5	30

पठन (10 अंक)

प्रश्न 1. नीचे दिए गए गद्यांश को पढ़कर प्रश्नों के उत्तर लिखिए : (10 अंक)

काजीरंगा राष्ट्रीय उद्यान असम राज्य में स्थित है। यह अपने एक सींग वाले गैंडों के लिए प्रसिद्ध है। यहाँ अनेक प्रकार के पशु-पक्षी और हरे-भरे वन देखने को मिलते हैं। प्रकृति की सुंदरता मन को बहुत आनंद देती है। हमें ऐसे राष्ट्रीय उद्यानों की रक्षा करनी चाहिए।

क) काजीरंगा राष्ट्रीय उद्यान किस राज्य में स्थित है?

ख) काजीरंगा किस जानवर के लिए प्रसिद्ध है?

ग) यहाँ क्या-क्या देखने को मिलता है?

घ) प्रकृति की सुंदरता हमें क्या देती है?

ड) हमें राष्ट्रीय उद्यानों के बारे में क्या करना चाहिए?

गद्य/पद्य (5 अंक)

प्रश्न 2. पाठ पर आधारित प्रश्नों के उत्तर लिखिए : (5 अंक)

(क) चतुर चित्रकार

1. कहानी के मुख्य पात्र कौन हैं?

2. कहानी से हमें क्या शिक्षा मिलती है?

3. आपको कहानी का कौन-सा भाग सबसे अच्छा लगा?

व्याकरण (5 अंक)

प्रश्न 3. (5 अंक)

क) पर्यायवाची शब्द

1 मित्र - _____

2 सूर्य - _____

ख) संज्ञा की परिभाषा लिखिए तथा एक उदाहरण दीजिए : (1)

ग) निम्न शब्दों के पर्यायवाची लिखिए : (2)

1. सुंदर- _____

2. मित्र- _____

सृजनात्मक लेखन (5 अंक)

प्रश्न 4. (5 अंक)

निम्न में से किसी एक विषय पर 6-8 वाक्य लिखिए :

1. मेरा बचपन
2. घूमो देखो – यात्रा का महत्व

वर्तनी (5 अंक)

प्रश्न 5. (5 अंक)

क) सही वर्तनी चुनकर लिखिए : (3)

1. सुन्दरता / सुंदरता
2. चित्रकार / चितरकार
3. राष्ट्रीय / राष्ट्रीये

ख) निम्न शब्दों से वाक्य बनाइए : (2)

1. सुंदरियाँ - _____
2. यात्रा - _____

पी. एम. श्री केंद्रीय विद्यालय मलकापुरम

कक्षा 5 अभ्यास पत्र

नाम _____ अनुक्रमांक _____

दक्षताएँ	पठन	गद्य एवं पद्य	व्याकरण	रचनात्मक लेखन	शब्दकोश	कुल अंक
अंक	(5)	(5)	(10)	(5)	(5)	(30)
प्राप्त अंक						

पठन (5 अंक)

प्र.1 नीचे दिए गए गद्यांश को पढ़कर प्रश्नों के उत्तर दीजिए। (5×1=5)

पिछली छुट्टियों में मैं अपने माता-पिता के साथ काजीरंगा राष्ट्रीय उद्यान गया। यह राष्ट्रीय उद्यान असम राज्य में स्थित है। यह उद्यान एक सींग वाले गैंडे के लिए प्रसिद्ध है। यहाँ घने जंगल, हरी-भरी घास और छोटी-छोटी नदियाँ हैं। हमने सुबह-सुबह जीप सफारी की। सफारी के दौरान हमने गैंडा, हिरण, जंगली भैंसा और कई प्रकार के पक्षी देखे। वहाँ का वातावरण बहुत शांत और सुंदर था। इस यात्रा से मुझे यह सीख मिली कि हमें जंगलों और जानवरों की रक्षा करनी चाहिए। यदि हम प्रकृति का ध्यान रखेंगे, तो प्रकृति भी हमारा ध्यान रखेगी।

a) काजीरंगा राष्ट्रीय उद्यान किस राज्य में स्थित है?

b) यह उद्यान किस जानवर के लिए प्रसिद्ध है?

c) लेखक ने सफारी कैसे की?

d) वहाँ का वातावरण कैसा था?

e) लेखक को इस यात्रा से क्या सीख मिली?

गद्य एवं पद्य (5 अंक)

प्र.2 निम्नलिखित प्रश्नों के उत्तर दीजिए।

क) चित्रकार की चतुराई से हमें क्या सीख मिलती है?

ख) 'मेरा बचपन' पाठ में लेखक किन बातों को याद करता है?

ग) लेखक को बचपन क्यों प्रिय था?

व्याकरण (10 अंक)

प्र.3 सही विकल्प चुनिए। (5×1=5)

a) 'चतुर' शब्द का विलोम है -

(i) बुद्धिमान (ii) मूर्ख (iii) तेज (iv) समझदार

b) 'यात्रा' शब्द है -

(i) संज्ञा (ii) सर्वनाम (iii) क्रिया (iv) विशेषण

c) 'हरी-भरी' शब्द में प्रयुक्त समास है -

(i) तत्पुरुष (ii) द्वंद्व (iii) अव्ययीभाव (iv) कर्मधारय

d) 'मैं स्कूल गया' वाक्य में काल है -

(i) वर्तमान (ii) भूत (iii) भविष्य (iv) आज्ञार्थक

e) "बालक" शब्द का सही स्त्रीलिंग है -

(i) बालिका (ii) बच्ची (iii) बालिकाएँ (iv) लड़की

प्र.4 शब्दों से वाक्य बनाइए। (5×1=5)

सुदरिया, चतुर, यात्रा, बचपन, प्रकृति, चित्र

रचनात्मक लेखन (5 अंक)

प्र.5 “मेरी बचपन की कोई याद” विषय पर वाक्य लिखिए। (5)

शब्दकोश (5 अंक)

प्र.6 निम्नलिखित शब्दों के अर्थ लिखिए। (5×1=5)

सुंदरिया, चतुर, यात्रा, बचपन, प्रकृति, चित्र

विषय –हिंदी

कक्षा – पांचवीं

समय – 90 मिनट

पूर्णांक-30

नाम _____ अनुक्रमांक _____

दिनांक _____ निरीक्षक के हस्ताक्षर _____

दक्षताएँ	पठन	गद्य एवं पद्य	व्याकरण	रचनात्मक लेखन	शब्दकोश	कुल अंक
पूर्णांक	(5)	(5)	(10)	(5)	(5)	(30)
प्राप्त अंक						

पठन (5)

प्रश्न 1. नीचे दिए गए गद्यांश को पढ़कर प्रश्नों के उत्तर लिखिए- 5 अंक

एक तपती दोपहर, सुमन और उसके दोस्तों ने पास के जंगल घूमने का फैसला किया। उन्होंने अपने साथ खाने के लिए कुछ नाश्ता रखा, अपनी लंबी पैदल यात्रा के लिए जूते पहने, और अपने साहसिक कार्य पर निकल पड़े। जैसे ही उन्होंने जंगल में प्रवेश किया, ऊंचे पेड़ों और पक्षियों की मधुर चहचहाहट ने उनका स्वागत किया। उन्होंने एक संकरी पगडंडी पर जाने का निर्णय लिया जो उन्हें जंगल में और अंदर ले गई। सुमन ने रास्ते में खिले हुए रंग-बिरंगे जंगली फूलों को देखा। अचानक उन्हें सरसराहट की आवाज सुनाई दी। उन्होंने पीछे मुड़कर देखा तो झाड़ियों के बीच से एक हिरण शालीनता से उछल रहा था। उत्साह से, उन सबने अपनी खोज जारी रखी और एक ठंडे पानी के झरने के पास आ गए। उन्होंने अपने पैरों को ठंडे पानी में डुबोया और एक-दूसरे पर चंचलता से छींटे मारे। कुछ देर आराम करने के बाद, वे अपने वन भ्रमण की साहसिक यादों को संजोते हुए और अपने ऊपर गर्व महसूस करते हुए घर वापस आ गए।

क) सुमन और उसके दोस्तों ने कहाँ घूमने का फैसला किया?

ख) अपने साथ उन्होंने क्या रखा ?

ग) जंगल में उनका स्वागत किसने किया?

घ) झाड़ियों में क्या उछल रहा था?

ङ) गद्यांश को आप क्या शीर्षक देना चाहोगे?

गद्य एवं पद्य

1) लेखक ने अपने दोस्तों के साथ कौन कौन से खेल खेले?

2) काजीरंगा राष्ट्रीय उद्यान की यात्रा से हमें पर्यावरण संरक्षण के बारे में क्या सीख मिलती है?

ग) तीन मछलियों ने अपने बचाव के लिए क्या-क्या उपाय किए?

व्याकरण (10)

1. एक विशाल हाथी तब तक वाक्य में संज्ञा शब्द और विशेषण शब्द लिखिए। [2]

(क) संज्ञा—

(ख) विशेषण.....

2. नीचे दिए गए वाक्यों में विराम चिह्न का प्रयोग कीजिए।

क) मछुआरे की बातें तीनों मछलियों ने सुन ली

ख) हां हां और इतनी सारी मछलियां एक ही जगह हमने पहले कभी नहीं देखी दूसरा मछुआरा बोला

3. रेखांकित शब्दों के विपरीत अर्थ वाले शब्द से रिक्त स्थान की पूर्ति कीजिए।

क) सूर्य का उदय पुरुष दिशा में और _____ पश्चिम दिशा में होता है।

ख) इस जटिल समस्या का हल बहुत _____ है।

निम्नलिखित मुहावरों के अर्थ व वाक्य प्रयोग कीजिए।

1) नौ दो ग्यारह होना :-

2) लाल पीला होना :-

ग) निम्नलिखित शब्दों के बहुवचन लिखिए।

मछली :-

ध्वनि :-

रचनात्मक लेखन (5)

1) कहानी को पूरा करो।

जंगल का सबसे छोटा हाथी आज बहुत खुश था, क्योंकि उसे पहली बार किसी बड़े काम के लिए चुना गया

था...

शब्दकोश (5).

1. प्राचीन का अर्थ क्या होता है?

(क) नया (ख) पुराना (ग) चीन देश (घ) प्रार्थन

2. गर्जना का क्या अर्थ होता है?

(क) प्यार से बोलना (ख) तेज गुस्से में बोलना (ग) गाना (घ) गुजरात

3. कथाएँ का अर्थ क्या होता है?

(क) कहानियाँ (ख) गीत (ग) किरन (घ) कबूतर

4. निम्नलिखित में से कौन-सा शब्द शब्दकोश में सबसे पहले आएगा?

(क) किरण (ख) कोयल (ग) कथाएं (घ) काला

5. मानवी का कार्य प्रशंसा के योग्य है।

(क) प्रशंसनीय (ख) प्रश्रता (ग) प्रभुत्व (घ) प्रकार

आवधिक परीक्षा – 2 (2025-26)

कक्षा – V / _____

समय – 1 घंटा

विषय – हिंदी

अंक – 30

छात्र/छात्रा का नाम - _____

अनुक्रमांक _____

दक्षताएं	पठन (10)	लेखन (05)	व्याकरण (05)	सृजनात्मक लेखन (05)	वर्तनी/ शब्दावली (05)	कुल अंक (30)
अंक						

निरीक्षक हस्ताक्षर

परीक्षक

हस्ताक्षर

पठन (10)

दिए गए गद्यांश को पढ़कर पूछे गए प्रश्नों के सही उत्तर का चुनाव कीजिए।

(5M)

डॉ. ए. पी. जे. अब्दुल कलाम भारत के महान वैज्ञानिक और पूर्व राष्ट्रपति थे। उनका जन्म 15 अक्टूबर 1931 को तमिलनाडु के रामेश्वरम में एक साधारण परिवार में हुआ था। बचपन से ही वे बहुत मेहनती और जिज्ञासु थे।

अब्दुल कलाम जी को "मिसाइल मैन ऑफ इंडिया" कहा जाता है क्योंकि उन्होंने भारत के कई महत्वपूर्ण मिसाइलों और अंतरिक्ष कार्यक्रमों में बड़ा योगदान दिया। उन्होंने पोखरण परमाणु परीक्षण में भी महत्वपूर्ण भूमिका निभाई, जिससे भारत विश्व में एक मजबूत देश के रूप में उभरा। 2002 में वे भारत के राष्ट्रपति बने और अपने कार्यकाल में वे विद्यार्थियों और युवाओं को सपने देखने और उन्हें पूरा करने की प्रेरणा देते रहे।

अब्दुल कलाम साहब कहते थे कि "सपने वो नहीं जो हम सोते समय देखते हैं, सपने वो हैं जो हमें सोने नहीं देते।" डॉ. ए. पी. जे. अब्दुल कलाम हमेशा युवा पीढ़ी के प्रेरणास्रोत बने रहेंगे।

1) कलाम जी का जन्म कब और कहाँ हुआ था?

2) कलाम जी को किस नाम से जाना जाता है?

3) वे किस क्षेत्र से जुड़े थे?

4) कलाम जी किस पद पर 2002 में आसीन हुए थे?

5) अब्दुल कलाम साहब क्या कहते थे ?

दिए गए गद्यांश को पढ़कर पूछे गए प्रश्नों के सही उत्तर का चुनाव कीजिए ।

(5M)

यह पत्र मैं तुम्हें काजीरंगा राष्ट्रीय उद्यान से लिख रहा हूँ। काजीरंगा उद्यान असम में ब्रह्मपुत्र नदी के तट पर स्थित है यहाँ विभिन्न प्रकार के पशु और पक्षी है। आज सुबह ही हम हाथियों पर चढ़कर उद्यान देखने गए। इसके लिए हमें बहुत सवेरे उठना पड़ा- तब सूरज भी नहीं नहीं निकला था।

उद्यान में सैकड़ों पशु थे। हिरण और जंगली भैंसों के कई झुंड आराम से घास चल रहे थे। उनमें कुछ एक सींग वाले गैंडे भी थे। इसी पशु के कारण काजीरंगा पूरे संसार में प्रसिद्ध हो गया है।

हिरणों और भैंसों ने हमें संदेह की दृष्टि से देखा और अलग-अलग हट गए। पर गैंडे वही जमे रहे।

हमने एक सींग वाला गैंडा पहली बार देखा। यह हाथी के बाद भारत का सबसे बड़ा पशु है। इसको इंडियन राइनो (भारतीय गैंडा) भी कहते हैं यह केवल भारत और नेपाल के जंगलों में पाया जाता है।

6. यह पत्र कहां से लिखा गया है?

7. काजीरंगा उद्यान असम के किस नदी के तट पर स्थित है?

8. किस पशु और उसके कौन से विशेषता के कारण काजीरंगा पूरे संसार में प्रसिद्ध है?

9. किस जानवर को इंडियन राइनो भी कहते हैं?

10. इंडियन राइनो भारत के किस भाग के जंगलों में पाया जाता है?

लेखन (05)

11) भारतीय गैंडों की संख्या क्यों घट रही है ?

(1M)

12. लेखक के अनुसार, गुल्ली- डंडा और विलायती खेलों में क्या अंतर है?

(2M)

13. चित्रकार ने शेर से बचने के लिए क्या किया?

(2M)

व्याकरण (05)

1. निम्न में से कौन सा शब्द संज्ञा है?

(१) दिखाना

(२) बाज़ार

(३) प्राथमिक

(४) तैयार

2. सही मुहावरे का विकल्प चुनिए:

“उसने सबके सामने बहुत रोना-धोना किया, लेकिन सब जानते थे कि वह ____ रहा था।”

(१) मन लगाकर पढ़

(२) मगरमच्छ के आँसू बहा

(३) भूख लग

3: उचित शब्द चुनकर खाली स्थान भरिए-

सूरज रोज सवेरे _____ से निकलता है। (पूरब/ पश्चिम)

4. रेखांकित शब्द का विलोम शब्द लिखकर वाक्य पूरा करो।

उसने मारा परन्तु मैंने उसे _____।

इस जटिल समस्या का हल _____ है।

5. निम्न शब्दों के विशेषण लिखिए

_____ घर

_____ साल

सृजनात्मक लेखन (05)

हंस वाली घटना के बाद सिद्धार्थ, देवदत्त को सन्देश देना चाहते हैं। आपके अनुसार सिद्धार्थ ने देवदत्त को क्या संदेश लिखकर भेजा होगा | या (or) आप कैबुल लमजाओ पार्क घूमने गए। वहाँ के अनुभव को 5-6 वाक्यों में लिखिए।

वर्तनी/ शब्दावली (05)

1. सही वर्तनी वाले शब्द को चुनकर गोला लगाइए।

प्रसंशा

प्रशंसा

प्रसंसा

2. रिक्त स्थान भरिए (सही वर्तनी लिखिए):

“हम _____ में पढ़ाई करते हैं।”

(विद्यालय / विदयालय)


3. पर्यायवाची शब्द लिखिए:

(१) खुशी: _____

4. अनुस्वार और चंद्रबिंदु वाले एक-एक शब्द लिखिए।

5. वाक्यांशों के लिए एक शब्द लिखिए:

(१) जो प्रशंसा के योग्य हो → _____

 <p>तत् त्वं पूषन् अपावृणु केन्द्रीय विद्यालय संगठन</p>	PM SHRI KENDRIYA VIDYALAYA MALKAPURAM PERIODIC TEST II (2025 -26) SUBJECT : MATHS	
	NAME: _____ CLASS : V DATE : _____	ROLL NO. : _____ SECTION: _____ TIME : 60 MINS

COMPETENCIES	KNOWLEDGE & UNDERSTANDING (10)	ABILITY TO COMPUTE (10)	PROBLEM SOLVING ABILITY (10)	TOTAL (30)
MARKS				

Sign of Invigilator: _____

Sign of Evaluator: _____

KNOWLEDGE AND UNDERSTANDING (10)

VSA (2 X 1 = 2)

1. Fill in the blanks -

- a) 1 cm = _____ millimeters.
 b) 1000 cm = _____ metres.
 c) 1 gram = _____ milligram.
 d) 1 quintal = _____ kg.

SA (2 X 2 = 4)

2. Compare the weights & measurements using <, =, > signs.

- (a) 20 g. _____ 200 mg
 (b) 1 kg 200 metres _____ 1200 g
 (c) 2,010 mg. _____ 2 g 100 mg
 (d) 100 millimetres _____ 1 metre

3. Which Shape Am I?

(A) All my angles are right angles, but all My sides are not equal.


- (1) Square. (2) Parallelogram. (3) Rectangle

(B) All my sides are equal, but all my angles are not

- (1) Square. (2) Rhombus. (3) Rectangle

LA (4 x 1= 4)

4. Observe the following picture carefully and write the answer (World's tallest statue):-



(A) Which one is the **tallest** statue

(B) Which one is the **shortest** statue?

(C) What is the **difference** between the height of the tallest statue in the world and the statue of Liberty?

(C) Identify the statues whose heights have the **largest** difference.

ABILITY TO COMPUTE (10)

VSA (2 X 1= 2)

5. Calculate the following-

a) $75 \times 75 =$ _____

b) $200 \times 30 =$ _____

c) 4 kg 350 g = _____ gram

d) $216 \div 6 =$ _____

SA (2 X 2 = 4)

6. Solve the following:

Litre	Milliliters	Litre	milliliters
7	4 3 2	7	4 3 2
+ 2	5 3 8	- 2	5 3 8
-----		-----	
-----		-----	

7. Use your understanding to fill in the blanks appropriately

(A) 89 mm = _____ cm _____ m

(B) 32 km 767 m = _____ m

(C) 5 kg 250 g + 750 g = _____ gram

(D) 2000 milligrams + 3 grams = _____ grams

LA (1 x 4 = 4)

8. The cost of some grocery items is given in required quantity in the following table. Find the total cost of each item.

items	Cost of 1 kg	Weight	Total cost
Rice	60	12 kg 500 g	
Flour	40	7 kg 250 g	
Sugar	45	5 kg	
Chana Dal	70	3 kg 500 g	
Besan	60	4 kg	
Jaggery	50	1 kg 400 g	

PROBLEM SOLVING ABILITY (10)

VSA (2 x 1 = 2)

9. Akshita jogs 4 kilometres every day. How many kilometres will she jog in 31 days?

10. 4 kg 500 g of sand is used from a sack weighing 10 kg. How much sand is left in the sack?

SA (2 X 2 = 4)

11 . A school has received 36 boxes of books with 48 books in each box. How many total books did the school receive in the boxes?

12. Anjali buys 15 bulbs and 12 tube lights from Sudha Electricals. Each bulb costs ₹25 and each tube light costs ₹34. How much money should Anjali give to the shopkeeper?

LA (1x4 = 4)

13. The longest train journey in India is by The Vivek Express which runs from Dibrugarh in Assam to Kanyakumari in Tamil Nadu. Look at the stations on the route shown in the table below and answer the questions.

Station number	Name of the station	Distance from Dibrugarh
9	Dimapur	308
14	Guwahati	558
22	Jalpaiguri Road	987
34	Bhubaneswar	2010
40	Visakhapatnam	2455
45	Vijayawada JN	2800
55	Coimbatore JN	3699
65	Kanyakumari	4199

1. The total length of the route from Dibrugarh to Kanyakumari is _____ km.
2. The distance between Vijayawada and Jalpaiguri road is _____.
3. Distance between Vijayawada and Visakhapatnam is _____.
4. Which two stations are farther apart—Guwahati and Dimapur or Bhubaneswar and Jalpaiguri Road?



PM SHRI KENDRIYA VIDYALAYA MALKAPURAM

PERIODIC TEST – 2 (2025-2026)

CLASS – V / _____

TIME – 1 Hour 30 Min

SUBJECT – MATHEMATICS

DATE- _____

MARKS – 30

NAME OF THE STUDENT - _____ ROLL NO . _____

COMPETENCIES	KNOWLEDGE & UNDERSTANDING (10)	ABILITY TO COMPUTE (10)	PROBLEM SOLVING ABILITY (10)	TOTAL (30)
MARKS				

INVIGILATOR'S SIGN _____

EXAMINER'S SIGN _____

KNOWLEDGE & UNDERSTANDING [10M]

Fill in the blanks. (VSA)

2 x 1 = 2M

1) Tick the Acute angle of the following ()

- a) 60° b) 90° c) 190° d) 200°

2) Which pair of number add to make more than 500? ()

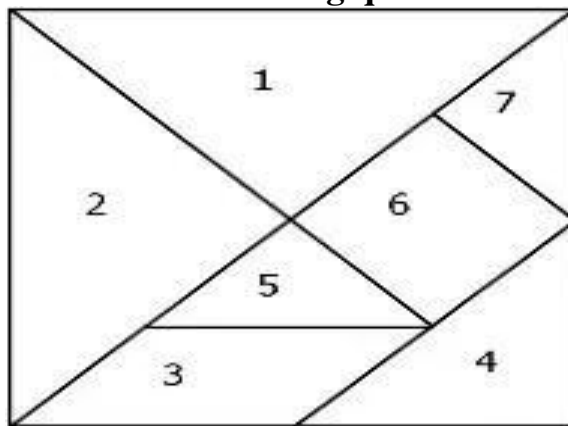
- (a) 152 and 241 (b) 99 and 229 (c) 321 and 192 (d) 401 and 91

Short Answer

Answer the following questions.

2 x 2 = 4M

Look at the Tangram and answer the following questions.



1. How many shapes are parallelograms? Write the numbers. _____

2. Which two pieces when taken together, will make a square? _____

3. How many right angled triangles are there in the tangram? _____

2) Compare the weights using $<$, $=$, $>$ signs.

1 kg 400 g _____ 1700 kg

2 kg 600 g _____ 2 kg 60 g

1 kg 45 g _____ 2045 g

700 g + 3000 g _____ 3 kg + 700 g

Long Answer 1 x 4 = 4M

Given below are the land areas of the four largest countries of the world. study the list and answer the question below.

COUNTRY	Approximate area in Sq.km.
China	95,96,960
USA	96,29,091
Russia	1,70,75,200
Canada	99,84,670

a) Which is the largest country in the above table?

b) What is the difference between the largest and smallest country in the above table?

c) What is the place value and face value of the digit 8 in the area of Canada?

d) What is the area of the smallest country in the above table?

ABILITY TO COMPUTE [10m] VSA

2 x 1 = 2M

1. 1 Multiply (Doubling and Halving)

14 x 3 →	7 x 6	=
48 x 5 →	24 x 10	= _____
25 x 12 →	50 x 6	= _____
34 x 5 →	____ x ____	= _____
45 x 16 = →	____ x ____	= _____

2. A milkman has 5 litres of milk. He sells 3 litres 250 ml. How much milk is left with him now?

Short Answer

2 x 2 = 4M

1. A farmer planted 480 trees in 15 rows. If equal number of trees are planted in each row, how many trees are there in one row?

2. Tina bought 7 metre 50 cm long cloth from a shop. She used 2 metre 80 cm from it to make a table cloth. How much cloth is left with her now?

Long Answer

1 x 4 = 4M

Raghuram opened his wallet. He found 6 coins of Rs.1, 7 coins of Rs.2 and 4 coins of Rs.5. He wants to buy a storybook worth Rs.29. What possible combination of coins can he use to pay the exact amount?


PROBLEM SOLVING ABILITY [10m] VSA

2 x 1 = 2M

1. Madhav walks 5 rounds around a plot of 70m long and 50m broad.

Find the total distance covered by him?

- a) 2800m
- b) 600m
- c) 280m
- d) 1200m



2. A family of 4 produces around 35 kg of kitchen waste in a month. How much waste will the family produce in a year?

Short Answer**2 x 2 = 4M**

1 The following newspapers are distributed in that city: -

English	No.of papers distributed	Hindi No.of papers	No.of papers distributed
The Times Of India	20,000	Dainik Jagran	17,600
The Hindustan Times	18,000	Bhaskar	15,500
The Hindu	15,500	Punjab Kesari	13,900

a) **What is the total number of English newspapers distributed in the city?**

b) **What is the total number of Hindi newspapers distributed in the city?**

c) **What is the difference between Hindi newspapers and English newspapers in the city?**

2 The owner of an electric store has decided to distribute Rs.5500 equally amongst 5 of his employees as a Diwali gift. What amount will each employee get?

Long Answer**1 x 4 = 4M**

In a test match between India and West Indies, the Indian team hit twenty-four 4s and eighteen 6s across the two innings. How many runs were scored in 4s and 6s each? 234 runs were made by running between the wickets. If 23 runs were extras, how many runs were scored by Indian team in the two innings?



PM SHRI KENDRIYA VIDYALAYA MALKAPURAM
PERIODIC TEST II (2025 -26) Sample paper
SUBJECT : MATHS

NAME: _____

ROLL NO. : _____

CLASS : V

SECTION: _____

DATE : _____

TIME : 60 MINS

COMPETENCIES	KNOWLEDGE & UNDERSTANDING (10)	ABILITY TO COMPUTE (10)	PROBLEM SOLVING ABILITY (10)	TOTAL (30)
MARKS				

Sign of Invigilator: _____

Sign of Evaluator: _____

KNOWLEDGE AND UNDERSTANDING (10)

1. Fill in the blanks -

(2 X 1=2)

198 – 98 = 100, then,

100 + _____ = 198.

198 – _____ = 98

2. Identify the appropriate units for measuring each of the following.

Quantity	Unit of measurement Metre (m) or centimetre (cm)
Height of India Gate	42
Length of a handkerchief	40
Depth of a well	50
Length of a mobile phone	13
Length of an elephant's trunk	2
Distance between two buttons on a shirt	5

3. Which Shape Am I?


(A) All my angles are right angles, but all My sides are not equal.

(1) Square. (2) Parallelogram. (3) Rectangle

(B) All my sides are equal, but all my angles are not

(1) Square. (2) Rhombus. (3) Rectangle

4. Observe the following picture carefully and write the answer (World's tallest statue):- (4 x 1= 4)



(A) Which one is the **tallest** statue

(B) Which one is the **shortest** statue?

(C) What is the **difference** between the height of the tallest statue in the world and the statue of Liberty?

(D) Identify the statues whose heights have the **largest** difference.

ABILITY TO COMPUTE (10)

5. Calculate the following-

(2 X 1= 2)

a) $75 \times 75 =$ _____

b) $200 \times 30 =$ _____

c) $4 \text{ kg } 350 \text{ g} =$ _____ gram

d) $216 \div 6 =$ _____

6. Solve the following:

(2)

	Litre	Milliliters
	7	4 3 2
+	2	5 3 8

	Litre	milliliters
	7	4 3 2
-	2	5 3 8

7. Use your understanding to fill in the blanks appropriately .

(2)

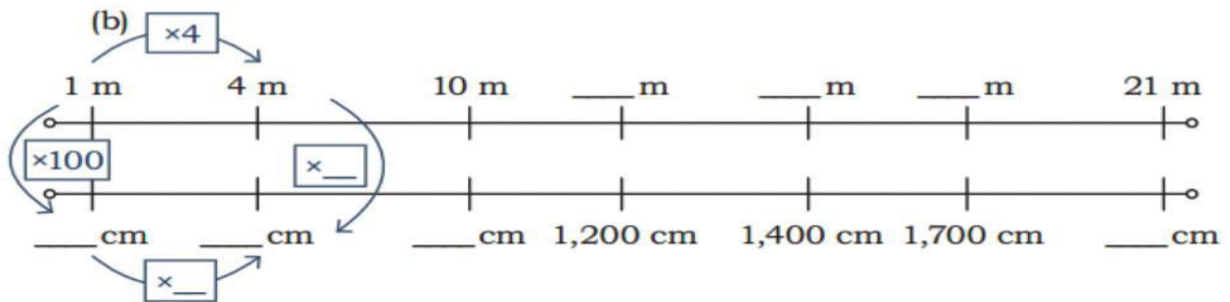
(A) 89 mm = _____ cm _____ m

(B) 32 km 767 m = _____ m

(C) $5 \text{ kg } 250 \text{ g} + 750 \text{ g} =$ _____ gram

(D) 2000 milligrams + 3 grams = _____ grams

8. Fill in the blanks appropriately in the double number lines given below:



PROBLEM SOLVING ABILITY (10)

9. Akshita jogs 4 kilometres every day. How many kilometres will she jog in 31 days? (1)

10. 4 kg 500 g of sand is used from a sack weighing 10 kg. How much sand is left in the sack?(1)

12. Rani has two red-coloured ribbon rolls, one of length 3 m 75 cm and another 2 m 25 cm long.

How much ribbon does she have? (2)

13. The longest train journey in India is by The Vivek Express which runs from Dibrugarh in Assam to Kanyakumari in Tamil Nadu. Look at the stations on the route shown in the table below and answer the questions. (4)

Station number	Name of the station	Distance from Dibrugarh
9	Dimapur	308
14	Guwahati	558
22	Jalpaiguri Road	987
34	Bhubaneswar	2010
40	Visakhapatnam	2455
45	Vijayawada JN	2800
55	Coimbatore JN	3699
65	Kanyakumari	4199

1. The total length of the route from Dibrugarh to Kanyakumari is _____ km.
2. The distance between Vijayawada and Jalpaiguri road is _____.
3. Distance between Vijayawada and Visakhapatnam is _____.
4. Which two stations are farther apart—Guwahati and Dimapur or Bhubaneswar and Jalpaiguri Road?



KENDRIYA VIDYALAYA MALKAPURAM

PERIODIC TEST – 2 (2025-26)

CLASS – V / _____

TIME – 1 Hour

SUBJECT – MATHEMATICS

DATE- _____

MARKS – 30

NAME OF THE STUDENT - _____ ROLL NO . _____

COMPETENCIES	KNOWLEDGE & UNDERSTANDING (10)	ABILITY TO COMPUTE (10)	PROBLEM SOLVING ABILITY (10)	TOTAL (30)
MARKS				

INVIGILATOR'S SIGN

EXAMINER'S SIGN

KNOWLEDGE & UNDERSTANDING (10-M)

Q.1. Tick (✓) the correct answer

1x2= 2

(i) How many grams are there in $\frac{1}{2}$ kg ?

(a) 100 grams (b) 150 grams. (c) 250 grams (d) 500 grams (e) 750 grams

(ii) How many millilitres are there in 4 litres ?

(a) 40 ml (b) 400 ml (c) 4000 ml (d) 40000 ml

Q.2. Compare the following quantities using $<$, $>$ or $=$.

1x2

(a) 7,200 ml..... (7 litres +200 ml)

(b) 9,850 ml9,580 ml.

Q.3. Tick (✓) the correct word.

1x2

(a) All faces of a cube are (rectangles / squares).

(b) A cube has (6 / 8) faces.

Q.4. Draw a circle and draw a diameter of the circle. Find the length of the diameter also. (2)

Ans.

Q.5. Write the two division facts of the following multiplication fact: (2)

$6 \times 8 = 48$, then:

(i) _____ \div _____ = _____

(ii) _____ \div _____ = _____.

ABILITY TO COMPUTE (10)

Q.6. Solve: 1x2= 2

(a) $4096 \div 8$

Ans.

(b) 94×7

Ans.

Q.7. Complete the pattern and fill in the place value chart. 2

Problem	H	T	O
$810 \div 10$			
$7200 \div 100$			

Q.8. Multiply by halving one number and doubling the other. 2

14×5

Q.9. Multiply by using grid method.

(4)

$$43 \times 18$$

X		

PROBLEM SOLVING ABILITY (10)

Q.10. Which of the following letters does not have the vertical line of symmetry?

1

(i) M

(ii) H

(iii) E

(iv) V

Q.11. Rahul got 90 hundred- rupee notes from the bank. How much money did he get?

1

Ans.

Q.12. A rope of 400 meters is cut into 20 equal pieces. What is the length of each piece?

2

Ans.

Q.13. A pizza has a diameter of 12 inches. What is the length of its radius?

2

Ans.

Q.14. Draw the lines of symmetry in the following shapes.

4

