

Kendriya Vidyalaya No - 1 (Shift - 1), Tirupati

Autumn Break Holiday Homework - 2024

Class – I

Subject – Mathematics

Name Of The Student:-

Section:-

Roll No :-

Subject:-Mathematics.

Class:-1

Worksheet (For class 1 Students)

Q 1- Write in increasing order -

5, 3, 1, 2, 4



7, 6, 9, 8, 10



4, 6, 3, 5, 7



10, 6, 9, 7, 8



12, 14, 11, 13, 15



Q2-Write in decreasing order -

Q 45, 34, 7, 49, 43

| | | | | |
|--|--|--|--|--|
| | | | | |
|--|--|--|--|--|

Q 50, 35, 29, 5, 41

| | | | | |
|--|--|--|--|--|
| | | | | |
|--|--|--|--|--|





Q 22, 12, 42, 2, 32

| | | | | |
|--|--|--|--|--|
| | | | | |
|--|--|--|--|--|

Q 43, 13, 31, 34, 30

| | | | | |
|--|--|--|--|--|
| | | | | |
|--|--|--|--|--|

Q3- Write the number that comes after -



Q 4- Observe the following pictures thoroughly and then write tens and ones-

| | | |
|--|---------------------------|---------------------------|
| | 25 Twenty Five | Tens Ones |
| | 26 Twenty Six | Tens Ones |
| | 27 Twenty Seven | Tens Ones |

Q5 Write down missing number s

1. 1.....3.....5.....7.....10

2. 11.....14.....17.....20

3. 21.....24.....30

3. 31.....35.....40
4. 41.....44.....46.....50
5. 51.....56.....60
6. 61.....67.....70
7. 71.....76.....80
8. 81.....84.....90
9. 92.....94.....96.....100

Q6- Fill in the blanks with the (+) or (-) sign to get the answers –

(i) $13 \square 15 = 28$. (ii) $32 \square 27 = 59$. (iii) $45 \square 48 = 93$

Q 8- Solve the following-

(i) $12 + 15 = \square$ (ii) $27 + 35 = \square$. (iii) $42 + 57 = \square$

Match the following

- | | |
|---------------|----|
| 1. 2 + 3 + 2. | 08 |
| 2. 5 + 3 + 3. | 09 |
| 3. 4 + 4 + 4 | 11 |
| 4. 5 + 1 + 3. | 07 |
| 5. 3 + 3 + 2. | 12 |

Class – I

Subject – EVS

WORKSHEET-1

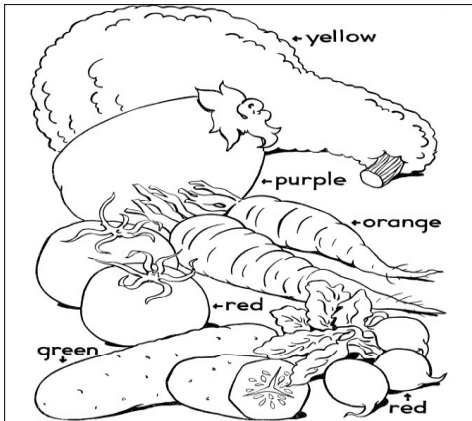
CLASS – 1

SUBJECT- EVS


Q1. Put the fruits and vegetables in the correct box .
Mango, cabbage, Banana, Carrot, Guava, Potato, Grapes, Tomato.

| | FRUITS | VEGETABLES |
|---|--------|------------|
| A | _____ | _____ |
| B | _____ | _____ |
| C | _____ | _____ |

D _____

Q2. Colour the given picture.**Q3. Circle the correct answer.**

- (a) We eat breakfast every morning / evening.
- (b) We eat lunch / dinner at night.
- (c) We should always eat healthy / unhealthy food.
- (d) We wash our hands/ legs after eating our meal.

Q4. Draw the picture of your favourite fruit and colour it.**WORKSHEET-2****Q. Say Yes or No.**

- A. Wash your hands before and after eating. _____
- B. too much junk food is bad for health. _____
- C. we should drink dirty water. _____
- D. Wash fruits before eating. _____

Q6. Draw the picture of your favourite vegetable.

Q. Fill in the blanks –

see - smell - hear - touch - taste

I can _____ with my eyes.



I can _____ with my ears.



I can _____ with my hands.



I can _____ with my nose.



I can _____ with my tongue.



Q.4 Write 2 examples of each type of animals.

Wild animals – 1. _____ 2. _____

Pet animals - 1. _____ 2. _____

Water animals- 1. _____ 2. _____

Domestic animals- 1. _____ 2. _____

Class – I

Subject – ENGLISH

NAME : _____

CLASS : I ROLL No: _____

SUBJECT: ENGLISH

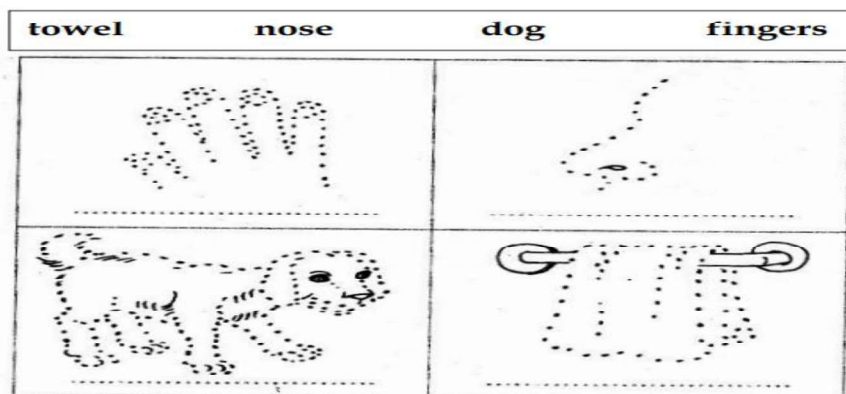
WORK SHEET 1

A. Complete the following words by supplying suitable vowel ?

- | | |
|------------|---------------|
| 1. s _ _ p | 4. sh _ w _ r |
| 2. br _ sh | 5. s _ nk |
| 3. t _ _ l | 6. h _ ng _ r |



B. Join the dots of the following pictures and write their names:



Class – I

Subject – HINDI

ऑटम ब्रेक होमवर्क 2024-25

नाम : _____

कक्षा : I

अनुक्रमांक : _____

विषय : हिन्दी

वर्कशीट 1

अ. चित्र को देखकर पहला वर्ण लिखिए।



आ. वर्णमाला लिखिए।

इ. "ई" की मात्रा लगाकर शब्द बनाओ

राख_

प_ला

धन_

घड_

द_पक

दान_

दह_

च_ल

मछल_

कल_

नद_

रान_

हाथ_

ज_त

द_या

लड़_

बिल्ल_

चाच_

अभ_

ज_वन

ई. जानवर के नाम लिखिए।



Class – II

Subject – Mathematics

SUBJECT – MATHEMATICS. CLASS 2

STUDENT NAME..... SECTION.....

1. Write the number that comes before.

- A)45 B).....56
 C).....33. D).....77

2. Write the number that comes after .

- A) 71..... B) 84.....
 C) 56..... D) 99.....

3. Write the number in increasing order.

- A) 20, 78, 37, 21, 56 I
 B) 98,
 32, 12, 57, 39 I

4. Write the following number name of words A) 20

--

- B) 13--.....
 C) 16---.....
 D) 18--.....

5. Circle ♦ the smallest number .a)

43 72 42. 14.

b) 39 54 89. 15

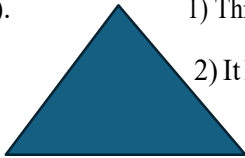
WORKSHEET 2

5. Recognise the shape and fill in the blanks. A)




- 1) This is a
- 2) It hasSides .

B).



- 1) This is a
- 2) It has.....sides and..... corners.



1) This is a

2) It hasCorners.

D).



- 1) This is aI
- 2). All its sides are..... In length.

6. Extend the following picture patterns.

| | | | | | |
|--|--|--|--|-------|-------|
| | | | | | |
| | | | | | |
| | | | | | |
| | | | | | |

7. Extend the following number patternsA) 3

, 6, 9 I

B) 8, 16, 24 I

WORKSHEET 3

1. Draw lines according to the given name.

A) Curved lineI

B) Horizontal or sleeping line I

C) Slanting line..... I

D) Standing line or vertical lineI

3. Count the number of lines in the following figure.



a) Standing lines _____

b) Sleeping lines _____

c) Slanting lines _____



a) Standing lines _____

b) Sleeping lines _____

c) Slanting lines _____



a) Standing lines _____

b) Sleeping lines _____

c) Slanting lines _____

stoday.com

WORKSHEET 4

1. Find the sum.

2 Digits Addition

| | | | | |
|----------------------|----------------------|----------------------|----------------------|----------------------|
| 66 | 34 | 28 | 58 | 12 |
| +25 | +48 | +47 | +25 | +28 |
| <input type="text"/> | <input type="text"/> | <input type="text"/> | <input type="text"/> | <input type="text"/> |

| | | | | |
|----------------------|----------------------|----------------------|----------------------|----------------------|
| 47 | 37 | 57 | 48 | 34 |
| +49 | +28 | +48 | +13 | +47 |
| <input type="text"/> | <input type="text"/> | <input type="text"/> | <input type="text"/> | <input type="text"/> |

| | | | | |
|----------------------|----------------------|----------------------|----------------------|----------------------|
| 56 | 38 | 17 | 82 | 35 |
| +27 | +42 | +54 | +18 | +25 |
| <input type="text"/> | <input type="text"/> | <input type="text"/> | <input type="text"/> | <input type="text"/> |

| | | | | |
|----------------------|----------------------|----------------------|----------------------|----------------------|
| 27 | 62 | 13 | 76 | 18 |
| +23 | +39 | +27 | +19 | +36 |
| <input type="text"/> | <input type="text"/> | <input type="text"/> | <input type="text"/> | <input type="text"/> |

2. Write the tables 2 to 10 in note book 1 time.

Make 3D figures (Cube, Cuboid, Sphere, Cylinder, Cone) from use paper

**KENDRIYA VIDYALAYA, NO.1, TIRUPATHI
WORKSHEET –3**

CLASS:2 SUBJECT: E.V.S AUTUMN BREAK(2024-25)

Name of the Student: _____ Roll no:

PAGE:1

OBSERVE THE PICTURES CAREFULLY AND FILL THE BLANKS



1. _____ 2. _____
3. _____




4. _____ 5. _____

KENDRIYA VIDYALAYA, NO.1, TIRUPATHI
WORKSHEET -1 SUBJECT: E.V.S
CLASS: 2 Autumn break(2024-25)

Page:1

Name of the Student: _____ Roll no:

I. OBSERVE THE PICTURES GIVEN BELOW AND FILL THE BLANKS



1. _____ 2. _____
3. _____



4. _____ 5. _____

WORKHEET -2

Page:
2

I. MATCH THE FOLLOWING

- | | |
|-----------|-------------|
| 1. FOOD | [A] RED |
| 2. ANIMAL | [B] CAR |
| 3. COLOUR | [C] TIGER |
| 4. TOY | [D] DOG |
| 5. PET | [E] DOSA |

II. REWRITE CORRECTLY

1. TMES - _____
2. RFTIU - _____
3. TORO - _____
4. FEAL - _____
5. DBU - _____

III. FILL IN THE BLANKS

1. NAME ONE SOURCE OF WATER - _____
2. A WATER SOURCE THAT HAS SALTY - _____
3. WRITE TWO USES OF WATER - _____

II. DRAW A DIAGRAM OF WATERCYCLE

PAGE-2

I. MATCH THE FOLLOWING

- | | |
|-----------|--------------|
| 1. STABLE | [A] LION |
| 2. WATER | [B] HORSE |
| 3. NEST | [C] SPIDER |
| 4. FOREST | [D] FISH |
| 5. WEB | [E] BIRD |

II. WRITE THE NAMES OF THEIR SHELTER
10M

- | | |
|--------------|---------|
| 1 BIRDS | - _____ |
| 2 HUMANBEING | - _____ |
| 3. DOG | - _____ |
| 4. MOUSE | - _____ |
| 5. TIGER | - _____ |

WRITE TRUE OR FALSE

- | | |
|-------------------------|-------|
| 1. FISH LIVES ON TREE | [] |
| 2. LION LIVES IN JUNGLE | [] |
| 3. HORSE LIVES IN WATER | [] |
| 4. BIRDS LIVES IN NEST | [] |
| 5. DOG LIVES IN JUNGLE | [] |

II. DRAW A DIAGRAM OF HOUSE

Class – II

Subject – ENGLISH

NAME : _____

CLASS : II

ROLL No: _____

WORK SHEET 1

1. Read the story then answer the questions :

Jan has a new bike. Her new bike is red. It has an orange flag on the back. Jan can ride her bike fast. She rides her bike after school. She goes to Allison's house and then she goes back home.

a. What does Jan have?

b. What colour is Jan's new bike ?

c. Where does Jan go on her bike ?

d. Find and write the opposite from the passage

(i) old X _____

(ii) slow X _____

(iii) out X _____

(iv) come X _____


e. Write the past tense of

(i) go - _____

(ii) ride - _____.

2. Make a new word by combining the letters in the hexagon.

The central letter "I" should be kept common everytime.



WORK SHEET 2

3. In each of the sentences below, write a pronoun from the word box to replace the nouns.

| |
|---------------------|
| It, He , She , they |
|---------------------|

a. James is having a birthday party today.

b. The balloons are flying high in the backyard.

c. The cake is chocolate with vanilla frosting.

d. Sarah gives James a collection of toy soldiers.

e. The party guests have a great time eating cake.

4.



This is an outline of your father. Add his shirt with buttons, eyes , nose , mouth , watch, pant , glasses , moustache, etc. Write each word in the given place. Colour the picture and write his name.

| | | |
|-------|-------|-------|
| _____ | _____ | _____ |
| _____ | _____ | _____ |
| _____ | _____ | _____ |

My father name is _____

D. Match the paired words :

- | | | |
|-----------|-----|-----------|
| 1. cup | | a] ball |
| 2. bat | | b] pant |
| 3. table | and | c] needle |
| 4. shirt | | d] saucer |
| 5. thread | | e] socks |
| 6. shoes | | f] chair |

Class – II

Subject – HINDI

नाम : _____

कक्षा : II

अनुक्रमांक : _____

विषय : हिन्दी

वर्कशीट 1

1) दो अक्षर वाले शब्द पढो व लिखो |

- न+ल= नल _____
- च+ल= _____
- घ+र= _____
- प+र= _____
- ट+ब= _____
- ब+स= _____
- न+ग= _____
- र+थ= _____
- क+प= _____
- फ+ल= _____

2) तीन अक्षरों वाले शब्द पढो व लिखो |

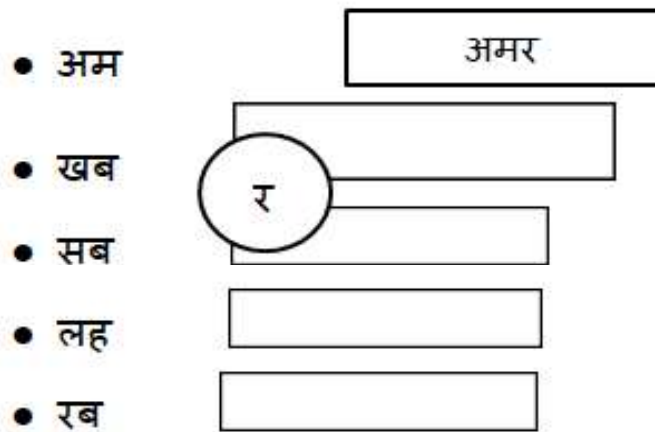
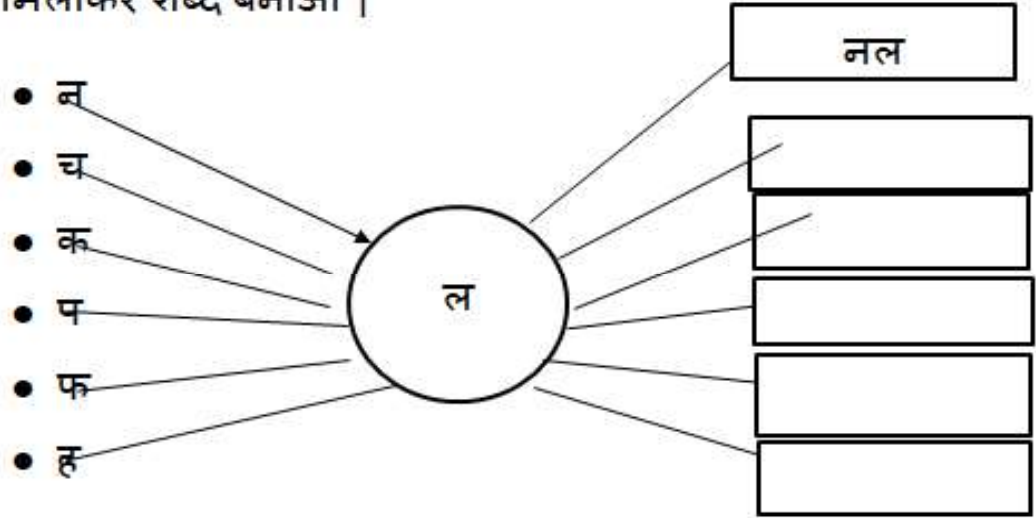
- अ+म+र= अमर _____
- ग+ग+न= _____
- अ+ट+ल= _____
- प+ह+ल= _____
- च+ह+ल= _____
- क+म+ल= _____
- क+ल+श= _____
- प+व+न= _____
- न+र+म= _____
- च+र+म= _____

वर्कशीट 2

3) चार अक्षरों वाले शब्द पढो व लिखो |

- ब+र+त+न= बरतन _____
- अ+च+क+न= _____
- श+र+ब+त= _____
- त+म+त+म= _____
- ह+र+द+म= _____
- म+त+ल+ब= _____
- ज+ग+म+ग= _____
- ख+ट+ख+ट= _____
- क+ट+ह+ल= _____
- ग+र+द+न= _____

4) अक्षरों को मिलाकर शब्द बनाओ |



वर्कशीट 3

5) आ (T) की मात्रा वाले शब्द

- अ+T+म= आम
- क+T+म=
- र+T+म=
- च+T+ल=
- ल+T+ल=
- घ+T+स=
- त+T+ल=
- प+T+ल=
- म+T+ल=
- ज+T+ल=
- ख+T+ल=

6) खाली जगह पर आ (T) की मात्रा भरो |

- म+ _ T ल+T _ = माला
- ज+ _ ल+ _ =
- ज+ _ न+ _ =
- ख+ _ न+ _ =
- अ+ _ न+ _ =
- क+ _ ल+ _ =
- त+ _ ल+ _ =
- ज+ _ त+ _ =
- म+ _ त+ _ =
- प+ _ प+ _ =
- च+ _ च+ _ =

वर्कशीट 4

7) आ की मात्रा पहचानो, पढो व लिखो |

- ताला / ताली _____
- लाल / लाली _____
- काला / सफ़ेद _____
- खाना / रोटी _____
- दादा / जाते _____
- होते / हरा _____
- मिली / माला _____
- नीर / राजा _____
- जाता / चित्र _____
- पढना / कलम _____

8) वाक्य पढो व लिखो |

- i. फल चख _____
 ii. मत कर _____
 iii. यह पढ़ _____
 iv. घर चल _____
 v. छत पर _____
 vi. नल भर _____
 vii. सर पर _____
 viii. डर मत _____
 ix. यह कर _____
 अब चल

Class – III

Subject – Mathematics

Name of the student _____ Roll no _____ Section _____

I. Match the following

- a) Tiger I) 7 letters
 b) Elephant ii) 6 letters
 c) Monkeys iii) 5 letters
 d) Snakes iv) 8 letters

II. Match the following

- a) Sixty three I) 7 letters
 b) seventy ii) 10 letters
 c) Eighty Nine iii) 9 letters
 d) Ninety six iv) 8 letters
 e) Fifty six v) 10 letters

III Draw the following 3D Shapes

Cube, Cylinder, Cone,

V) Complete the following number sentences

- a) $23 + \underline{\quad} = 35$ d) $47 + \underline{\quad} = 23 + 41$
 b) $48 - \underline{\quad} = 29$ e) $86 - \underline{\quad} = 52 + 19$
 c) $\underline{\quad} + 17 = 56$ f) $\underline{\quad} - 28 = 45 + 14$

V) Look at the picture of a house made with Shapes . Identify the shapes in the picture the names.

VI. Teji made her roll number 43 using number cards jojo made her roll number using 17 number cards.what is difference between the number of letters in their roll number names ?

VII Match the following shapes with their characteristics

- | | |
|-------------|----------------------------|
| a) Cube | i) Has a circular base |
| b) Cylinder | ii) Has all sides equal |
| c) Cone | iii) Has rectangular faces |
| d) Cuboid | iv) Has a pointed top |

VIII Fill in the missing number in this magic square so that each row column and diagonal add upto 15

| | | |
|---|---|---|
| 4 | 9 | |
| 3 | | 7 |
| | | |

IX Look at the dotted grid below and connect the dots to make

- I) 2 Squares
- ii) 3 triangles
- iii) 1 rectangle

X Write the number in hundreds tens and ones place

- I) 145 1 Hundreds,4 tens,5 ones
- ii) 209

iii) 135

iv) 167

XII Raju had 48 sheep and 28 goats. If he made marks on the wall for each animal and left for grazing how many marks would be on the wall ?

Ans

XIII Sara has a box of 20 building blocks 8 cubes ,6 cylinders and the rest are cones. How many cones does Sara have in her box of building blocks?

Ans

XIV Match the following

- | | |
|-----------|-------|
| i) 15+3 | a) 8 |
| ii) 19-14 | b) 20 |
| iii) 7+13 | c) 18 |
| iv) 10-2 | d) 5 |

XV Draw and name of the following shapes

a) A shape with 4 equal sides

b) A shape with 3 corners

XVI Write the following numbers in words

a) 144 _____

b) 178 _____

c) 199 _____

d) 162 _____

XVII Match the following

- | | |
|--------------|-------------------------|
| 1) square | a) Has 3 sides |
| 2) Rectangle | b) Has no corners |
| 3) Triangle. | c) Has four equal sides |

4) Circle

d) Has 2 long and 2 short sides

XVIII Nandhini had 15 stamps and chirag had 7 stamps nani maa gave them 10 more stamps how many stamps do they have in total now ?

XIX Solve the riddle

I am number between 150 and 160

I have 5 in tens place and 5 ones in one's place

I am an odd number

What number am I _____

Class: III

Subject: EVS

Name of the student _____ Roll no _____ Section _____

I. Fill in the blanks

- A _____ family has only parents and one or two children.
- _____ form the third generation in a family tree.
- The family teaches us _____ habits.
- In a joint family _____ is the head of the family.
- In a nuclear family _____ is the head of the family.

II Answer the following questions

- How many family members are shown in the picture?

Ans _____

- What are they doing?

Ans _____

- Draw your family tree in the space provided .

d) Write few lines about your family.

Ans

2 Match the names of parts of a plant in Column I with their descriptions in Column II.

| Column I | Column II |
|-------------|---|
| (i) Root. | (a) A part storing seeds |
| (ii) Leaf | (b) Green part preparing food for plant |
| (iii) Fruit | (c) Part which is under the ground |
| (iv) Flower | (d) Part bearing leaves, fruits and flowers |
| (iv) Stem | (d) Colourful part |

Think, Find and Write

1- Find out and write the names of the five small plants and five big plants like trees near your house or in nearby areas. Fill up the table with your answers.

| Small plants Where you saw them. | Big plants Where you saw them |
|----------------------------------|-------------------------------|
| 1. | 1. |
| 2. | 2. |
| 3. | 3. |
| 4. | 4. |
| 5. | 5. |

2. Fill in the blanks with the most appropriate words.

climbers, trees, shrubs, creepers, herbs

- (i) Short plants with soft and green stems are
- (ii) Plants with weak stems, that grow around some support, are called
- (iii) Medium- sized bushy plants with thin woody stems are
- (iv) Plants with weak stems that cannot stand erect and grow creeping on ground are
- (v) Big plants with thick trunks are

3. Match the following

4. Answer the following questions

5. Name the following

a) Name any two means of land transport .

i) _____

ii) _____

b) Name any two means of water transport .

i) _____

ii) _____

c) Name any two means of air transport .

i) _____

ii) _____

d) Name any two means of land transport having two wheels.

i) _____

ii) _____

e) Name any two means of land transport having four wheels

i) _____

ii) _____

6. Draw the following vehicles

Car Bus Auto Bike



Class – III

Subject – ENGLISH

NAME : _____

CLASS : III

ROLL No: _____

WORK SHEET 1**Synonym**

Synonyms are words that have almost the same meaning.

Synonyms for : large, huge, gigantic

Circle the 2 synonyms for each set of words.

- | | | | | |
|----|---------|---------|---------|-------------|
| 1. | toasty | chilly | cool | comfortable |
| 2. | walk | crawl | stroll | run |
| 3. | argue | scare | confuse | frighten |
| 4. | bravery | honesty | courage | winner |
| 5. | cook | drink | eat | munch |
| 6. | record | paint | draw | sketch |

Write a synonym for each word.

- | | | | |
|------------|-------|--------------|-------|
| 7. thin | _____ | 8. tiny | _____ |
| 9. store | _____ | 10. fall | _____ |
| 11. see | _____ | 12. friendly | _____ |
| 13. tasty | _____ | 14. silent | _____ |
| 15. smelly | _____ | 16. smile | _____ |
| 17. think | _____ | 18. break | _____ |

WORK SHEET 2**Articles (a/an/the)**

1. They all attended at _____ early hour.
2. I'll be back in _____ day or two.
3. That's _____ way things are.
4. It hadn't been this way for _____ long time.
5. It's _____ good thing to let alone.
6. He said it was _____ matter of opinion.
7. She was _____ best woman in France.
8. He is going away in _____ few days.
9. She did not say another word for _____ long time.
10. These are _____ results in every case.
11. That's _____ way I like her.
12. He could feel _____ tears in his eyes.
13. That's _____ way you think of it.
14. I have _____ highest respect for him.
15. Some of _____ others had already gone.
16. She talked here for half _____ hour.

WORK SHEET 3**VERBS****A. Complete these sentences by adding -d or -ed to the verbs in the brackets.**

1. Jaya _____ her room yesterday. (clean)

2. She _____ at the little baby. (smile)
3. The lion _____ into the pond. (jump)
4. They _____ football last week. (play)
5. I _____ clothes and put them for drying. (wash)
6. We _____ all day and all night. (work)

B. Complete these sentences with is, am, and are.

1. Grandmother _____ in the kitchen.
2. You _____ my neighbor.
3. We _____ in the dance competition.
4. Swati _____ tired of waiting for Dina.
5. I _____ in Kerala now.
6. Sam _____ the captain of the football team.
7. It _____ an interesting story.
8. Lily and Huma _____ good at playing tennis.

WORK SHEET 4

PREPOSITIONS

A. Complete these sentences with the correct prepositions.

1. The butterfly is sittinga yellow flower. (on/in)
2. Ali wakes up 7 o'clock every morning. (on/at)
3. Mina is standing _____ the tree. (under/on)
4. Grandmother takes a short nap _____ the afternoon. (in/on)
5. The boys are swimming _____ the river. (on/in)
6. Ravi and Rani baked a cake _____ Monday. (on/at)
7. Hira keeps his toy _____ .the red box. (in/on)
8. The old man is sitting _____ the bench. (on/under)

CONJUNCTION

A. Join these sentences with and/or.

1. Is that Meena? Is that Heena?
-

2. It is very hot. Everybody is sweating,

.....

3. The bus stopped. All the passengers got down.

.....

4. Does he live in a village? Does he live in a town?

.....

5. You can have pineapple juice. You can have orange juice.

.....

6. She is at home. She is practicing for the dance competition.

.....

7. Are we leaving today? Are we leaving tomorrow!

.....

8. They can go to Delhi by car. They can go to Delhi by bus.

.....

Class – III

Subject – HINDI

नाम : _____

कक्षा : III

अनुक्रमांक : _____

विषय : हिन्दी

वर्कशीट 1

अ. समानार्थी शब्द लिखिए।

राजा- _____ कमल- _____ पहाड़- _____

हाथी- _____ पेड़- _____ सूरज- _____

धरती- _____ पानी- _____ रात- _____

सोना- _____ बादल- _____ पुत्र- _____

आ. विलोमार्थी शब्द लिखिए।

पतलाX _____ नीचाX _____ पुरानाX _____

दिनX _____ वीरX _____ छोटाX _____

लाभX _____ अनेकX _____ सचX _____

सहीX _____ सम्मानX _____ सदीX _____

इ. तुकवाले शब्द लिखिए।

अगर- _____ पहल- _____ बात- _____

चरण- _____ साथ- _____ मन- _____

गरम- _____ इधर- _____ नयन- _____

आग- _____ फल- _____ सपना- _____

ऊ. सजा शब्द लिखकर वाक्य पूरे करिए।

| | | | | |
|----|-------|-------|--------|------|
| आम | यमुना | कक्षा | ताजमहल | घड़ी |
|----|-------|-------|--------|------|

1. ----- एक पवित्र नदी है।
2. मुझे ----- खाना बहुत पसंद है।
3. ----- बहुत सुंदर इमारत है।
4. बच्चे ----- में पढ रहे हैं।
5. मेज पर ----- राखी है।

ऊ. निचे दिए शब्दों की विशेषता लिखिए।

| | | |
|-----------|------------|------------|
| -----आम | -----लडका | -----साडी |
| -----गाडी | -----लडकी | -----इमारत |
| -----भोजन | -----मिरची | -----मिठाई |
| -----औरत | -----दीवार | -----बच्चा |

ए. क्रिया शब्द पहचानिए और रेखांकित करिए ।

1. गाय घास खा रही है।
2. नदी में पानी बह रहा है।
3. पिहू पढाई कर रही है।
4. घोडा दौड रहा है।
5. रवि कार चलाता है।
6. माँ ने खाना खिलाया।

वर्कशीट 3

ओ. निचे दिए शब्दों को वाक्या में प्रयोग करीए ।

1. कठिन : _____
2. आम : _____
3. पैर : _____
4. पत्र : _____
5. चतुर : _____
6. चीटी : _____
7. मित्र : _____
8. बीरबल : _____
9. गुठली : _____
10. सीखना : _____

ओ. सही शब्द पर गोला बनाओ।

मिटाई

मिठाई

मीठाई

किताब

खिताब

कीताब

चतुर्भुज

चतुभुज

चतूर्भुज

पपीता

पापीता

पपिता

घोंसला

घोंसला

घोसला

चीटी

चीटी

चिटी

वर्कशीट 4

क. निचे दिए वाक्य में सही कारक चिन्ह चुनकर लिखिए ।

| | | |
|----|-----|----|
| के | से | को |
| का | में | की |

1. यह राधा ----- घर है।
2. रमेश ----- खेलना बहुत पसंद है।
3. सुख-दुःख जीवन ----- आते रहते हैं।
4. सीता ----- बल काले हैं।
5. फूलों ----- खुशबू आ रही है।
6. मुझे रानी ----- कहानी पसंद है।

ख. निम्नलिखित वाक्यों में सही सर्वनाम लिखिए।

1. दरवाजा खोलो बाहर ----- खड़ा है। (कोई / कौन)
2. ----- मेरी घड़ी है। (यह / वहा)
3. ----- केला खा रहा हूँ। (मैं / वह)
4. ----- गाना नहीं आता। (मुझे / मैं)
5. वहाँ ----- नहीं बैठा। (कोई / कौन)
6. बिल्ली ने दूध पिया और ----- से भाग गई। (यहाँ / वहाँ)

ग. निचे दिए चित्र से नामवाले शब्द (संज्ञा) लिखिए।



Class – III

Subject – COMPUTER

Autumn Break Holidays Home Work

1. Design 3 coloured sceneries using ms paint tools
2. Type at least 5 sentences about your school using Ms-word.
3. Type at least 5 sentences about your family using Ms-word.

Class – IV

Subject – Mathematics

PM SHRI KENDRIYA VIDYALAYA NO 1, SHIFT 1, TIRUPATI
AUTUMN BREAK WORKSHEETS

Name: _____ **Class :** 4 A/B/C **SUBJECT:**MATHS

1. Fill in the blanks:

a. $184+0 = \dots\dots\dots$

b. The number name of 564 is

c. $5\text{kg} = \dots\dots\dots\text{gm}$

d. $1\text{m} = \dots\dots\dots\text{cm}$

e. $1\text{l} = \dots\dots\dots\text{ml}$

f. $9000\text{ ml} = \dots\dots\dots\text{l}$

g. $6\text{m} = \dots\dots\dots\text{cm}$

h. $2000\text{g} = \dots\dots\dots\text{kg}$

i. $900\text{cm} = \dots\dots\dots\text{m}$

j. $8\text{kg} = \dots\dots\dots\text{g}$

1. Multiple choice question:

1. The place value of 3 in 254379

- a) 30 b) 300 c) 3000 d) 0

2. The boundary of a circle is called its

- a. radius b) diameter c) circumference d) perimeter

3. If one pen costs Rs 12. What is the cost of 10 pens?

- a) 140 b) 150 c) 110 d) 120

4. The place value of 3 is in 473896

- a)30 b)300 c)3000 d)3

5. If a frog jumps 3 steps at a time from 0. How many steps has he taken to reach 18?

- a)8 b)6 c)9 d)3

6. Ram weight is 18 kg. Tick the correct answer in grams.

- a)180 g b)1800 g c)18g d)18000g

7. $900000+50000+3000+600+1$

- a)93561 b)95361 c)59361 d)96531

8. $25 \times 5 = \dots\dots\dots$

- a)165 b)125 c)175 d)135

9. $1365 \times 1 = \dots\dots\dots$

- a)1366 b)1365 c)1360 d)0

10. 1 kg of tomatoes cost is 15 Rs. 3 kg of tomatoes cost is

- a)45 Rs b)40 Rs c)55 Rs d)50 Rs

III. Which unit will you use to measure the following:

1. A bag of cement – gm/kg
2. A packet of chilli powder _ gm/kg
3. A bucket of water – ml/l
4. A syrup of bottle __ ml/l
5. A bag of books __ gm/kg

IV. Devara wants change for ₹ 500.

How many notes will she get if she wants in return-

- a. All 100rupee notes
- b. All 50rupee notes
- c. All 20rupee notes
- d. All 5rupee notes

V. find the total cost of the following items:

| <i>S. No.</i> | <i>Item</i> | <i>Cost per kg</i> | <i>QuantityIn (kg)</i> | <i>Amount</i> |
|---------------|-------------|--------------------|------------------------|---------------|
| 1 | Sugar | 30 | 4 | |
| 2 | Rice | 50 | 2 | |
| 3 | Wheat | 40 | 3 | |
| 4 | Cashew | 800 | 1 | |

Rough work

Write the tables from 2 to 15 .

Class – IV

Subject – EVS

PM SHRI KENDRIYA VIDYALAYA NO 1 TIRUPATI

WORK SHEET-1

HOME ASSIGNMENT DURING AUTUMN BREAK OCT 2024-25

CLASS-IV

SUBJECT- EVS

STUDENT'S NAME -

.....

SECTION -

ROLL NO -

.....

1. Fill in the blanks

1. In Rajasthan, children use a _____ to reach the school.

2. The oldest _____ is the leader of the elephant herd.
3. Khejadi village is located near _____ in Rajasthan.
4. Honeybees produces the sound of _____ when they fly.
5. Every child has a right to free education up to class _____
6. Omana and _____ were best friends.
7. A _____ taken us to the other side of the Mountains.
8. Madgaon is in _____.
9. _____ flower has oil in it.
10. When chetanda's family moved from Pakistan to India, they stayed in _____ in a camp.

WORK SHEET-2

HOME ASSIGNMENT DURING AUTUMN BREAK OCT

2024-25 CLASS-IV SUBJECT- EVS

STUDENT'S NAME -

.....

SECTION -

ROLL NO -

.....

ii. Choose the best option

1. Where does suman and her husband stay Nowadays ()
a. Palwal b. Sohna c. Delhi d. Goa

2. _____were Anita's best friends ()
a. Animals b. Birds c. Trees d. Peacocks

3. _____are the most important bees for the hive . ()
a. Queen bees b. Worker bees c. Male bees d. All of these

4. The bus dropped Omana's family by the ()
a. Road side b. Water side c. Country side d. Ammumma's Village

5. _____father has been promoted ()
a. Nimmi's b. Tsering's c. Nazli's d. None of those

iii. Match the following

- | | | |
|----------------------|-----|-------------------|
| 1. Amrita | () | a. Andhra Pradesh |
| 2. Omana | () | b. Uttaranchal |
| 3. Karnam Malleswari | () | c. Elephant |
| 4. Valley of flowers | () | d. Bihar |

5. Nandu

()

e. Dairy's

WORK SHEET-3

CLASS-IV

SUBJECT- EVS

STUDENT'S NAME -

.....

..... SECTION -

ROLL NO -

.....

IV. Short answer questions

1. The states, which you will not cross while travelling in a train from Kolkata to Chennai Ans.

2. Describe the scenery as it appeared to Omana after the train left Udupi. Ans.

3. How do we prepare “Granny’s recipe” to prevent our skin from cracking during winter? Ans.

4. Write few sentences about Madhubani paintings. Ans.

WORK SHEET-4

CLASS-IV

SUBJECT- EVS

STUDENT'S NAME -

.....

..... SECTION -

ROLL NO -

.....

v. **Think find and write**

1. **Classify the following in the table given below**

(Potato, Spinach, Banana, Tomato, Cabbage, Grapes, Ginger, Pineapple, Pear gourd, Onion)

| Fruits and vegetables that spoil quickly | Fruits and vegetables that stay for some days |
|---|--|
| | |

2. **Name any four games which can play indoor and outdoor.**

Mention your favorite game. Ans.

3. **Draw a picture of our national bird. And color it.**

NAME : _____

CLASS : IV
SUBJECT: ENGLISH

ROLL No:

WORK SHEET 1

I. MATCH THE SOUNDS OF ANIMALS

- | | |
|-----------|-------|
| 1. Birds | buzz |
| 2. Cows | neigh |
| 3. Bees | chirp |
| 4. Horse | quack |
| 5. Sheep | moo |
| 6. Ducks | cheep |
| 7. Chicks | meh |

II. WRITE THE DEGREES OF COMPARISON

- | | | |
|-----------|--------|----------|
| 1. late | _____ | _____ |
| 2. _____ | tinier | _____ |
| 3. lovely | _____ | _____ |
| 4. _____ | better | _____ |
| 5. round | _____ | roundest |

III. CIRCLE THE ODD ONE OUT

1. bed ,day , time
2. sing , dance , breeze
3. lion ,duck , chick
4. beautiful , sleep , lovely
5. hurry , bag , fast

V. REARRANGE THE LETTERS IN RIGHT ORDER

1. olcck
2. |peles
3. appyh
4. mlise
5. chlnu

WORKSHEET 2

1. What is your favourite fruit? Describe it in five sentences.

1. _____
2. _____
3. _____
4. _____
5. _____

1. Pick out the adjectives

Adjectives

Circle the adjective in each word list.

1. Blue cow run apple
2. Farm play sad boy
3. Pencil tall pillow television
4. Toy eat coat soft
5. Fast computer car wind



2. Circle twelve body parts hidden in the word search :

| | | | | | | | | | |
|---|---|---|---|---|---|---|---|---|---|
| M | F | D | T | Z | Y | K | L | R | P |
| L | Y | K | L | M | M | P | R | O | T |
| K | Z | T | X | Z | O | S | T | V | F |
| R | R | D | A | Y | U | W | Y | K | K |
| P | F | M | B | C | T | H | U | M | B |
| Q | F | O | R | E | H | E | A | D | S |
| N | I | D | U | C | H | E | E | K | R |
| Q | N | F | T | H | Y | L | E | G | L |
| R | G | S | A | E | Z | C | S | M | K |
| W | E | A | R | S | A | B | T | M | P |
| V | R | X | M | T | H | I | G | H | S |
| E | G | T | O | N | G | U | E | O | U |

WORKSHEET 3

COMPREHENSION PASSAGE

Mother, your baby is silly! She is so very childish! She does not know the difference between the lights in the streets and the bright stars. When we play with pebbles, she thinks they are real food. She even tries to put them into her mouth. When I open a book before her and ask her to learn her *a b c*, she tears the pages with her hands and roars with joy at nothing. This is your baby's way of doing her lessons!

1. How did the boy begin to complain his sister?

2. Who says all these words to whom?

3. Write the meaning of the following words

a. pebble _____

b. silly _____

4. Make a sentence of your own using the word.

'Joy' _____

5. Pick out any two verbs from the passage.

a. _____

b. _____

II. Give the opposites of the words below by adding "un" or "im"

Happy - _____

perfect - _____

pure - _____

lucky - _____

possible - _____

safe - _____

III. Write the correct article (a / an / the) before each noun:

_____ igloo

_____ tree

_____ banana

_____ inch

_____ eagle

_____ bench

_____ kitten

_____ soccer ball

_____ owl

_____ tiger

WORKSHEET 4

READ THE POEM AND ANSWER THE QUESTIONS:

Tiny little secrets

Get buried in the
dirt, And if they
were dug up,

Someone would probably get
hurt, So leave them safely
there,

To rot amongst the
leaves, Admiring
instead,

The truth in summer's green trees.

- 1) Pick out two pairs of rhyming words from the passage:
a) _____, _____ b) _____, _____
- 2) Pick out the words which mean the same the following words:
a) Injure - _____ b) Securely - _____

II) FORM SENTENCES USING THE WORDS GIVEN BELOW:

- 1) hillside - _____
- 2) lane - _____
- 3) meadow - _____
- 4) merry - _____

III) DESCRIBE ABOUT THE ACTIVITES DONE IN THE FOLLOWING PICTURES IN A SINGLE LINE:











Class – IV

Subject – HINDI

पीएम श्री केन्द्रीय विद्यालय क्र.1, तिरुपति

ऑटम ब्रेक होमवर्क 2024-25

नाम : _____

कक्षा : IV

अनुक्रमांक :

विषय : हिन्दी

वर्कशीट 1

1) बिना मात्रा वाले शब्द पढो व लिखो |

अ+क+ब+र=अकबर

न+फ+र+त=

श+र+ब+त=

क+ट+ह+ल=

ध+ङ+क+न=

ब+ह+स=

ब+ह+न=

प+ढ=

र+थ=

स+ङ+क=

द+श+र+थ=

2. आ की मात्रा वाले शब्द अलग करके लिखो

कमरा=क+म+र+T

नायक=

चालक=

जापान=

सरदार=

जानवर=

दयावान=

धनवान=

आसमान=

दामाद=

रचना=

आचार=

वर्कशीट 2

3. इ की मात्रा वाले शब्द पहचानो व लिखो |

- निकट / जाना=
- अखबार / दिवस=
- तिलक / तीलक=
- पकवान /किताब=
- पहिया/पटवारी =
- नौकर /निगम =
- पिता/पाता=
- हिरण/कील=
- झील/शिखर =
- परिवार / स्कूल =
- मंदिर /नया =
- फूल /चिड़िया =
- लड़की/बगिया=

4. निम्न शब्दों को पूरा करो |

- शे __ नी
- च __ कीली
- सा __ किल
- बा __ र
- द __ बार
- न __ रत
- कि __ ब

- गुल्ल___
- बाद___
- आ___श
- पुरा___
- सा___ब

वर्कशीट 3

5 संज्ञा (नाम वाले शब्द)

परिभाषा- किसी व्यक्ति ,वस्तु,स्थान या भाव के नाम को संज्ञा कहते हैं।(नाम वाले शब्दों को संज्ञा कहते हैं।)

- नीचे दिए गये शब्दों में से संज्ञा शब्द पर गोला लगाओ |
राजू सुंदर गंगा नदी अलमारी नाचना फूल बस पीला ताजमहल भारत राम जाना रोना
दिल्ली खाना
पक्षी वह हवा सांभर चावल
- संज्ञा शब्द को रेखांकित करो |
I. मैं हलवा बना रही हूँ
II. शेर दहाड़ता है
III. रामू जलेबी खा रहा है
IV. चिड़िया उड़ गयी
V. मैं पाठशाला जाऊंगा

6) शुद्ध वाक्य बनाओ |

नीचे दिए गये शब्दों को सही क्रम में रख कर शुद्ध वाक्य बनाओ |

- स्कूल / की /काल /है/ छुट्टी

- दिवाली / सफाई /है /की /करनी

- बगीचे/ में/ खिले /है/ फूल

-
- टंडी/ बाहर/ है /चल /रही /हवा
-

-
- उड़ते /है/ आकाश/ पक्षी /में

-
- रंग /का /टमाटर/ लाल /है /होता
-

वर्कशीट 4

7 विशेषण

परिभाषा- जो शब्द संज्ञा या सर्वनाम की विशेषता बताते है उन्हें विशेषणशब्द कहते है।

जैसे: काला, लम्बा ,सफ़ेद , कडवा सुंदर इत्यादि |

विशेषण शब्द पर गोला लगाओ

- राम मकान मीठा शरबत
- टेबल सेब काला मंदिर
- लड़की सुंदर रात बगीचा
- शरीर सुबह तूफान घर
- छोटा भाई गया बाजार
- चिड़िया छोटी आसमान पानी
- पुराना कपडा पेन किताब
- कडवा करेला चाँद काल
- वे गये लम्बे रस्ते
- मामा छोटे मकान खरीदा
- बड़ा काम खाना दिन
- जमाल बादल पुराना बगीचा

क्रिया (काम वाले शब्द)

जिन शब्दों से हमे किसी काम के होने का पता चला है वे शब्द क्रिया शब्द कहलाते है |(आना,जाना ,पढना ,खेलना)

नीचे लिखे वाक्यों से क्रिया शब्द छांटकर लिखो

- 1) माँ खाना बना रही है _____
- 2) राजू गेंद से खेलता है _____

- 3) पापा समाचार पढ़ते हैं _____
- 4) बगीचे में फूल खिले हैं _____
- 5) आसमान में तारे चमक रहे हैं _____
- 6) सूरज पूरब से निकलता है _____

Class – IV

Subject – COMPUTER

Class: 4 A, B,C Shift-1 Subject : computer

Autumn Break Holidays Home Work

Q1. Practice the activities given below .

Write the parts of ms word window AND POWER POINT WINDOW in your Note book.
Prepare good chart.

Q2. Using MS-Word, write a leave application to be submitted to your class teacher

Q3. Type “The mouse was playing in a bush nearby”. → Colour the word ‘bush’. → Click on the Undo button on the Quick Access Toolbar(to undo the colour action). → Click the Redo button to redo the action and get the colour back.

Q4. Write about Dussehra festival/Vijayadashami.Type in ms word.

1 Write the numerals for each of the following numbers. One has been done for you.

(a) One thousand = _____

(b) Ten thousand = _____

(c) One hundred thousand = _____

(d) One lakh = _____

(e) Ten hundred thousand = _____

(f) Ten lakh = _____

(g) Hundred lakh = _____

2 State 'True' or 'False'.

True/False

(a) 100000 is the greatest six-digit number. _____

(b) Ten hundred lakh is also called one crore. _____

(c) In a lakh, there are hundred thousand. _____

(d) There are seven zeros in one crore. _____

(e) Cost of 1 kg sugar is ₹ 80. In ₹ 1000, a person can buy 25 kg rice. _____

(f) 10 lakh = ten thousand hundred _____

WORKSHEET-2

Q. Find some special numbers by turning back the given numbers and adding them. One has been done for you :

- a. 45 Number turned back = 54
 Sum = 45 + 54
 = 99
- b. 23 Number turned back = ____
 = ____ + ____
 = _____
- c. 42 Number turned back = ____
 = ____ + ____
 = _____
- d. 53 Number turned back = ____
 = ____ + ____
 = _____

Q.1 Complete the magic squares:-

a.

| | | |
|----|----|----|
| 17 | | 15 |
| 12 | | |
| | 18 | 11 |

The sum is 42.
 Use numbers from 10-18.



b.

| | | |
|----|----|----|
| | 16 | 23 |
| 22 | | |
| 17 | | 19 |

The sum is 60.
 Use numbers from 16-24.



c.

| | | |
|----|----|----|
| | | 18 |
| 21 | 17 | 13 |
| | 15 | |

The sum is 51.
 Use numbers from 13-21.

Write the following angles as acute, obtuse, right or straight angles. One has been done for you.

- (a) 40° = Acute angle (b) 90° =
- (c) 125° = (d) 64° =
- (e) 180° = (f) 82° =
- (g) 146° = (h) 150° =

WORKSHEET -3

Q.1 Write three factors of the following numbers excluding 1:-

- (a) 30 _____ (b) 8 _____ (c) 26 _____
- (d) 21 _____ (e) 28 _____ (f) 12 _____
- (g) 14 _____ (h) 6 _____ (i) 24 _____

Q.2 Draw the line of symmetry .



Q.3 Look at the figure and draw what the following shapes would look like $\frac{1}{4}$ turn and $\frac{1}{2}$ turn.

WORKSHEET -4

Write the first four equivalent fractions of :

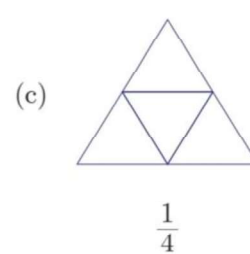
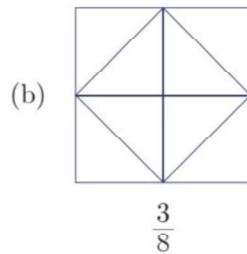
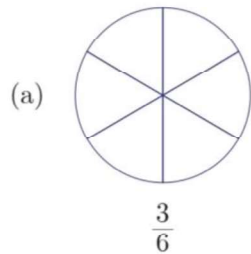
(a) $\frac{2}{3} = \underline{\hspace{1cm}} = \underline{\hspace{1cm}} = \underline{\hspace{1cm}} = \underline{\hspace{1cm}}$

(b) $\frac{5}{7} = \underline{\hspace{1cm}} = \underline{\hspace{1cm}} = \underline{\hspace{1cm}} = \underline{\hspace{1cm}}$

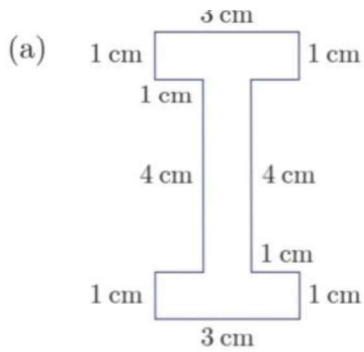
(c) $\frac{3}{4} = \underline{\hspace{1cm}} = \underline{\hspace{1cm}} = \underline{\hspace{1cm}} = \underline{\hspace{1cm}}$

(d) $\frac{1}{5} = \underline{\hspace{1cm}} = \underline{\hspace{1cm}} = \underline{\hspace{1cm}} = \underline{\hspace{1cm}}$

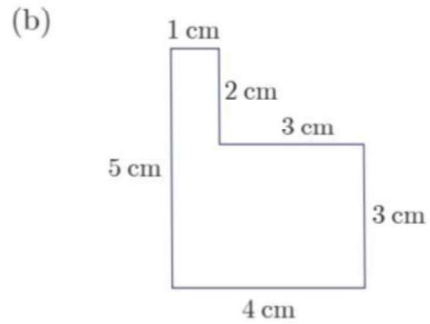
Shade the shapes according to the given fractions.



Find the perimeter of given figures.



Perimeter =



Perimeter =

Class – V

Subject – EVS

Autumn break Home work (2024-25)

CLASS: V

SUBJECT: EVS

NAME: _____ ROLLNO: _____

Work sheet -1

General EVS/science quiz questions

I. Write the correct answer against the question

1. The Red planet is _____
2. Gravity means _____
3. Gravity on the Earth discovered by _____
4. Father of Indian Space program _____
5. _____ is the largest planet in our solar system
6. The most abundant gas in earth's atmosphere _____
7. The chemical name of table salt is _____
8. _____ is the closest star to the earth
9. Animals that would soon become extinct are called _____
10. The boiling point of water in degree Celsius is _____
11. Name of the Indian space Mission to the moon is called _____

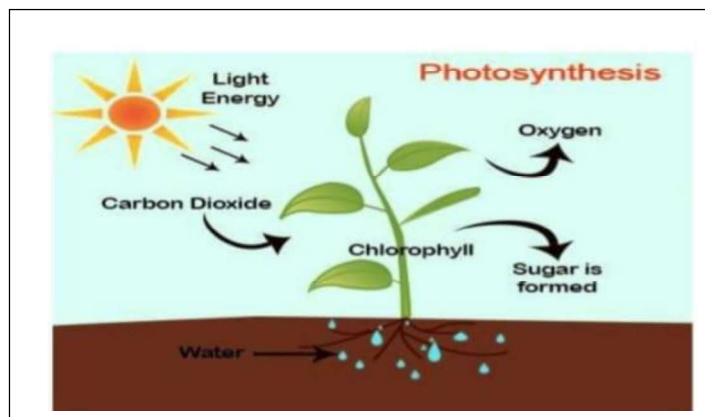
12. Highest mountain peak in India is _____
13. The Deficiency of iron in our body leads to _____ disease
14. Malarial parasite discovered by _____
15. Normal range of hemoglobin in blood is _____

Work sheet -2

Q1. Fill in the blanks with the correct words in the paragraph.

[hygiene, non-communicable, wash, balanced, jaggery, soap, iron, nails, healthy food habits]

Rita had been missing her school very often. The worried parents took her to the doctor. They found that Rita had not been eating a _____ diet and was lacking _____ which made her anemic. The doctor explained that it is a _____ disease. Rita had another bad habit. She did not maintain proper _____ and was always asked by the teacher to cut her _____. She never used to _____ her hands with _____ after returning from the playground. The doctor told her to eat guava, meat and _____ in order to remove iron deficiency. Besides all instructions she was told to practice to follow _____ regularly in order to stay fit and healthy.



Answer the following questions on your own by observing the above picture.

- Q1. The process by which plants make their own food is called _____
- Q2. What name is given to the green pigment in the leaves _____
- Q3. Energy for photosynthesis comes from the _____
- Q4. The two gases involved in the process of photosynthesis are _____ and _____
- Q5. What makes food for the plant _____

Work sheet -3

Give reasons in brief in a word or sentence

1. Why are lizards not seen during winters?

Ans.

2. Why do cloths dry faster on a sunny day?

Ans.

3. Why were the bastions made around the Golconda fort?

Ans.

4. Why a ball thrown up comes down?

Ans.

5. Why is it difficult to breathe at high altitudes?

Ans.

Write the use of the following instruments:

1. Microscope:

2. Stethoscope:


3. Telescope:

4. **Thermometer:**

5. **Seismograph:**

Work sheet -4

Q1. Make a poster on the topic save electricity at home and write a few comments.



Q2 Make a poster on the topic 'MAKE EVERY DROP OF WATER COUNT' and write a few comments.



Class – V

Subject – ENGLISH

AUTUMN BREAK HOMEWORK 2024-25

NAME : _____

CLASS : V

ROLL No:

SUBJECT: ENGLISH

WORK SHEET 1

I. CHOOSE FIVE THINGS THAT YOU DO AT HOME FROM SCHOOL AND WRITE THEM IN ORDER

go to play read a book sleep for a while

do the homework pack school bag have lunch

chat with mummy from school wash up put away school bag change out of school uniform

II .CIRCLE THE ODD ONE OUT

summer , heat , round , hot

bees , children , baby , child

street , road , lane , park

cool , chill , drink , frosty

I. READ THE PASSAGE AND ANSWER TO THE FOLLOWING QUESTIONS

Father took me to visit Uncle Lal's dairy farm.I saw all of Uncle Lal's cows.He has fifty cows.They eat grass in the big green farms.In the evening the farmers bring them to the barn to be milked.Uncle Lal sells his milk in the city.

1. Who took you to the farm ?

2. How many cows are there in the farm ?

3. Where does Uncle Lal sells his milk ?

4. Write the meaning

i. dairy farm _____

ii. barn _____

WORK SHEET 2

I. WRITE THE RHYMING WORDS

1. race _____

2. sky _____

3. hard _____

4. lable _____

5. heat _____

II. FILL IN THE BLANKS WITH A SUITABLE DESCRIBING WORD

1. Madurai is a _____ city.

2. Uma is an _____ girl.

3. Latha was given a _____ bouquet on her birthday.

4. That _____ shirt is mine.

5. Yesterday my mother prepared a _____ dinner.

IV. WRITE THE MEANINGS

- 1. scraps _____
- 2. feast _____
- 3. sternly _____
- 4. whipped _____
- 5. tempting _____

IV. CIRCLE THE MISS SPELT WORD

1. wonderfull , wonderful 2. reply , replye

3. feest , feast 4. pelace , palace 5. aviel , avial

VI. MATCH THE FOLLOWING

- | | |
|-------------|----------|
| 1. kitchen | curd |
| 2. palace | kerala |
| 3. whipped | decorate |
| 4. tempting | cook |
| 5. avial | king |
| 6. dinner | smell |
| 7. adorn | night |

WORK SHEET 3

1. Find the root word of the following :

| ful | root word | ness | root word | less | root word |
|-----------|-----------|--------------|-----------|----------|-----------|
| colourful | | tiredness | | careless | |
| cheerful | | carelessness | | seedless | |
| thankful | | kindness | | selfless | |
| grateful | | goodness | | hopeless | |

| | | | | | |
|-----------|--|--------------|--|----------|--|
| sorrowful | | fearlessness | | reckless | |
|-----------|--|--------------|--|----------|--|

2. Using these feeling words, write a passage in 50 words.

| | | | | |
|--------|---------|---------|-------|------------|
| amazed | shocked | worried | angry | frightened |
|--------|---------|---------|-------|------------|



| Nouns | Plurals | Verbs | Adjective |
|-------|---------|-------|-----------|
| | | | |
| | | | |
| | | | |
| | | | |
| | | | |

2. Fill in the blanks with correct form of words in the box :

| | | | | | |
|-------|-------|--------|------|------|-------|
| visit | have | arrive | toss | pick | blow |
| milk | clean | show | help | sail | drive |

Last summer, I _____ my grandpa's farm. I _____ on 15 May. My grandpa _____ me up at the station and _____ me to his farm. He _____ me all the animals. Every day, I _____ him feed the chickens. We _____ the cows together. We even _____ the pigsty! One day, my grandpa and I _____ in a boat in the lake nearby. The wind _____ my hair on my face and the little boat _____ in the water. I _____ so much fun! I _____ to go there again.

Class – V

Subject – HINDI

पीएम श्री केन्द्रीय विद्यालय क्र.1, तिरुपति

ऑटम ब्रेक होमवर्क 2024-25

नाम : _____

कक्षा : V

अनुक्रमांक :

विषय : हिन्दी

वर्कशीट 1

उपसर्ग

वे शब्दांश जो मूल शब्द के पहले जुड़कर शब्द का अर्थ बदल देते हैं, उपसर्ग कहलाते हैं।

उपसर्ग मूल शब्द शब्द उपसर्ग मूलशब्द शब्द

प्र + हार = प्रहार अ + ज्ञात = -----

प्र + बोध = ----- अ + न्याय = -----

प्र + मोद = ----- अ + सहाय = -----

प्र +गति = ----- अ +संभव = -----
 अनु +कूल = ----- उप + कार = -----
 अनु +मान = ----- उप + नाम = -----
 अति +शीघ्र = ----- अधि+ कार = -----

प्रत्यय

वे शब्दांश जो मूल शब्द के अंत में जुड़कर शब्द का अर्थ बदल देते हैं ,प्रत्यय कहलाते हैं ।

| मूल शब्द | प्रत्यय | शब्द | मूल शब्द | प्रत्यय | शब्द |
|----------|---------|-------|----------|---------|-------|
| लिखा | +ई | लिखाई | धन | + वान | धनवान |
| पढ़ा | + ई | ----- | गुण | +वान | ----- |
| हँसा | +ई | ----- | प्रतिभा | +वान | ----- |
| अच्छा | +ई | ----- | खिलौने | +वाला | ----- |
| उदार | +ता | ----- | दूध | +वाला | ----- |
| लघु | +ता | ----- | अपना | +पन | ----- |
| श्री | +मान | ----- | पागल | +पन | ----- |

वर्कशीट 2

मूल शब्द को उपसर्ग व प्रत्यय के साथ मिलकर पढ़ें ।

| उपसर्ग | मूल शब्द | प्रत्यय | शब्द |
|--------|----------|---------|--------|
| उप | कार | अक | उपकारक |
| बे | कार | ई | ----- |
| बे | चैन | ई | ----- |
| अभि | मान | ई | ----- |
| अन | उदार | ता | ----- |
| अप | मान | इत | ----- |

परिचय

नीचे दिए गये खली स्थान में अपना परिचय भरे ।

1. मेरा नाम ----- है |

2. मैं कक्षा ----- में पढता हूँ |

3. मेरे पिता का नाम ----- है |

4. मेरी माता का नाम ----- है |

5. मेरे भाई का नाम ----- है |

6. मेरी बहन का नाम ----- है |

7. मैं ----- बनना चाहता हूँ |

वर्कशीट 3

शब्दों को मात्राओ व व्यंजनों में तोड़कर लिखे |

1. माता = म +I +त +I

2. कवि = -----

3. छाता = -----

4. दिल = -----

5. कुसुम = -----

6. कबूतर = -----

7. कुमकुम = -----

8. कचूमर = -----

9. खलबली = -----

10. खालीपन = -----

- 11.चेतावनी = -----
 12. कौरव = -----
 13. गौरव = -----
 14.अंक = -----
 15.अंग = -----

पर्यायवाची शब्द

एक सामान अर्थ प्रकट करने वाले शब्दों को पर्यायवाची शब्द कहते है |

नीचे दिए गये बॉक्स में से शब्दों के सही पर्यायवाची शब्द छाटकर लिखे |

जलज , नीरज ,बेटा, सुत, बाग, बगीचा , अग्नि ,अनल ,वारिद , नीरद
 , सरित ,सरिता ,जगत ,दुनिया ,दिवस, दिवा ,रवि ,सूरज , सर ,सरोवर
 ,कुसुम ,सुमन ,वायु ,पवन ,भू , भूमि ,भगवन , प्रभु ,मानव , नर

| शब्द | पर्यायवाची शब्द |
|----------|-----------------|
| 1.कमल | ----- |
| 2.सूर्य | ----- |
| 3.मनुष्य | ----- |
| 4.उपवन | ----- |
| 5.पुत्र | ----- |
| 6.आकाश | ----- |
| 7.चन्द्र | ----- |
| 8.तालाब | ----- |
| 9 .इश्वर | ----- |

वर्कशीट 4

संज्ञा शब्द लिखकर नीचे दिए गये वाक्य पूरे कीजिये |

हरियाली ,ताजमहल ,पुस्तक, साड़ी ,इमली ,खिलौने ,गंगा , गंगा ,
 पक्षी , मिठाई , तारे , कक्षा , आम ,बिल ,शेर ,डॉक्टर ,भारत ,बैग
 ,अस्पताल ,बाजार ,हिमालय , धर्म वातावरण ,विद्यालय ,मानवता ,

पदग्व

- 1 .-----बहुत मीठा फल है |
 - 2 .-----खट्टी होती है|
 - 3 .-----बहुत सुन्दर ईमारत है |
 - 4.-----एक पवित्र नदी है |
 - 5.मेरे पास बहुत सरे नये – पुराने -----है |
 - 6 .माँ ने आज लाल रंग की -----पहनी है |
 - 7.मुझे -----खाना बहुत पसंद है |
 - 8.मेज पर -----राखी है |
 - 9.पेड़ – पौधों से -----छा जाती है |
 - 10.पेड़ पर -----चहचहा रहे है |
 - 11.आसमान में -----चमक रहे है |
 - 12.बच्चे -----में बैठकर पढ़ रहे है |
 13. खरीदारी करने के बाद मैंने -----को भुगतान किया |
 14. ----- को जंगल का राजा कहते है |
 - 15 .-----मरीजो का इलाज करता है |
 - 16 .----- को सोने की चिड़िया कहते है |
 - 17.वह -----लेकर स्कूल जाता है |
 - 18.मेरी दादी जी -----में भर्ती है |
 - 19.मै कल अपनी माताजी के साथ ----- गया |
-
- 20.गंगा -----से

Class – V

Subject – COMPUTER

Autumn Break Holidays Home Work

Q1. Write the parts of Ms Excel window in your Note book.prepare chart

Q2. Type “I am in class V. narrate story Ex: I like to eat apples, banana and oranges” in MS Word. Q3. Type your name, roll number and address. → Copy and Paste your name in the last line. → Now, Cut and Paste your roll number to the last line in Ms Excel window. Continue 10 student names

Q4. Write any 10 names of IT inventors.Ex : Google inventors.