

PUBDET-2019

Subject : Philosophy/Sociology/Performing Arts

(Booklet Number)

Duration: 90 Minutes

Full Marks: 100

INSTRUCTIONS

1. All questions are of objective type having four answer options for each. Only one option is correct. Correct answer will carry full marks 2. In case of incorrect answer or any combination of more than one answer, $\frac{1}{2}$ mark will be deducted.
2. Questions must be answered on OMR sheet by darkening the appropriate bubble marked A, B, C, or D.
3. Use only **Black/Blue ball point pen** to mark the answer by complete filling up of the respective bubbles.
4. Mark the answers only in the space provided. Do not make any stray mark on the OMR.
5. Write question booklet number and your roll number carefully in the specified locations of the **OMR**. Also fill appropriate bubbles.
6. Write your name (in block letter), name of the examination centre and put your full signature in appropriate boxes in the OMR.
7. The OMR is liable to become invalid if there is any mistake in filling the correct bubbles for question booklet number/roll number or if there is any discrepancy in the name/signature of the candidate, name of the examination centre. The OMR may also become invalid due to folding or putting stray marks on it or any damage to it. The consequence of such invalidation due to incorrect marking or careless handling by the candidate will be sole responsibility of candidate.
8. Candidates are not allowed to carry any written or printed material, calculator, pen, docu-pen, log table, wristwatch, any communication device like mobile phones etc. inside the examination hall. Any candidate found with such items will be **reported against** and his/her candidature will be summarily cancelled.
9. Rough work must be done on the question paper itself. Additional blank pages are given in the question paper for rough work.
10. Hand over the OMR to the invigilator before leaving the Examination Hall.



English Language

1. Pick out the word that has either nearly the same meaning or opposite meaning to INTERIM.
(A) Internal (B) Interval
(C) Timely (D) Temporary

2. Choose the word that can replace both the words in italics in the two given sentences.
I. The document was declared *void*.
II. I felt pity for the *sickly* person.
(A) Useless (B) Defective
(C) Invalid (D) Weak

3. Observe the two italicized words in the following two sentences and give your observation by choosing any one option below.
I. His father died in a car *collision*.
II. Some people are in *collusion* with antisocial elements.
(A) Only sentence-I is correct.
(B) Only sentence-II is correct.
(C) Both sentences I and II are correct.
(D) Neither sentence I nor sentence II is correct.

4. Choose the option, which can best replace the group of words given -
Incapable of being explained or accounted for
(A) incredible (B) inexplicit
(C) inexplicable (D) inexpressible

5. Choose the most effective word to fill in the blank to make the sentence meaningfully complete.

He sold his house because he was under a lot of _____

- (A) account (B) debt
(C) loan (D) credit

6. Choose the most effective word to fill in the blank to make the sentence meaningfully complete.

I am feeling _____ better today.

- (A) too (B) neither
(C) really (D) very

7. Choose the most appropriate pair of words from the options given below to fill in the blanks in the given sentence in the same order to make the sentence meaningfully complete.

_____ by long queues, the voters _____ their way to polling stations.

- (A) Going, dropped (B) Satisfied, turned
(C) Undaunted, made (D) Encouraged, prepared

8. Fill in the blank with the most appropriate word/group of words to make the sentence meaningfully complete.

The chief guest's wife gave _____ the prizes.

- (A) away (B) up
(C) in (D) off

PUBDET-2019

9. Fill in the blank with the most appropriate word/group of words to make the sentence meaningfully complete.

She _____ from the crowd because of her height.

- (A) stood out (B) stood by
(C) stood up (D) stood off

10. Pick out the group of words, which completes the given sentence most meaningfully.
The police raid was too sudden _____

- (A) then the culprit escaped (B) for the culprit to escape
(C) so that the culprit could not escape (D) for the culprit escaping

11. Find out which part of the sentence has an error.

While going

(A)

through the report

(B)

yesterday I find

(C)

several factual mistakes

(D)

12. Find out which part of the sentence has an error.

The success of a man

(A)

in business

(B)

depends over

(C)

his attention to small things

(D)

13. Choose the most suitable phrase to replace the italicized part of the sentence given below.

Little that he knew of the English language was not sufficient to make him a teacher of English.

- (A) The little (B) A little
(C) Very little (D) Only little

PUBDET-2019

14. Choose the most suitable phrase to replace the italicized part of the sentence given below.
The winter was *such severe* that even water in the tap was frozen.
- (A) severe so much (B) severe such
(C) so severe (D) much severe
15. Choose the most preferable sentence in respect to grammar, meaning and usage in order to express the intended theme.
- (A) The dacoits having stopped to divide the booty; the police overtook them.
(B) The dacoits stopping to divide the booty, the police overtook them.
(C) Since the dacoits stopped to divide the booty, the police had overtaken them.
(D) The dacoits having been stopped to divide the booty, the police overtook them.
16. Pick out the sentence which is grammatically wrong.
- (A) Please put your sign here.
(B) He examined the paper closely
(C) She has no knowledge of music.
(D) These books are mine.
17. Arrange the four parts of sentences given below in best order to fill in the blanks in the given sentence to form a complete meaningful sentence.
As the situation has changed _____
- (P) since we last discussed the matter
(Q) it was best to contact you
(R) it appeared to me
(S) without losing time
- (A) SQRP (B) PQRS
(C) RQSP (D) PRQS

18. Select an arrangement of the given letters so that it forms a meaningful word.

A C E S T H

1 2 3 4 5 6

(A) 6 1 4 5 3 2

(B) 2 6 1 4 5 3

(C) 4 3 5 6 1 2

(D) 6 3 2 1 4 5

19. Choose the alternative which best expresses the meaning of the idiom / phrase / proverb.
To hold a brief for.

(A) To help someone

(B) To do someone a favour

(C) To defend someone

(D) To stay back for a short period

20. Choose the alternative which best expresses the meaning of the idiom / phrase / proverb given in italics in the following sentence.

The father was *taken aback* by his son's rude behaviour.

(A) hurt

(B) annoyed

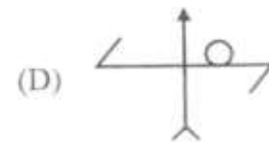
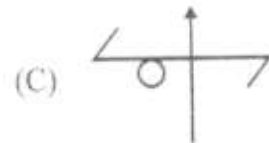
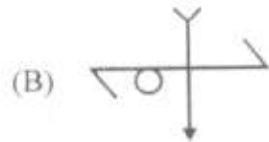
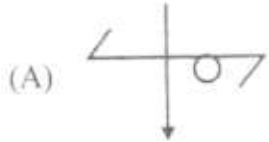
(C) demoralized

(D) surprised

LOGICAL REASONING



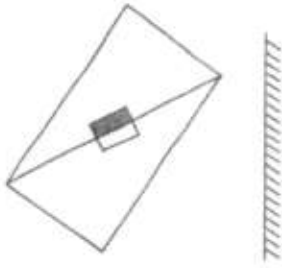
Which of the following figures should replace the question mark in the given sequence ?



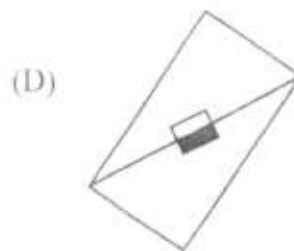
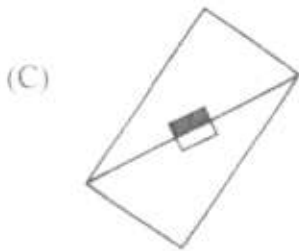
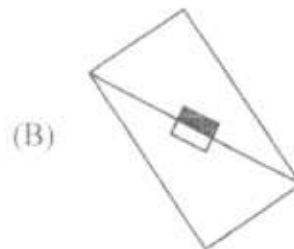
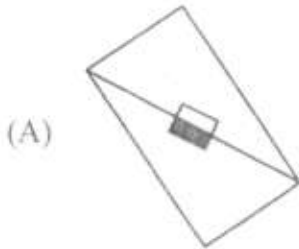
22. Which of the following four figures is least like the other three ?



23.



Which of the following four is the correct mirror image of the given figure ?



24. Find the missing letter in the sequence : X U S P N K I ?

(A) E

(B) H

(C) G

(D) F

25. Find the odd one out.

(A) Tiger

(B) Lion

(C) Leopard

(D) Zebra

26. Find the odd one out.

(A) Asia

(B) Germany

(C) Kenya

(D) China

27. Choose the pair that best expresses the relationship similar to KNOB : DOOR
- (A) Belt : Trousers (B) Handle : Drawer
(C) Shoe : Shocks (D) Ring : Ear
28. If GO AHEAD is coded as JR DKHDG and STOP is coded as VWRS, then UNIVERSITY will be coded as
- (A) XLHUVYLWB (B) XQLYHUVLWB
(C) VLWBQLYHU (D) QXYLUHLVBW
29. Every day, Mr. Sen goes for a morning walk along the straight road right in front of his home. One day he stepped out of his home, took a left turn and walked straight upto the banyan tree 500 m away from his home. He sat under the tree for 5 minutes and again walked 500 m in the same direction. Then he turned back and walked straight 2 km. Then he once again turned back and walked 1 km. Finally, how far away he was from the banyan tree ?
- (A) 2.5 km (B) 1 km
(C) 1.5 km (D) 500 m
30. Find the set of letters that can be used to complete the first word and to begin the second word
- T O R (* *) A I R
- (A) PA (B) CH
(C) BL (D) SO
31. Four words are given below with their letters jumbled up. Three of them are of same type. Find the odd man out.
- (A) NORI (B) SBRAS
(C) CINZ (D) RIVELS

32. Four words are given below with their letters jumbled up. Three of them have some relation. Find the odd man out.

- (A) NAICH (B) TEASIRNG
(C) OHRN (D) RODO

33. Find the missing number.

123	21	456
789	?	123
456	39	789

- (A) 47 (B) 30
(C) 15 (D) 21

34. Five friends Deep, Ayan, Bindu, Chanchal and Ena sat at a round table for coffee. Chanchal sat immediately to the left of Ena and Ayan sat immediately between Deep and Ena. Then, Ena is sitting between

- (A) Chanchal and Ayan (B) Bindu and Chanchal
(C) Deep and Chanchal (D) Ayan and Deep

35. Consider the following statements about four friends.

- Ashok and Vinod play football and hockey.
- Rakesh and Jayanta play badminton and cricket.
- Vinod and Rakesh play cricket and football.
- Ashok and Jayanta play hockey and badminton.

Who **does not** play cricket ?

- (A) Ashok (B) Vinod
(C) Rakesh (D) Jayanta

36. A lived 72 years and expired in 1996. B is 32 years' younger to A and C is 24 years' older to B. How old was C when A expired ?

- (A) 56 years (B) 71 years
(C) 32 years (D) 64 years

37. Ravi is as much younger to Nitin as is older to Lokesh. The sum of ages of Nitin and Lokesh is 62 years. How old is Ravi ?

- (A) 31 years (B) 24 years
(C) 28 years (D) 16 years

38. In a code language, EXPLANATION is written as EYQMAOAUIIO. How OBVIOUSLY will be written using the same code?

- (A) OCWJOUTNX (B) PCWJPRTMZ
(C) OCWIOUTMZ (D) NAUHNRKX

39. Find the missing number.

3	5	7
4	9	8
2	3	?
5	11	10

- (A) 3 (B) 6
(C) 9 (D) 5

40. Find the odd pair.

- (A) 48, 134 (B) 40, 110
(C) 18, 48 (D) 30, 80

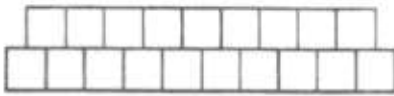
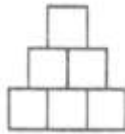
PUBDET-2019

41. The angle included between the hour's hand and the minute's hand of a clock at 9:30 a.m. is
- (A) less than 90° (B) equal to 90°
(C) more than 90° but less than 180° (D) equal to 180°
42. Which term of the series 100, 110, 120, 130, _____ is 1000 ?
- (A) 92nd (B) 100th
(C) 90th (D) 91st
43. Find the missing group of letters.
ABYZ, CDWX, ****, GHST
- (A) EFUV (B) FEVU
(C) EVFU (D) EVUF
44. Rahim started his morning walk and walked 1 km straight. Then he took a left turn and walked 500 m. Again he turned left and walked 500 m. At this time he noticed his shadow on his left side. In which direction did he start his morning walk ?
- (A) North (B) South
(C) East (D) West
45. There are five pencils of various sizes.
- The green pencil is shorter than red pencil but longer than yellow pencil.
 - The red pencil is shorter than blue pencil.
 - The purple pencil is longer than red pencil but not the longest one.
- Size wise, which pencil is in the middle ?
- (A) Red (B) Green
(C) Purple (D) Yellow

46. Five students are sitting on a bench facing their teacher. Chayan is sitting next to Madhu. Joy is sitting at the left end. Chayan is sitting second from right. Sunil is on the right of Ashok. Sunil and Chayan are sitting together. Who is sitting at the middle ?

(A) Ashok (B) Chayan
(C) Madhu (D) Sunil

47.



How many small squares will be required to complete the pyramid ?

- (A) 100 (B) 45
(C) 69 (D) 55
48. A wall is constructed on two sides of a square field of each side 10 m. The wall has a pillar every 1 m. How many pillars are there in total ?

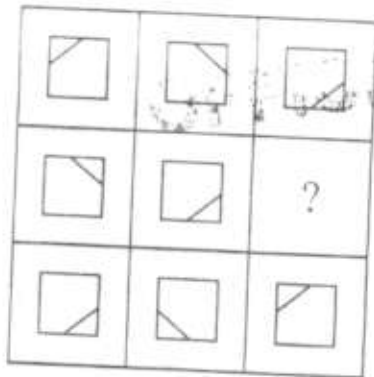
(A) 20 (B) 21
(C) 19 (D) 22

PUBDET-2019

49. On Sunday night at 9:30 p.m. a clock was 9 minutes fast. But due to old batteries, it was losing time uniformly and on Tuesday afternoon at 2:30 p.m. it was running 32 minutes slow. When did the clock show correct time ?

- (A) Tuesday at 6:30 a.m.
- (B) Monday at 6:30 a.m
- (C) Monday at 6:30 p.m
- (D) Tuesday at 9:30 a.m.

50.



Which of the following blocks should fit into the blank space in the above figure ?

