

Time:1 Hour 30 minutes

User ID No. _____

Instructions:

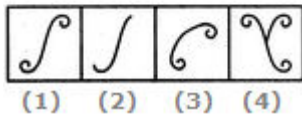
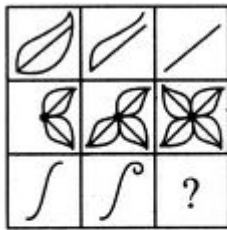
1. Ensure that all pages are printed.
2. Use Black ball pen only
3. Change in option is not allowed
4. There is no negative marking
5. Use of non -programmable scientific calculator is allowed

1. Which agency defines urban areas in India?
A Census of India
B Ministry of Urban Development, Government of India
C Niti Aayog
D None of them
2. Definition of Census Town includes which of the following criteria?
A A minimum population of 5000
B A density of population of at least 400 persons/KM²
C At least 75% male main working population engaged in non-agricultural pursuits
D All of these
3. As per Census-2011, what is the percentage of urban population in India?
A 21
B 31
C 41
D 51
4. Which of the following towns are statutory in nature?
A Municipal Corporations
B Municipal Council
C Nagar Panchayat
D All of these
5. What do you mean by FSI?
A Forward States of India
B Floor Space Index
C Ratio of built up area to the given plot
D None of them
6. Which is the largest Urban Agglomeration (UA) at present in India?
A Delhi UA
B Greater Mumbai UA
C Kolkata UA
D Chennai UA
7. What is the level of urbanization in Gujarat?
A 40%
B 41%
C 42%
D 43%
8. How many Municipal Corporations are in Gujarat?
A 5
B 6
C 7
D 8
9. Who is the Chairperson of the Niti Aayog?
A Shri Narendra Modi
B Shri Arvind Panagariya
C Shri Arun Jaitley
D Smt Sushma Swaraj
10. Who prepares Master Plan for a City
A Local Authority (ULB)
B Urban Development Authority
C Urban Development Department
D State Government
11. When was Town and Country Planning Act passed?
A 1947
B 1948
C 1950
D 1951

12. Urban local bodies are given autonomy by which of the following Act?
 A 74th Constitutional Amendment Act, 1992 B Municipal Act, 1951
 C 73rd Constitutional Amendment Act, 1992 D None of these
13. When was Urban Land (Ceiling and Regulation) Repeal Act passed in India?
 A 1997 B 1998
 C 1999 D 2000
14. Who gave the Central Place Theory for the first time?
 A Walter Christaller B Le Corbusier
 C Charles Correa D Alfred Weber
15. Which of the following cities can be called megalopolis?
 A Kochi B Surat
 C Mumbai D Ahmedabad
16. What do mean by gentrifications?
 A Movement of wealthier people in a poor neighborhoods B Rich people coming to live in old city
 C Poor people moving out to peripheral area D Renovation process of historical neighborhood
17. According to Census 2011 How many million plus cities are in India?
 A 50 B 51
 C 52 D 53
18. Solid waste management is the responsibility of one of the functions of ULBs as
 A Mandatory B Obligatory
 C Statutory D Non-statutory
19. What is width of a road lane of the National Highway?
 A 3m B 4m
 C 5m D 6m
20. Who was the chief architect of Chandigarh City?
 A Le Corbusier B Louis Kahn
 C Philip Johnson D Zaha Hadid
21. Which of the following of city is NOT a planned city in India?
 A Chandigarh B Gandhinagar
 C Bhubaneswar D Jaipur
22. The movement of people from central cities to smaller communities in the surrounding area is known as?
 A Reverse-urbanisation B Over-urbanisation
 C Under-urbanisation D Sub-Urbanisation
23. Which of the following city is the first private city of India
 A Lavasa B Pune
 C Lonavla D Nashik
24. What is do you mean by Conurbation?
 A Group of Slums B Group of Cities
 C Cluster of Cities and Towns D None of these
25. Which among the following was an exclusive university town?
 A Nalanda B Taxila
 C Kashi D Patliputra
26. When I fall asleep, I dream about what it would be like to have a rocket ship. If I had a rocket ship, my first destination would be the Earth's moon, which is called Luna. Que. What is the name of Earth's Moon?

- C Khushwant Singh D Nani Palkhivala
56. Which state government has announced a new scheme 'Kanya Van Samruddhi Yojana'?
- A Punjab B Mizoram
C Madhya Pradesh D Maharashtra
57. All india Harijan Sangha was established by Mahtama Gandhi in the year
- A 1935 B 1920
C 1932 D 1927
58. Which of the following territories does not have border with Mizoram?
- A Nagaland B Myanmar
C Tripura D Assam
59. Who wrote the line: 'A thing of beauty is a joy forever'?
- A John Keats B P.B.Shelley
C Robert Browing D William Wordsworth
60. Tetraethyl lead is used as
- A pain killer B petrol additive
C mosquito repellent D fire extinguisher
61. Which country to host the 2018 ICC Women's World T20 tournament?
- A England B West Indies
C New Zealand D South Africa
62. Who is consider as the chief architect of Tajmahal?
- A Mir Abd-ul Karim B Ustad Isa
C Makramat Khan D Ahmad Lahauri
63. Which city in india is the first to use municipal wastes to generate power?
- A Kolkata B Mumbai
C Chennai D Delhi
64. Who is the writer of 'Swami and Friends'?
- A Munshi Premchand B Max Muller
C Raman D R. K. Narayan
65. What is the theme of the 2018 World Milk Day (WMD) in India?
- A Drink Move Be Strong B Milk: A Healthy Drink
C Be Strong Be Healthy D Natural Drink for Health
66. The element common to all acids is
- A hydrogen B sulphur
C carbon D oxygen
67. The book 'Satanic Verses' was written by
- A Gunnar Myrdal B Salman Rushdie
C William Golding D Agatha Christie
68. Coastal Andhra Pradesh and Orissa often face natural disasters due to
- A Cyclones B Earthquakes
C Landslides D Tornadoes
69. Who was the founder of Nanda Empire in Magadha
- A Dhana Nanda B Mahendra
C Mahapadma Nanda D Rashtrapala
70. What is laughing gas?
- A Carbon monoxide B Hydrogen peroxide
C Nitrous Oxide D Sulphur dioxide
71. Which state is irrigated by Ganga canal?
- A Rajasthan B West Bengal
C Bihar D Uttar Pradesh
72. The Fuego volcano has recently erupted in which country?

- A Mexico
 C Egypt
 73. Who is the author of 'Tom Sawyer'?
 A Leo Tolstoy
 C Mark Twain
 74. Which of the following is the lightest metal?
 A Lead
 C Mercury
 75. Which country hosted the 11th edition of Geo Intelligence Asia 2018?
 A Nepal
 C Vietnam
 76. Arrange the words given below in a meaningful sequence.
 1. Word 2. Paragraph 3. Sentence 4. Letters 5. Phrase
 A 4,1,5,2,3
 C 4,2,5,1,3
 77. Select a suitable figure from the four alternatives that would complete the figure matrix.



- A 1
 C 3
 78. A. There are five friends.
 B. They are standing in a row facing south.
 C. Jayesh is to the immediate right to Alok.
 D. Pramod is between Bhagat and Subodh.
 E. Subodh is between Jayesh and Pramod.
 Who is at the extreme left end ?
 A Jayesh
 C Alok
 B Subodh
 D Bhagat
 79. Find the number of triangles in the given figure.

 A 18
 C 20
 B 24
 D 27
 80. Choose the correct alternative that will continue the pattern and the replace the question mark in given sequence.
 5, 13, 25, 41, ?

98. Should India encourage exports, when most things are insufficient for internal use itself?
Arguments:

- i. Yes. We have to earn foreign exchange to pay for our imports.
- ii. No. Even selective encouragement would lead to shortages.

A Only argument I is strong

B Either I or II is strong

C Only argument II is strong

D Both I and II are strong

99. Class A has a higher enrollment than Class B.

Class C has a lower enrollment than Class B.

Class A has a lower enrollment than Class C.

If the first two statements are true, the third statement is

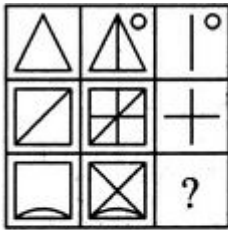
A True

B Uncertain

C False

D None of these

100. Select a suitable figure from the four alternatives that would complete the figure matrix.



(1) (2) (3) (4)

A 1

B 2

C 3

D 4