

Student Assessment Test (oral) -May 2019
Class-I
Subject-Mathematics

Time: 45 Minutes

Marks: 10

-
- Note:** 1. All questions are compulsory.
2. Each question carries 1 mark.
3. Teacher will speak the questions loudly and slowly but no hint or Clue will be given in any manner.
-

1. Children, look at the pictures and tell which one is bigger animal.



2. Children, look at the pictures and put your figure on smaller leaf.



3. Children, look these pictures and tell me the smallest fruit.




4. Children, look at the pictures and choose the pot on the top.




5. Children, look these pictures and tell the bird nearer to home.



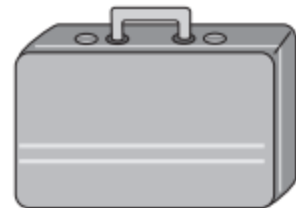
6. Children, look at the pictures and put your finger on the tree nearest to the bird.



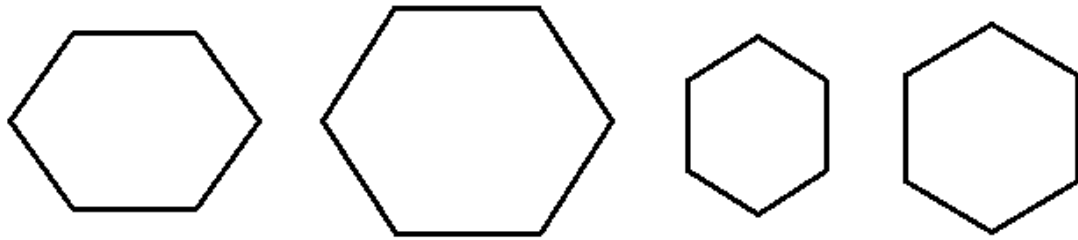
7. Look children, there are some objects, make pair of similar shapes.



8. Children, Look at the pictures and tell which one can roll.

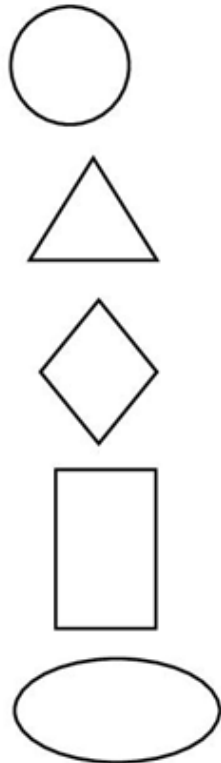


9. Children, look at the pictures and choose the smallest shape.



10. Look children, there are some shapes, make pair of similar shapes.

Column I



Column II

